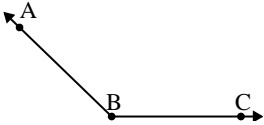




Risolvi ogni problema.

**Risposte**

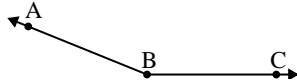
1)



Quale risposta  
corrisponde a  $\angle ABC$ ?

- A.  $32^\circ$
- B.  $112^\circ$
- C.  $174^\circ$
- D.  $136^\circ$

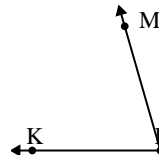
2)



Quale risposta  
corrisponde a  $\angle ABC$ ?

- A.  $49^\circ$
- B.  $131^\circ$
- C.  $4^\circ$
- D.  $158^\circ$

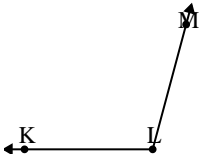
3)



Quale risposta  
corrisponde a  $\angle KLM$ ?

- A.  $74^\circ$
- B.  $43^\circ$
- C.  $103^\circ$
- D.  $3^\circ$

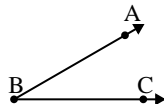
4)



Quale risposta  
corrisponde a  $\angle KLM$ ?

- A.  $105^\circ$
- B.  $138^\circ$
- C.  $67^\circ$
- D.  $42^\circ$

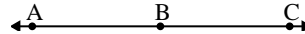
5)



Quale risposta  
corrisponde a  $\angle ABC$ ?

- A.  $78^\circ$
- B.  $145^\circ$
- C.  $30^\circ$
- D.  $1^\circ$

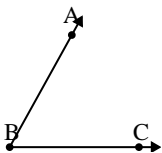
6)



Quale risposta  
corrisponde a  $\angle ABC$ ?

- A.  $143^\circ$
- B.  $86^\circ$
- C.  $14^\circ$
- D.  $180^\circ$

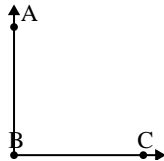
7)



Quale risposta  
corrisponde a  $\angle ABC$ ?

- A.  $159^\circ$
- B.  $12^\circ$
- C.  $97^\circ$
- D.  $61^\circ$

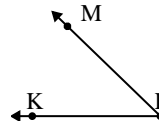
8)



Quale risposta  
corrisponde a  $\angle ABC$ ?

- A.  $143^\circ$
- B.  $90^\circ$
- C.  $165^\circ$
- D.  $2^\circ$

9)



Quale risposta  
corrisponde a  $\angle KLM$ ?

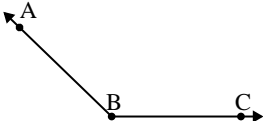
- A.  $114^\circ$
- B.  $23^\circ$
- C.  $44^\circ$
- D.  $74^\circ$

1. \_\_\_\_\_
2. \_\_\_\_\_
3. \_\_\_\_\_
4. \_\_\_\_\_
5. \_\_\_\_\_
6. \_\_\_\_\_
7. \_\_\_\_\_
8. \_\_\_\_\_
9. \_\_\_\_\_



Risolvi ogni problema.

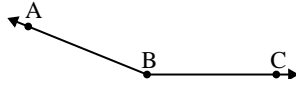
1)



Quale risposta  
corrisponde a  $\angle ABC$ ?

- A.  $32^\circ$
- B.  $112^\circ$
- C.  $174^\circ$
- D.  $136^\circ$

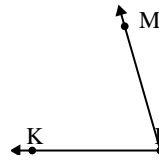
2)



Quale risposta  
corrisponde a  $\angle ABC$ ?

- A.  $49^\circ$
- B.  $131^\circ$
- C.  $4^\circ$
- D.  $158^\circ$

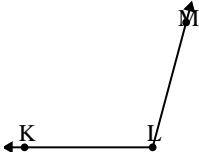
3)



Quale risposta  
corrisponde a  $\angle KLM$ ?

- A.  $74^\circ$
- B.  $43^\circ$
- C.  $103^\circ$
- D.  $3^\circ$

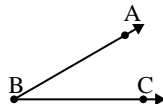
4)



Quale risposta  
corrisponde a  $\angle KLM$ ?

- A.  $105^\circ$
- B.  $138^\circ$
- C.  $67^\circ$
- D.  $42^\circ$

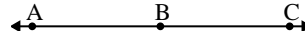
5)



Quale risposta  
corrisponde a  $\angle ABC$ ?

- A.  $78^\circ$
- B.  $145^\circ$
- C.  $30^\circ$
- D.  $1^\circ$

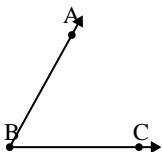
6)



Quale risposta  
corrisponde a  $\angle ABC$ ?

- A.  $143^\circ$
- B.  $86^\circ$
- C.  $14^\circ$
- D.  $180^\circ$

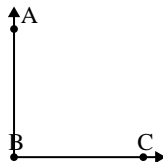
7)



Quale risposta  
corrisponde a  $\angle ABC$ ?

- A.  $159^\circ$
- B.  $12^\circ$
- C.  $97^\circ$
- D.  $61^\circ$

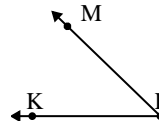
8)



Quale risposta  
corrisponde a  $\angle ABC$ ?

- A.  $143^\circ$
- B.  $90^\circ$
- C.  $165^\circ$
- D.  $2^\circ$

9)



Quale risposta  
corrisponde a  $\angle KLM$ ?

- A.  $114^\circ$
- B.  $23^\circ$
- C.  $44^\circ$
- D.  $74^\circ$

**Risposte**

1. **D**
2. **D**
3. **A**
4. **A**
5. **C**
6. **D**
7. **D**
8. **B**
9. **C**