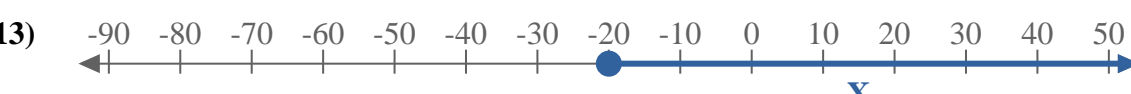
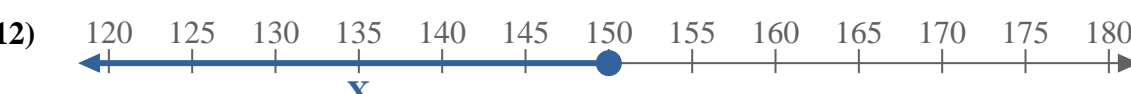
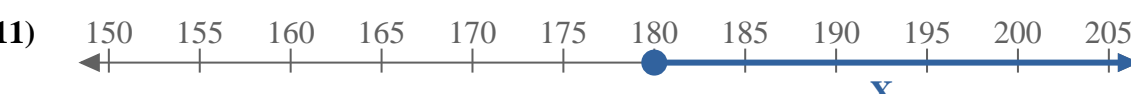
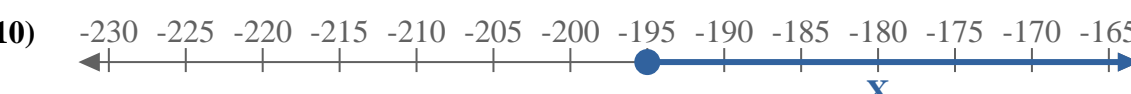
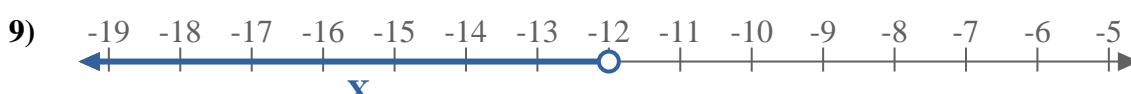
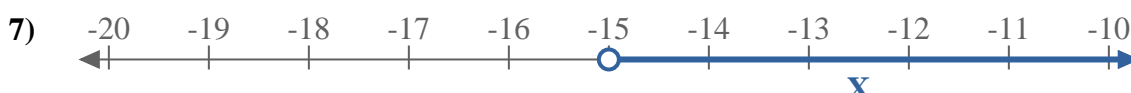
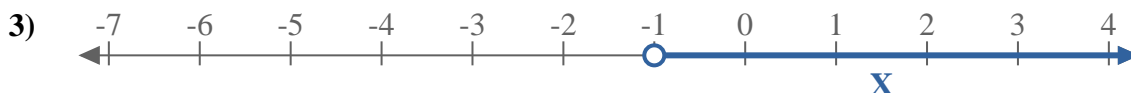
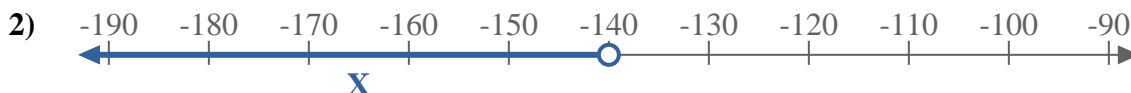
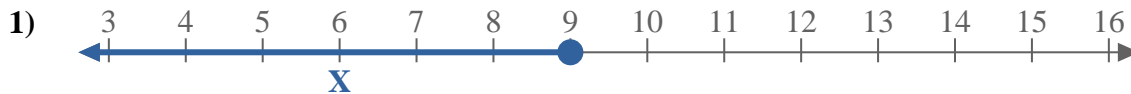
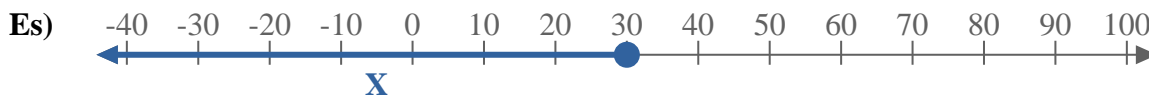




Scrivi le disuguaglianze che corrispondano ad ogni linea numerata.



**Risposte**

Es.  $X \leq 30$

1. \_\_\_\_\_

2. \_\_\_\_\_

3. \_\_\_\_\_

4. \_\_\_\_\_

5. \_\_\_\_\_

6. \_\_\_\_\_

7. \_\_\_\_\_

8. \_\_\_\_\_

9. \_\_\_\_\_

10. \_\_\_\_\_

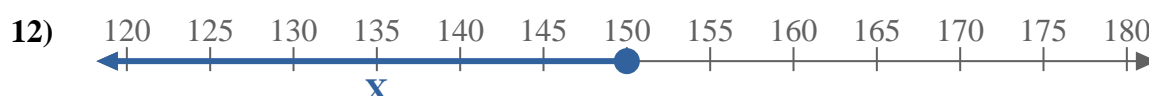
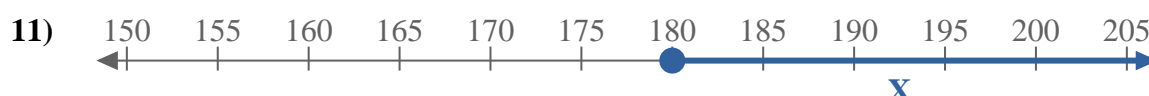
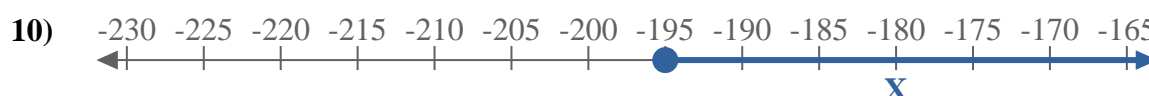
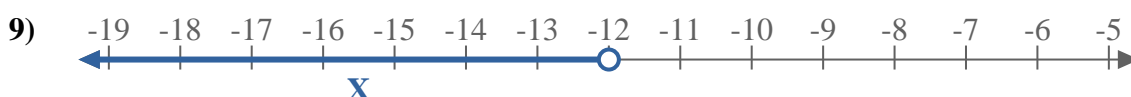
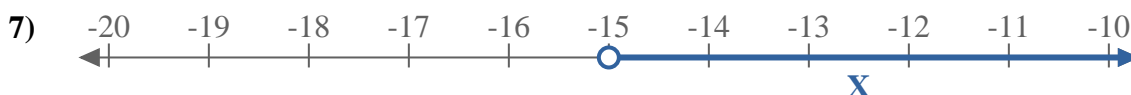
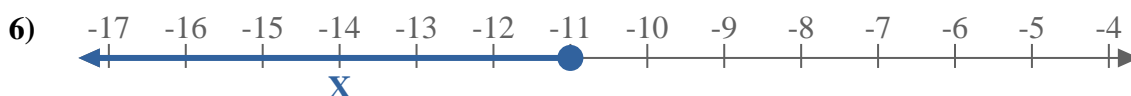
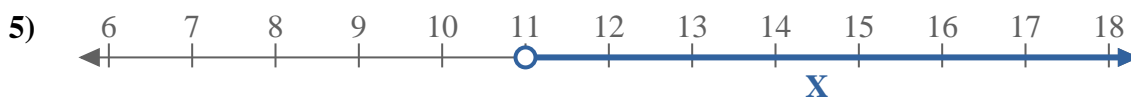
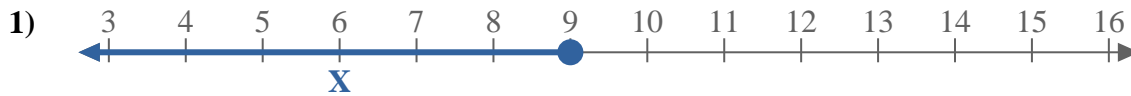
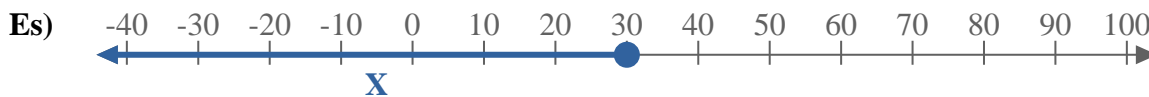
11. \_\_\_\_\_

12. \_\_\_\_\_

13. \_\_\_\_\_



Scrivi le disuguaglianze che corrispondano ad ogni linea numerata.



**Risposte**

Es.  $X \leq 30$

1.  $X \leq 9$

2.  $X < -140$

3.  $X > -1$

4.  $X > 3$

5.  $X > 11$

6.  $X \leq -11$

7.  $X > -15$

8.  $X > 5$

9.  $X < -12$

10.  $X \geq -195$

11.  $X \geq 180$

12.  $X \leq 150$

13.  $X \geq -20$