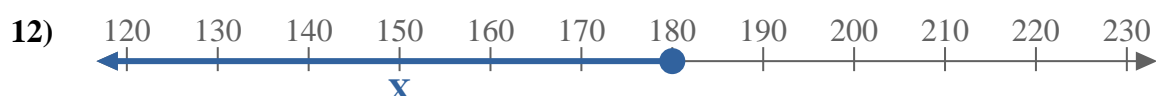
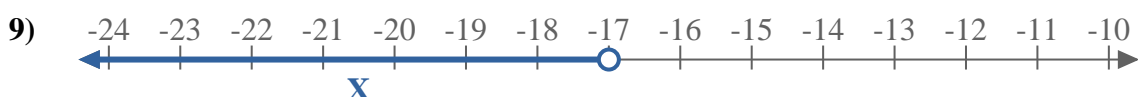
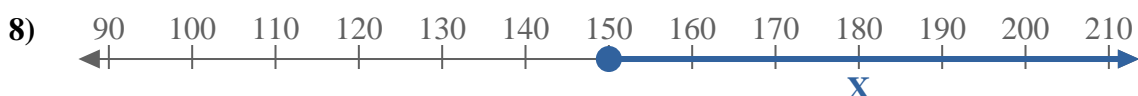
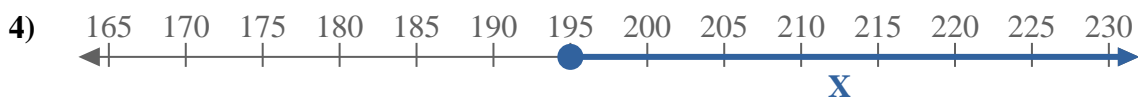
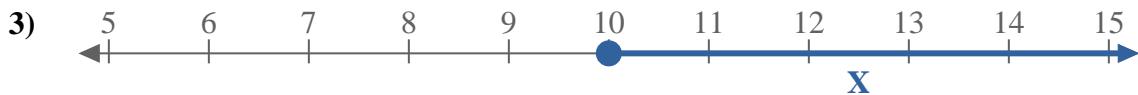
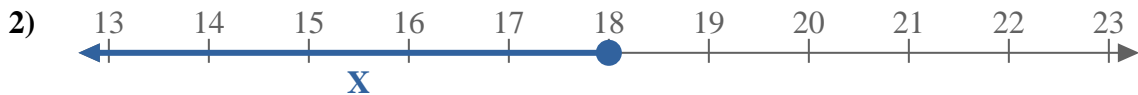
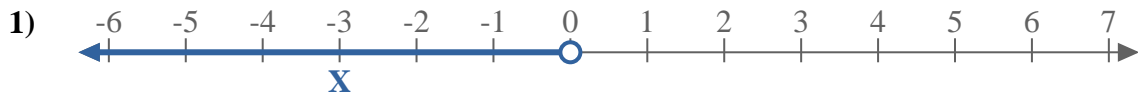
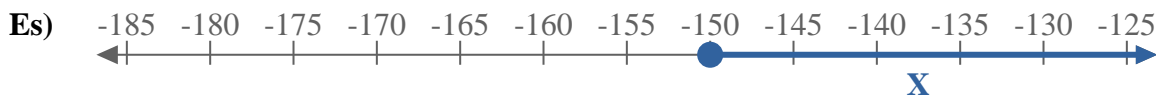




Scrivi le disuguaglianze che corrispondano ad ogni linea numerata.



Risposte

Es. $X \geq -150$

1. _____

2. _____

3. _____

4. _____

5. _____

6. _____

7. _____

8. _____

9. _____

10. _____

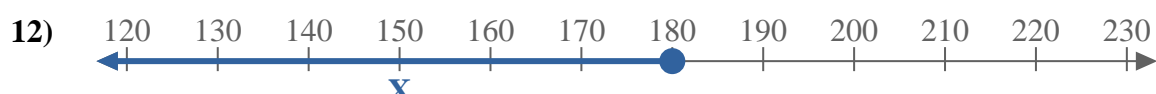
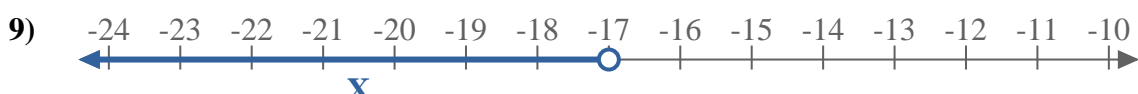
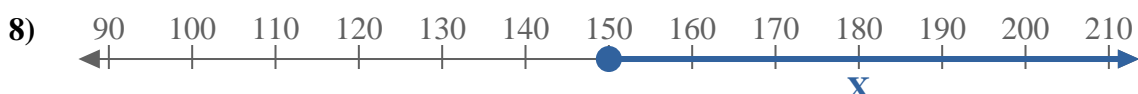
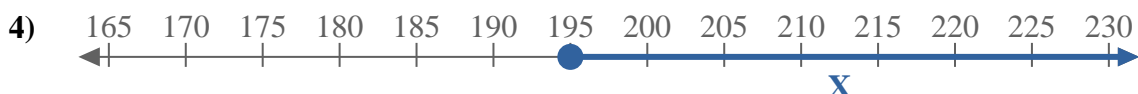
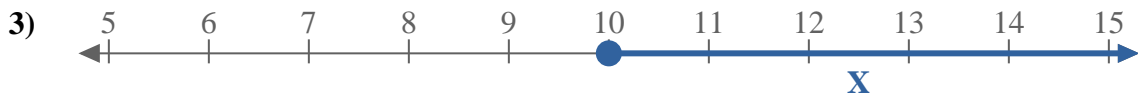
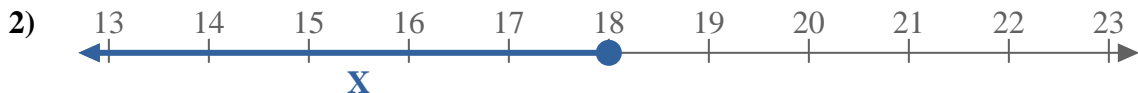
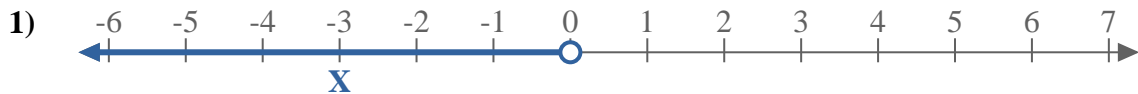
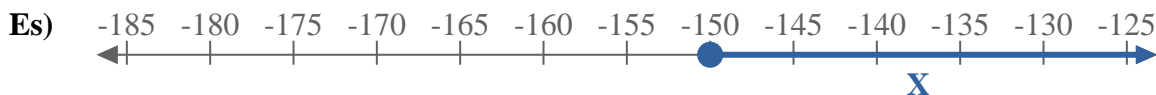
11. _____

12. _____

13. _____



Scrivi le disuguaglianze che corrispondano ad ogni linea numerata.



Risposte

Es. $X \geq -150$

1. $X < 0$

2. $X \leq 18$

3. $X \geq 10$

4. $X \geq 195$

5. $X < 10$

6. $X \leq 130$

7. $X \leq -8$

8. $X \geq 150$

9. $X < -17$

10. $X \geq 14$

11. $X < -8$

12. $X \leq 180$

13. $X > -55$