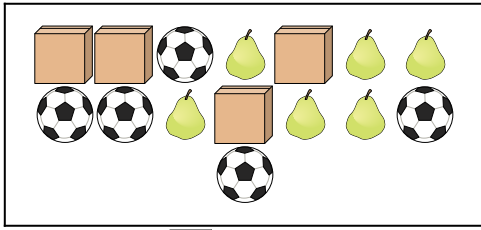






Confronta il numero delle forme.

Risposte

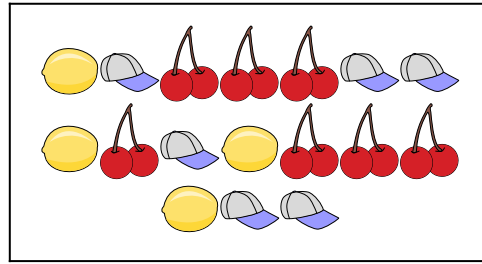
1)





Ci sono più  o più ?

- A. 
- B. 

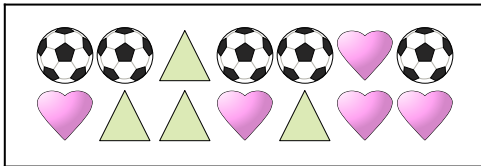
2)





Ci sono meno  o meno ?

- A. 
- B. 

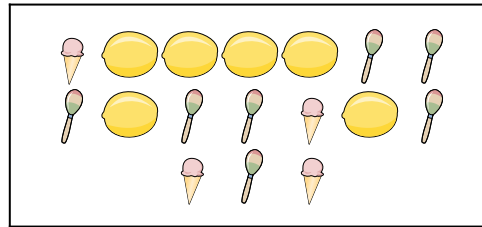
3)



Ci sono meno  o meno ?

- A. 
- B. 


4)






Ci sono meno  o meno ?

- A. 
- B. 


5)





Ci sono più  o più ?

- A. 
- B. 

6)



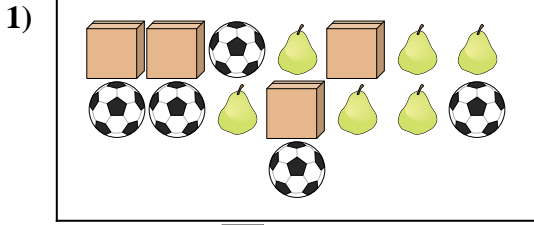
Ci sono più  o più ?

- A. 
- B. 

1. _____
2. _____
3. _____
4. _____
5. _____
6. _____

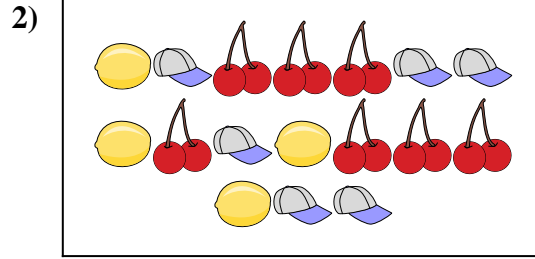


Confronta il numero delle forme.



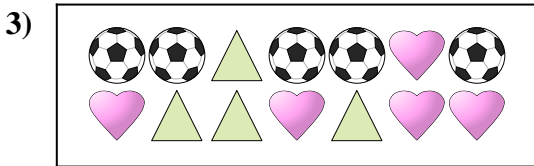
Ci sono più o più ?

- A.
- B.




Ci sono meno o meno ?

- A.
- B.




Ci sono meno o meno ?

- A.
- B.




Ci sono meno o meno ?

- A.
- B.



Ci sono più o più ?

- A.
- B.



Ci sono più o più ?

- A.
- B.

Risposte

- 1. **B**
- 2. **A**
- 3. **A**
- 4. **A**
- 5. **B**
- 6. **B**