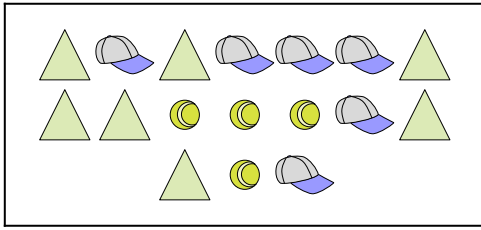






Confronta il numero delle forme.


1)





Ci sono più  o più  ?

- A. 
- B. 


2)







Ci sono meno  o meno  ?

- A. 
- B. 

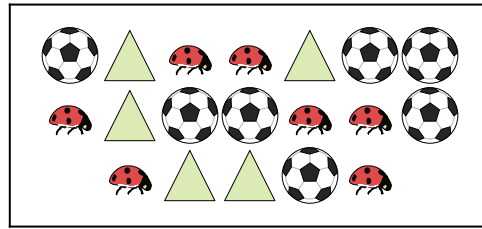
3)





Ci sono meno  o meno  ?

- A. 
- B. 


4)





Ci sono meno  o meno  ?

- A. 
- B. 


5)



Ci sono meno  o meno  ?

- A. 
- B. 

6)



Ci sono meno  o meno  ?

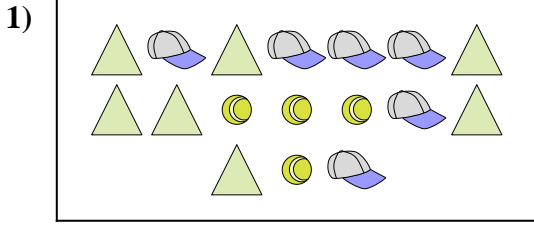
- A. 
- B. 

Risposte

- 1. _____
- 2. _____
- 3. _____
- 4. _____
- 5. _____
- 6. _____




Confronta il numero delle forme.




Ci sono più o più ?

- A.
- B.



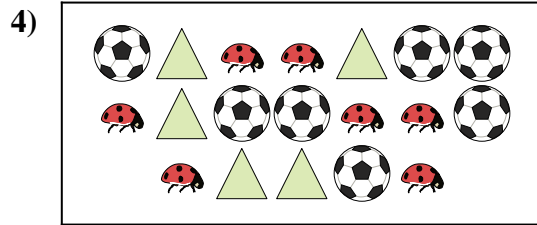
Ci sono meno o meno ?

- A.
- B.




Ci sono meno o meno ?

- A.
- B.




Ci sono meno o meno ?

- A.
- B.



Ci sono meno o meno ?

- A.
- B.



Ci sono meno o meno ?

- A.
- B.

Risposte

- 1. **A**
- 2. **A**
- 3. **A**
- 4. **A**
- 5. **A**
- 6. **A**