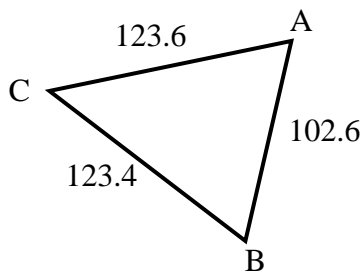


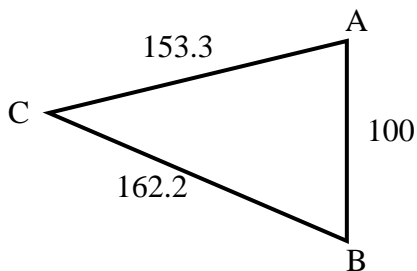


Trova la lunghezza del lato indicato.

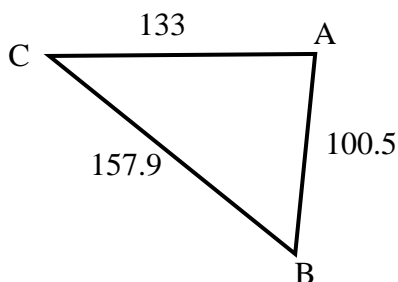
1) Trova la lunghezza del lato C.



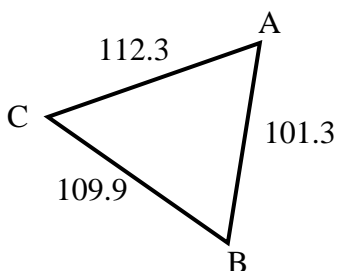
2) Trova la lunghezza del lato C.



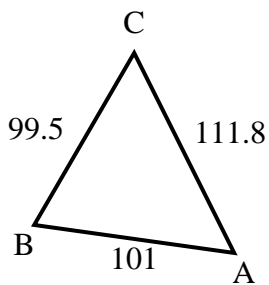
3) Trova la lunghezza del lato A.



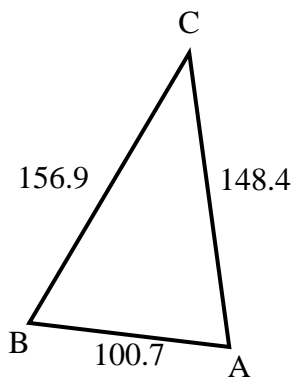
4) Trova la lunghezza del lato B.



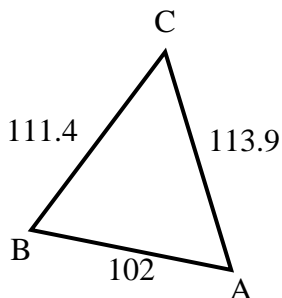
5) Trova la lunghezza del lato A.



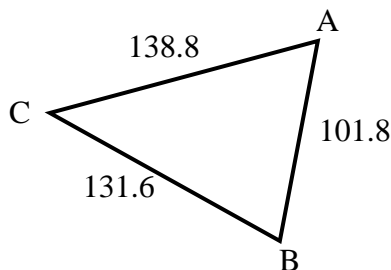
6) Trova la lunghezza del lato A.



7) Trova la lunghezza del lato A.



8) Trova la lunghezza del lato B.



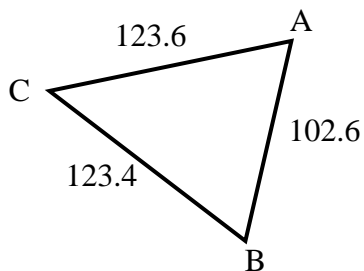
Risposte

1. _____
2. _____
3. _____
4. _____
5. _____
6. _____
7. _____
8. _____

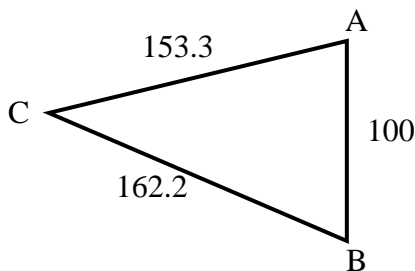


Trova la lunghezza del lato indicato.

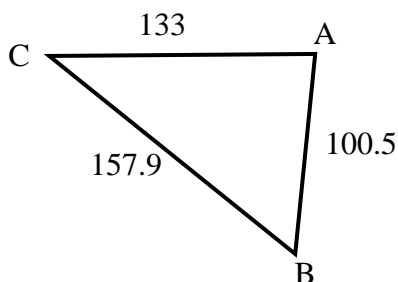
1) Trova la lunghezza del lato C.



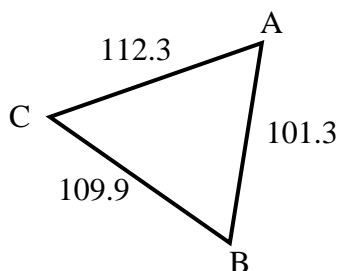
2) Trova la lunghezza del lato C.



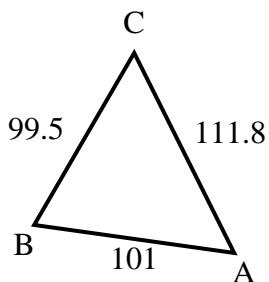
3) Trova la lunghezza del lato A.



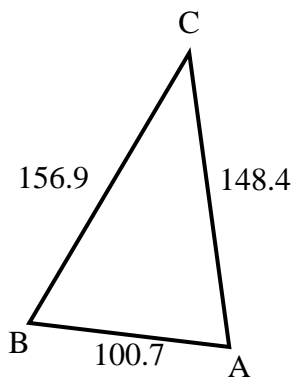
4) Trova la lunghezza del lato B.



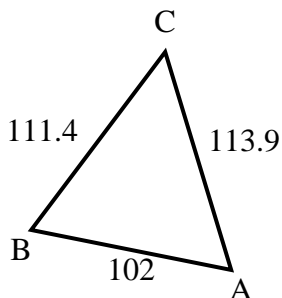
5) Trova la lunghezza del lato A.



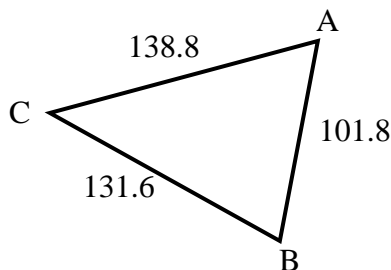
6) Trova la lunghezza del lato A.



7) Trova la lunghezza del lato A.



8) Trova la lunghezza del lato B.



Risposte

1. 102.6
2. 100
3. 157.9
4. 112.3
5. 99.5
6. 156.9
7. 111.4
8. 138.8