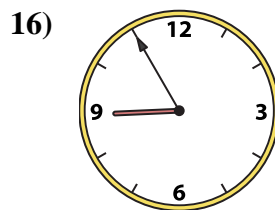
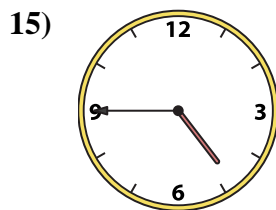
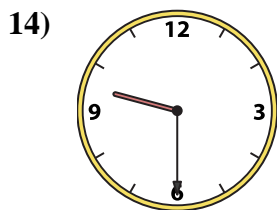

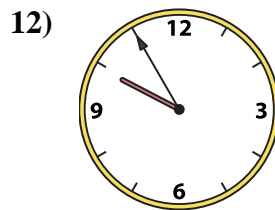
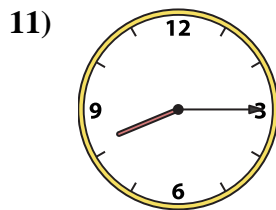
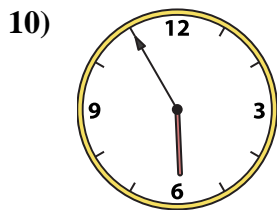
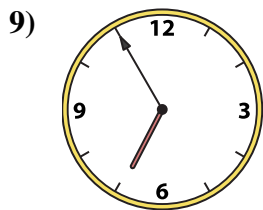
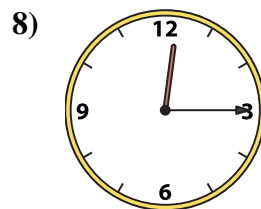
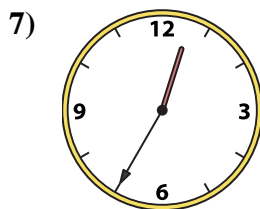
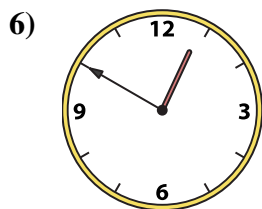

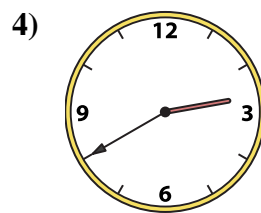
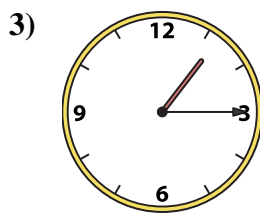
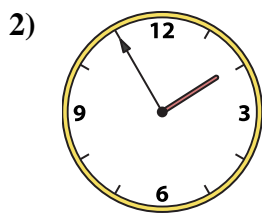
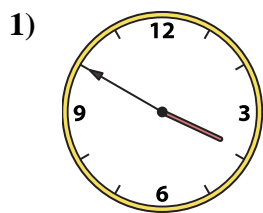




Abbina l'orologio analogico all'orologio digitale.

Risposte



A. 9:55

B. 5:55

C. 4:45

D. 11:40

E. 3:50

F. 1:55

G. 8:15

H. 1:15

I. 6:55

J. 8:55

K. 9:30

L. 12:50

M. 11:55

N. 12:15

O. 12:35

P. 2:40

1. _____

2. _____

3. _____

4. _____

5. _____

6. _____

7. _____

8. _____

9. _____

10. _____

11. _____

12. _____

13. _____

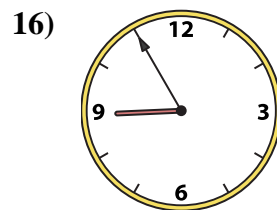
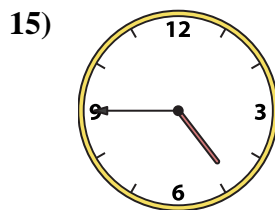
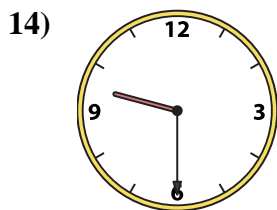

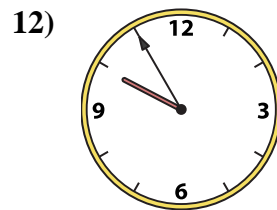
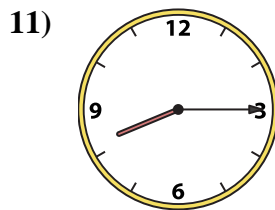
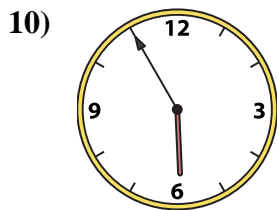
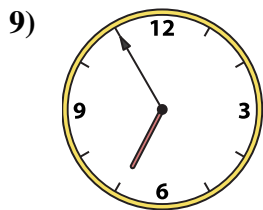
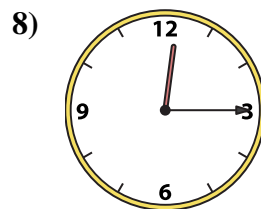
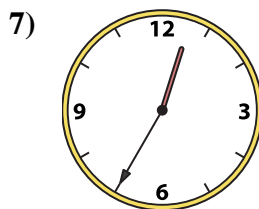
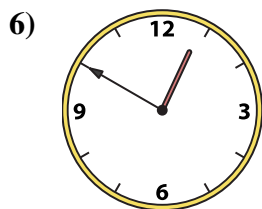

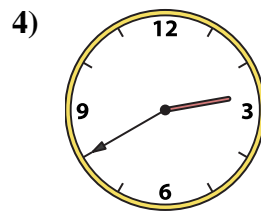
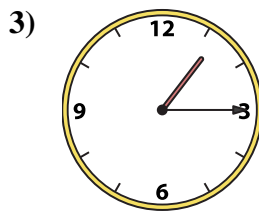
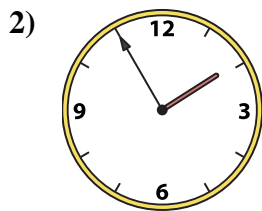
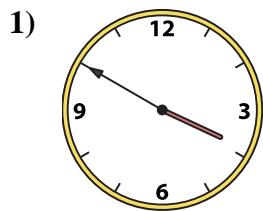
14. _____

15. _____

16. _____



Abbina l'orologio analogico all'orologio digitale.



A. 9:55

B. 5:55

C. 4:45

D. 11:40

E. 3:50

F. 1:55

G. 8:15

H. 1:15

I. 6:55

J. 8:55

K. 9:30

L. 12:50

M. 11:55

N. 12:15

O. 12:35

P. 2:40

Risposte

1. **E**

2. **F**

3. **H**

4. **P**

5. **M**

6. **L**

7. **O**

8. **N**

9. **I**

10. **B**

11. **G**

12. **A**

13. **D**

14. **K**

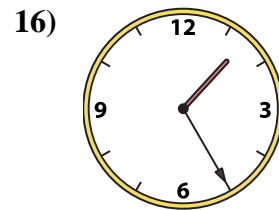
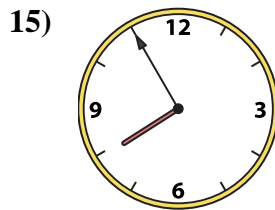
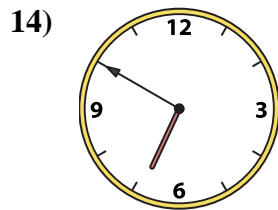
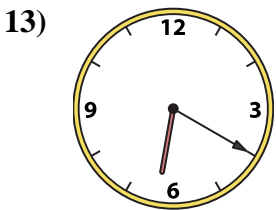
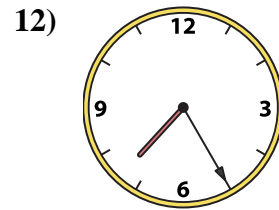
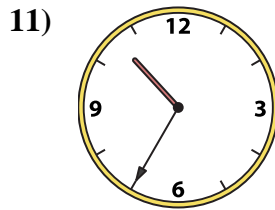
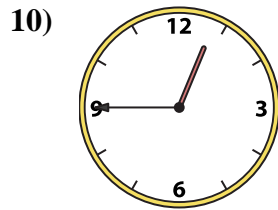
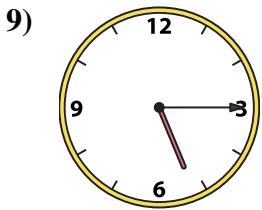
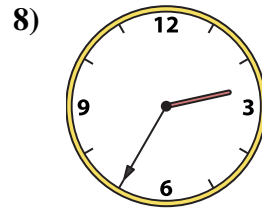
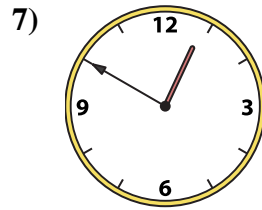
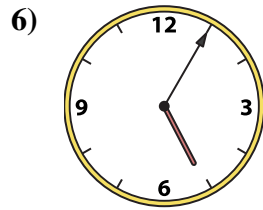
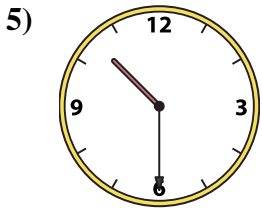
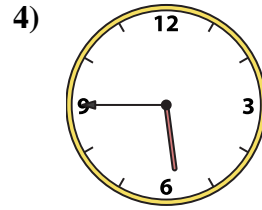
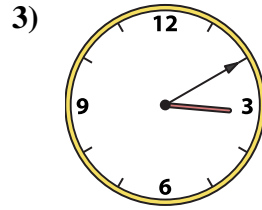
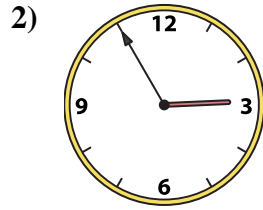

15. **C**

16. **J**



Abbina l'orologio analogico all'orologio digitale.

Risposte



1. _____
2. _____
3. _____
4. _____
5. _____
6. _____
7. _____
8. _____
9. _____
10. _____
11. _____
12. _____
13. _____
14. _____
15. _____
16. _____

A. 2:55

B. 10:30

C. 7:55

D. 6:20

E. 3:10

F. 5:45

G. 2:35

H. 1:25

I. 5:05

J. 10:35

K. 7:25

L. 12:50

M. 5:15

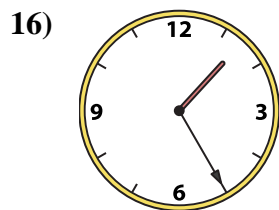
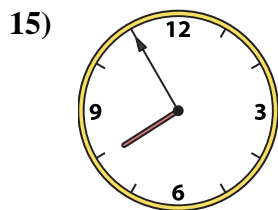
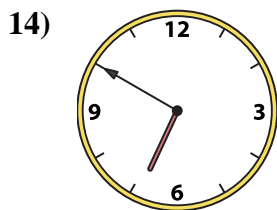
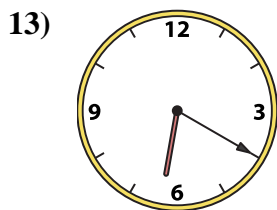
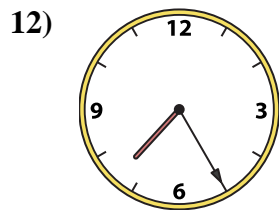
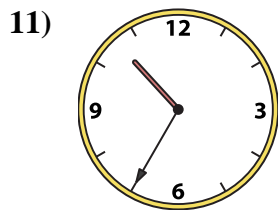
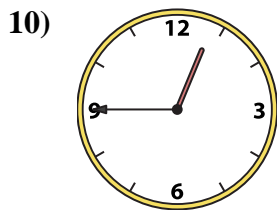
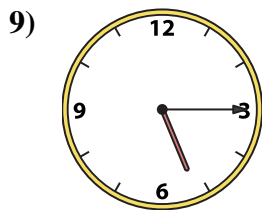
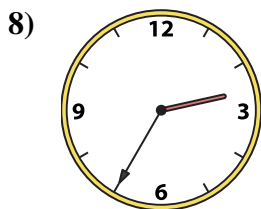
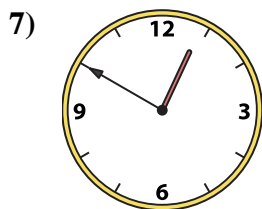
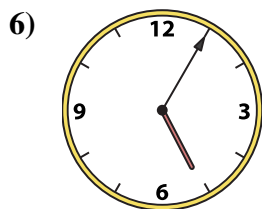

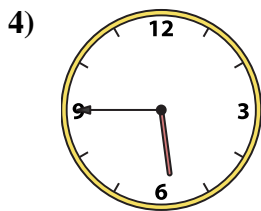
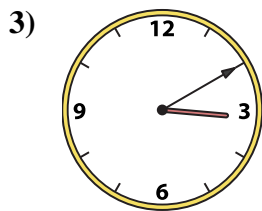
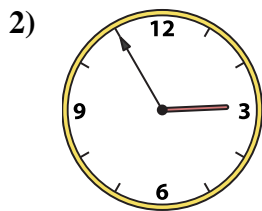
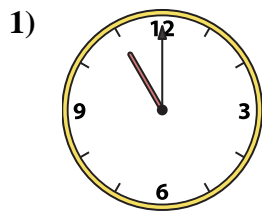
N. 12:45

O. 11:00

P. 6:50



Abbina l'orologio analogico all'orologio digitale.



A. **2:55**

B. **10:30**

C. **7:55**

D. **6:20**

E. **3:10**

F. **5:45**

G. **2:35**

H. **1:25**

I. **5:05**

J. **10:35**

K. **7:25**

L. **12:50**

M. **5:15**

N. **12:45**

O. **11:00**

P. **6:50**

Risposte

1. **O**

2. **A**

3. **E**

4. **F**

5. **B**

6. **I**

7. **L**

8. **G**

9. **M**

10. **N**

11. **J**

12. **K**

13. **D**

14. **P**

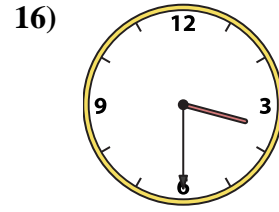
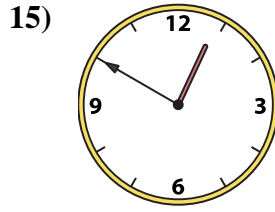
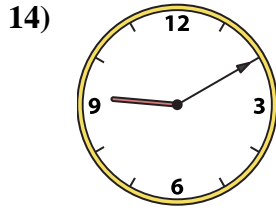
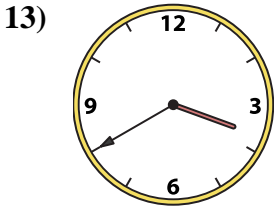
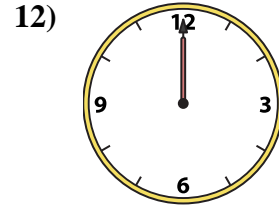
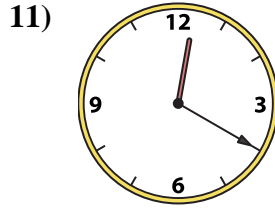
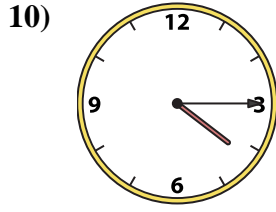
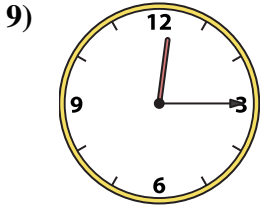
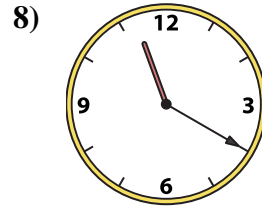
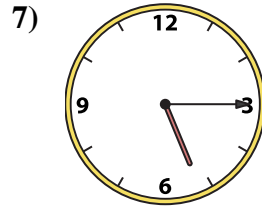
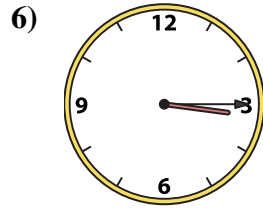
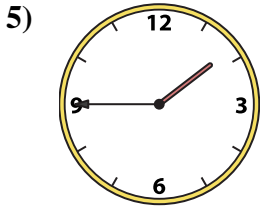
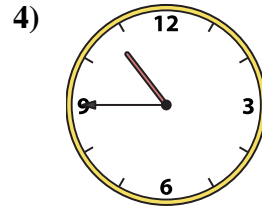
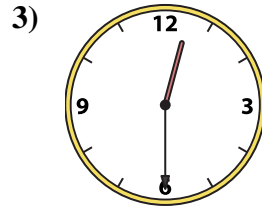
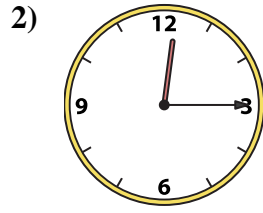
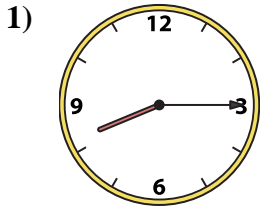
15. **C**

16. **H**



Abbina l'orologio analogico all'orologio digitale.

Risposte



A.

B.

C.

D.

E.

F.

G.

H.

I.

J.

K.

L.

M.

N.

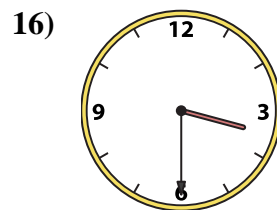
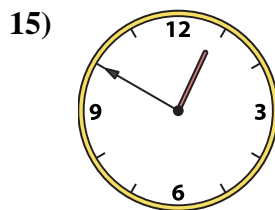
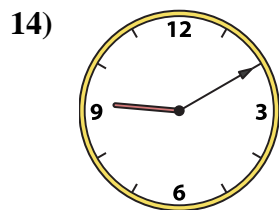
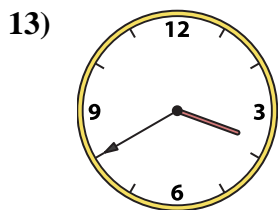
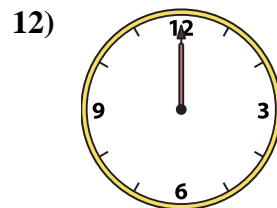
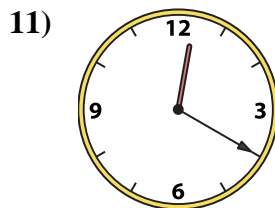
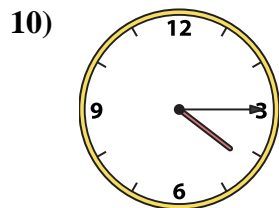
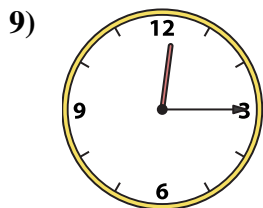

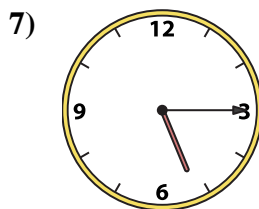
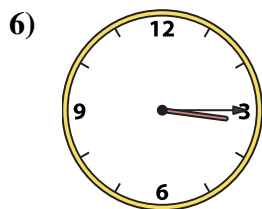

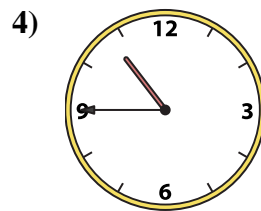
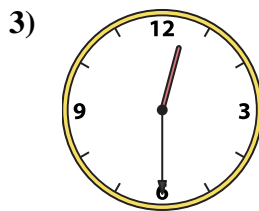
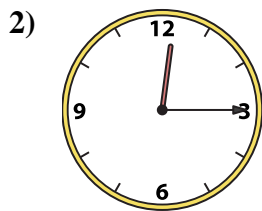
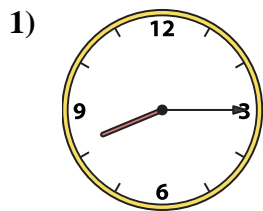
O.

P.

1. _____
2. _____
3. _____
4. _____
5. _____
6. _____
7. _____
8. _____
9. _____
10. _____
11. _____
12. _____
13. _____
14. _____
15. _____
16. _____



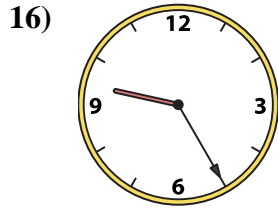
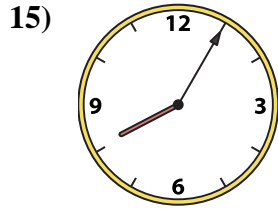
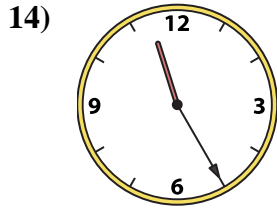
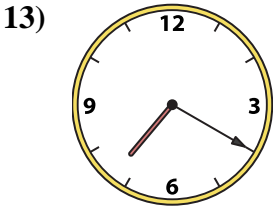
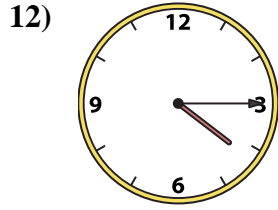
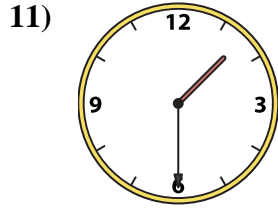
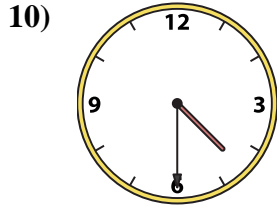
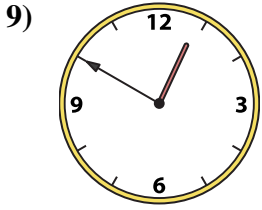
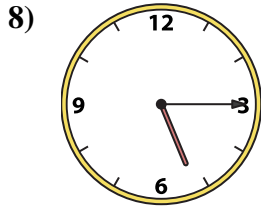
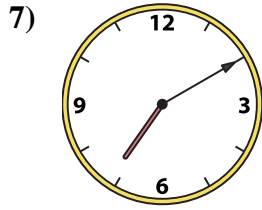
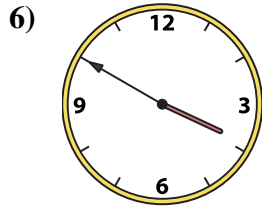

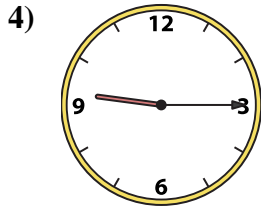

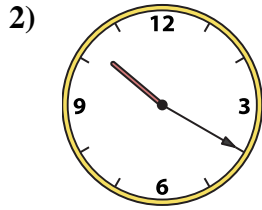
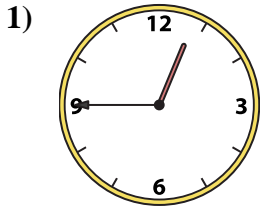
Abbina l'orologio analogico all'orologio digitale.

A. **3:40**B. **9:10**C. **12:20**D. **12:15**E. **12:00**F. **12:15**G. **10:45**H. **12:50**I. **8:15**J. **11:20**K. **5:15**L. **1:45**M. **12:30**N. **4:15**O. **3:30**P. **3:15****Risposte**1. **I**2. **D**3. **M**4. **G**5. **L**6. **P**7. **K**8. **J**9. **F**10. **N**11. **C**12. **E**13. **A**14. **B**15. **H**16. **O**



Abbina l'orologio analogico all'orologio digitale.

Risposte



A. 11:55

B. 9:25

C. 11:50

D. 3:50

E. 12:45

F. 1:30

G. 11:25

H. 7:10

I. 4:30

J. 5:15

K. 7:20

L. 10:20

M. 9:15

N. 12:50

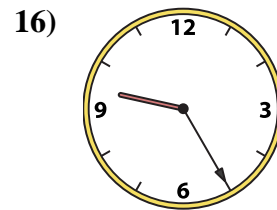
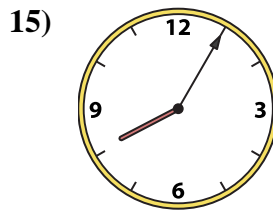
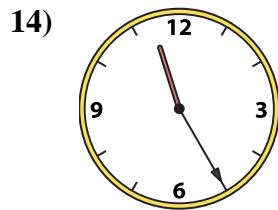
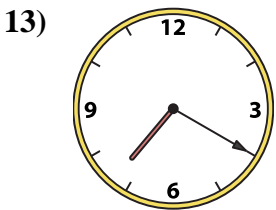
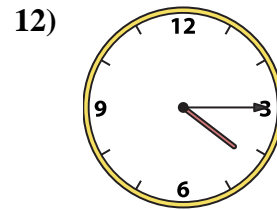
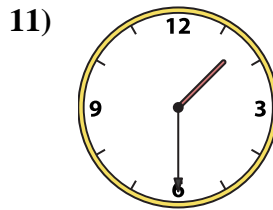
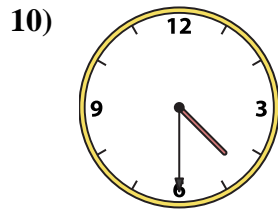
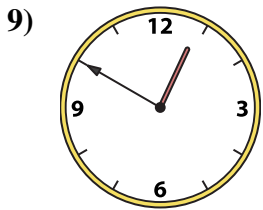
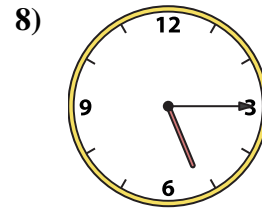
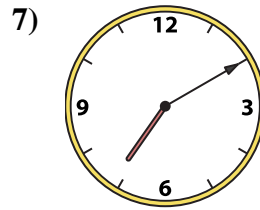
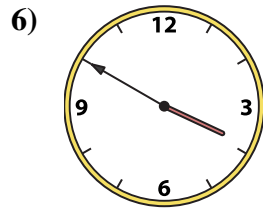
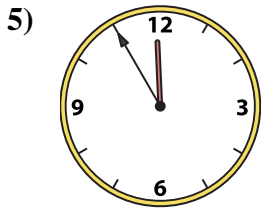
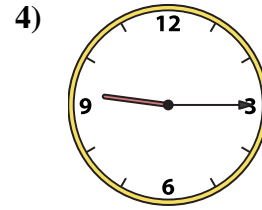
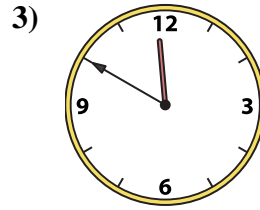
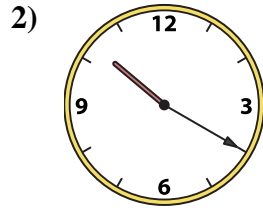
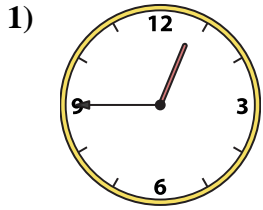
O. 4:15

P. 8:05

1. _____
2. _____
3. _____
4. _____
5. _____
6. _____
7. _____
8. _____
9. _____
10. _____
11. _____
12. _____
13. _____
14. _____
15. _____
16. _____



Abbina l'orologio analogico all'orologio digitale.



A. 11:55

B. 9:25

C. 11:50

D. 3:50

E. 12:45

F. 1:30

G. 11:25

H. 7:10

I. 4:30

J. 5:15

K. 7:20

L. 10:20

M. 9:15

N. 12:50

O. 4:15

P. 8:05

Risposte

1. **E**

2. **L**

3. **C**

4. **M**

5. **A**

6. **D**

7. **H**

8. **J**

9. **N**

10. **I**

11. **F**

12. **O**

13. **K**

14. **G**

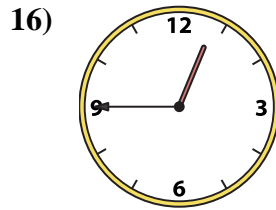
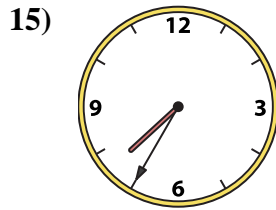
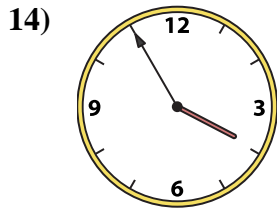
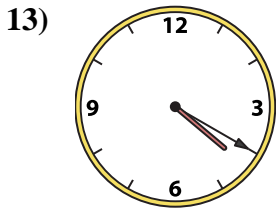
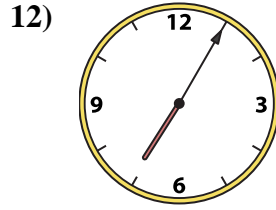
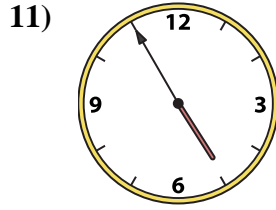
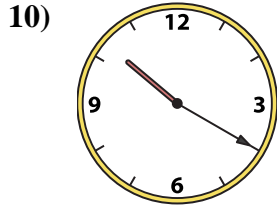
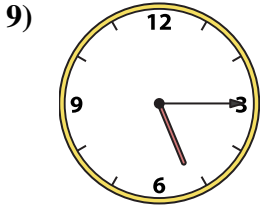
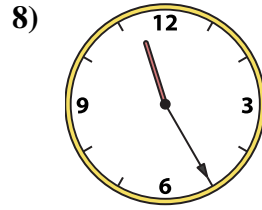
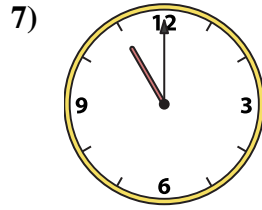
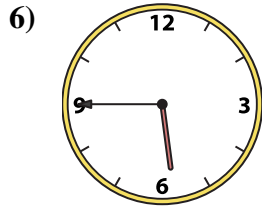
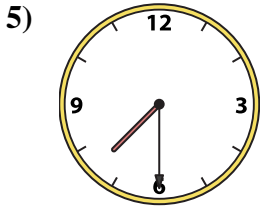
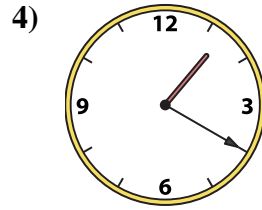
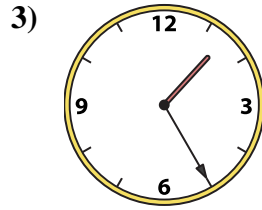
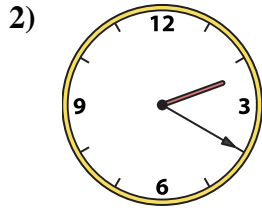

15. **P**

16. **B**



Abbina l'orologio analogico all'orologio digitale.

Risposte



A. 11:00

B. 1:20

C. 11:25

D. 5:15

E. 4:55

F. 4:20

G. 3:55

H. 5:45

I. 7:30

J. 1:00

K. 1:25

L. 12:45

M. 7:35

N. 2:20

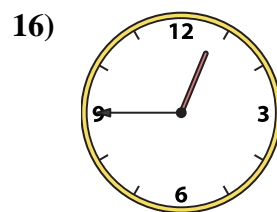
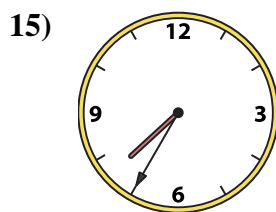
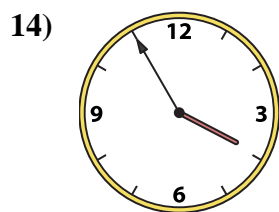
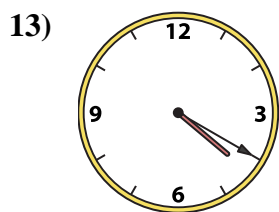
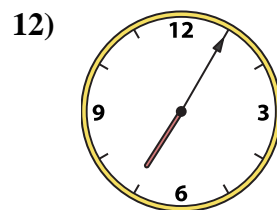
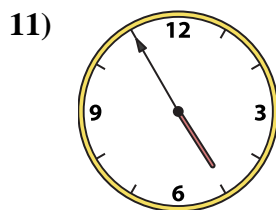
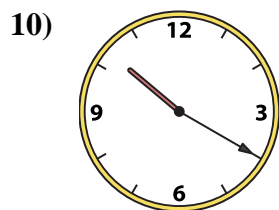
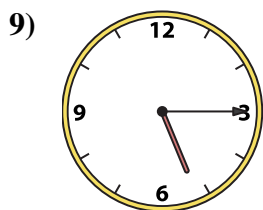
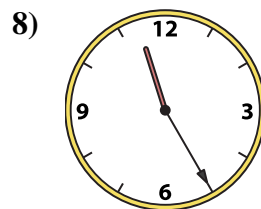
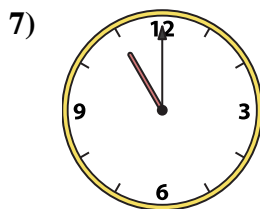
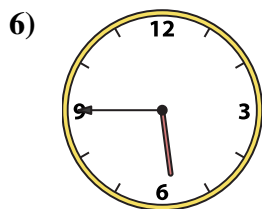
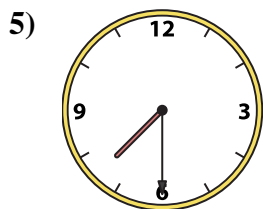
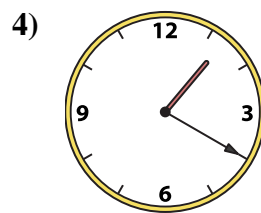
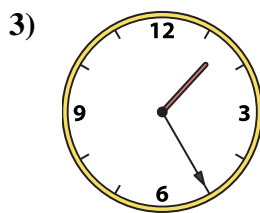
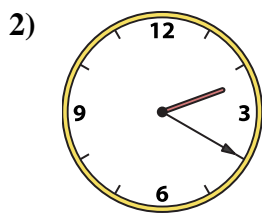
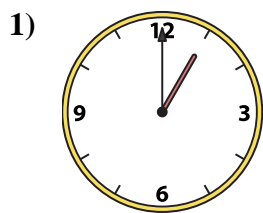
O. 10:20

P. 7:05

1. _____
2. _____
3. _____
4. _____
5. _____
6. _____
7. _____
8. _____
9. _____
10. _____
11. _____
12. _____
13. _____
14. _____
15. _____
16. _____



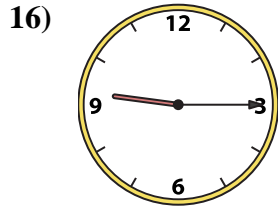
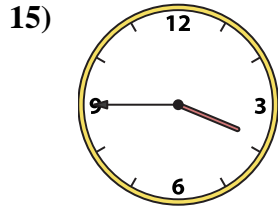
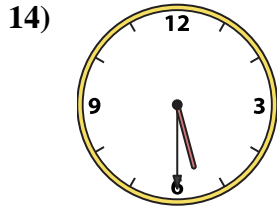
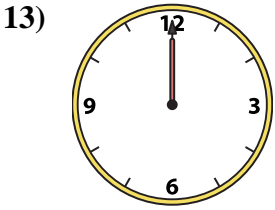
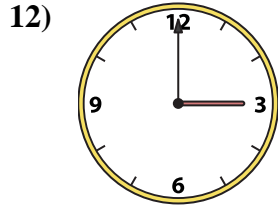
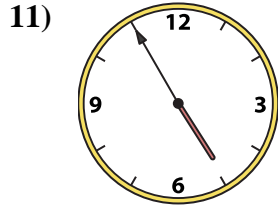
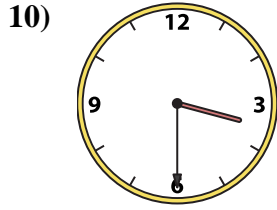
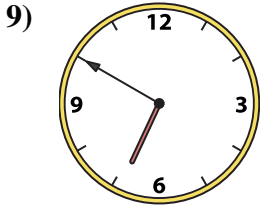
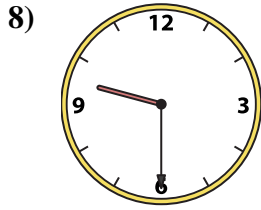
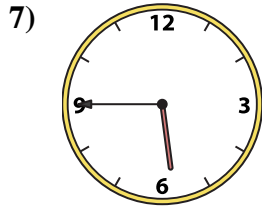

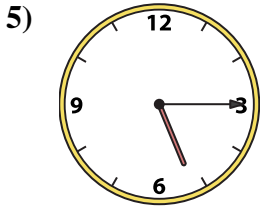
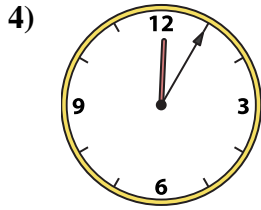

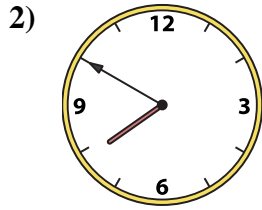

Abbina l'orologio analogico all'orologio digitale.

A. **11:00**B. **1:20**C. **11:25**D. **5:15**E. **4:55**F. **4:20**G. **3:55**H. **5:45**I. **7:30**J. **1:00**K. **1:25**L. **12:45**M. **7:35**N. **2:20**O. **10:20**P. **7:05****Risposte**1. **J**2. **N**3. **K**4. **B**5. **I**6. **H**7. **A**8. **C**9. **D**10. **O**11. **E**12. **P**13. **F**14. **G**15. **M**16. **L**



Abbina l'orologio analogico all'orologio digitale.

Risposte



1. _____
2. _____
3. _____
4. _____
5. _____
6. _____
7. _____
8. _____
9. _____
10. _____
11. _____
12. _____
13. _____
14. _____
15. _____
16. _____

A. 5:45

B. 3:00

C. 3:45

D. 12:05

E. 3:30

F. 6:50

G. 7:50

H. 12:00

I. 9:30

J. 3:55

K. 4:55

L. 8:55

M. 5:15

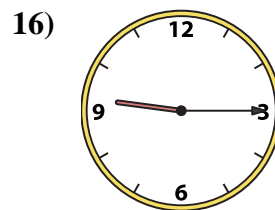
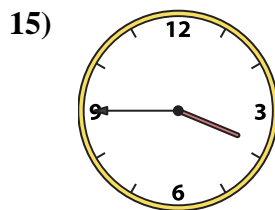
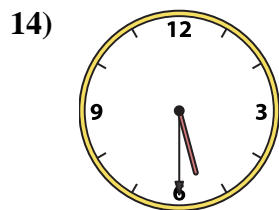
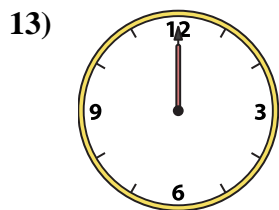
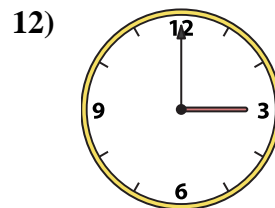
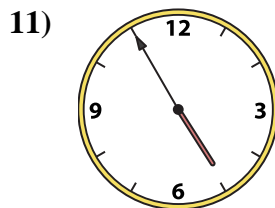
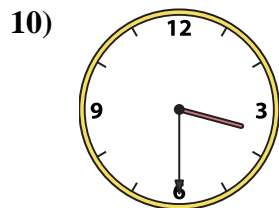
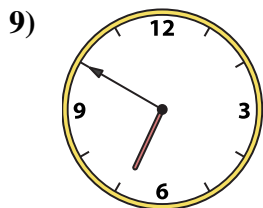
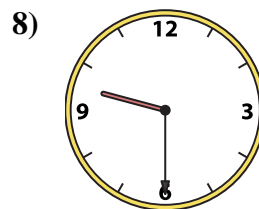
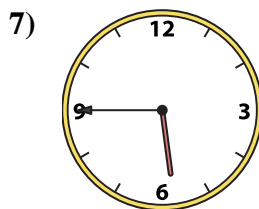

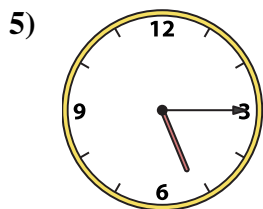
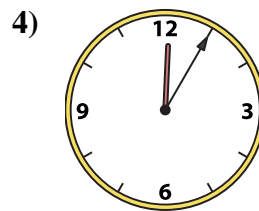
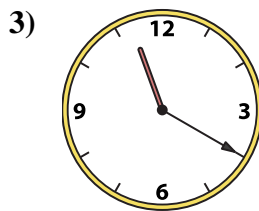
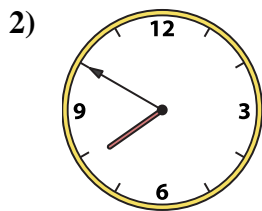
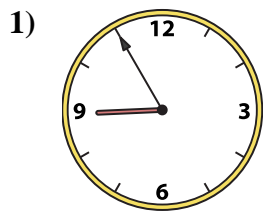
N. 9:15

O. 11:20

P. 5:30



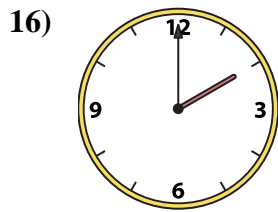
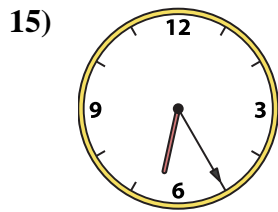
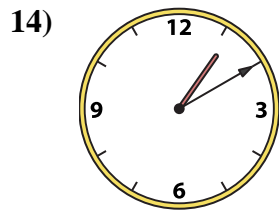
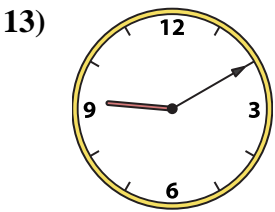
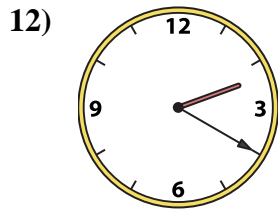
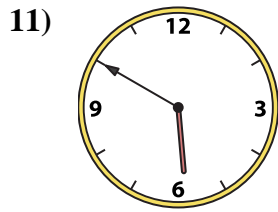
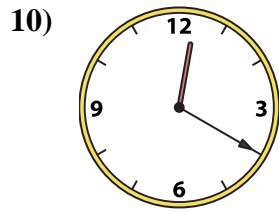
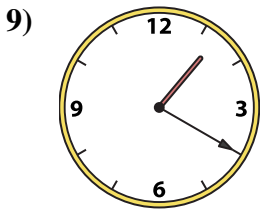
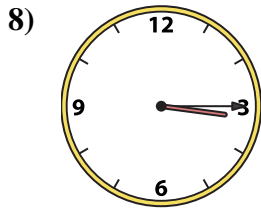
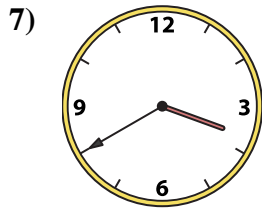
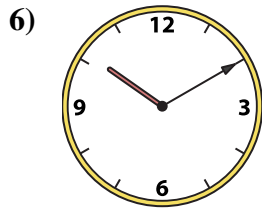
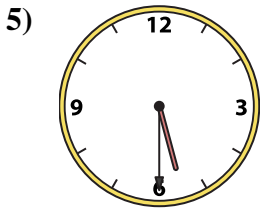
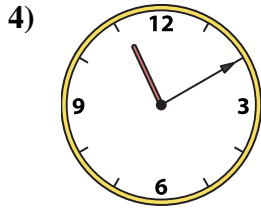
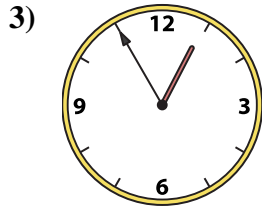
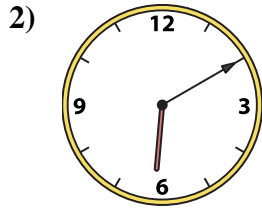
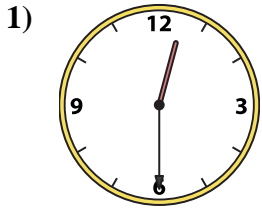
Abbina l'orologio analogico all'orologio digitale.

A. **5:45**B. **3:00**C. **3:45**D. **12:05**E. **3:30**F. **6:50**G. **7:50**H. **12:00**I. **9:30**J. **3:55**K. **4:55**L. **8:55**M. **5:15**N. **9:15**O. **11:20**P. **5:30****Risposte**1. **L**2. **G**3. **O**4. **D**5. **M**6. **J**7. **A**8. **I**9. **F**10. **E**11. **K**12. **B**13. **H**14. **P**15. **C**16. **N**



Abbina l'orologio analogico all'orologio digitale.

Risposte



A. **10:10**

B. **3:40**

C. **1:20**

D. **12:30**

E. **12:20**

F. **3:15**

G. **1:10**

H. **6:10**

I. **5:50**

J. **2:00**

K. **5:30**

L. **6:25**

M. **12:55**

N. **11:10**

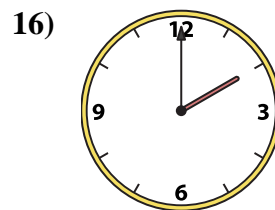
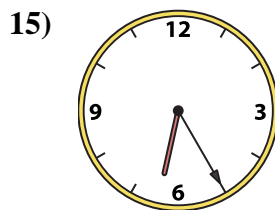
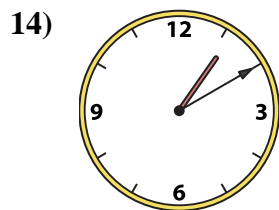
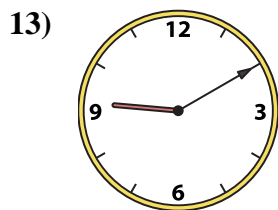
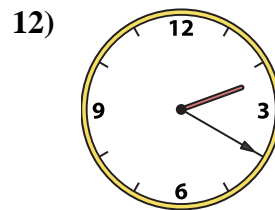
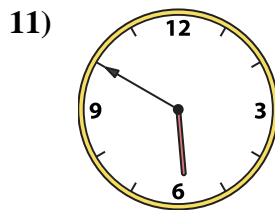
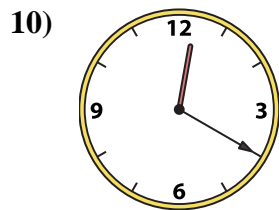
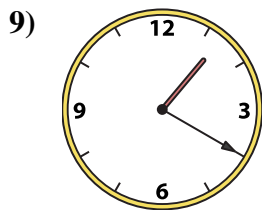
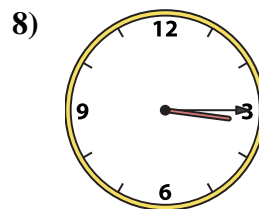
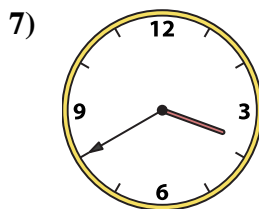
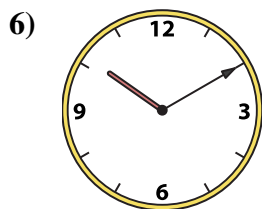
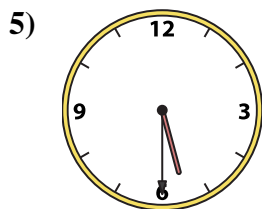
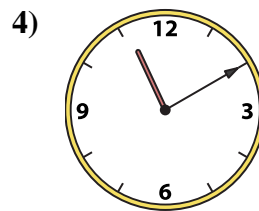
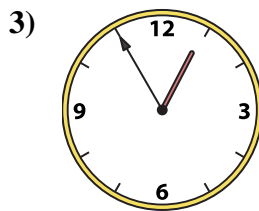
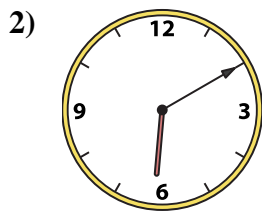
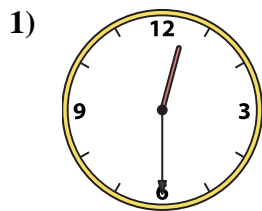
O. **9:10**

P. **2:20**

1. _____
2. _____
3. _____
4. _____
5. _____
6. _____
7. _____
8. _____
9. _____
10. _____
11. _____
12. _____
13. _____
14. _____
15. _____
16. _____



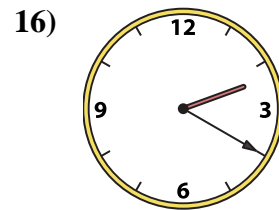
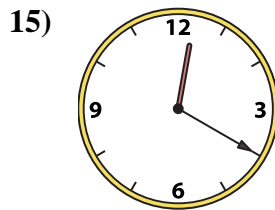
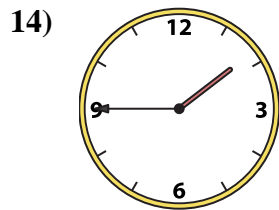
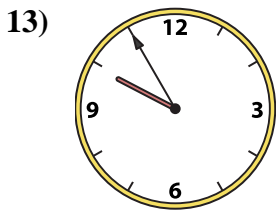
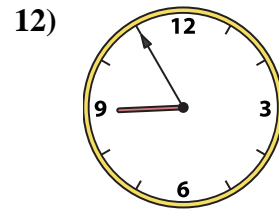
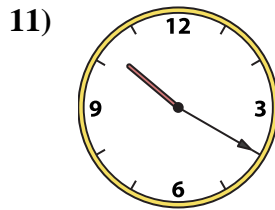
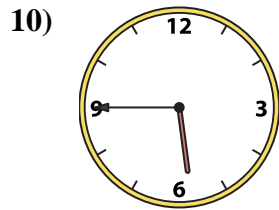
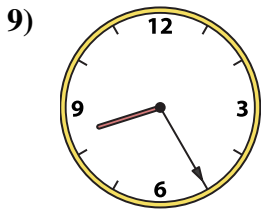
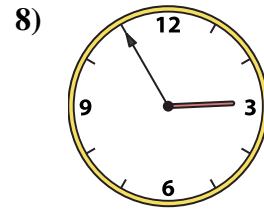
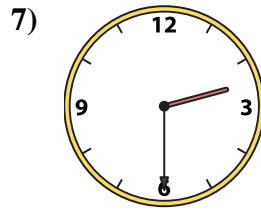
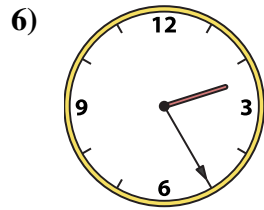
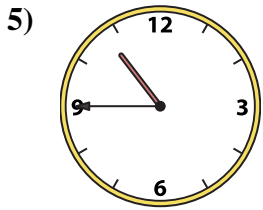
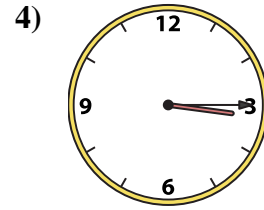
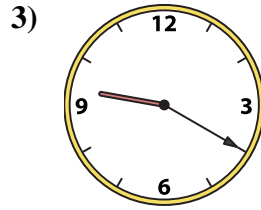
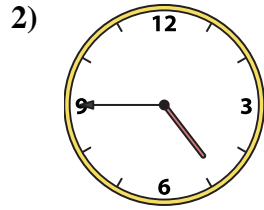
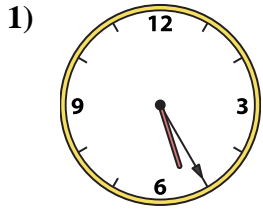
Abbina l'orologio analogico all'orologio digitale.

A. B. C. D. E. F. G. H. I. J. K. L. M. N. O. P. **Risposte**1. **D** 2. **H** 3. **M** 4. **N** 5. **K** 6. **A** 7. **B** 8. **F** 9. **C** 10. **E** 11. **I** 12. **P** 13. **O** 14. **G** 15. **L** 16. **J**



Abbina l'orologio analogico all'orologio digitale.

Risposte



1. _____
2. _____
3. _____
4. _____
5. _____
6. _____
7. _____
8. _____
9. _____
10. _____
11. _____
12. _____
13. _____
14. _____
15. _____
16. _____

A. 12:20

B. 8:25

C. 1:45

D. 3:15

E. 2:55

F. 4:45

G. 2:20

H. 2:25

I. 10:45

J. 9:20

K. 10:20

L. 5:45

M. 2:30

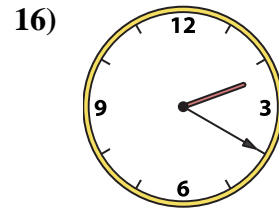
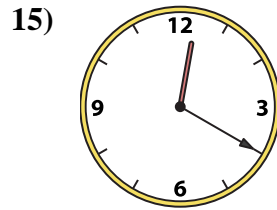
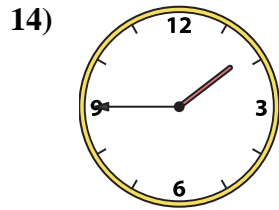
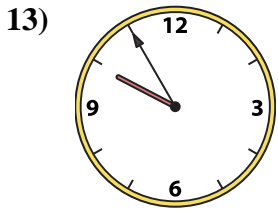
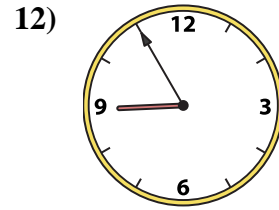
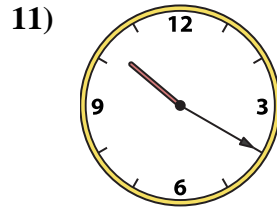
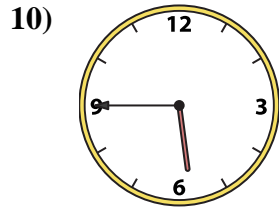
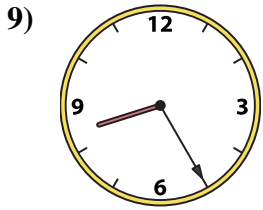
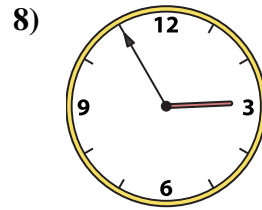
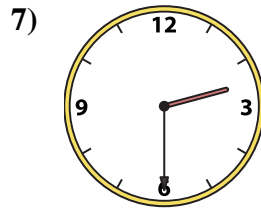
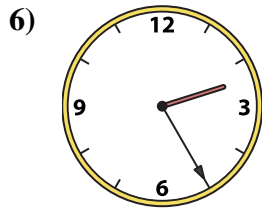
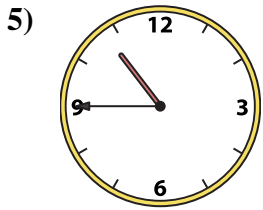
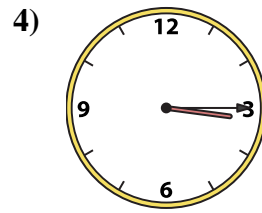
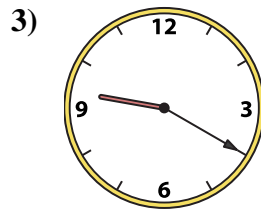
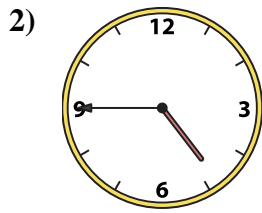
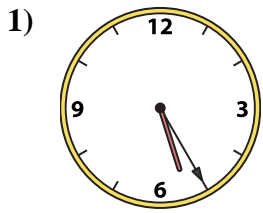
N. 9:55

O. 8:55

P. 5:25



Abbina l'orologio analogico all'orologio digitale.



A. **12:20**

B. **8:25**

C. **1:45**

D. **3:15**

E. **2:55**

F. **4:45**

G. **2:20**

H. **2:25**

I. **10:45**

J. **9:20**

K. **10:20**

L. **5:45**

M. **2:30**

N. **9:55**

O. **8:55**

P. **5:25**

Risposte

1. **P**

2. **F**

3. **J**

4. **D**

5. **I**

6. **H**

7. **M**

8. **E**

9. **B**

10. **L**

11. **K**

12. **O**

13. **N**

14. **C**

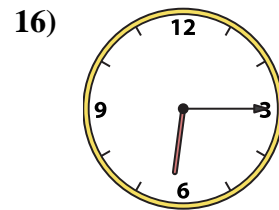
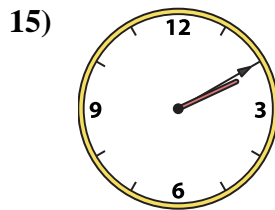
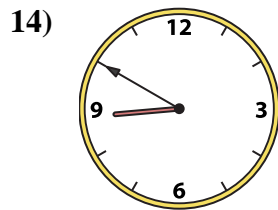
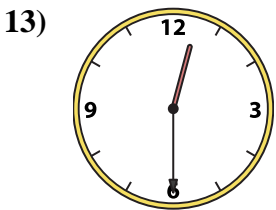
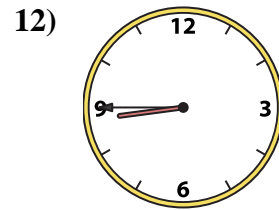
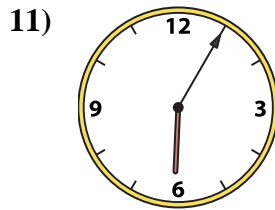
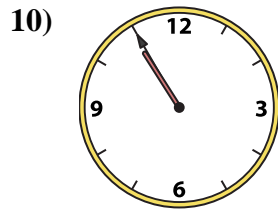
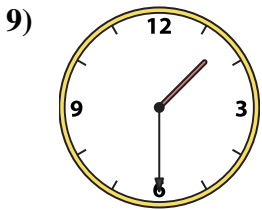
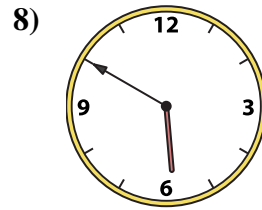
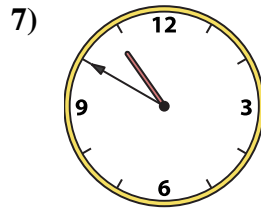
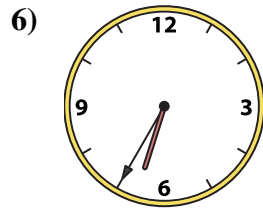
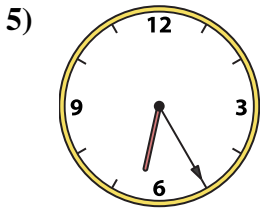
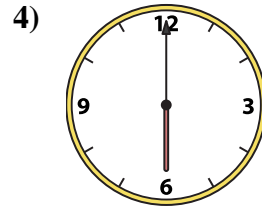
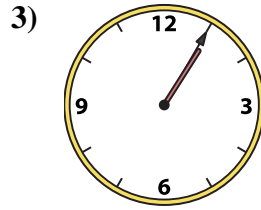
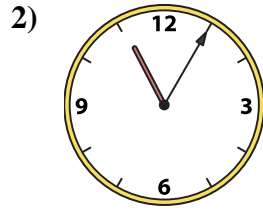
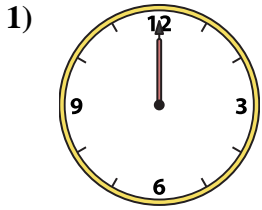
15. **A**

16. **G**



Abbina l'orologio analogico all'orologio digitale.

Risposte



1. _____
2. _____
3. _____
4. _____
5. _____
6. _____
7. _____
8. _____
9. _____
10. _____
11. _____
12. _____
13. _____
14. _____
15. _____
16. _____

A. 6:05

B. 1:30

C. 6:00

D. 6:35

E. 12:00

F. 2:10

G. 12:30

H. 10:50

I. 1:05

J. 8:45

K. 8:50

L. 5:50

M. 6:25

N. 10:55

O. 11:05

P. 6:15



Abbina l'orologio analogico all'orologio digitale.

1)

2)

3)

4)

5)

6)

7)

8)

9)

10)

11)

12)

13)

14)

15)

16)

A.

B.

C.

D.

E.

F.

G.

H.

I.

J.

K.

L.

M.

N.

O.

P.

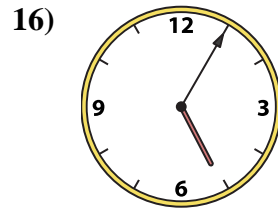
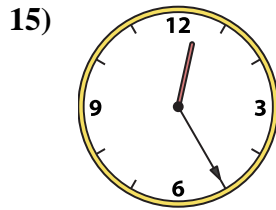
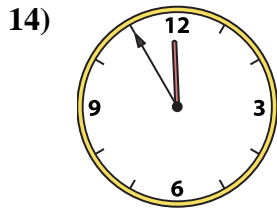
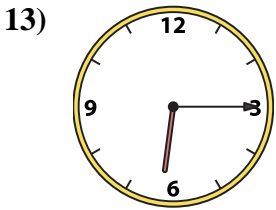
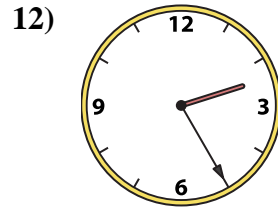
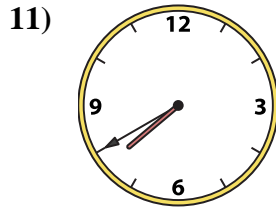
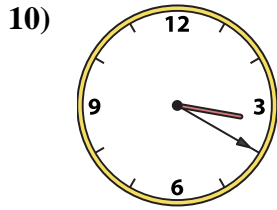
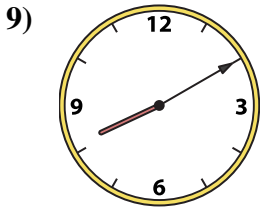
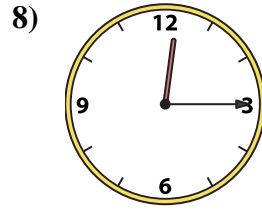
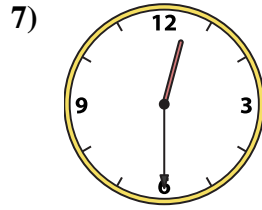
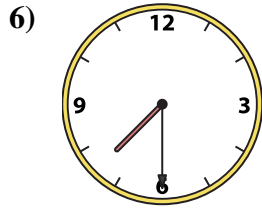
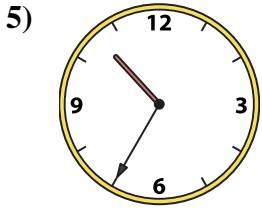
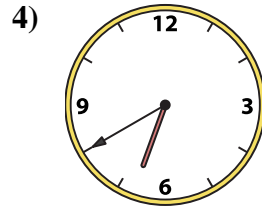
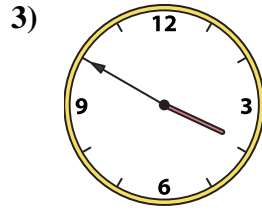
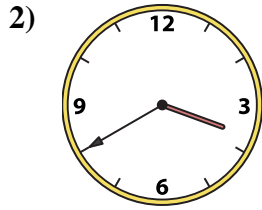
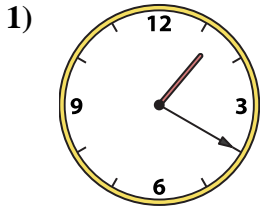
Risposte

1. **E**
2. **O**
3. **I**
4. **C**
5. **M**
6. **D**
7. **H**
8. **L**
9. **B**
10. **N**
11. **A**
12. **J**
13. **G**
14. **K**
15. **F**
16. **P**



Abbina l'orologio analogico all'orologio digitale.

Risposte



1. _____
2. _____
3. _____
4. _____
5. _____
6. _____
7. _____
8. _____
9. _____
10. _____
11. _____
12. _____
13. _____
14. _____
15. _____
16. _____

A. 10:35

B. 2:25

C. 7:40

D. 12:30

E. 6:40

F. 1:20

G. 12:25

H. 6:15

I. 3:50

J. 3:20

K. 11:55

L. 5:05

M. 7:30

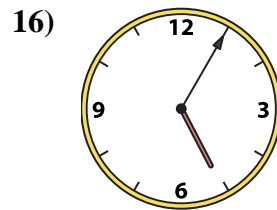
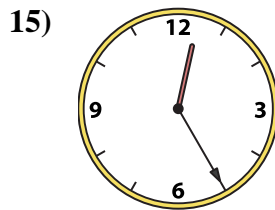
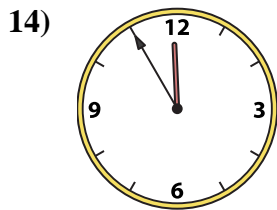
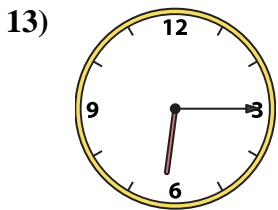
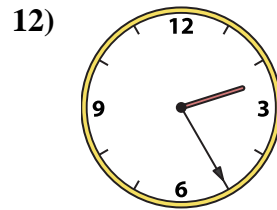
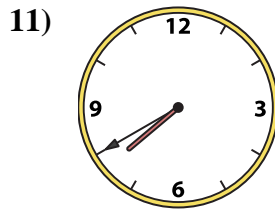
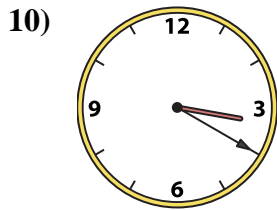
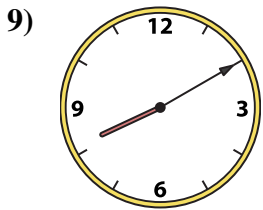
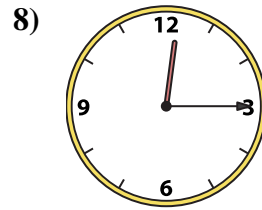
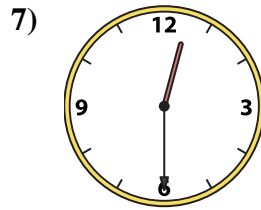
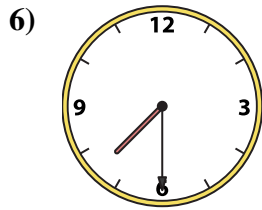
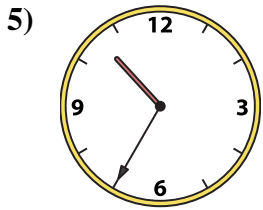
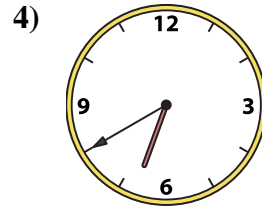
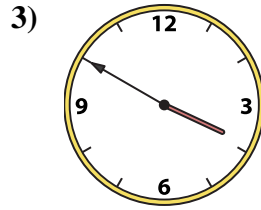
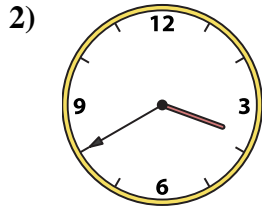
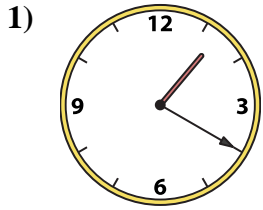
N. 3:40

O. 8:10

P. 12:15



Abbina l'orologio analogico all'orologio digitale.



A. 10:35

B. 2:25

C. 7:40

D. 12:30

E. 6:40

F. 1:20

G. 12:25

H. 6:15

I. 3:50

J. 3:20

K. 11:55

L. 5:05

M. 7:30

N. 3:40

O. 8:10

P. 12:15

Risposte

1. **F**

2. **N**

3. **I**

4. **E**

5. **A**

6. **M**

7. **D**

8. **P**

9. **O**

10. **J**

11. **C**

12. **B**

13. **H**

14. **K**

15. **G**

16. **L**