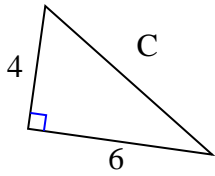


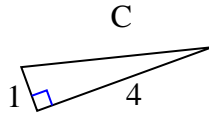


Trova il valore di 'C' arrotondando la tua risposta alle centinaia più vicine.

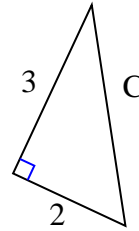
1)



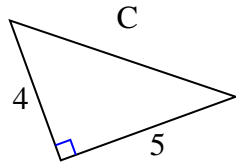
2)



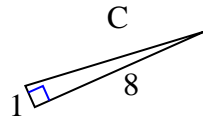
3)



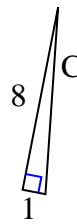
4)



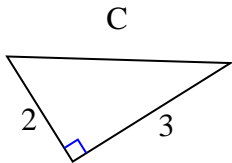
5)



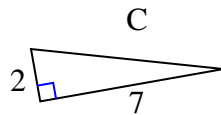
6)



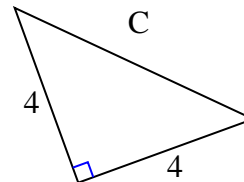
7)



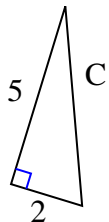
8)



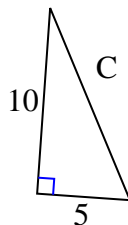
9)



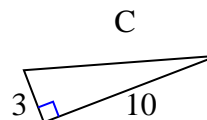
10)



11)



12)

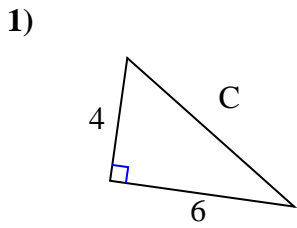


Risposte

1. _____
2. _____
3. _____
4. _____
5. _____
6. _____
7. _____
8. _____
9. _____
10. _____
11. _____
12. _____

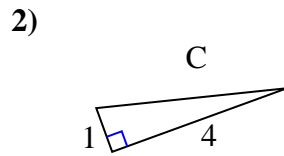


Trova il valore di 'C' arrotondando la tua risposta alle centinaia più vicine.



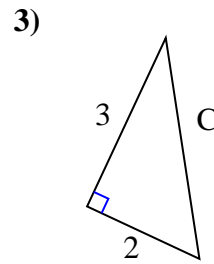
$$16 + 36 = 52$$

$$\sqrt{52} = 7,21$$



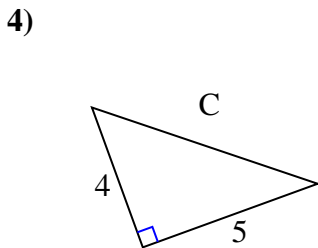
$$1 + 16 = 17$$

$$\sqrt{17} = 4,12$$



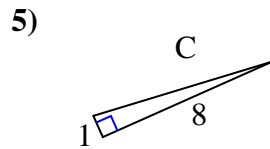
$$9 + 4 = 13$$

$$\sqrt{13} = 3,61$$



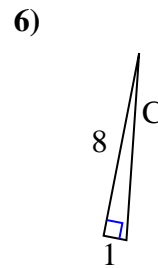
$$16 + 25 = 41$$

$$\sqrt{41} = 6,4$$



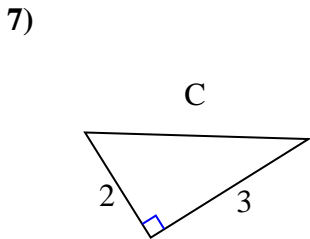
$$1 + 64 = 65$$

$$\sqrt{65} = 8,06$$



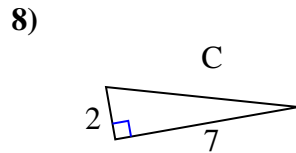
$$64 + 1 = 65$$

$$\sqrt{65} = 8,06$$



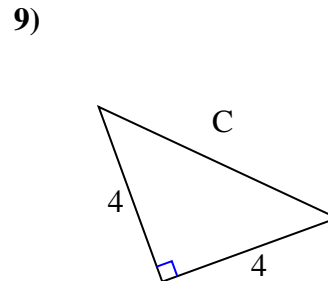
$$4 + 9 = 13$$

$$\sqrt{13} = 3,61$$



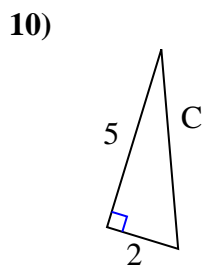
$$4 + 49 = 53$$

$$\sqrt{53} = 7,28$$



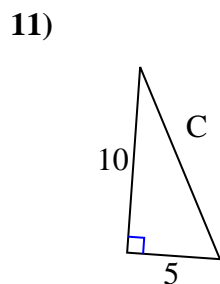
$$16 + 16 = 32$$

$$\sqrt{32} = 5,66$$



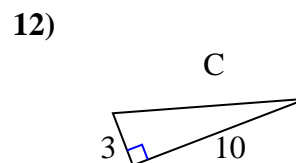
$$25 + 4 = 29$$

$$\sqrt{29} = 5,39$$



$$100 + 25 = 125$$

$$\sqrt{125} = 11,18$$



$$9 + 100 = 109$$

$$\sqrt{109} = 10,44$$

Risposte

1. 7,21
2. 4,12
3. 3,61
4. 6,4
5. 8,06
6. 8,06
7. 3,61
8. 7,28
9. 5,66
10. 5,39
11. 11,18
12. 10,44