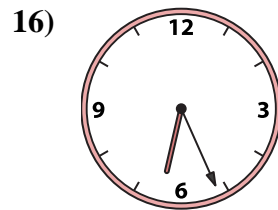
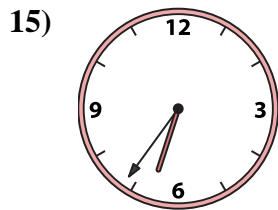
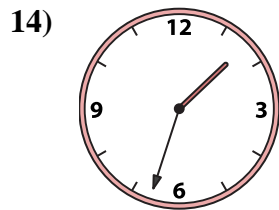
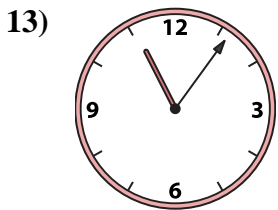
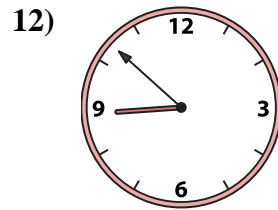
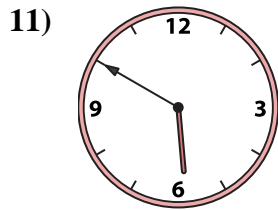
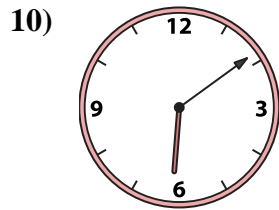

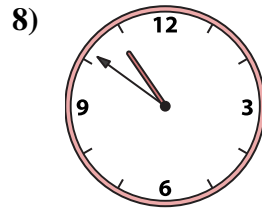
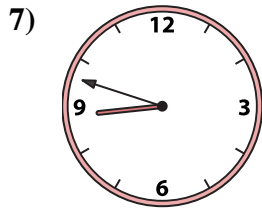

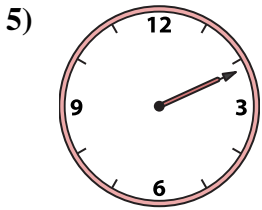
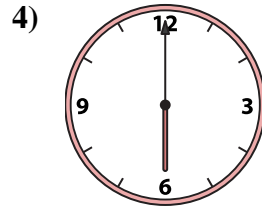







Abbina l'orologio analogico all'orologio digitale.

Risposte



A. 6:09

B. 1:33

C. 6:00

D. 6:36

E. 12:02

F. 2:11

G. 12:34

H. 10:51

I. 1:07

J. 8:48

K. 8:52

L. 5:50

M. 6:26

N. 10:57

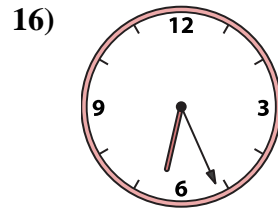
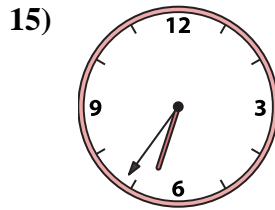
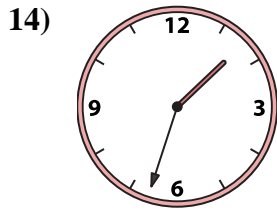
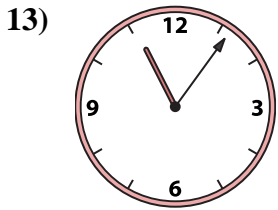
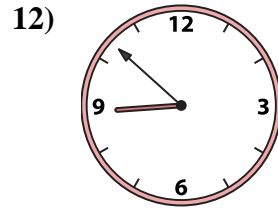
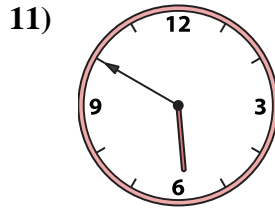
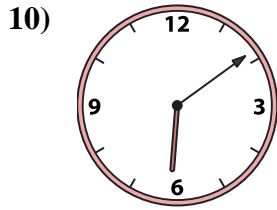

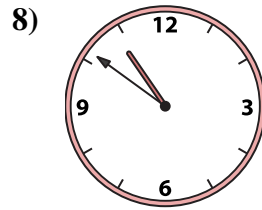
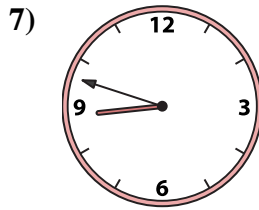

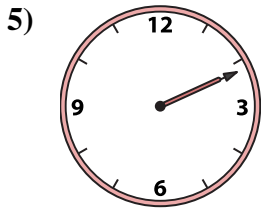
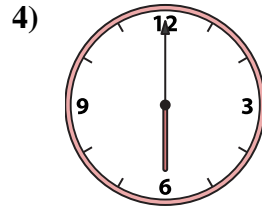
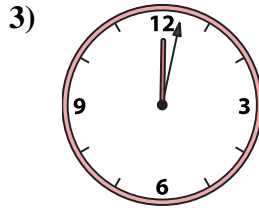

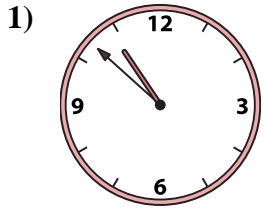
O. 10:52

P. 11:06

1. _____
2. _____
3. _____
4. _____
5. _____
6. _____
7. _____
8. _____
9. _____
10. _____
11. _____
12. _____
13. _____
14. _____
15. _____
16. _____



Abbina l'orologio analogico all'orologio digitale.



A. 6:09

B. 1:33

C. 6:00

D. 6:36

E. 12:02

F. 2:11

G. 12:34

H. 10:51

I. 1:07

J. 8:48

K. 8:52

L. 5:50

M. 6:26

N. 10:57

O. 10:52

P. 11:06

Risposte

1. **O**

2. **I**

3. **E**

4. **C**

5. **F**

6. **G**

7. **J**

8. **H**

9. **N**

10. **A**

11. **L**

12. **K**

13. **P**

14. **B**

15. **D**

16. **M**