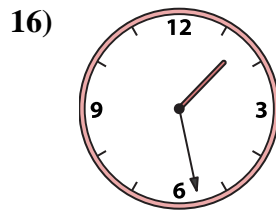
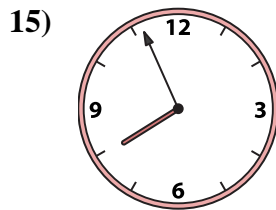
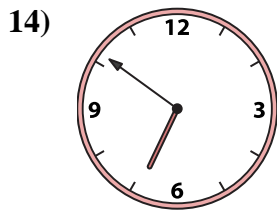
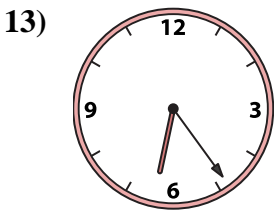
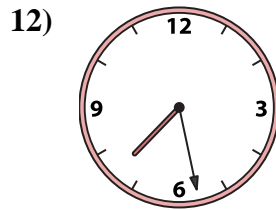
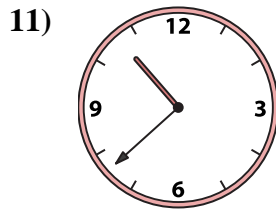
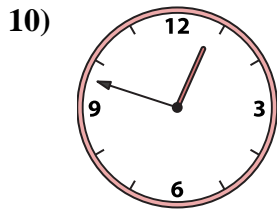
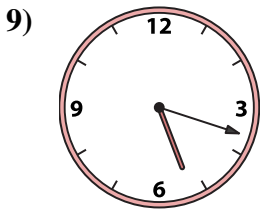
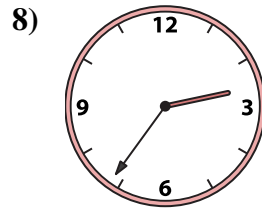
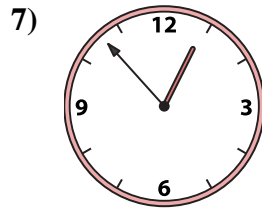
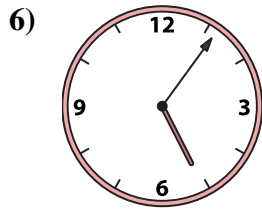
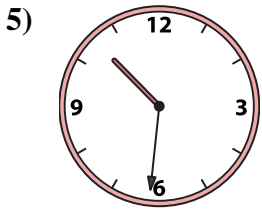
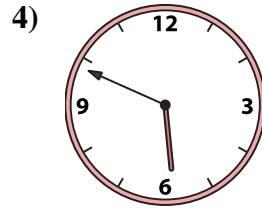
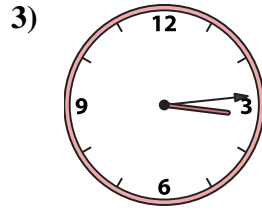

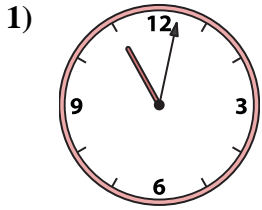




Abbina l'orologio analogico all'orologio digitale.

**Risposte**



1. \_\_\_\_\_
2. \_\_\_\_\_
3. \_\_\_\_\_
4. \_\_\_\_\_
5. \_\_\_\_\_
6. \_\_\_\_\_
7. \_\_\_\_\_
8. \_\_\_\_\_
9. \_\_\_\_\_
10. \_\_\_\_\_
11. \_\_\_\_\_
12. \_\_\_\_\_
13. \_\_\_\_\_
14. \_\_\_\_\_
15. \_\_\_\_\_
16. \_\_\_\_\_

A. 2:56

B. 10:31

C. 7:56

D. 6:24

E. 3:14

F. 5:49

G. 2:36

H. 1:28

I. 5:06

J. 10:38

K. 7:28

L. 12:53

M. 5:18

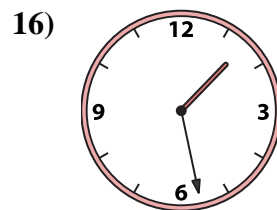
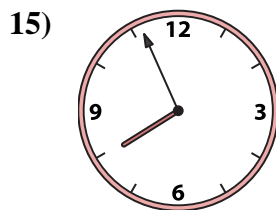
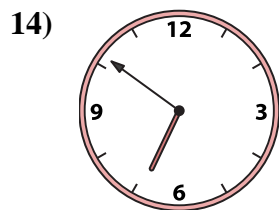
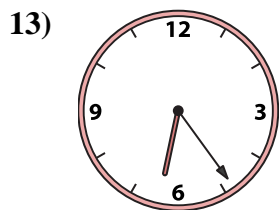
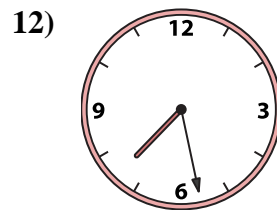
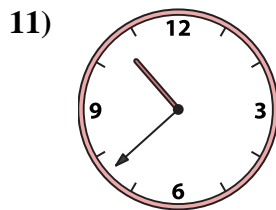
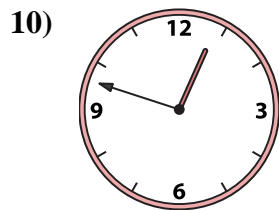
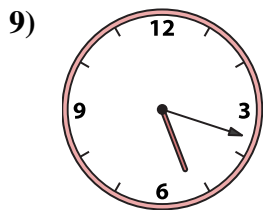
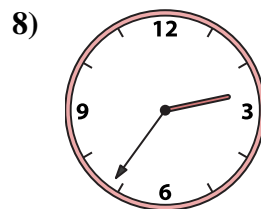
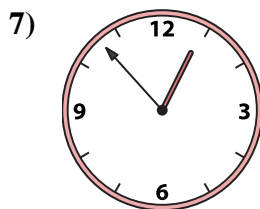
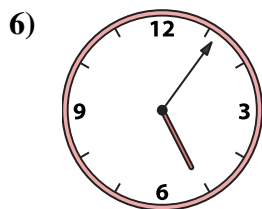

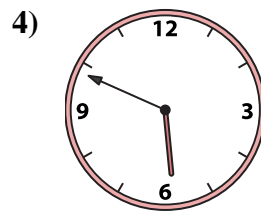
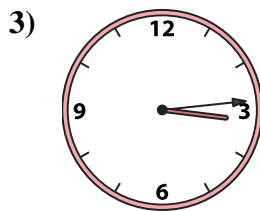
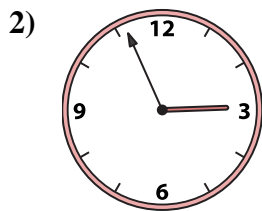
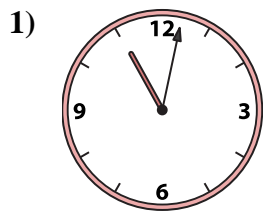
N. 12:48

O. 11:02

P. 6:51



Abbina l'orologio analogico all'orologio digitale.

A. **2:56**B. **10:31**C. **7:56**D. **6:24**E. **3:14**F. **5:49**G. **2:36**H. **1:28**I. **5:06**J. **10:38**K. **7:28**L. **12:53**M. **5:18**N. **12:48**O. **11:02**P. **6:51****Risposte**1. **O**2. **A**3. **E**4. **F**5. **B**6. **I**7. **L**8. **G**9. **M**10. **N**11. **J**12. **K**13. **D**14. **P**15. **C**16. **H**