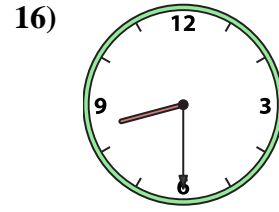
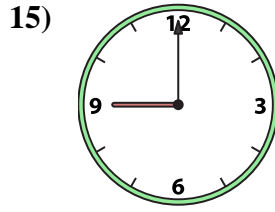
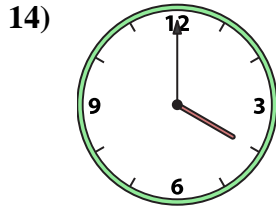
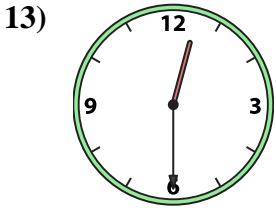
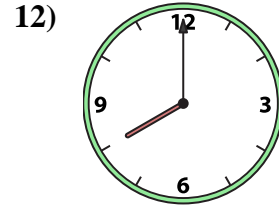
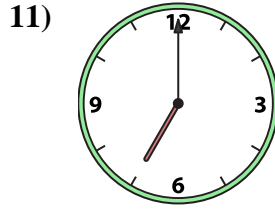
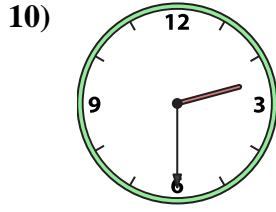
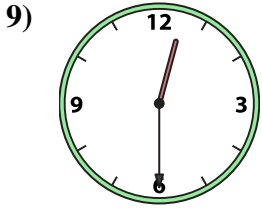
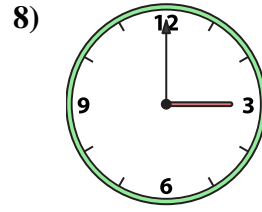
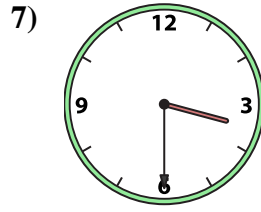
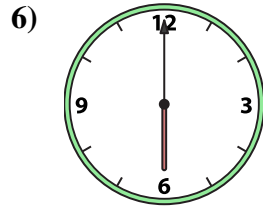
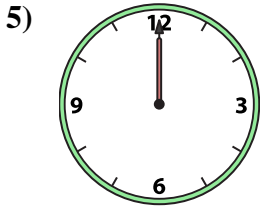
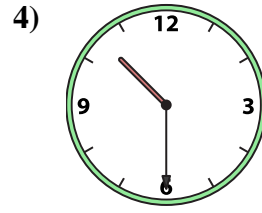
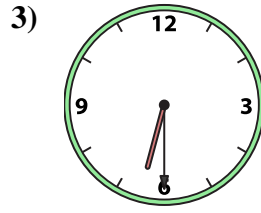
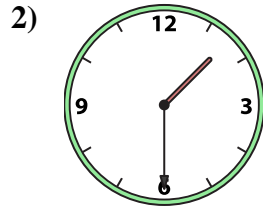





Abbina l'orologio analogico all'orologio digitale.

Risposte



A.

B.

C.

D.

E.

F.

G.

H.

I.

J.

K.

L.

M.

N.

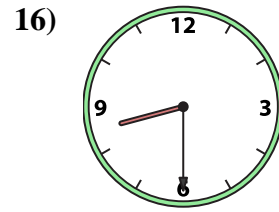
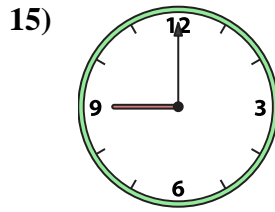
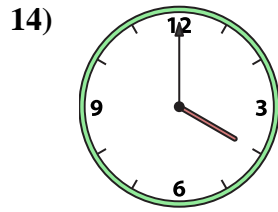
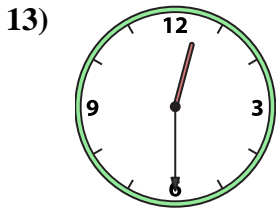
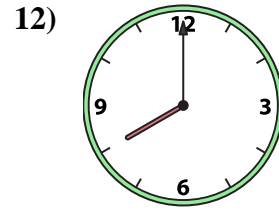
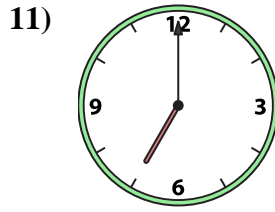
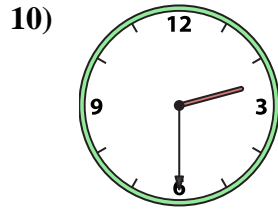
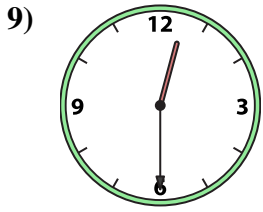
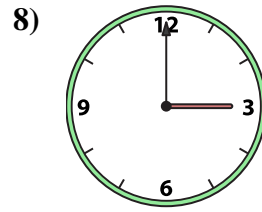
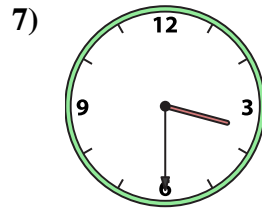
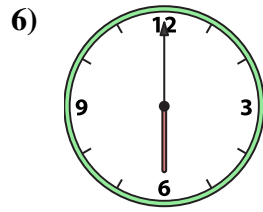
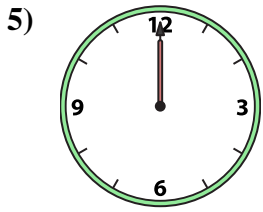
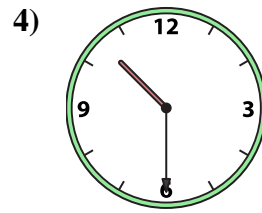
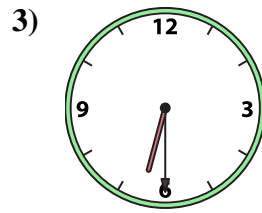
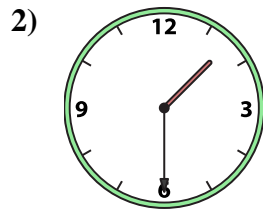

O.

P.

1. _____
2. _____
3. _____
4. _____
5. _____
6. _____
7. _____
8. _____
9. _____
10. _____
11. _____
12. _____
13. _____
14. _____
15. _____
16. _____



Abbina l'orologio analogico all'orologio digitale.



A.

B.

C.

D.

E.

F.

G.

H.

I.

J.

K.

L.

M.

N.

O.

P.

Risposte

1. **A**

2. **P**

3. **I**

4. **G**

5. **D**

6. **F**

7. **O**

8. **C**

9. **L**

10. **B**

11. **K**

12. **J**

13. **N**

14. **H**

15. **E**

16. **M**