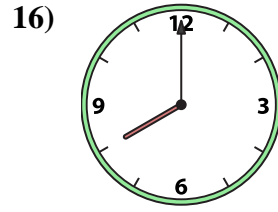
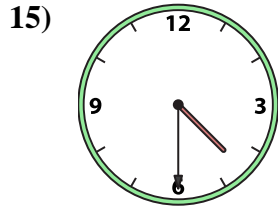
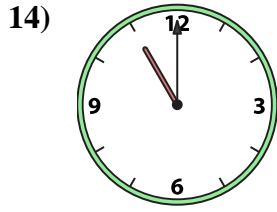
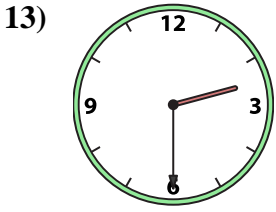
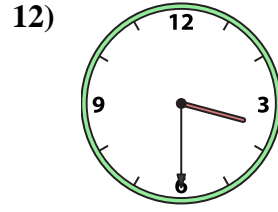
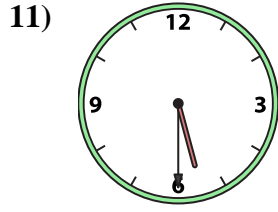
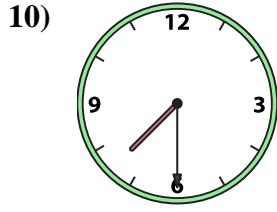

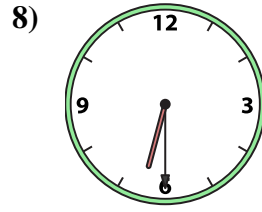
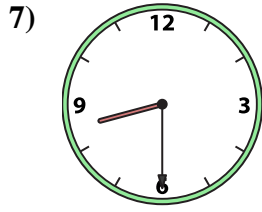
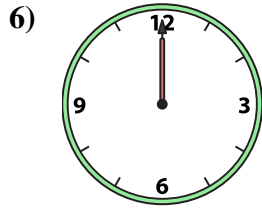
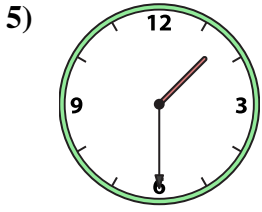
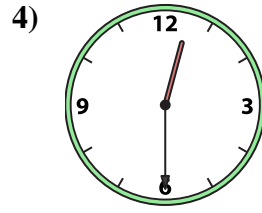
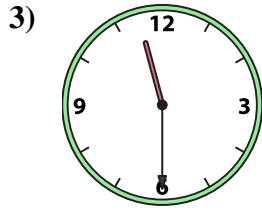
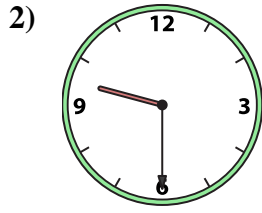





Abbina l'orologio analogico all'orologio digitale.

Risposte



A. 9:30

B. 5:30

C. 4:30

D. 11:30

E. 3:30

F. 1:30

G. 8:00

H. 1:00

I. 6:30

J. 8:30

K. 12:30

L. 12:00

M. 2:30

N. 11:00

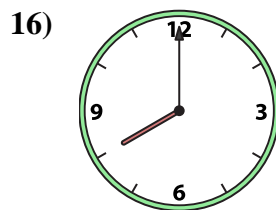
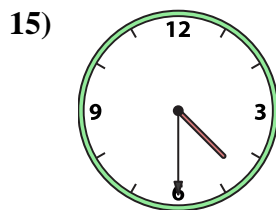
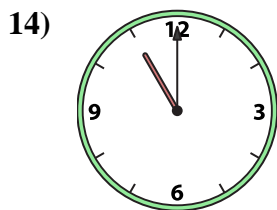
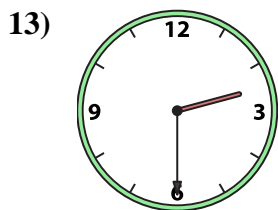
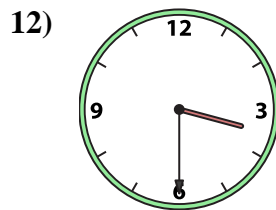
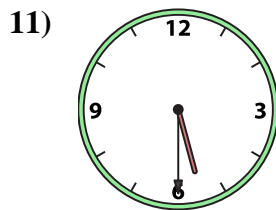
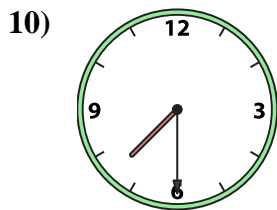

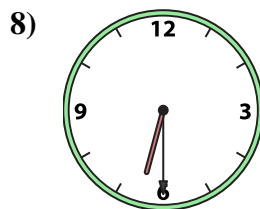
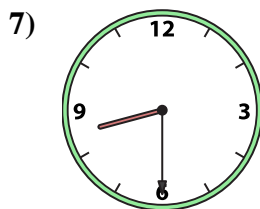
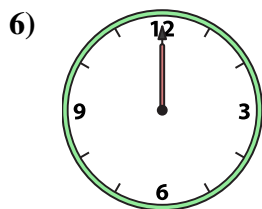
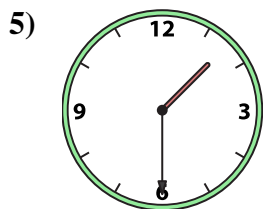
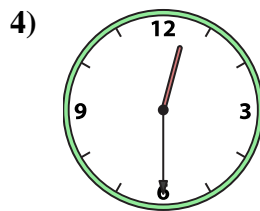
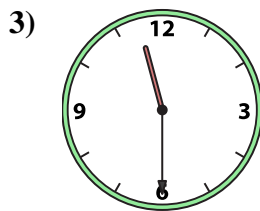
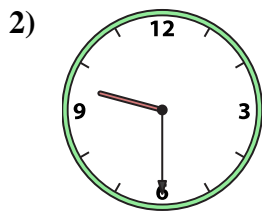

O. 7:30

P. 4:00

1. _____
2. _____
3. _____
4. _____
5. _____
6. _____
7. _____
8. _____
9. _____
10. _____
11. _____
12. _____
13. _____
14. _____
15. _____
16. _____



Abbina l'orologio analogico all'orologio digitale.



A. 9:30

B. 5:30

C. 4:30

D. 11:30

E. 3:30

F. 1:30

G. 8:00

H. 1:00

I. 6:30

J. 8:30

K. 12:30

L. 12:00

M. 2:30

N. 11:00

O. 7:30

P. 4:00

Risposte

1. **H**

2. **A**

3. **D**

4. **K**

5. **F**

6. **L**

7. **J**

8. **I**

9. **P**

10. **O**

11. **B**

12. **E**

13. **M**

14. **N**

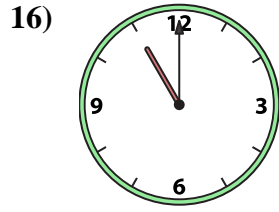
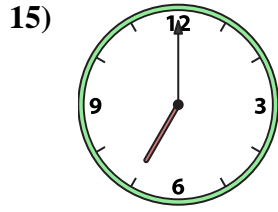
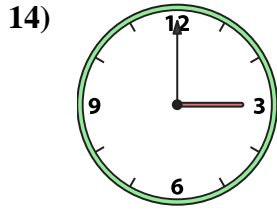
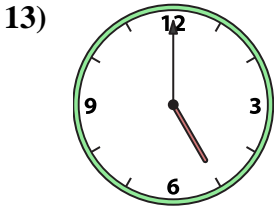
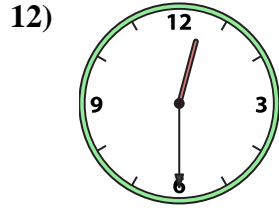
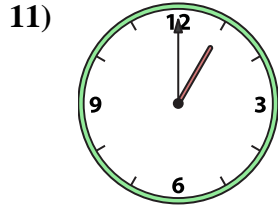
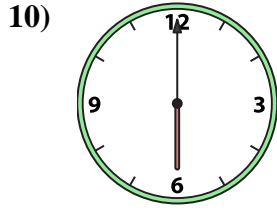
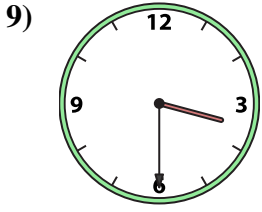
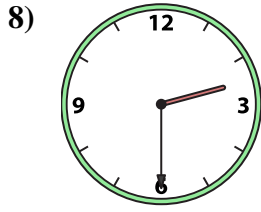
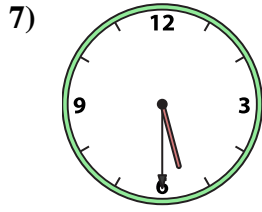
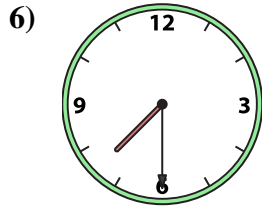
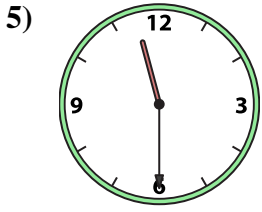
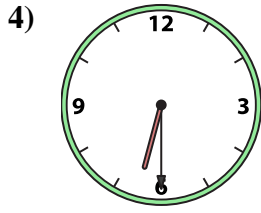
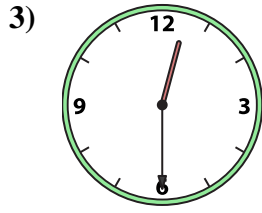
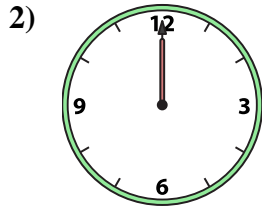
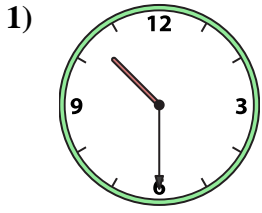
15. **C**

16. **G**



Abbina l'orologio analogico all'orologio digitale.

Risposte



A.

B.

C.

D.

E.

F.

G.

H.

I.

J.

K.

L.

M.

N.

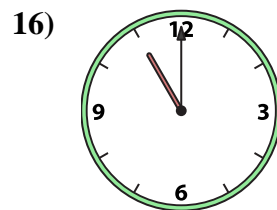
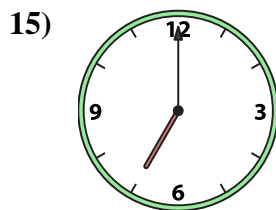
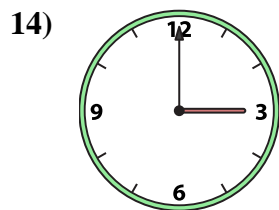
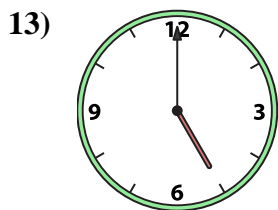
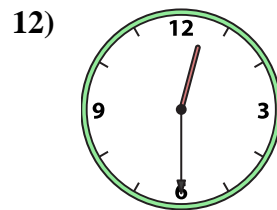
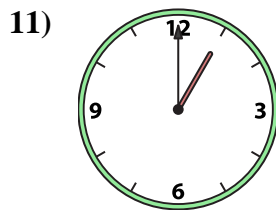
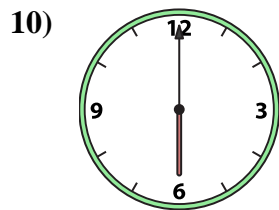
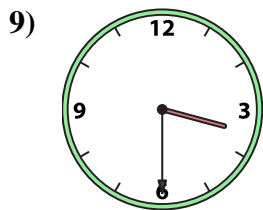
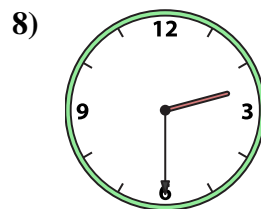
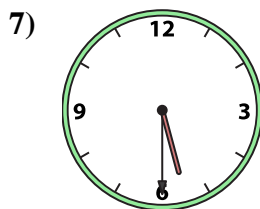
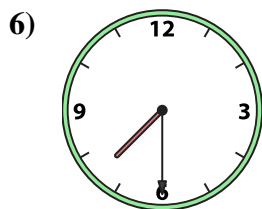
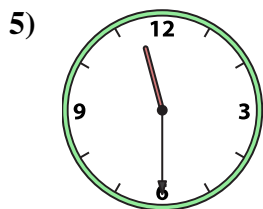
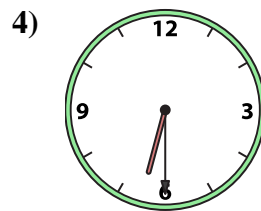
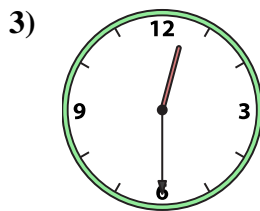
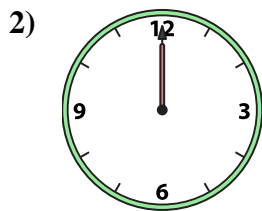
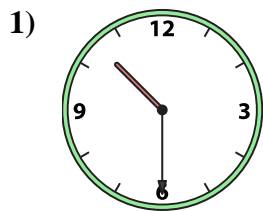
O.

P.

- 1. _____
- 2. _____
- 3. _____
- 4. _____
- 5. _____
- 6. _____
- 7. _____
- 8. _____
- 9. _____
- 10. _____
- 11. _____
- 12. _____
- 13. _____
- 14. _____
- 15. _____
- 16. _____



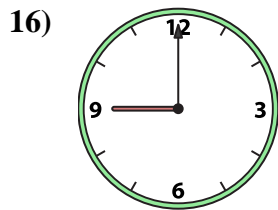
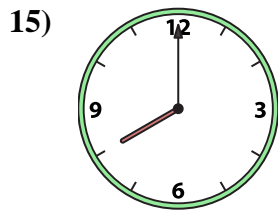
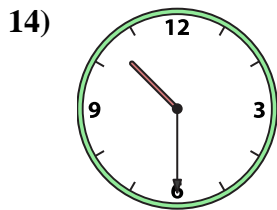
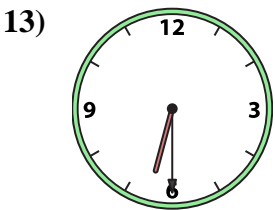
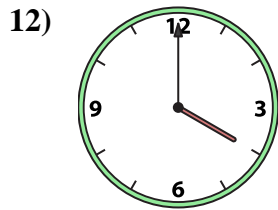
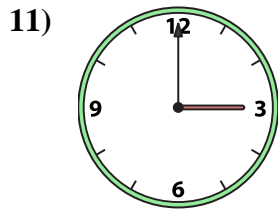
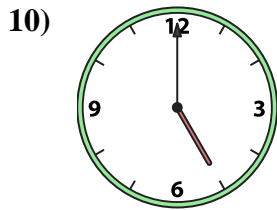
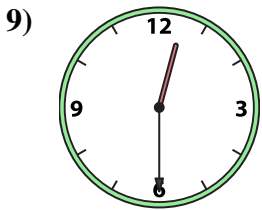
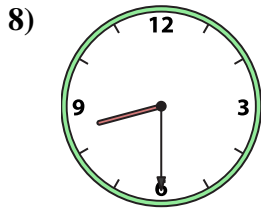
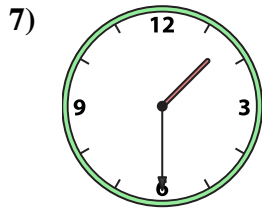

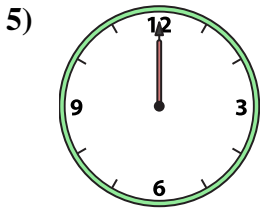
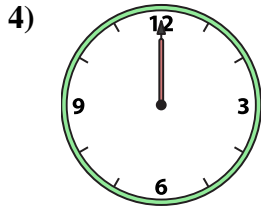
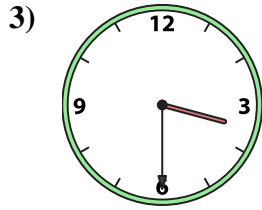
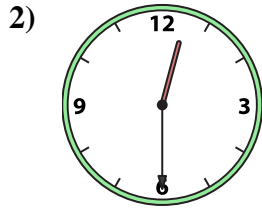

Abbina l'orologio analogico all'orologio digitale.

A. B. C. D. E. F. G. H. I. J. K. L. M. N. O. P. **Risposte**1. **B**2. **P**3. **J**4. **L**5. **N**6. **C**7. **F**8. **A**9. **O**10. **D**11. **G**12. **M**13. **H**14. **E**15. **I**16. **K**



Abbina l'orologio analogico all'orologio digitale.

Risposte



A. 3:30

B. 9:00

C. 12:00

D. 12:00

E. 10:30

F. 12:30

G. 8:00

H. 11:00

I. 5:00

J. 1:30

K. 12:30

L. 4:00

M. 3:00

N. 6:30

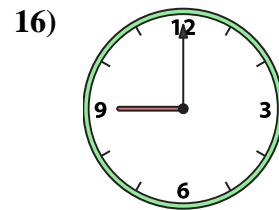
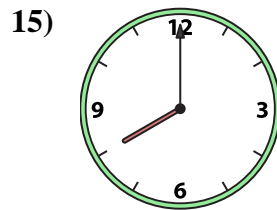
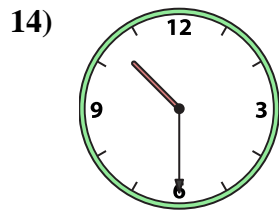
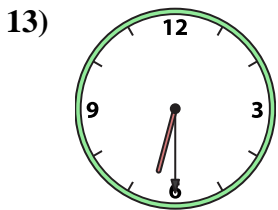
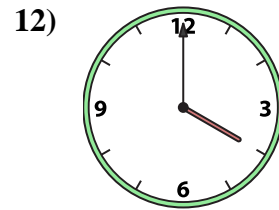
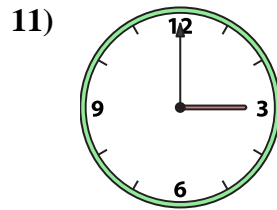
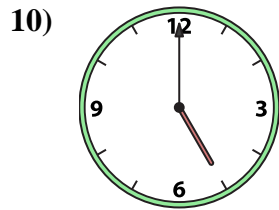
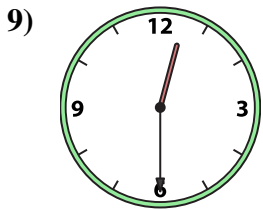
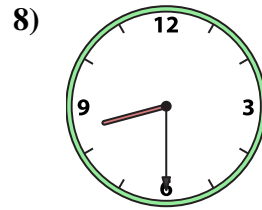
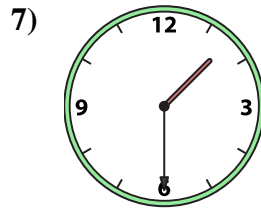

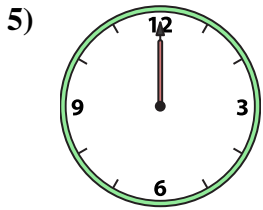
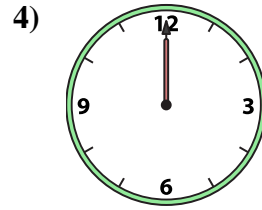
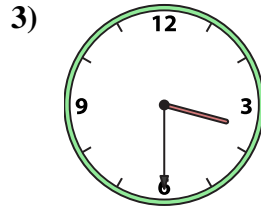
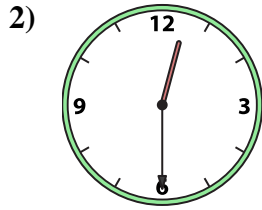

O. 8:30

P. 1:00

1. _____
2. _____
3. _____
4. _____
5. _____
6. _____
7. _____
8. _____
9. _____
10. _____
11. _____
12. _____
13. _____
14. _____
15. _____
16. _____



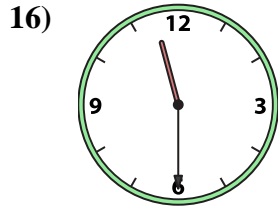
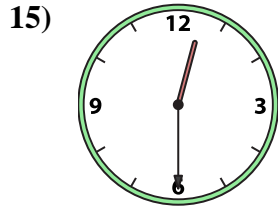
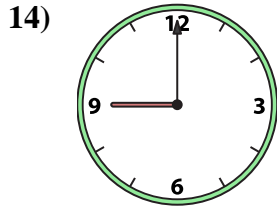
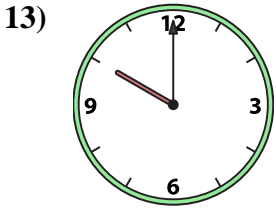
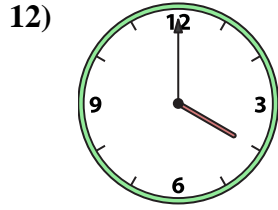
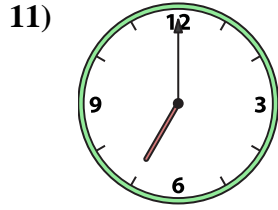
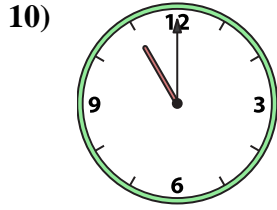
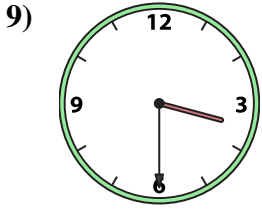
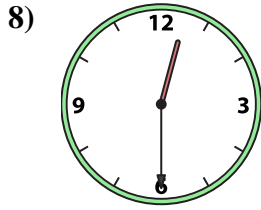

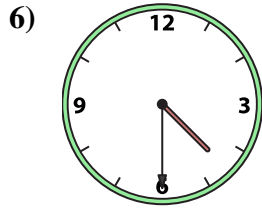
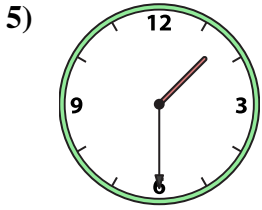
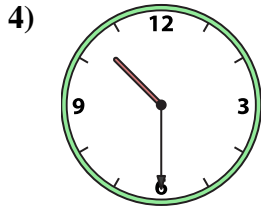

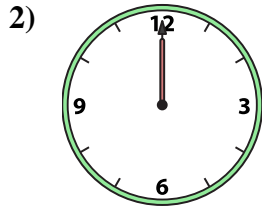
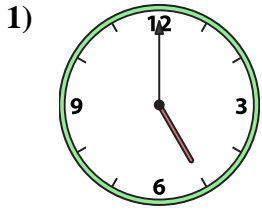
Abbina l'orologio analogico all'orologio digitale.

A. B. C. D. E. F. G. H. I. J. K. L. M. N. O. P. **Risposte**1. **H** 2. **F** 3. **A** 4. **C** 5. **D** 6. **P** 7. **J** 8. **O** 9. **K** 10. **I** 11. **M** 12. **L** 13. **N** 14. **E** 15. **G** 16. **B**



Abbina l'orologio analogico all'orologio digitale.

Risposte



1. _____
2. _____
3. _____
4. _____
5. _____
6. _____
7. _____
8. _____
9. _____
10. _____
11. _____
12. _____
13. _____
14. _____
15. _____
16. _____

A. 11:30

B. 9:00

C. 3:30

D. 12:30

E. 1:30

F. 11:00

G. 7:00

H. 4:30

I. 5:00

J. 10:00

K. 4:00

L. 8:00

M. 2:00

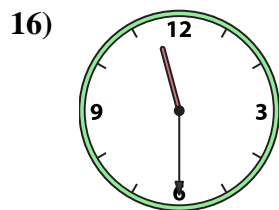
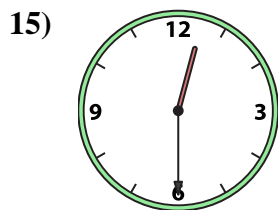
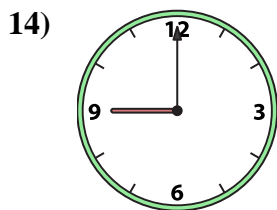


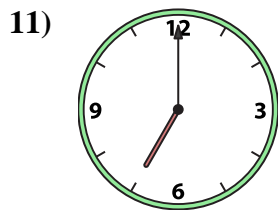
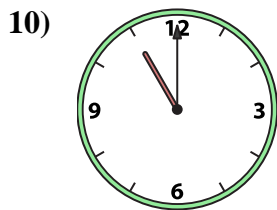
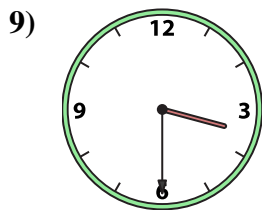
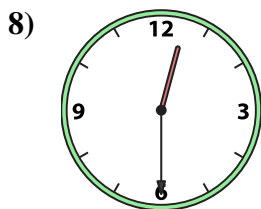

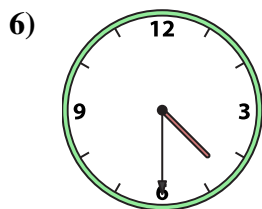
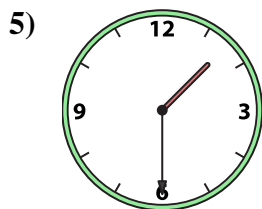
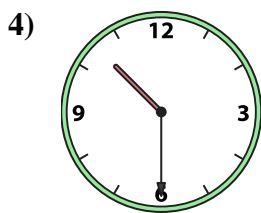
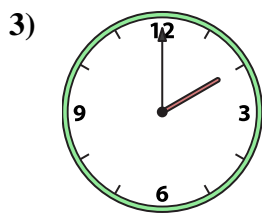
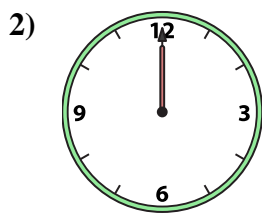
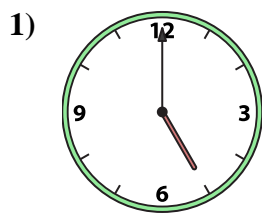
N. 12:00

O. 10:30

P. 12:30



Abbina l'orologio analogico all'orologio digitale.



A. 11:30

B. 9:00

C. 3:30

D. 12:30

E. 1:30

F. 11:00

G. 7:00

H. 4:30

I. 5:00

J. 10:00

K. 4:00

L. 8:00

M. 2:00

N. 12:00

O. 10:30

P. 12:30

Risposte

1. **I**

2. **N**

3. **M**

4. **O**

5. **E**

6. **H**

7. **L**

8. **P**

9. **C**

10. **F**

11. **G**

12. **K**

13. **J**

14. **B**

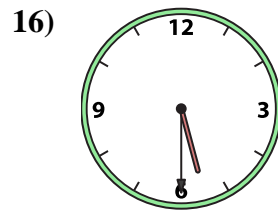
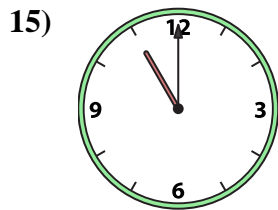
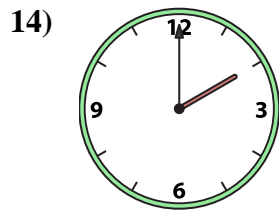
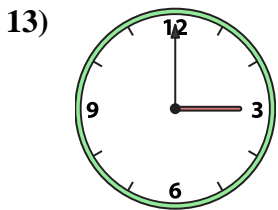
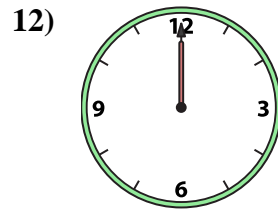
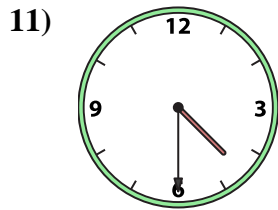
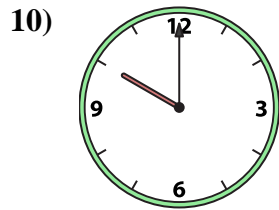
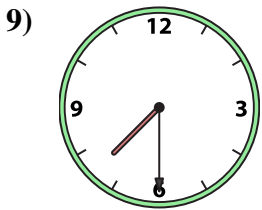
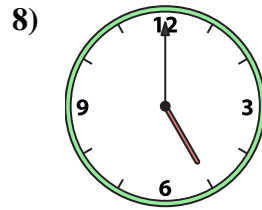
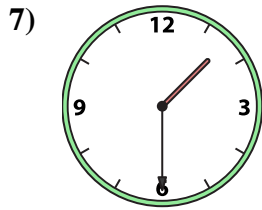
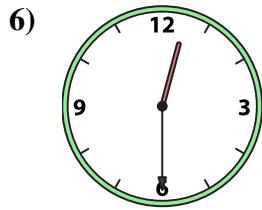
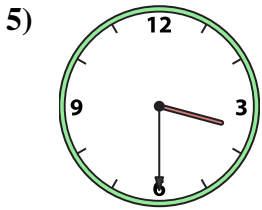
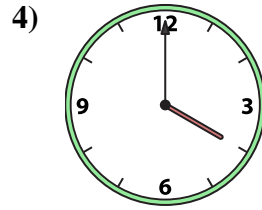
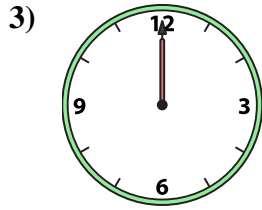
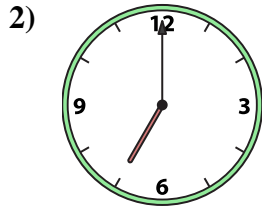

15. **D**

16. **A**



Abbina l'orologio analogico all'orologio digitale.

Risposte



1. _____
2. _____
3. _____
4. _____
5. _____
6. _____
7. _____
8. _____
9. _____
10. _____
11. _____
12. _____
13. _____
14. _____
15. _____
16. _____

A.

B.

C.

D.

E.

F.

G.

H.

I.

J.

K.

L.

M.

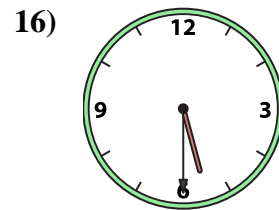
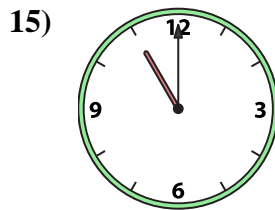
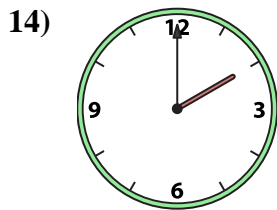
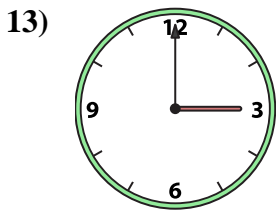
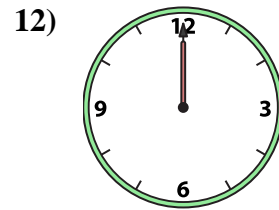
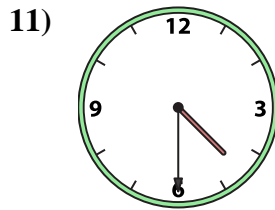
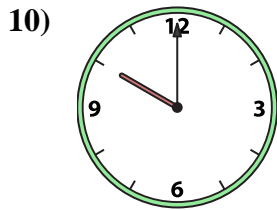
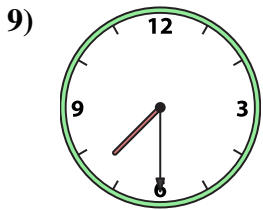
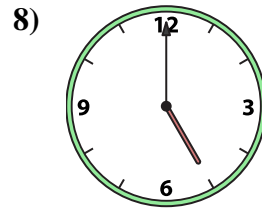
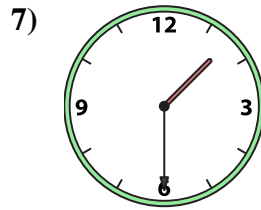
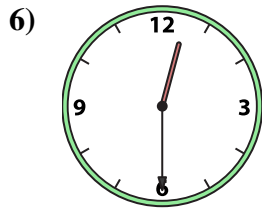
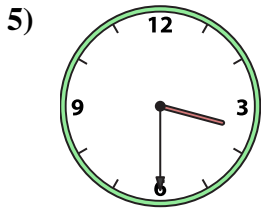
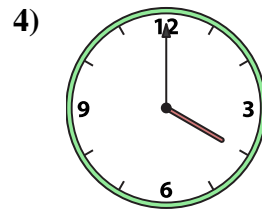
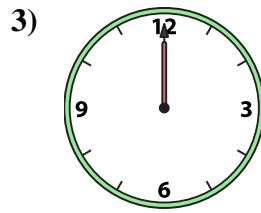
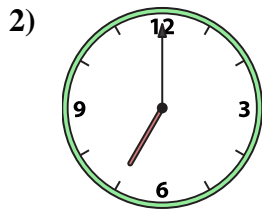

N.

O.

P.



Abbina l'orologio analogico all'orologio digitale.



A. 11:00

B. 1:00

C. 5:00

D. 4:30

E. 4:00

F. 3:30

G. 5:30

H. 7:30

I. 12:30

J. 2:00

K. 10:00

L. 7:00

M. 12:00

N. 1:30

O. 3:00

P. 12:00

Risposte

1. **B**

2. **L**

3. **M**

4. **E**

5. **F**

6. **I**

7. **N**

8. **C**

9. **H**

10. **K**

11. **D**

12. **P**

13. **O**

14. **J**

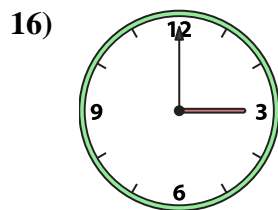
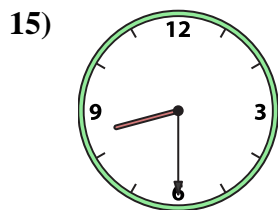
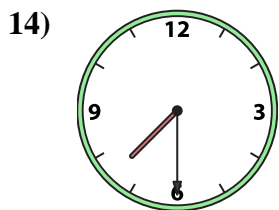
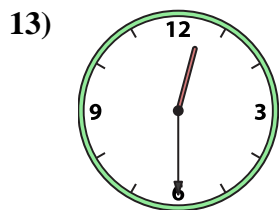
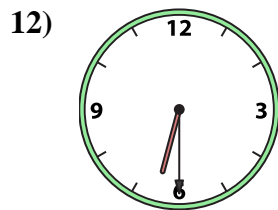
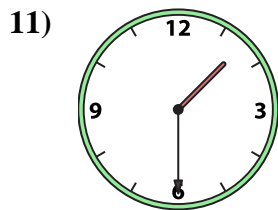
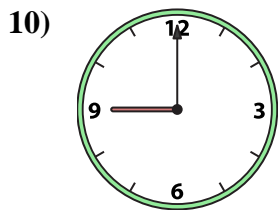
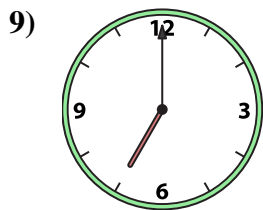
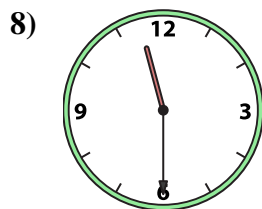
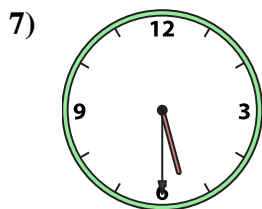
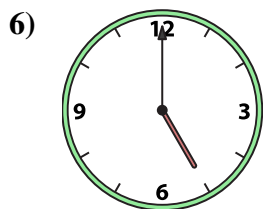
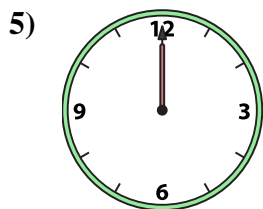
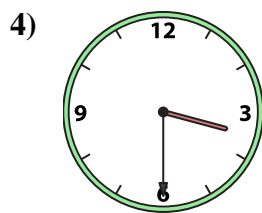
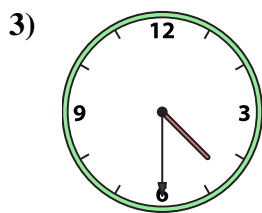
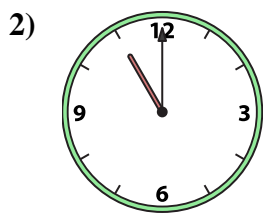
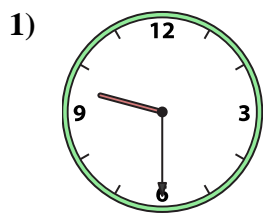
15. **A**

16. **G**



Abbina l'orologio analogico all'orologio digitale.

Risposte



A. 5:30

B. 3:00

C. 3:30

D. 12:00

E. 6:30

F. 7:30

G. 9:30

H. 4:30

I. 8:30

J. 5:00

K. 9:00

L. 11:00

M. 7:00

N. 1:30

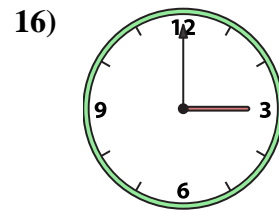
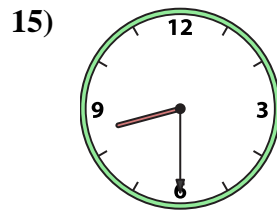
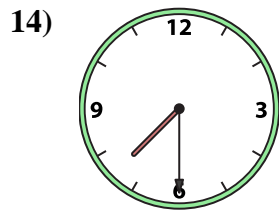
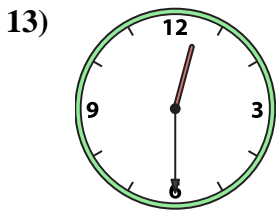
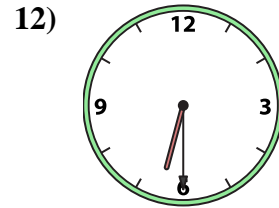
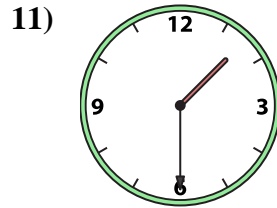
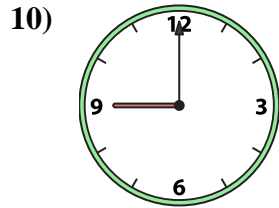

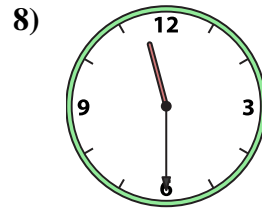
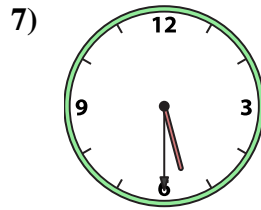
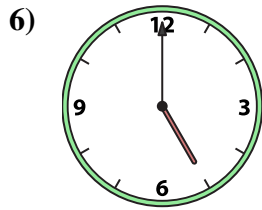
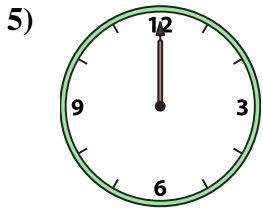
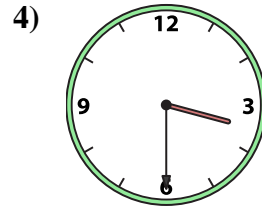
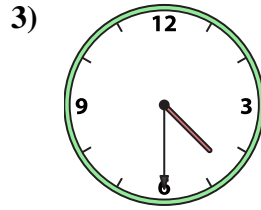

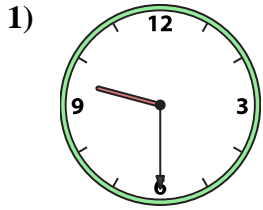
O. 12:30

P. 11:30

1. _____
2. _____
3. _____
4. _____
5. _____
6. _____
7. _____
8. _____
9. _____
10. _____
11. _____
12. _____
13. _____
14. _____
15. _____
16. _____



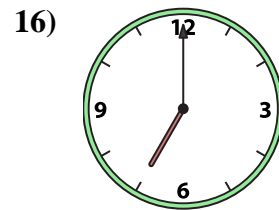
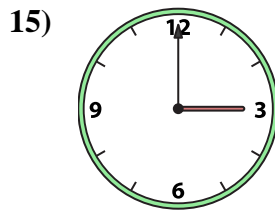
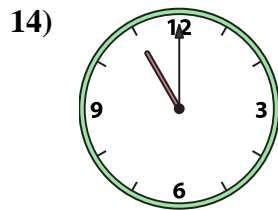
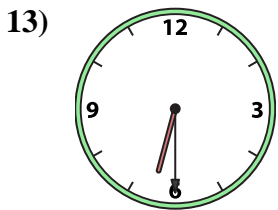
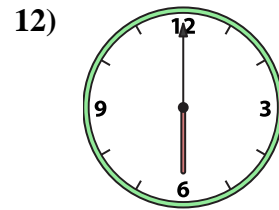
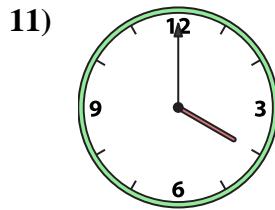
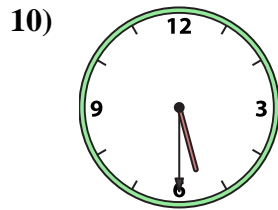

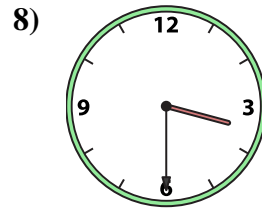
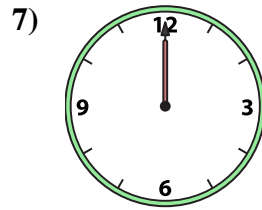
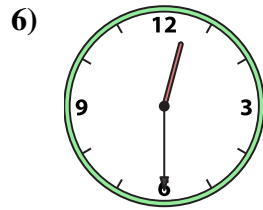
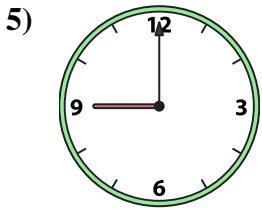
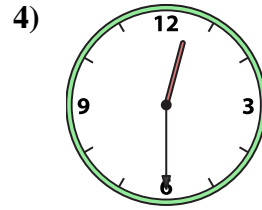
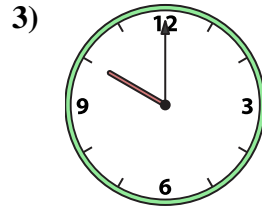
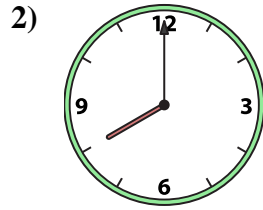

Abbina l'orologio analogico all'orologio digitale.

A. B. C. D. E. F. G. H. I. J. K. L. M. N. O. P. **Risposte**1. **G** 2. **L** 3. **H** 4. **C** 5. **D** 6. **J** 7. **A** 8. **P** 9. **M** 10. **K** 11. **N** 12. **E** 13. **O** 14. **F** 15. **I** 16. **B**



Abbina l'orologio analogico all'orologio digitale.

Risposte



1. _____
2. _____
3. _____
4. _____
5. _____
6. _____
7. _____
8. _____
9. _____
10. _____
11. _____
12. _____
13. _____
14. _____
15. _____
16. _____

A. 10:00

B. 3:30

C. 1:00

D. 12:30

E. 12:00

F. 3:00

G. 6:00

H. 5:30

I. 2:00

J. 12:30

K. 11:00

L. 9:00

M. 6:30

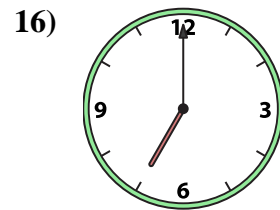
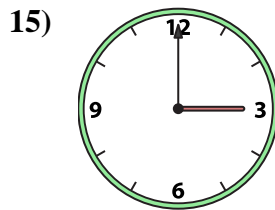
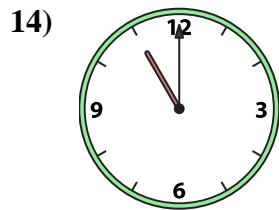
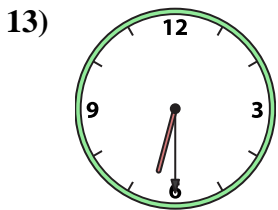
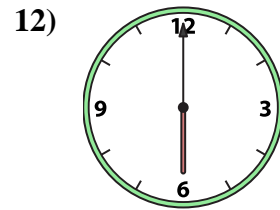
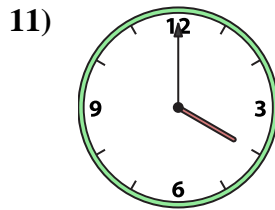
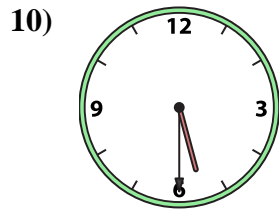

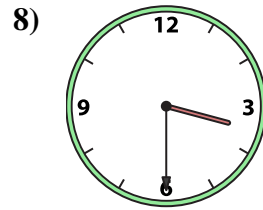
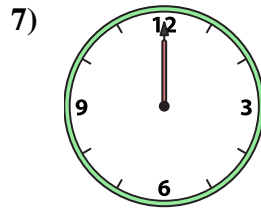
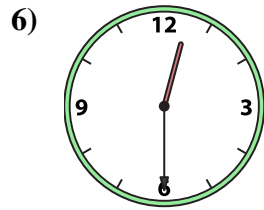
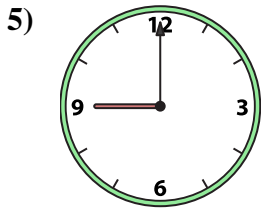
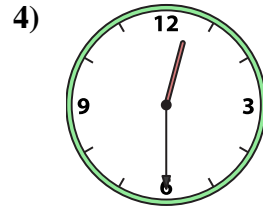
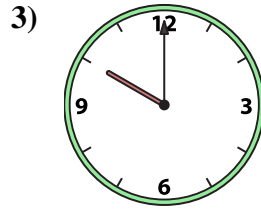
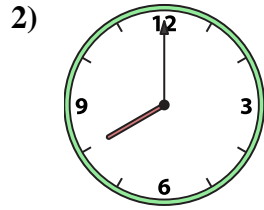

N. 4:00

O. 8:00

P. 7:00



Abbina l'orologio analogico all'orologio digitale.



A. 10:00

B. 3:30

C. 1:00

D. 12:30

E. 12:00

F. 3:00

G. 6:00

H. 5:30

I. 2:00

J. 12:30

K. 11:00

L. 9:00

M. 6:30

N. 4:00

O. 8:00

P. 7:00

Risposte

1. **C**

2. **O**

3. **A**

4. **J**

5. **L**

6. **D**

7. **E**

8. **B**

9. **I**

10. **H**

11. **N**

12. **G**

13. **M**

14. **K**

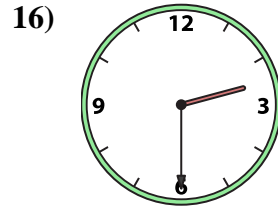
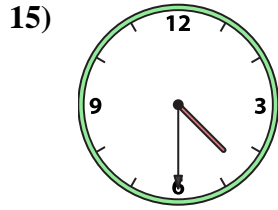
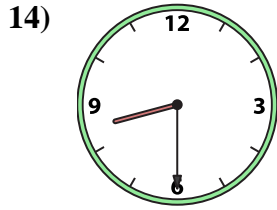
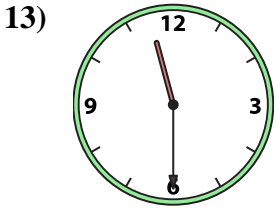

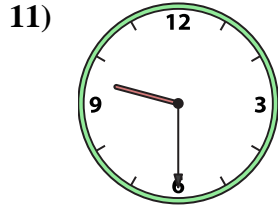
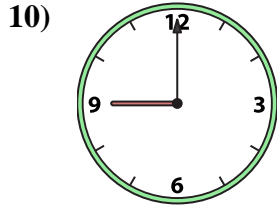
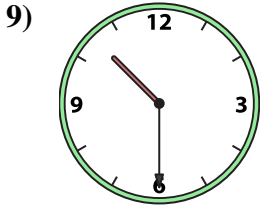
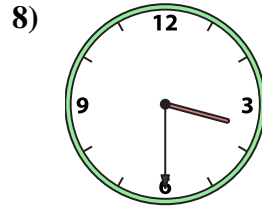
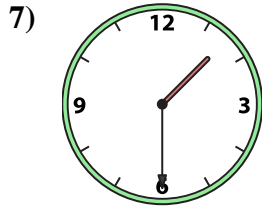
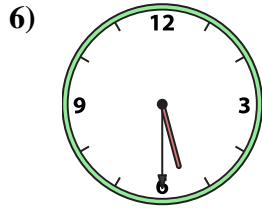
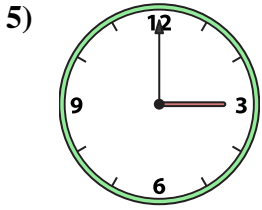
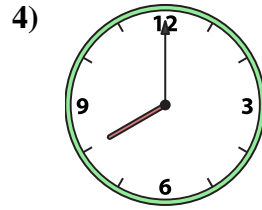
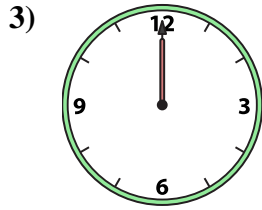

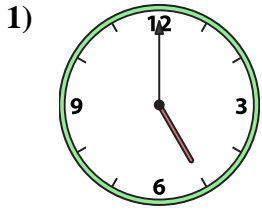
15. **F**

16. **P**



Abbina l'orologio analogico all'orologio digitale.

Risposte



1. _____
2. _____
3. _____
4. _____
5. _____
6. _____
7. _____
8. _____
9. _____
10. _____
11. _____
12. _____
13. _____
14. _____
15. _____
16. _____

A. 12:00

B. 8:00

C. 1:30

D. 3:00

E. 2:30

F. 4:30

G. 2:00

H. 10:30

I. 9:00

J. 10:00

K. 5:30

L. 9:30

M. 8:30

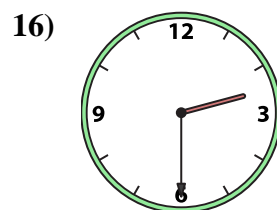
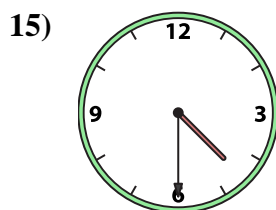
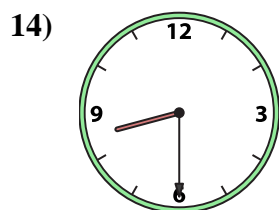
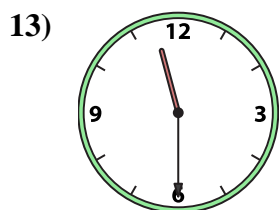

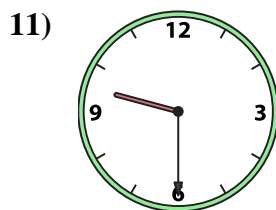
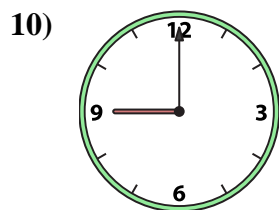
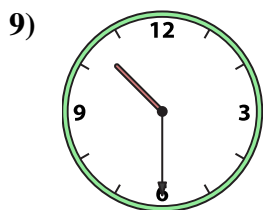
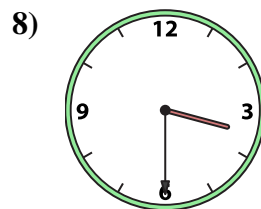
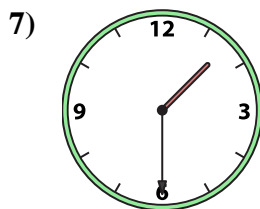
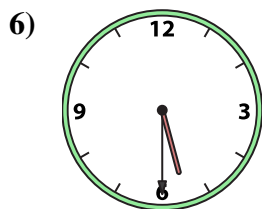
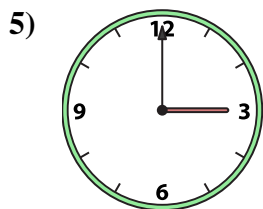
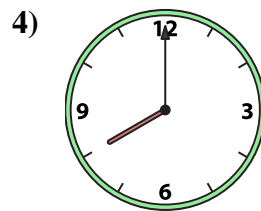
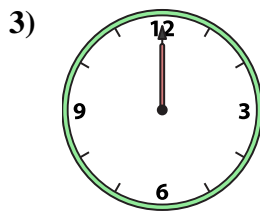
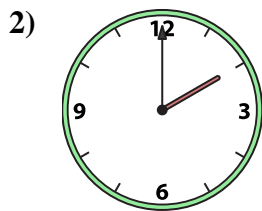
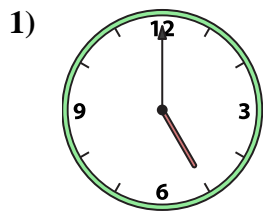
N. 5:00

O. 11:30

P. 3:30



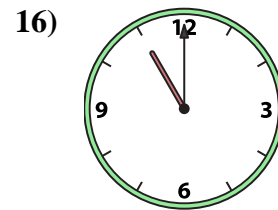
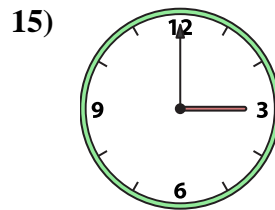
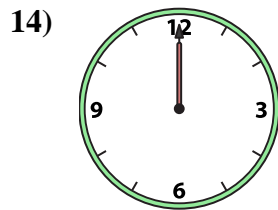
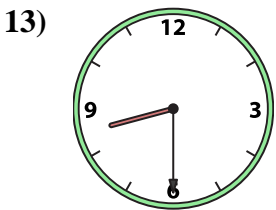
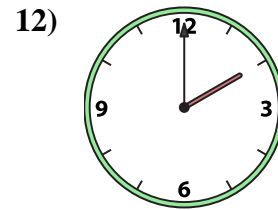
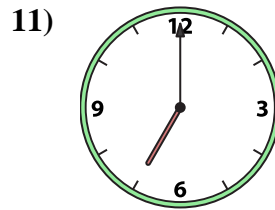
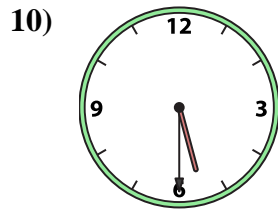
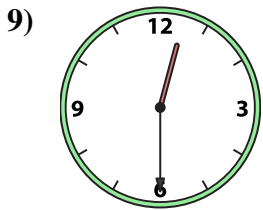
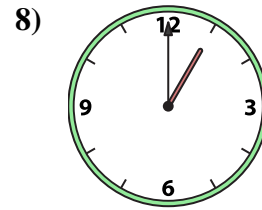
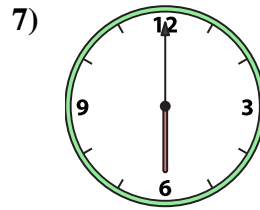
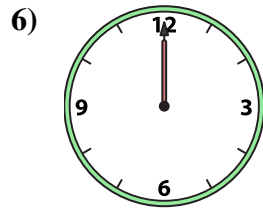
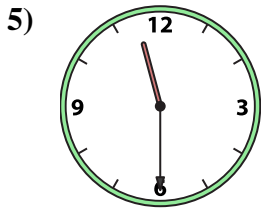
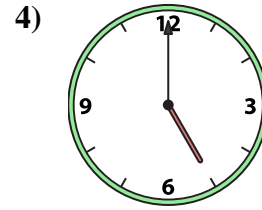
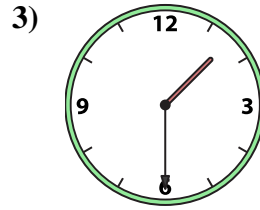
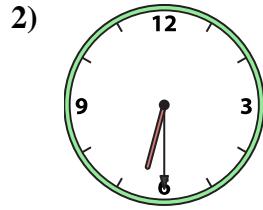
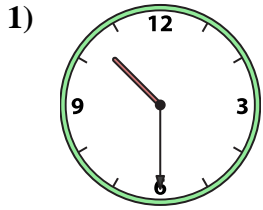
Abbina l'orologio analogico all'orologio digitale.

A. B. C. D. E. F. G. H. I. J. K. L. M. N. O. P. **Risposte**1. **N** 2. **G** 3. **A** 4. **B** 5. **D** 6. **K** 7. **C** 8. **P** 9. **H** 10. **I** 11. **L** 12. **J** 13. **O** 14. **M** 15. **F** 16. **E**



Abbina l'orologio analogico all'orologio digitale.

Risposte



A.

B.

C.

D.

E.

F.

G.

H.

I.

J.

K.

L.

M.

N.

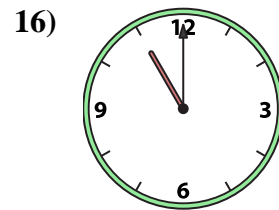
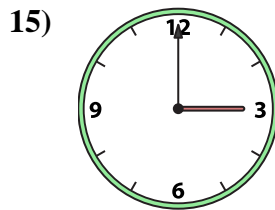
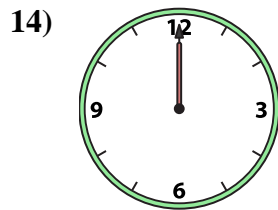
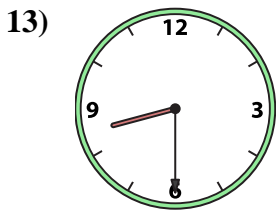
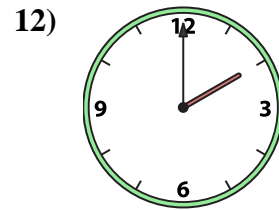
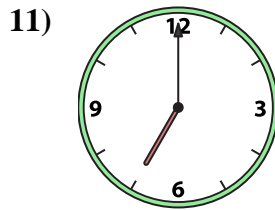
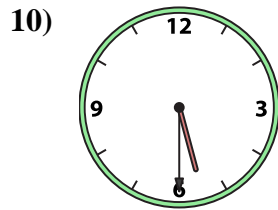
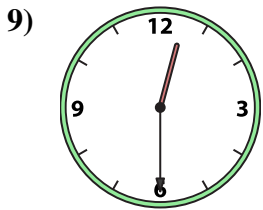
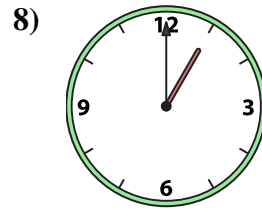
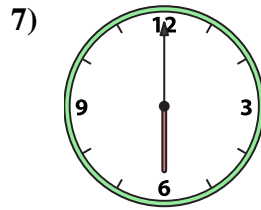
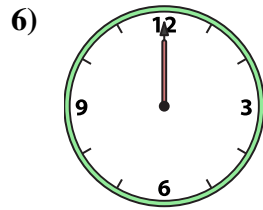
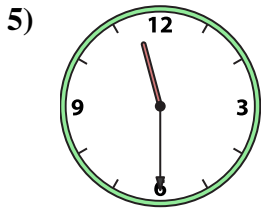
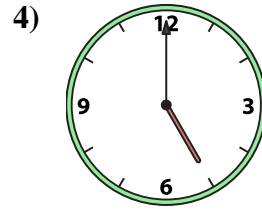
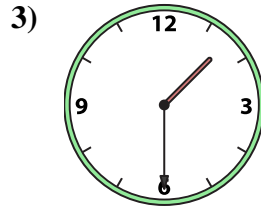
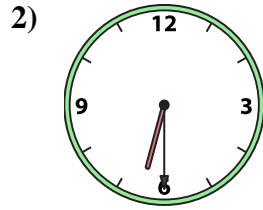
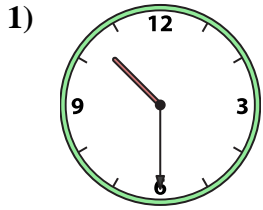
O.

P.

1. _____
2. _____
3. _____
4. _____
5. _____
6. _____
7. _____
8. _____
9. _____
10. _____
11. _____
12. _____
13. _____
14. _____
15. _____
16. _____



Abbina l'orologio analogico all'orologio digitale.



A.

B.

C.

D.

E.

F.

G.

H.

I.

J.

K.

L.

M.

N.

O.

P.

Risposte

1. **G**

2. **C**

3. **B**

4. **L**

5. **P**

6. **D**

7. **A**

8. **H**

9. **F**

10. **J**

11. **N**

12. **E**

13. **I**

14. **M**

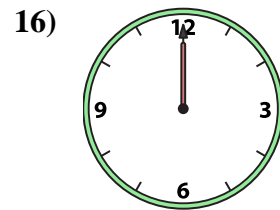

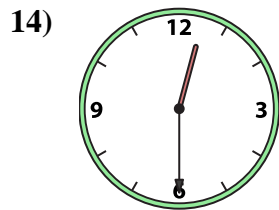
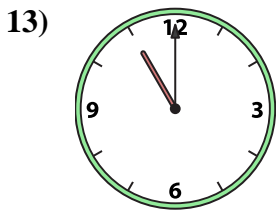
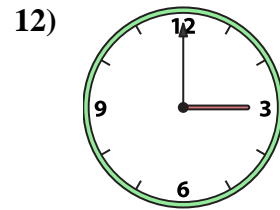
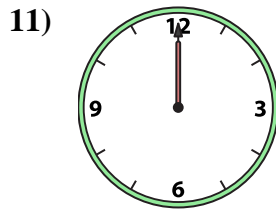
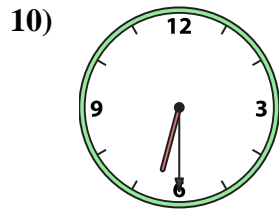
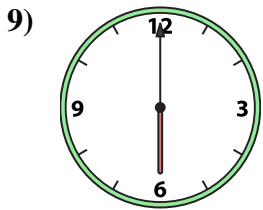
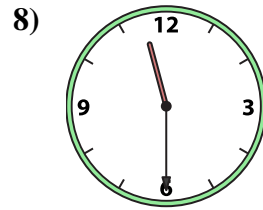
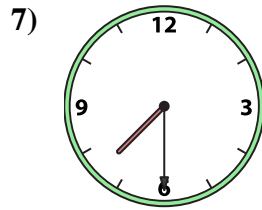
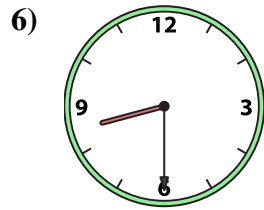
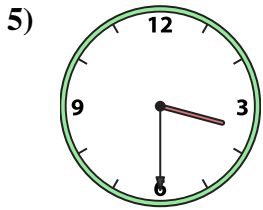
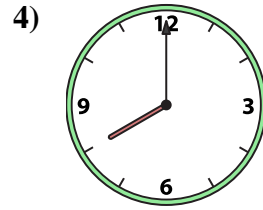
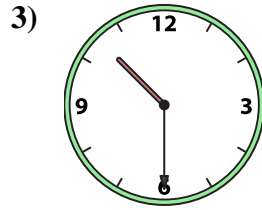
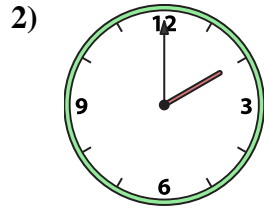

15. **O**

16. **K**



Abbina l'orologio analogico all'orologio digitale.

Risposte



A.

B.

C.

D.

E.

F.

G.

H.

I.

J.

K.

L.

M.

N.

O.

P.

1. _____

2. _____

3. _____

4. _____

5. _____

6. _____

7. _____

8. _____

9. _____

10. _____

11. _____

12. _____

13. _____

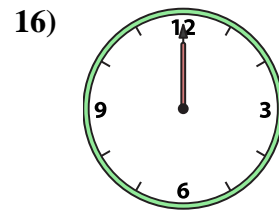

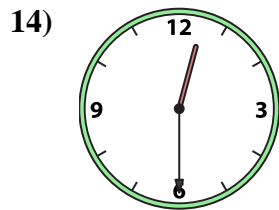
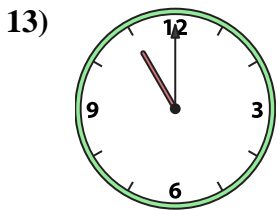
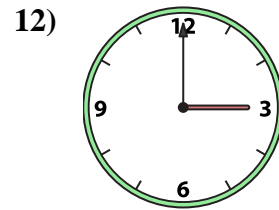
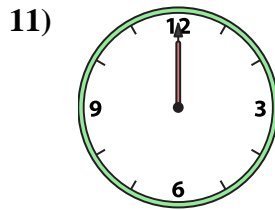
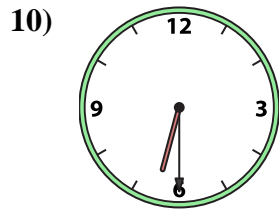
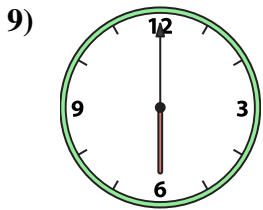
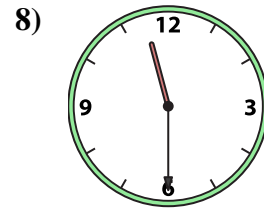
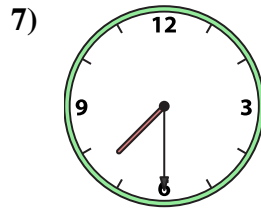
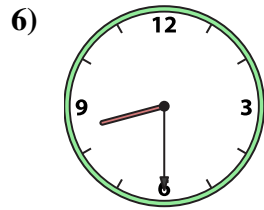
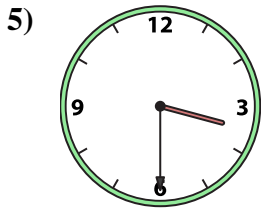
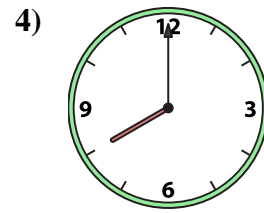
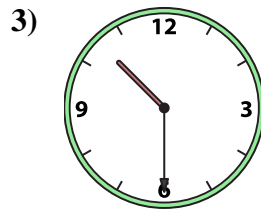
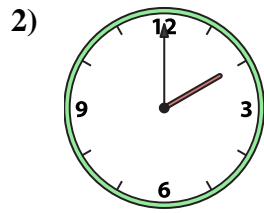

14. _____

15. _____

16. _____



Abbina l'orologio analogico all'orologio digitale.



A. 10:30

B. 2:00

C. 7:30

D. 12:30

E. 6:30

F. 1:00

G. 12:00

H. 6:00

I. 3:30

J. 3:00

K. 11:30

L. 5:00

M. 8:00

N. 12:00

O. 11:00

P. 8:30

Risposte

1. **F**

2. **B**

3. **A**

4. **M**

5. **I**

6. **P**

7. **C**

8. **K**

9. **H**

10. **E**

11. **N**

12. **J**

13. **O**

14. **D**

15. **L**

16. **G**