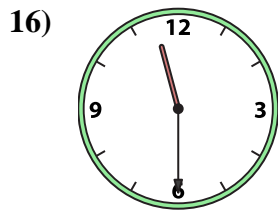
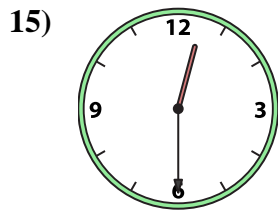
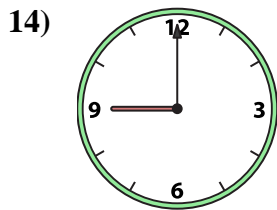
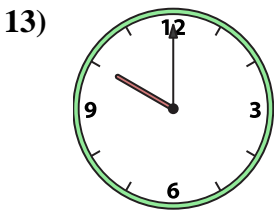
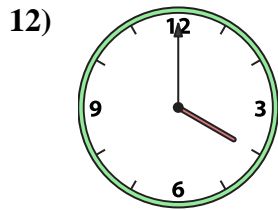
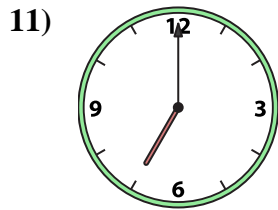
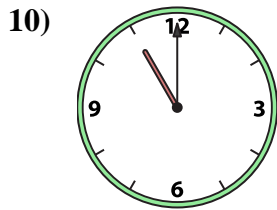
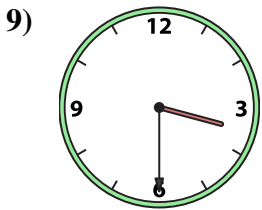
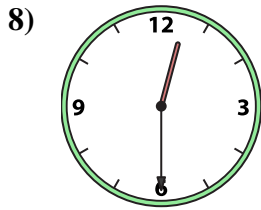
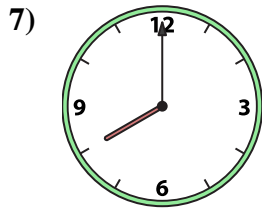
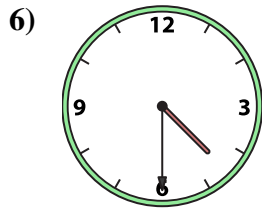
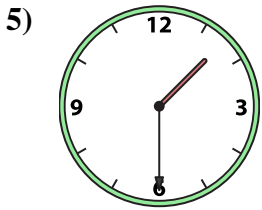
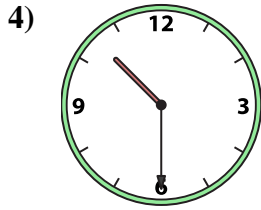

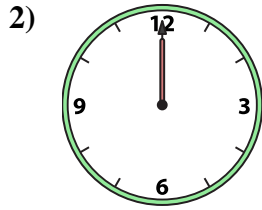
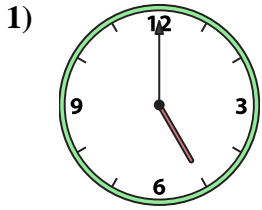




Abbina l'orologio analogico all'orologio digitale.

Risposte



1. _____
2. _____
3. _____
4. _____
5. _____
6. _____
7. _____
8. _____
9. _____
10. _____
11. _____
12. _____
13. _____
14. _____
15. _____
16. _____

A. 11:30

B. 9:00

C. 3:30

D. 12:30

E. 1:30

F. 11:00

G. 7:00

H. 4:30

I. 5:00

J. 10:00

K. 4:00

L. 8:00

M. 2:00

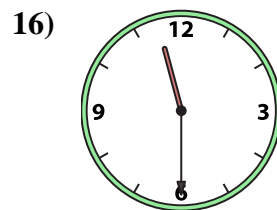
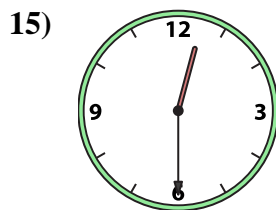
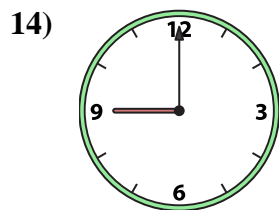
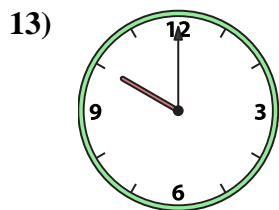
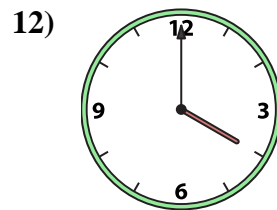
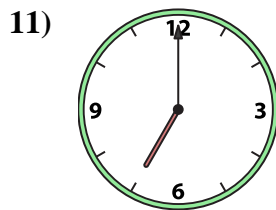
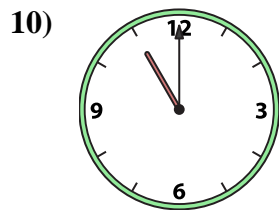
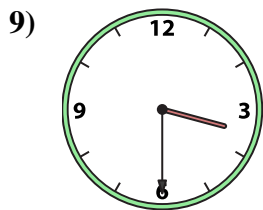
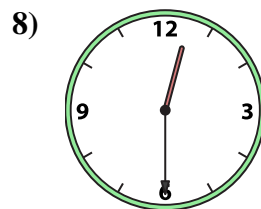
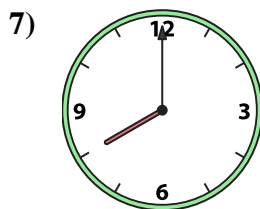
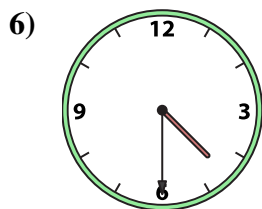
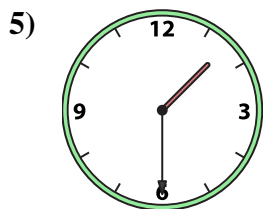
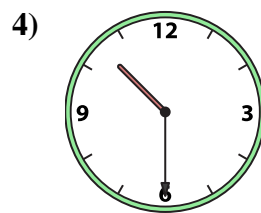
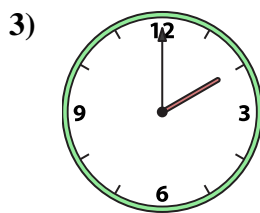
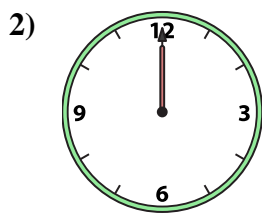
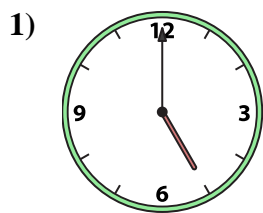
N. 12:00

O. 10:30

P. 12:30



Abbina l'orologio analogico all'orologio digitale.



A. **11:30**

B. **9:00**

C. **3:30**

D. **12:30**

E. **1:30**

F. **11:00**

G. **7:00**

H. **4:30**

I. **5:00**

J. **10:00**

K. **4:00**

L. **8:00**

M. **2:00**

N. **12:00**

O. **10:30**

P. **12:30**

Risposte

1. **I**

2. **N**

3. **M**

4. **O**

5. **E**

6. **H**

7. **L**

8. **P**

9. **C**

10. **F**

11. **G**

12. **K**

13. **J**

14. **B**

15. **D**

16. **A**