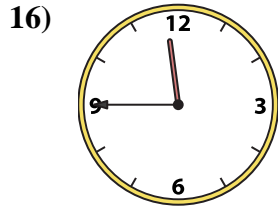
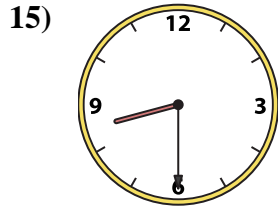
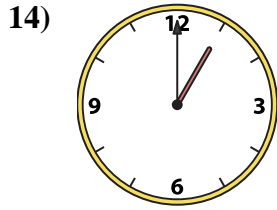
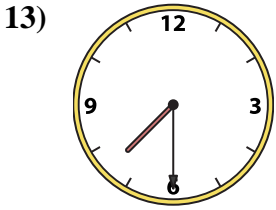
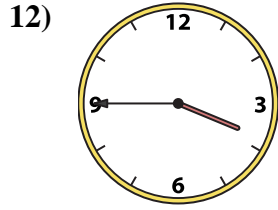
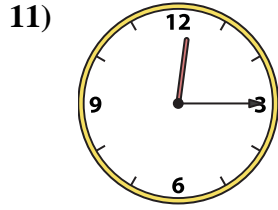
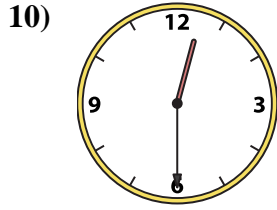
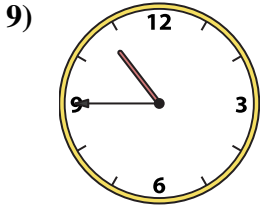
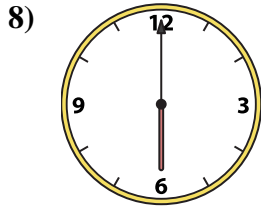
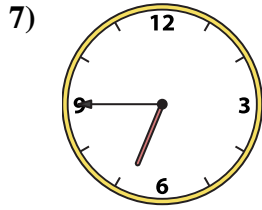
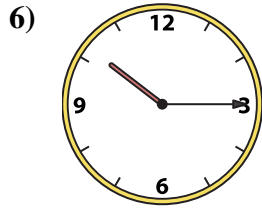
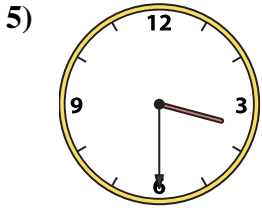
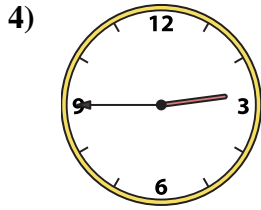
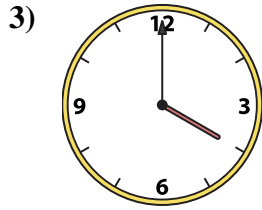
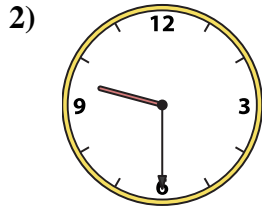





Abbina l'orologio analogico all'orologio digitale.

Risposte



A. 6:00

B. 10:15

C. 2:45

D. 11:45

E. 7:30

F. 3:45

G. 10:45

H. 1:00

I. 12:30

J. 9:30

K. 6:45

L. 3:30

M. 4:00

N. 2:00

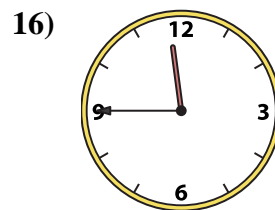
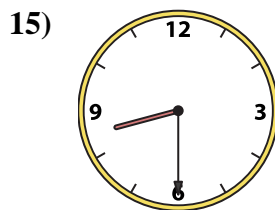
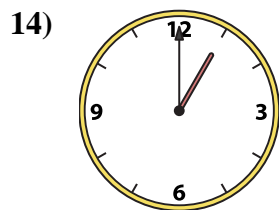
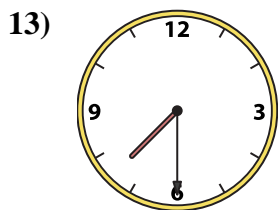
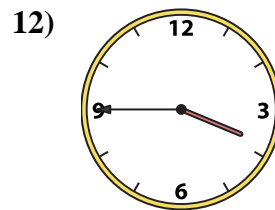
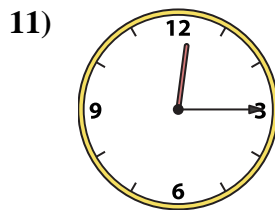
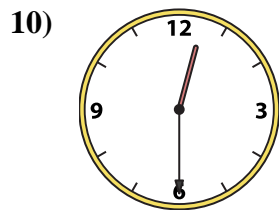
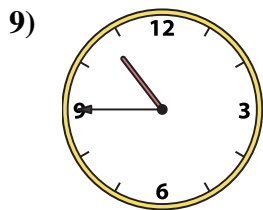
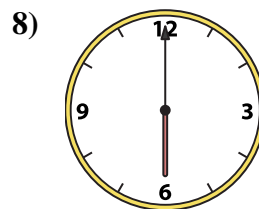
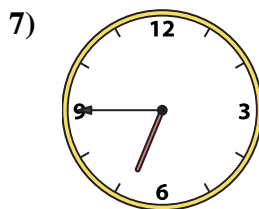
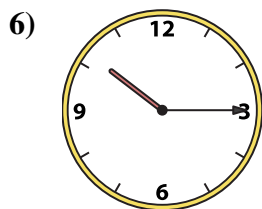
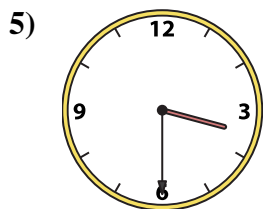
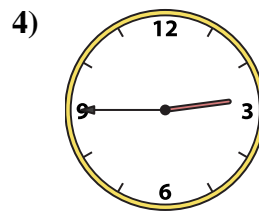
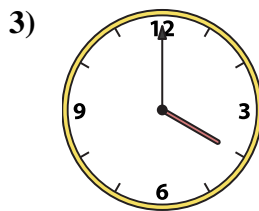
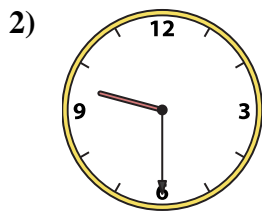
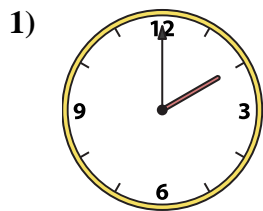
O. 8:30

P. 12:15

1. _____
2. _____
3. _____
4. _____
5. _____
6. _____
7. _____
8. _____
9. _____
10. _____
11. _____
12. _____
13. _____
14. _____
15. _____
16. _____



Abbina l'orologio analogico all'orologio digitale.

A. **6:00**B. **10:15**C. **2:45**D. **11:45**E. **7:30**F. **3:45**G. **10:45**H. **1:00**I. **12:30**J. **9:30**K. **6:45**L. **3:30**M. **4:00**N. **2:00**O. **8:30**P. **12:15****Risposte**1. **N**2. **J**3. **M**4. **C**5. **L**6. **B**7. **K**8. **A**9. **G**10. **I**11. **P**12. **F**13. **E**14. **H**15. **O**16. **D**