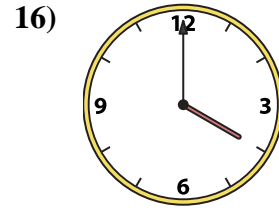
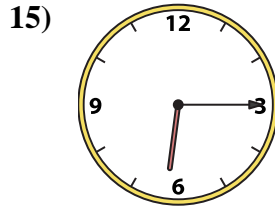
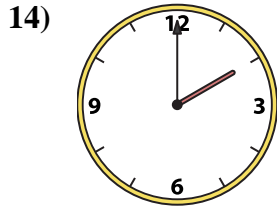
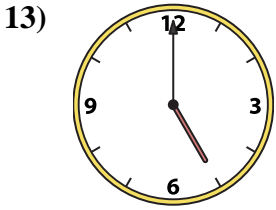
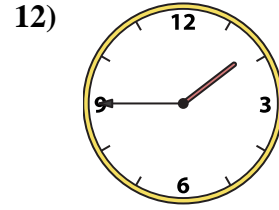
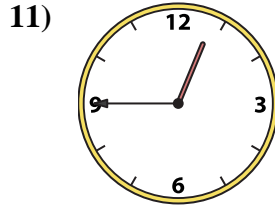
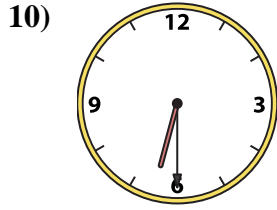
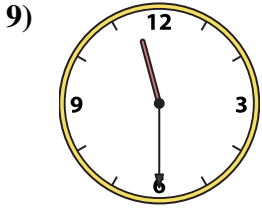
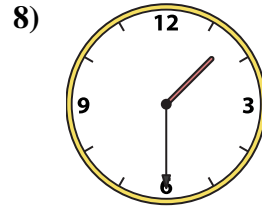
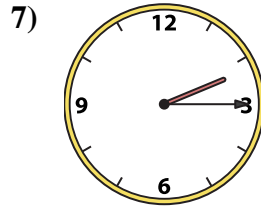
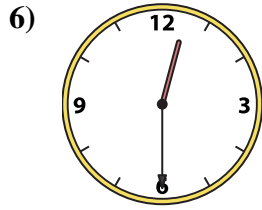
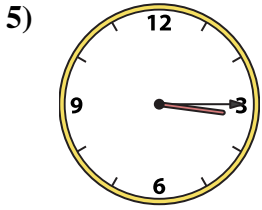
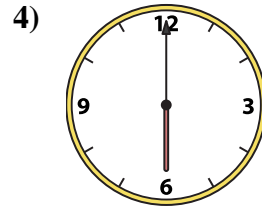
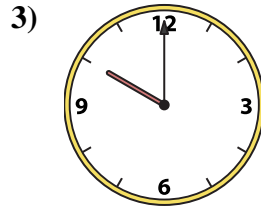
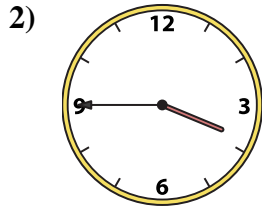
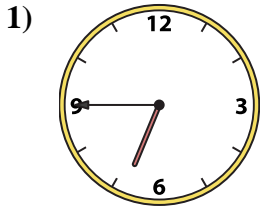




Abbina l'orologio analogico all'orologio digitale.

**Risposte**



A.

B.

C.

D.

E.

F.

G.

H.

I.

J.

K.

L.

M.

N.

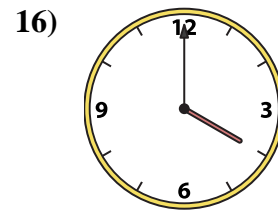
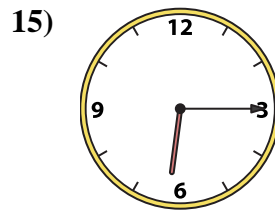
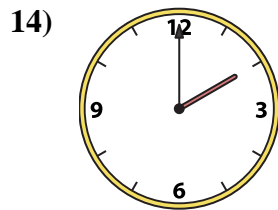
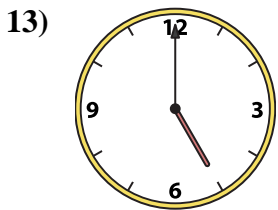
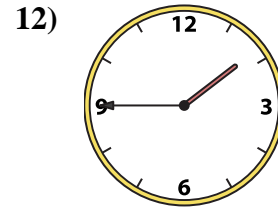
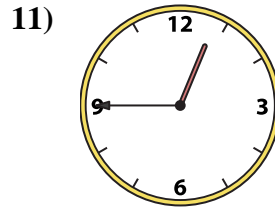
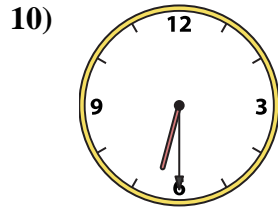
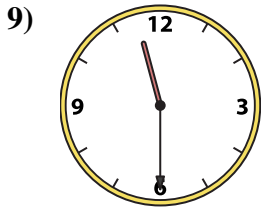
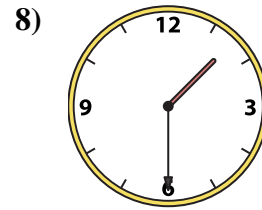
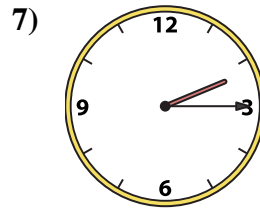
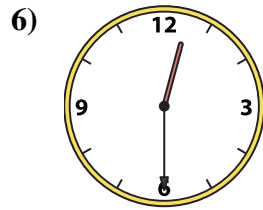
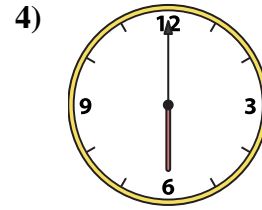
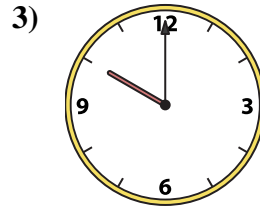
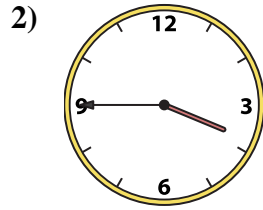
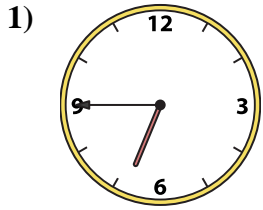
O.

P.

1. \_\_\_\_\_
2. \_\_\_\_\_
3. \_\_\_\_\_
4. \_\_\_\_\_
5. \_\_\_\_\_
6. \_\_\_\_\_
7. \_\_\_\_\_
8. \_\_\_\_\_
9. \_\_\_\_\_
10. \_\_\_\_\_
11. \_\_\_\_\_
12. \_\_\_\_\_
13. \_\_\_\_\_
14. \_\_\_\_\_
15. \_\_\_\_\_
16. \_\_\_\_\_



Abbina l'orologio analogico all'orologio digitale.

A. B. C. D. E. F. G. H. I. J. K. L. M. N. O. P. **Risposte**1. **F**2. **K**3. **N**4. **E**5. **O**6. **L**7. **G**8. **C**9. **I**10. **A**11. **H**12. **P**13. **D**14. **J**15. **B**16. **M**