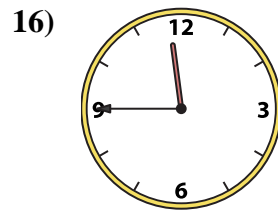
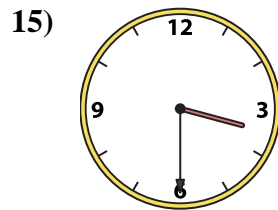
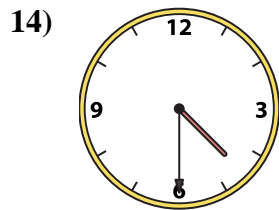
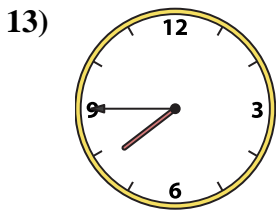
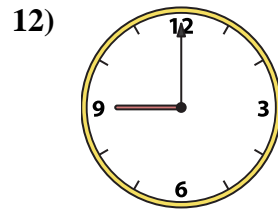
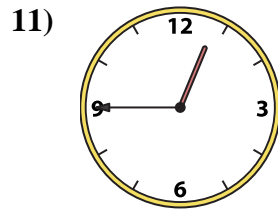
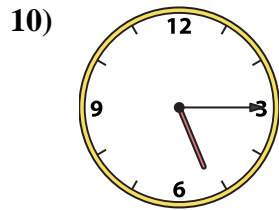
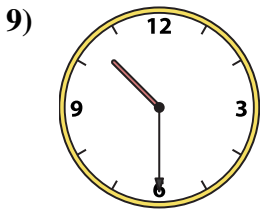
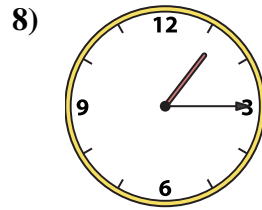
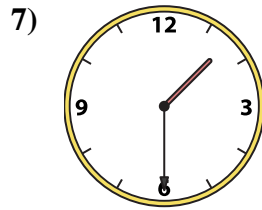
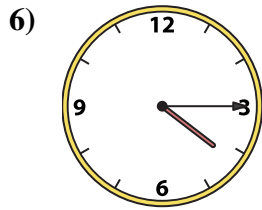
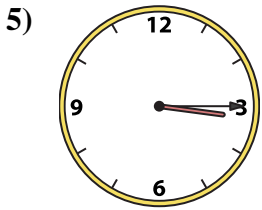
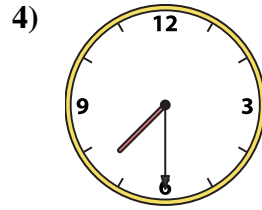
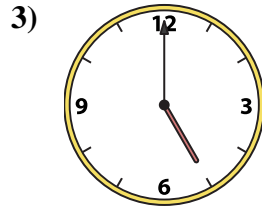
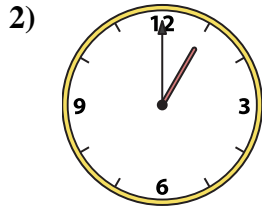
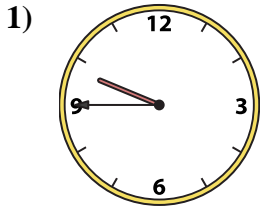




Abbina l'orologio analogico all'orologio digitale.

Risposte



A. 11:45

B. 10:30

C. 1:00

D. 7:45

E. 5:00

F. 4:30

G. 4:15

H. 5:15

I. 3:15

J. 3:30

K. 9:00

L. 7:30

M. 1:30

N. 9:45

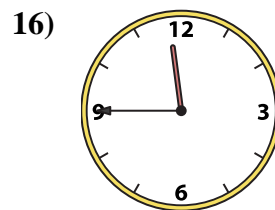
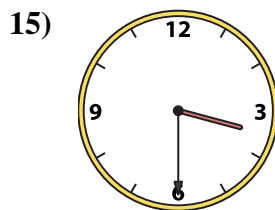
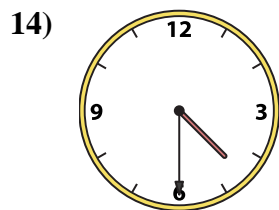
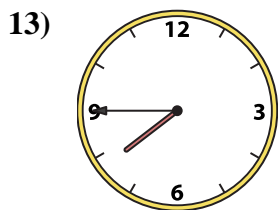
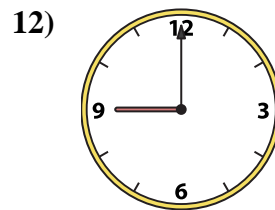
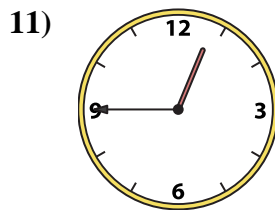
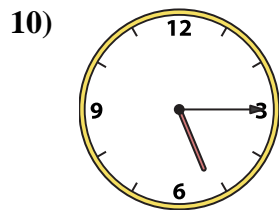
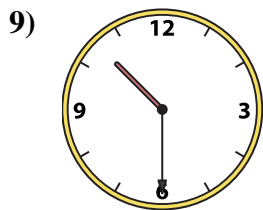
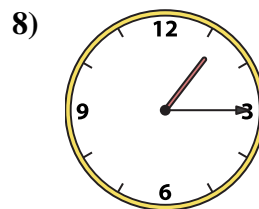
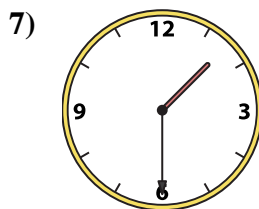
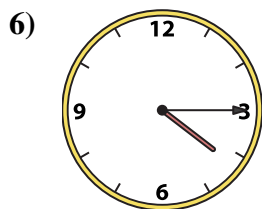
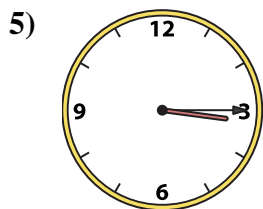
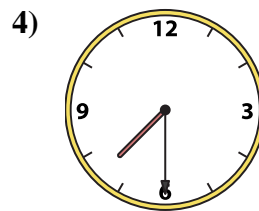
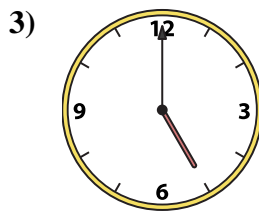
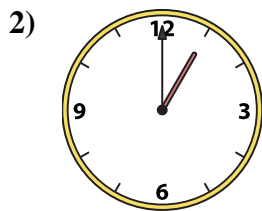
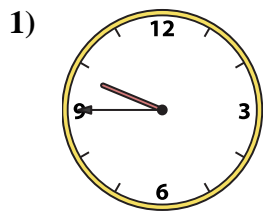
O. 1:15

P. 12:45

1. _____
2. _____
3. _____
4. _____
5. _____
6. _____
7. _____
8. _____
9. _____
10. _____
11. _____
12. _____
13. _____
14. _____
15. _____
16. _____



Abbina l'orologio analogico all'orologio digitale.

A. **11:45**B. **10:30**C. **1:00**D. **7:45**E. **5:00**F. **4:30**G. **4:15**H. **5:15**I. **3:15**J. **3:30**K. **9:00**L. **7:30**M. **1:30**N. **9:45**O. **1:15**P. **12:45****Risposte**1. **N**2. **C**3. **E**4. **L**5. **I**6. **G**7. **M**8. **O**9. **B**10. **H**11. **P**12. **K**13. **D**14. **F**15. **J**16. **A**