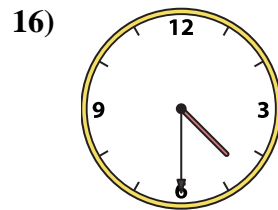
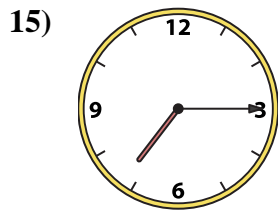
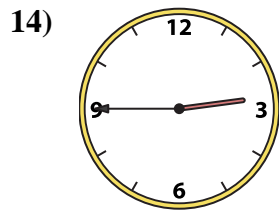
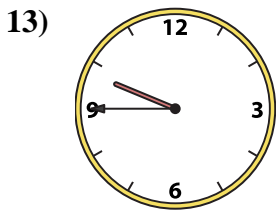
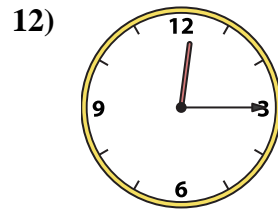
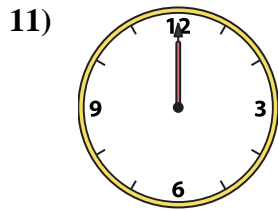
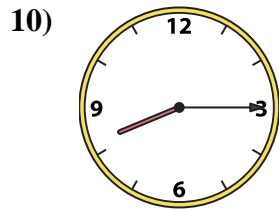
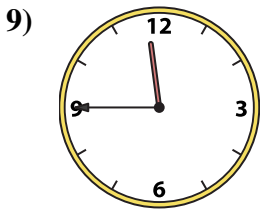
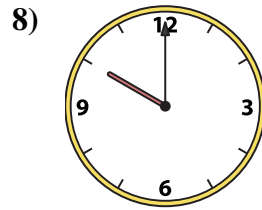
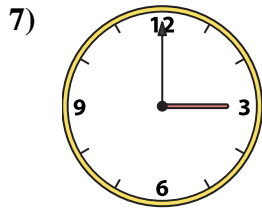

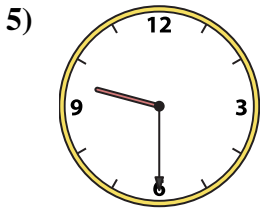
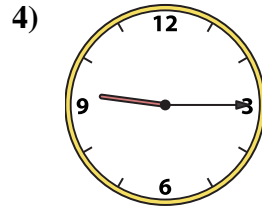
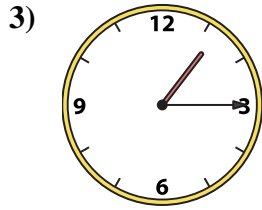
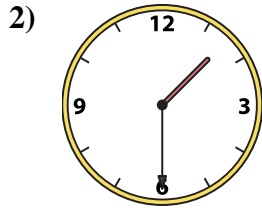
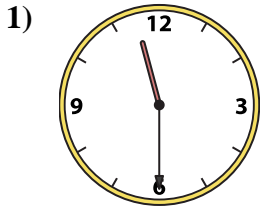




Abbina l'orologio analogico all'orologio digitale.

**Risposte**



1. \_\_\_\_\_
2. \_\_\_\_\_
3. \_\_\_\_\_
4. \_\_\_\_\_
5. \_\_\_\_\_
6. \_\_\_\_\_
7. \_\_\_\_\_
8. \_\_\_\_\_
9. \_\_\_\_\_
10. \_\_\_\_\_
11. \_\_\_\_\_
12. \_\_\_\_\_
13. \_\_\_\_\_
14. \_\_\_\_\_
15. \_\_\_\_\_
16. \_\_\_\_\_

A. 11:30

B. 3:00

C. 9:30

D. 1:30

E. 11:45

F. 9:45

G. 10:00

H. 12:00

I. 8:15

J. 1:15

K. 9:15

L. 11:00

M. 7:15

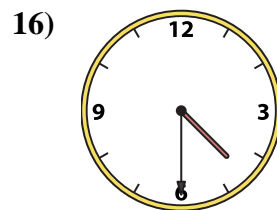
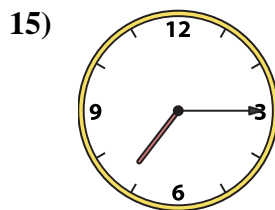
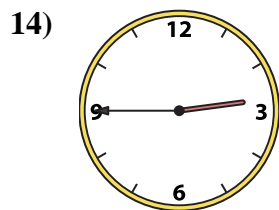
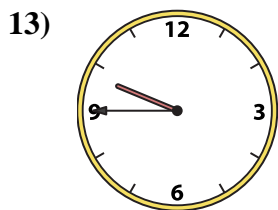
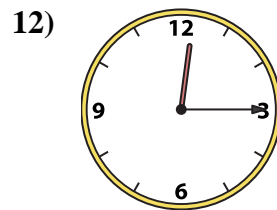
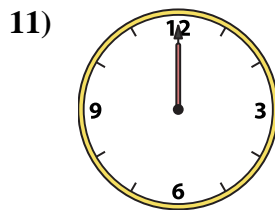
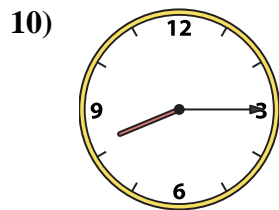
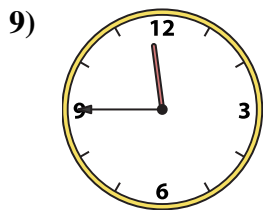
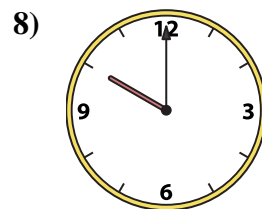
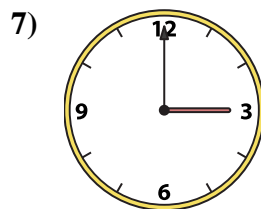
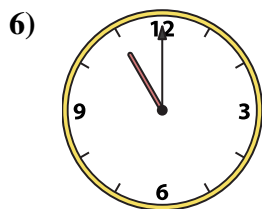
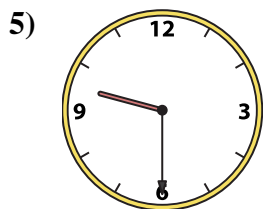
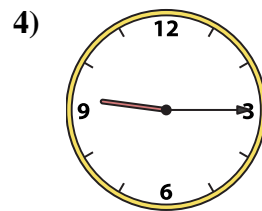
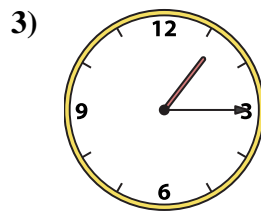
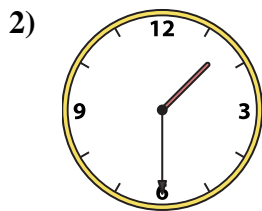
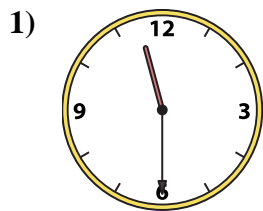
N. 2:45

O. 4:30

P. 12:15



Abbina l'orologio analogico all'orologio digitale.

A. B. C. D. E. F. G. H. I. J. K. L. M. N. O. P. **Risposte**1.   **A**  2.   **D**  3.   **J**  4.   **K**  5.   **C**  6.   **L**  7.   **B**  8.   **G**  9.   **E**  10.   **I**  11.   **H**  12.   **P**  13.   **F**  14.   **N**  15.   **M**  16.   **O**