



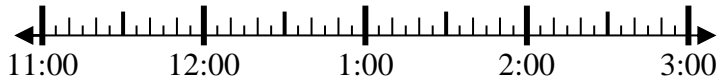
Risolvi ogni problema.

Risposte

1) Inizio: 11:35

Elapsed: _____

Fine: 1:05



1. _____

2) Inizio: 6:55

Elapsed: _____

Fine: 9:05



2. _____

3) Inizio: 8:20

Elapsed: _____

Fine: 10:40

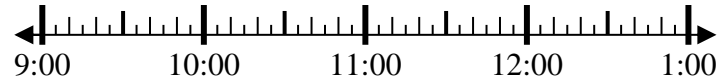


3. _____

4) Inizio: 9:15

Elapsed: _____

Fine: 10:35



4. _____

5) Inizio: 2:10

Elapsed: _____

Fine: 3:30

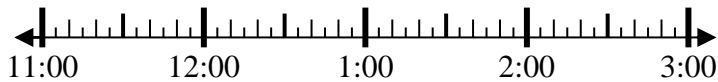


5. _____

6) Inizio: 11:10

Elapsed: _____

Fine: 1:00

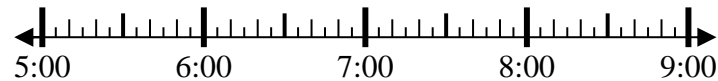


6. _____

7) Inizio: 5:10

Elapsed: _____

Fine: 7:20

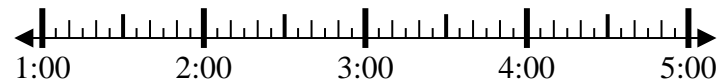


7. _____

8) Inizio: 1:15

Elapsed: _____

Fine: 2:45



8. _____



Risolvi ogni problema.

1) Inizio: 11:35

Elapsed: 1 ora e 30 minuti

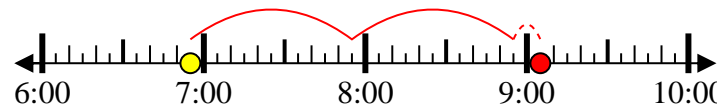
Fine: 1:05



2) Inizio: 6:55

Elapsed: 2 ore e 10 minuti

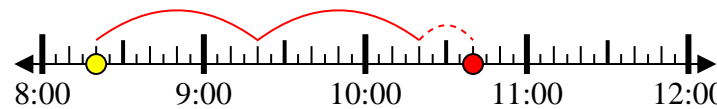
Fine: 9:05



3) Inizio: 8:20

Elapsed: 2 ore e 20 minuti

Fine: 10:40



4) Inizio: 9:15

Elapsed: 1 ora e 20 minuti

Fine: 10:35



5) Inizio: 2:10

Elapsed: 1 ora e 20 minuti

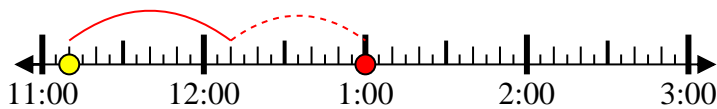
Fine: 3:30



6) Inizio: 11:10

Elapsed: 1 ora e 50 minuti

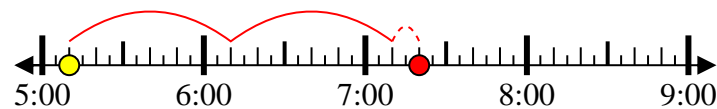
Fine: 1:00



7) Inizio: 5:10

Elapsed: 2 ore e 10 minuti

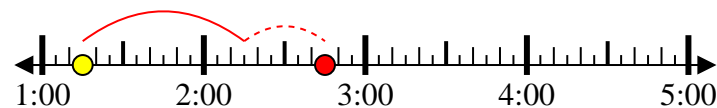
Fine: 7:20



8) Inizio: 1:15

Elapsed: 1 ora e 30 minuti

Fine: 2:45



Risposte

1. 1 ora e 30 minuti

2. 2 ore e 10 minuti

3. 2 ore e 20 minuti

4. 1 ora e 20 minuti

5. 1 ora e 20 minuti

6. 1 ora e 50 minuti

7. 2 ore e 10 minuti

8. 1 ora e 30 minuti