



**Risolvi ogni problema.**

**Risposte**

1) Inizio: 12:10

Elapsed: \_\_\_\_\_

Fine: 1:35



1. \_\_\_\_\_

2) Inizio: 6:40

Elapsed: \_\_\_\_\_

Fine: 8:50

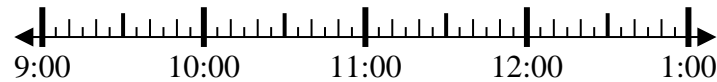


2. \_\_\_\_\_

3) Inizio: 9:05

Elapsed: \_\_\_\_\_

Fine: 11:55

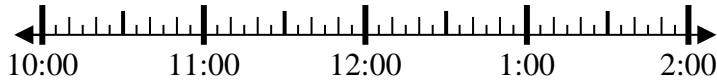


3. \_\_\_\_\_

4) Inizio: 10:45

Elapsed: \_\_\_\_\_

Fine: 1:25



4. \_\_\_\_\_

5) Inizio: 5:35

Elapsed: \_\_\_\_\_

Fine: 7:05



5. \_\_\_\_\_

6) Inizio: 8:15

Elapsed: \_\_\_\_\_

Fine: 10:40

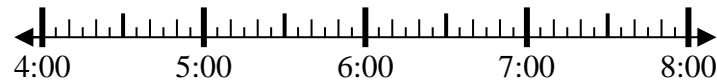


6. \_\_\_\_\_

7) Inizio: 4:10

Elapsed: \_\_\_\_\_

Fine: 7:05

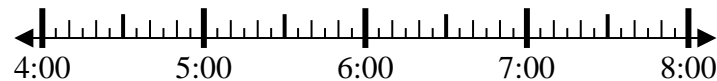


7. \_\_\_\_\_

8) Inizio: 4:00

Elapsed: \_\_\_\_\_

Fine: 6:20



8. \_\_\_\_\_



**Risolvi ogni problema.**

1) Inizio: 12:10

Elapsed: 1 ora e 25 minuti

Fine: 1:35



2) Inizio: 6:40

Elapsed: 2 ore e 10 minuti

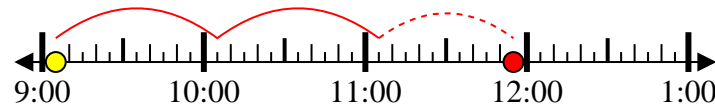
Fine: 8:50



3) Inizio: 9:05

Elapsed: 2 ore e 50 minuti

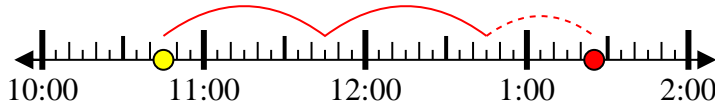
Fine: 11:55



4) Inizio: 10:45

Elapsed: 2 ore e 40 minuti

Fine: 1:25



5) Inizio: 5:35

Elapsed: 1 ora e 30 minuti

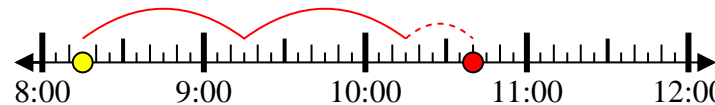
Fine: 7:05



6) Inizio: 8:15

Elapsed: 2 ore e 25 minuti

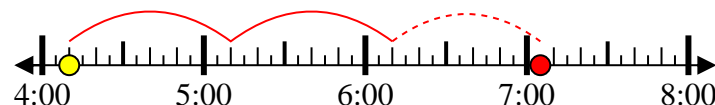
Fine: 10:40



7) Inizio: 4:10

Elapsed: 2 ore e 55 minuti

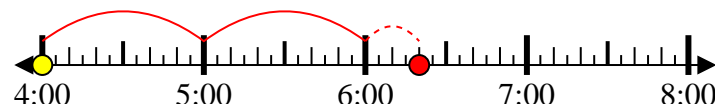
Fine: 7:05



8) Inizio: 4:00

Elapsed: 2 ore e 20 minuti

Fine: 6:20



**Risposte**

1. 1 ora e 25 minuti

2. 2 ore e 10 minuti

3. 2 ore e 50 minuti

4. 2 ore e 40 minuti

5. 1 ora e 30 minuti

6. 2 ore e 25 minuti

7. 2 ore e 55 minuti

8. 2 ore e 20 minuti