



Abbinare ogni tabella al grafico appropriato.

Risposte

1)

Nome	Lattine Riciclate
Allen	3
Beth	4
Rick	5
Andrea	3
Dale	4

2)

Nome	Lattine Riciclate
Allen	3
Beth	4
Rick	3
Andrea	5
Dale	4

3)

Nome	Lattine Riciclate
Allen	1
Beth	2
Rick	3
Andrea	3
Dale	4

4)

Nome	Lattine Riciclate
Allen	3
Beth	4
Rick	5
Andrea	3
Dale	4

5)

Nome	Lattine Riciclate
Allen	1
Beth	3
Rick	3
Andrea	5
Dale	4

6)

Nome	Lattine Riciclate
Allen	1
Beth	3
Rick	3
Andrea	5
Dale	3

1. _____

2. _____

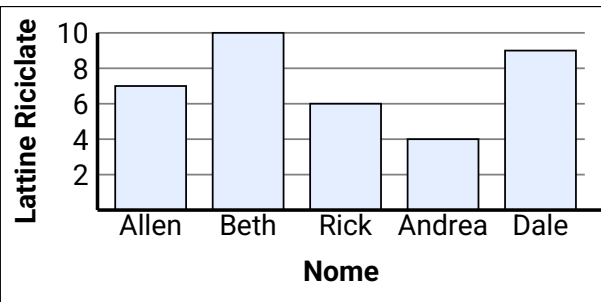
3. _____

4. _____

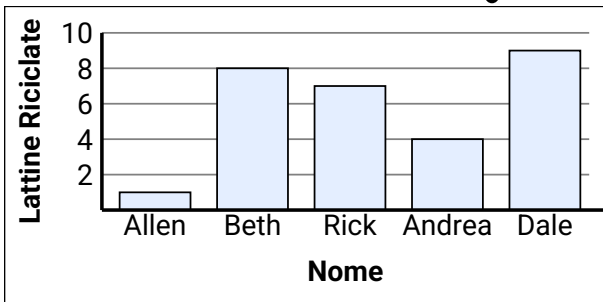
5. _____

6. _____

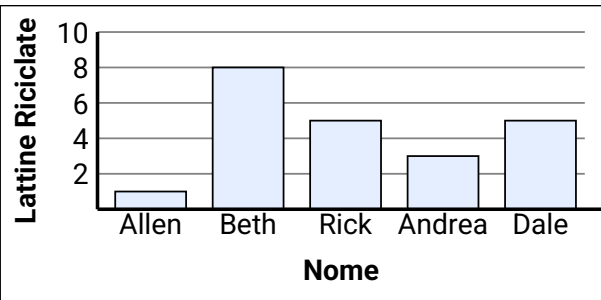
A.



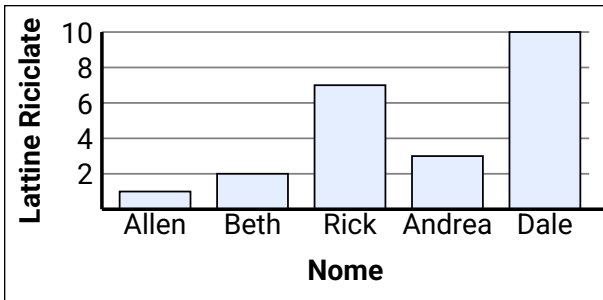
B.



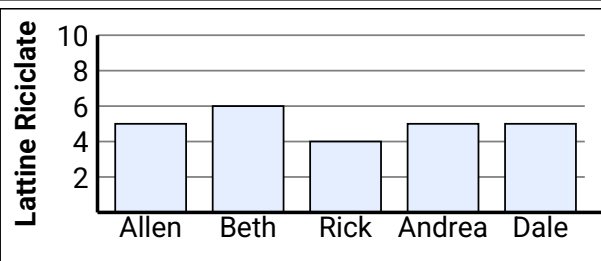
C.



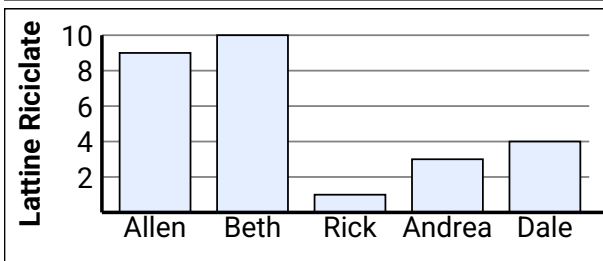
D.



E.



F.





Abbina ogni tabella al grafico appropriato.

Risposte

1)

Nome	Lattine Riciclate
Allen	3
Beth	4
Rick	5
Andrea	3
Dale	4

2)

Nome	Lattine Riciclate
Allen	3
Beth	4
Rick	3
Andrea	3
Dale	4

3)

Nome	Lattine Riciclate
Allen	1
Beth	2
Rick	3
Andrea	2
Dale	4

4)

Nome	Lattine Riciclate
Allen	3
Beth	4
Rick	5
Andrea	3
Dale	4

5)

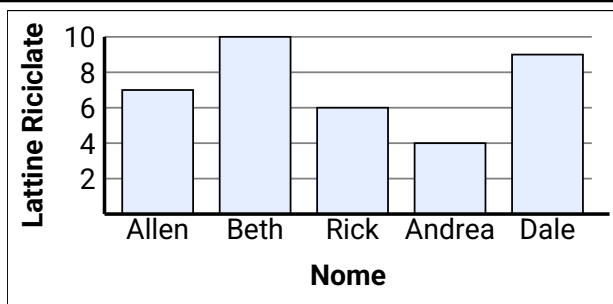
Nome	Lattine Riciclate
Allen	1
Beth	3
Rick	3
Andrea	3
Dale	4

6)

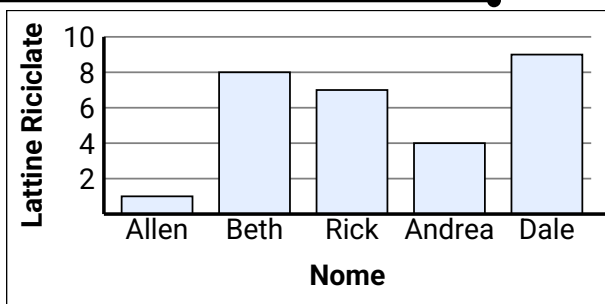
Nome	Lattine Riciclate
Allen	1
Beth	3
Rick	3
Andrea	3
Dale	2

1. **E**2. **A**3. **D**4. **F**5. **B**6. **C**

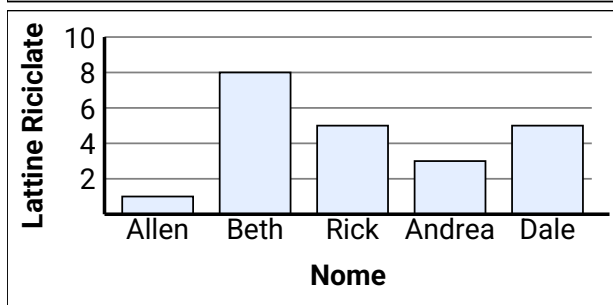
A.



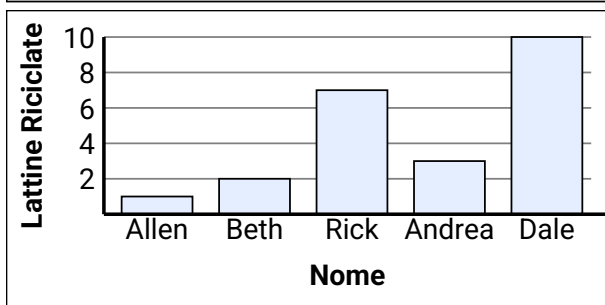
B.



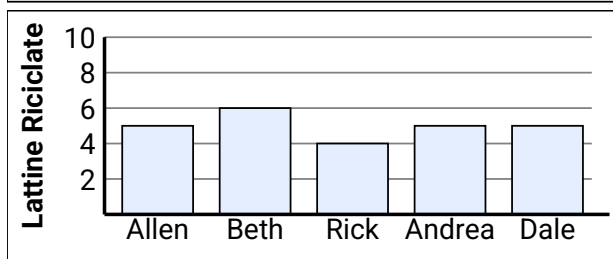
C.



D.



E.



F.

