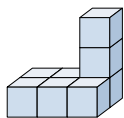




Risolvi ogni problema.

Risposte

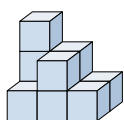
1) Guardando la figura in 3d da dietro, cosa vedresti?



- A.
- B.
- C.
- D.

1. _____

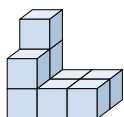
2) Guardando la figura in 3d dal lato sinistro, cosa vedresti?



- A.
- B.
- C.
- D.

2. _____

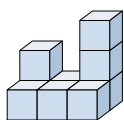
3) Guardando la figura in 3d dall'alto, cosa vedresti?



- A.
- B.
- C.
- D.

3. _____

4) Guardando la figura in 3d da dietro, cosa vedresti?



- A.
- B.
- C.
- D.

4. _____

5) Guardando la figura in 3d dall'alto, cosa vedresti?



- A.
- B.
- C.
- D.

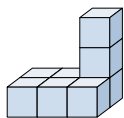
5. _____



Risolvi ogni problema.

Risposte

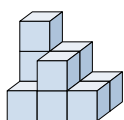
1) Guardando la figura in 3d da dietro, cosa vedresti?



- A.
- B.
- C.
- D.

1. **B**

2) Guardando la figura in 3d dal lato sinistro, cosa vedresti?



- A.
- B.
- C.
- D.

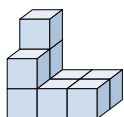
2. **B**

3. **D**

4. **D**

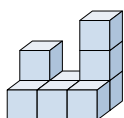
5. **D**

3) Guardando la figura in 3d dall'alto, cosa vedresti?



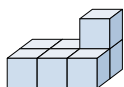
- A.
- B.
- C.
- D.

4) Guardando la figura in 3d da dietro, cosa vedresti?



- A.
- B.
- C.
- D.

5) Guardando la figura in 3d dall'alto, cosa vedresti?



- A.
- B.
- C.
- D.