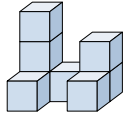




Risolvi ogni problema.

Risposte

1) Guardando la figura in 3d dall'alto, cosa vedresti?

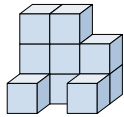


A. B. C. D.



1. _____

2) Guardando la figura in 3d dall'alto, cosa vedresti?



A. B. C. D.



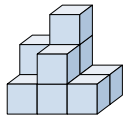
2. _____

3. _____

4. _____

5. _____

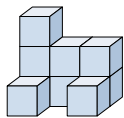
3) Guardando la figura in 3d dal lato destro, cosa vedresti?



A. B. C. D.



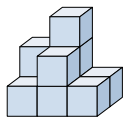
4) Guardando la figura in 3d dall'alto, cosa vedresti?



A. B. C. D.



5) Guardando la figura in 3d dall'alto, cosa vedresti?



A. B. C. D.

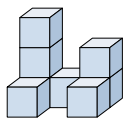




Risolvi ogni problema.

Risposte

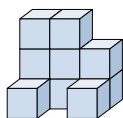
- 1) Guardando la figura in 3d dall'alto, cosa vedresti?



A. B. C. D.

1. **A**

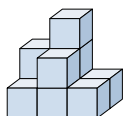
- 2) Guardando la figura in 3d dall'alto, cosa vedresti?



A. B. C. D.

2. **C** 3. **D** 4. **A** 5. **C**

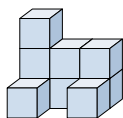
- 3) Guardando la figura in 3d dal lato destro, cosa vedresti?



A. B. C. D.



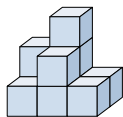
- 4) Guardando la figura in 3d dall'alto, cosa vedresti?



A. B. C. D.



- 5) Guardando la figura in 3d dall'alto, cosa vedresti?



A. B. C. D.

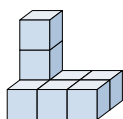








Risolvi ogni problema.

Risposte

1) Guardando la figura in 3d dal lato destro, cosa vedresti?



- A.  B.  C.  D. 

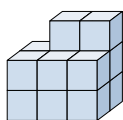
1. _____

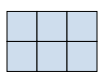



2. _____

3. _____

4. _____

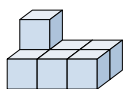
2) Guardando la figura in 3d da dietro, cosa vedresti?







- A.  B.  C.  D. 

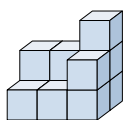
5. _____





3) Guardando la figura in 3d dal lato destro, cosa vedresti?



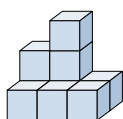
- A.  B.  C.  D. 





4) Guardando la figura in 3d dall'alto, cosa vedresti?



- A.  B.  C.  D. 

5) Guardando la figura in 3d da dietro, cosa vedresti?



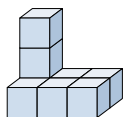
- A.  B.  C.  D. 



Risolvi ogni problema.

Risposte

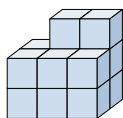
1) Guardando la figura in 3d dal lato destro, cosa vedresti?



- A.
- B.
- C.
- D.

1. **C**

2) Guardando la figura in 3d da dietro, cosa vedresti?



- A.
- B.
- C.
- D.

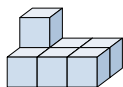
2. **C**

3. **A**

4. **B**

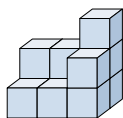
5. **B**

3) Guardando la figura in 3d dal lato destro, cosa vedresti?



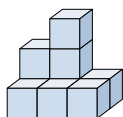
- A.
- B.
- C.
- D.

4) Guardando la figura in 3d dall'alto, cosa vedresti?



- A.
- B.
- C.
- D.

5) Guardando la figura in 3d da dietro, cosa vedresti?



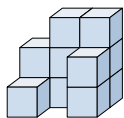
- A.
- B.
- C.
- D.



Risolvi ogni problema.

Risposte

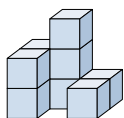
1) Guardando la figura in 3d da dietro, cosa vedresti?



- A.
- B.
- C.
- D.

1. _____

2) Guardando la figura in 3d da dietro, cosa vedresti?



- A.
- B.
- C.
- D.

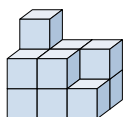
2. _____

3. _____

4. _____

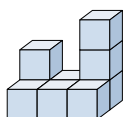
5. _____

3) Guardando la figura in 3d da dietro, cosa vedresti?



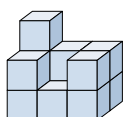
- A.
- B.
- C.
- D.

4) Guardando la figura in 3d dal lato sinistro, cosa vedresti?



- A.
- B.
- C.
- D.

5) Guardando la figura in 3d da dietro, cosa vedresti?



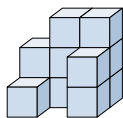
- A.
- B.
- C.
- D.



Risolvi ogni problema.

Risposte

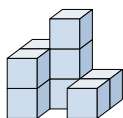
1) Guardando la figura in 3d da dietro, cosa vedresti?



- A.
- B.
- C.
- D.

1. **B**

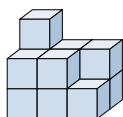
2) Guardando la figura in 3d da dietro, cosa vedresti?



- A.
- B.
- C.
- D.

2. **B**

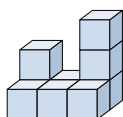
3) Guardando la figura in 3d da dietro, cosa vedresti?



- A.
- B.
- C.
- D.

3. **C**

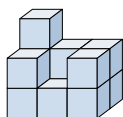
4) Guardando la figura in 3d dal lato sinistro, cosa vedresti?



- A.
- B.
- C.
- D.

4. **B**

5) Guardando la figura in 3d da dietro, cosa vedresti?



- A.
- B.
- C.
- D.

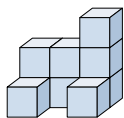
5. **C**



Risolvi ogni problema.

Risposte

1) Guardando la figura in 3d dall'alto, cosa vedresti?

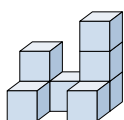


A. B. C. D.



1. _____

2) Guardando la figura in 3d dal lato sinistro, cosa vedresti?



A. B. C. D.



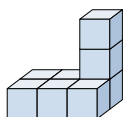
2. _____

3. _____

4. _____

5. _____

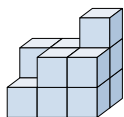
3) Guardando la figura in 3d dall'alto, cosa vedresti?



A. B. C. D.



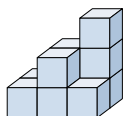
4) Guardando la figura in 3d dal lato sinistro, cosa vedresti?



A. B. C. D.



5) Guardando la figura in 3d dal lato destro, cosa vedresti?



A. B. C. D.

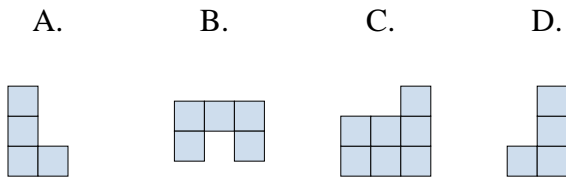
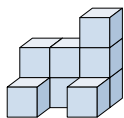




Risolvi ogni problema.

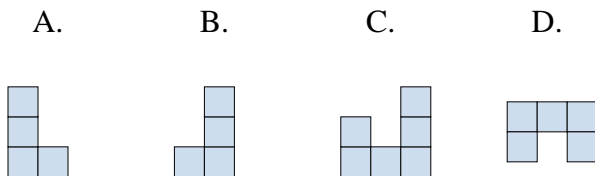
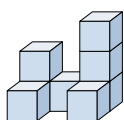
Risposte

1) Guardando la figura in 3d dall'alto, cosa vedresti?



1. **B**

2) Guardando la figura in 3d dal lato sinistro, cosa vedresti?



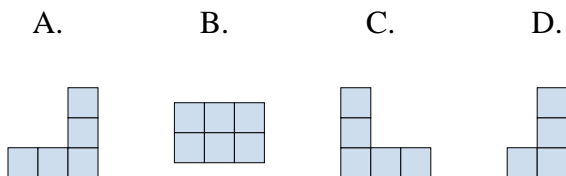
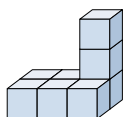
2. **A**

3. **B**

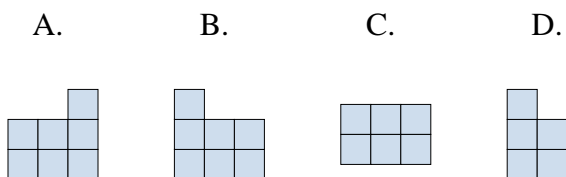
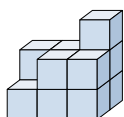
4. **D**

5. **D**

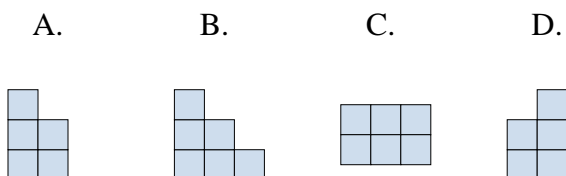
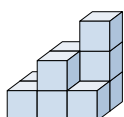
3) Guardando la figura in 3d dall'alto, cosa vedresti?



4) Guardando la figura in 3d dal lato sinistro, cosa vedresti?



5) Guardando la figura in 3d dal lato destro, cosa vedresti?

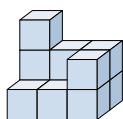




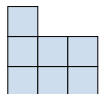



Risolvi ogni problema.

Risposte

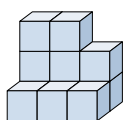
1) Guardando la figura in 3d dal lato destro, cosa vedresti?


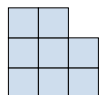
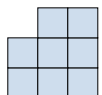



- A. 
- B. 
- C. 
- D. 

1. _____

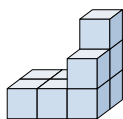
2) Guardando la figura in 3d dal lato sinistro, cosa vedresti?


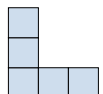




- A. 
- B. 
- C. 
- D. 

2. _____

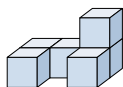
3) Guardando la figura in 3d dall'alto, cosa vedresti?


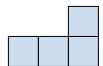
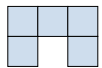



- A. 
- B. 
- C. 
- D. 

3. _____

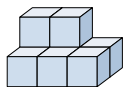
4) Guardando la figura in 3d dal lato sinistro, cosa vedresti?







- A. 
- B. 
- C. 
- D. 

4. _____

5) Guardando la figura in 3d dal lato destro, cosa vedresti?



- A. 
- B. 
- C. 
- D. 

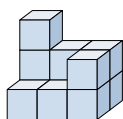
5. _____



Risolvi ogni problema.

Risposte

1) Guardando la figura in 3d dal lato destro, cosa vedresti?

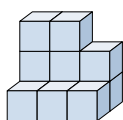


A. B. C. D.

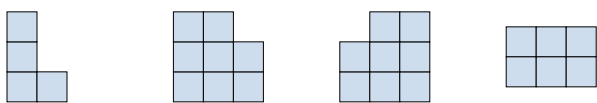


1. **D**

2) Guardando la figura in 3d dal lato sinistro, cosa vedresti?

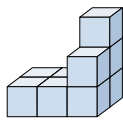


A. B. C. D.

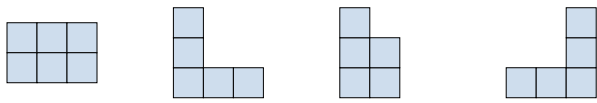


2. **A**

3) Guardando la figura in 3d dall'alto, cosa vedresti?

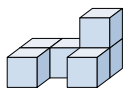


A. B. C. D.

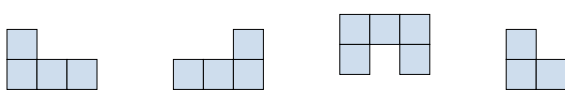


3. **A**

4) Guardando la figura in 3d dal lato sinistro, cosa vedresti?

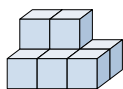


A. B. C. D.

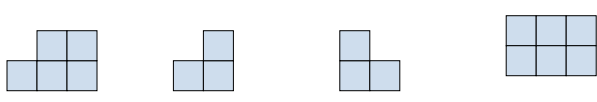


4. **D**

5) Guardando la figura in 3d dal lato destro, cosa vedresti?



A. B. C. D.



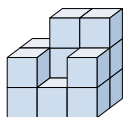
5. **B**







Risolvi ogni problema.

Risposte

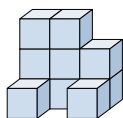
1) Guardando la figura in 3d dal lato sinistro, cosa vedresti?







- A.  B.  C.  D. 

1. _____

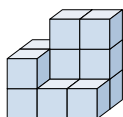
2) Guardando la figura in 3d dall'alto, cosa vedresti?







- A.  B.  C.  D. 

2. _____

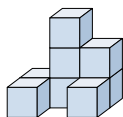
3) Guardando la figura in 3d da dietro, cosa vedresti?







- A.  B.  C.  D. 

3. _____

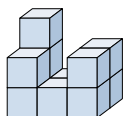
4) Guardando la figura in 3d dal lato sinistro, cosa vedresti?







- A.  B.  C.  D. 

4. _____

5) Guardando la figura in 3d dal lato sinistro, cosa vedresti?



- A.  B.  C.  D. 

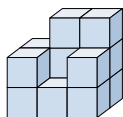
5. _____



Risolvi ogni problema.

Risposte

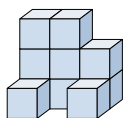
1) Guardando la figura in 3d dal lato sinistro, cosa vedresti?



- A.
- B.
- C.
- D.

1. **C**

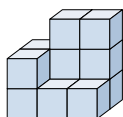
2) Guardando la figura in 3d dall'alto, cosa vedresti?



- A.
- B.
- C.
- D.

2. **A**

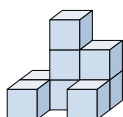
3) Guardando la figura in 3d da dietro, cosa vedresti?



- A.
- B.
- C.
- D.

3. **A**

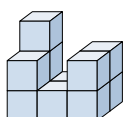
4) Guardando la figura in 3d dal lato sinistro, cosa vedresti?



- A.
- B.
- C.
- D.

4. **C**

5) Guardando la figura in 3d dal lato sinistro, cosa vedresti?



- A.
- B.
- C.
- D.

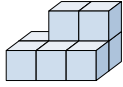
5. **D**



Risolvi ogni problema.

Risposte

1) Guardando la figura in 3d dal lato sinistro, cosa vedresti?

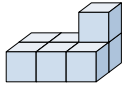


A. B. C. D.



1. _____

2) Guardando la figura in 3d dal lato destro, cosa vedresti?

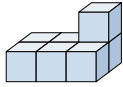


A. B. C. D.



2. _____

3) Guardando la figura in 3d da dietro, cosa vedresti?

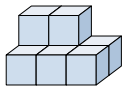


A. B. C. D.

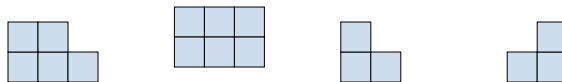


3. _____

4) Guardando la figura in 3d dall'alto, cosa vedresti?

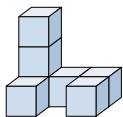


A. B. C. D.

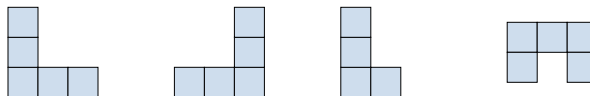


4. _____

5) Guardando la figura in 3d dall'alto, cosa vedresti?



A. B. C. D.



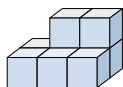
5. _____




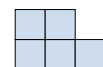


Risolvi ogni problema.

Risposte

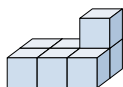
1) Guardando la figura in 3d dal lato sinistro, cosa vedresti?







- A.  B.  C.  D. 

1. **A**

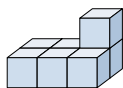
2) Guardando la figura in 3d dal lato destro, cosa vedresti?

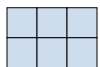





- A.  B.  C.  D. 

2. **D**

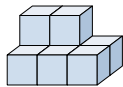
3) Guardando la figura in 3d da dietro, cosa vedresti?

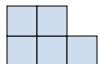





- A.  B.  C.  D. 

3. **D**

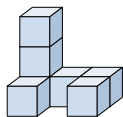
4) Guardando la figura in 3d dall'alto, cosa vedresti?

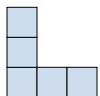


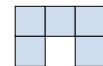


- A.  B.  C.  D. 

4. **B**

5) Guardando la figura in 3d dall'alto, cosa vedresti?



- A.  B.  C.  D. 

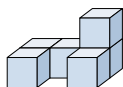
5. **D**







Risolvi ogni problema.

Risposte

1) Guardando la figura in 3d dal lato destro, cosa vedresti?



- A.  B.  C.  D. 

1. _____

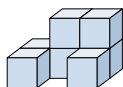
2. _____





3. _____

4. _____

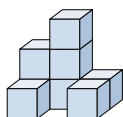
5. _____





2) Guardando la figura in 3d dal lato destro, cosa vedresti?



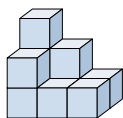
- A.  B.  C.  D. 





3) Guardando la figura in 3d da dietro, cosa vedresti?



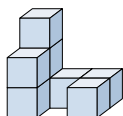
- A.  B.  C.  D. 





4) Guardando la figura in 3d dall'alto, cosa vedresti?



- A.  B.  C.  D. 

5) Guardando la figura in 3d dal lato destro, cosa vedresti?



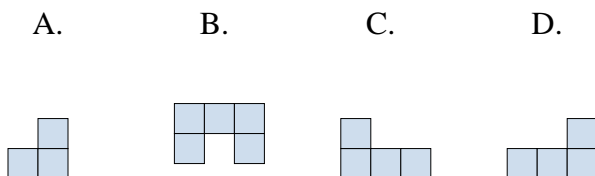
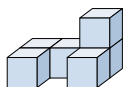
- A.  B.  C.  D. 



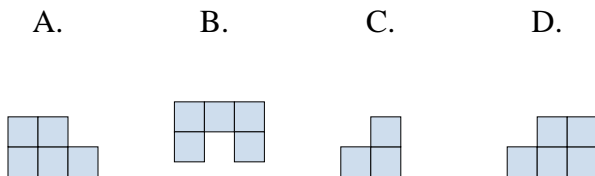
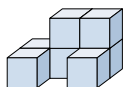
Risolvi ogni problema.

Risposte

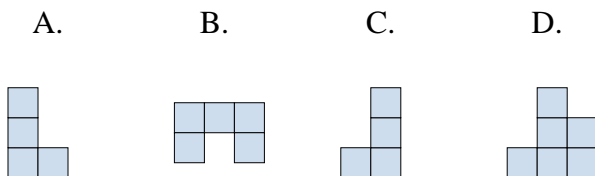
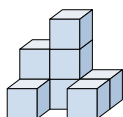
- 1) Guardando la figura in 3d dal lato destro, cosa vedresti?

1. **A**

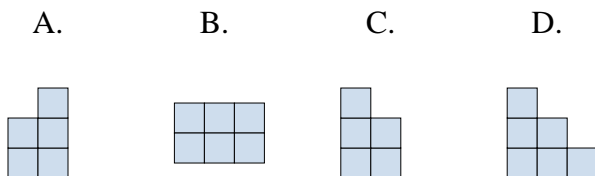
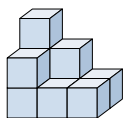
- 2) Guardando la figura in 3d dal lato destro, cosa vedresti?

2. **C** 3. **D** 4. **B** 5. **B**

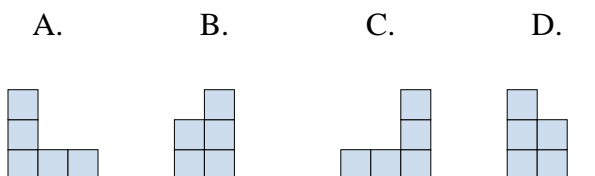
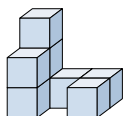
- 3) Guardando la figura in 3d da dietro, cosa vedresti?



- 4) Guardando la figura in 3d dall'alto, cosa vedresti?



- 5) Guardando la figura in 3d dal lato destro, cosa vedresti?

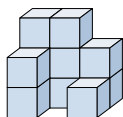




Risolvi ogni problema.

Risposte

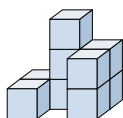
1) Guardando la figura in 3d dal lato destro, cosa vedresti?



- A.
- B.
- C.
- D.

1. _____

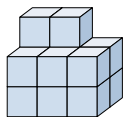
2) Guardando la figura in 3d dal lato destro, cosa vedresti?



- A.
- B.
- C.
- D.

2. _____

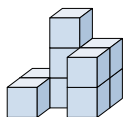
3) Guardando la figura in 3d dall'alto, cosa vedresti?



- A.
- B.
- C.
- D.

3. _____

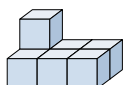
4) Guardando la figura in 3d dal lato sinistro, cosa vedresti?



- A.
- B.
- C.
- D.

4. _____

5) Guardando la figura in 3d dal lato sinistro, cosa vedresti?



- A.
- B.
- C.
- D.

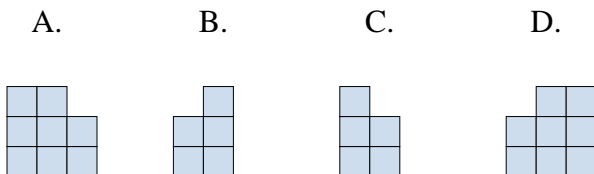
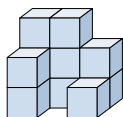
5. _____



Risolvi ogni problema.

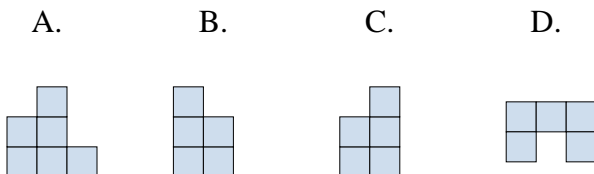
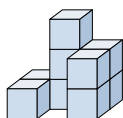
Risposte

1) Guardando la figura in 3d dal lato destro, cosa vedresti?



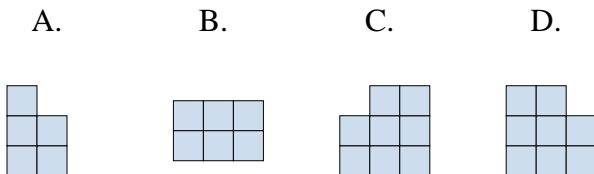
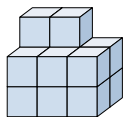
1. **B**

2) Guardando la figura in 3d dal lato destro, cosa vedresti?



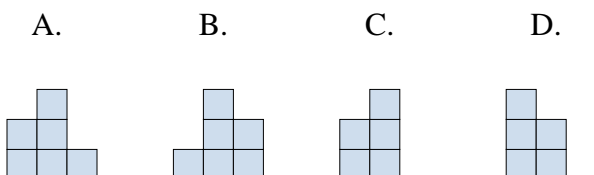
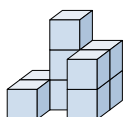
2. **C**

3) Guardando la figura in 3d dall'alto, cosa vedresti?



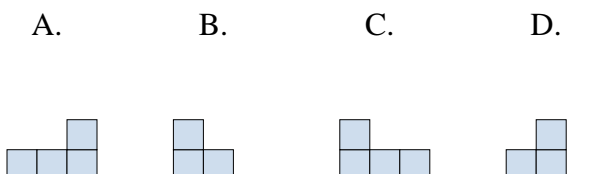
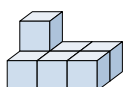
3. **B**

4) Guardando la figura in 3d dal lato sinistro, cosa vedresti?



4. **D**

5) Guardando la figura in 3d dal lato sinistro, cosa vedresti?



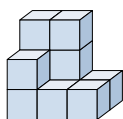
5. **B**

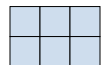





Risolvi ogni problema.

Risposte

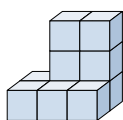
1) Guardando la figura in 3d dal lato destro, cosa vedresti?

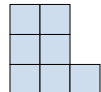





- A.  B.  C.  D. 

1. _____

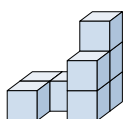
2) Guardando la figura in 3d da dietro, cosa vedresti?







- A.  B.  C.  D. 

2. _____

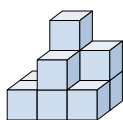
3) Guardando la figura in 3d da dietro, cosa vedresti?







- A.  B.  C.  D. 

3. _____

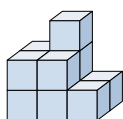
4) Guardando la figura in 3d da dietro, cosa vedresti?







- A.  B.  C.  D. 

4. _____

5) Guardando la figura in 3d dall'alto, cosa vedresti?



- A.  B.  C.  D. 

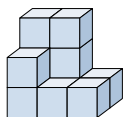
5. _____







Risolvi ogni problema.

Risposte

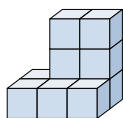
1) Guardando la figura in 3d dal lato destro, cosa vedresti?







- A.  B.  C.  D. 

1. **D**

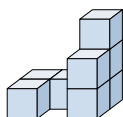
2) Guardando la figura in 3d da dietro, cosa vedresti?







- A.  B.  C.  D. 

2. **A**

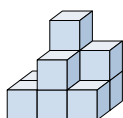
3) Guardando la figura in 3d da dietro, cosa vedresti?







- A.  B.  C.  D. 

3. **C**

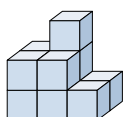
4) Guardando la figura in 3d da dietro, cosa vedresti?







- A.  B.  C.  D. 

4. **C**

5) Guardando la figura in 3d dall'alto, cosa vedresti?



- A.  B.  C.  D. 

5. **A**