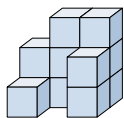




Risolvi ogni problema.

Risposte

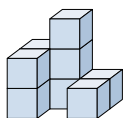
1) Guardando la figura in 3d da dietro, cosa vedresti?



- A.
- B.
- C.
- D.

1. _____

2) Guardando la figura in 3d da dietro, cosa vedresti?



- A.
- B.
- C.
- D.

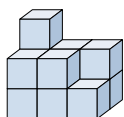
2. _____

3. _____

4. _____

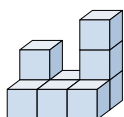
5. _____

3) Guardando la figura in 3d da dietro, cosa vedresti?



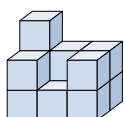
- A.
- B.
- C.
- D.

4) Guardando la figura in 3d dal lato sinistro, cosa vedresti?



- A.
- B.
- C.
- D.

5) Guardando la figura in 3d da dietro, cosa vedresti?



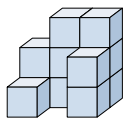
- A.
- B.
- C.
- D.

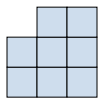
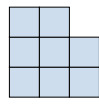
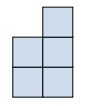
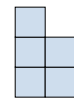


Risolvi ogni problema.

Risposte

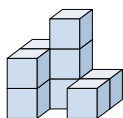
1) Guardando la figura in 3d da dietro, cosa vedresti?

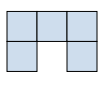

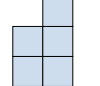



- A.  B.  C.  D. 

1. **B**

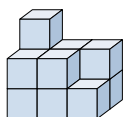
2) Guardando la figura in 3d da dietro, cosa vedresti?

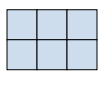

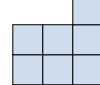



- A.  B.  C.  D. 

2. **B**

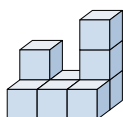
3) Guardando la figura in 3d da dietro, cosa vedresti?

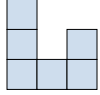

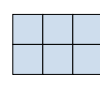



- A.  B.  C.  D. 

3. **C**

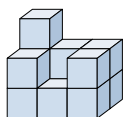
4) Guardando la figura in 3d dal lato sinistro, cosa vedresti?

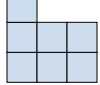

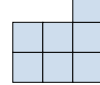



- A.  B.  C.  D. 

4. **B**

5) Guardando la figura in 3d da dietro, cosa vedresti?



- A.  B.  C.  D. 

5. **C**