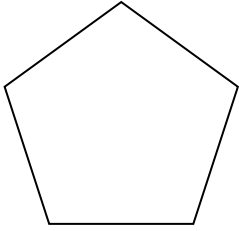


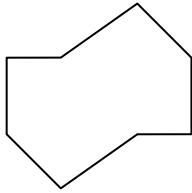


Determina se le forme rappresentate sono regolari o irregolari.


1)



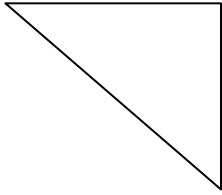
2)



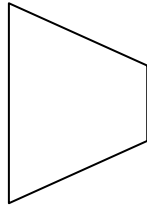
3)



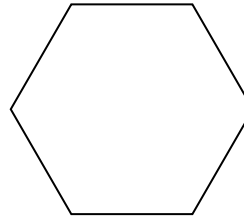
4)




5)




6)



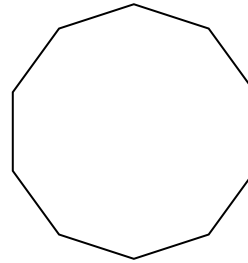
7)



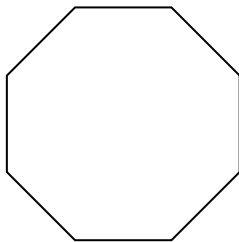
8)




9)



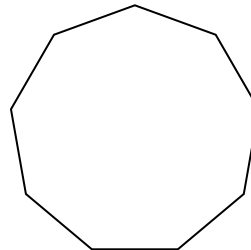
10)



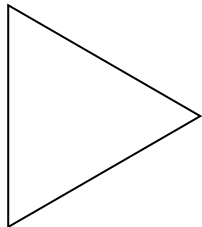
11)




12)



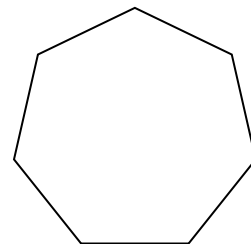
13)



14)



15)



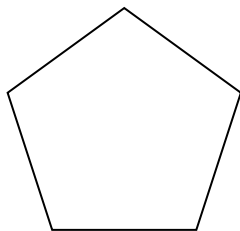
Risposte

1. _____
2. _____
3. _____
4. _____
5. _____
6. _____
7. _____
8. _____
9. _____
10. _____
11. _____
12. _____
13. _____
14. _____
15. _____

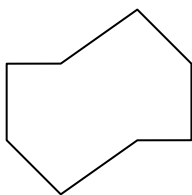


Determina se le forme rappresentate sono regolari o irregolari.


1)



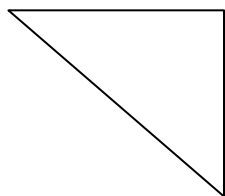
2)



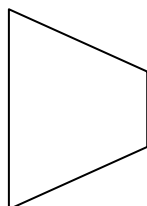
3)



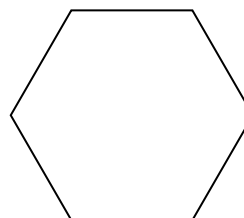
4)




5)




6)



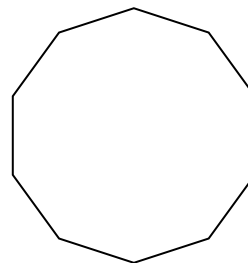
7)



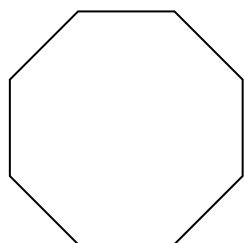
8)




9)



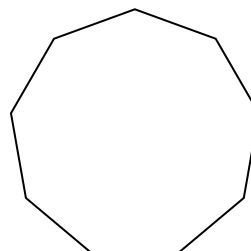
10)



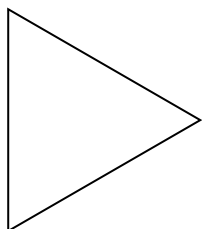
11)




12)



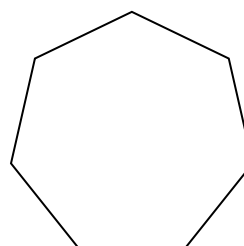
13)



14)



15)



Risposte

1. Regolare

2. Irregolare

3. Regolare

4. Irregolare

5. Irregolare

6. Regolare

7. Irregolare

8. Irregolare

9. Regolare

10. Regolare

11. Irregolare

12. Regolare

13. Regolare

14. Irregolare

15. Regolare