



Determina se ogni triangolo è acuto (A), ottuso (O) o rettangolo (R) e se è equilatero (E), isoscele (I) o scaleno (S).

Acute Triangle:

All angles are less than 90° .

Obtuse Triangle:

One angle is greater than 90° .

Right Triangle:

One angle is 90° .

Equilateral Triangle:

3 equal sides. 3 equal angles.

Isosceles Triangle:

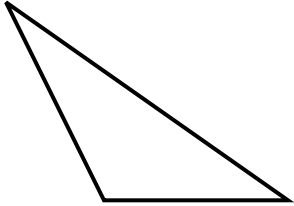
2 equal sides. 2 equal angles.

Scalene Triangle:

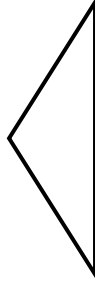
No equal sides. No equal angles.

Risposte

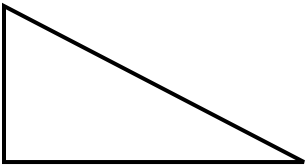
1)



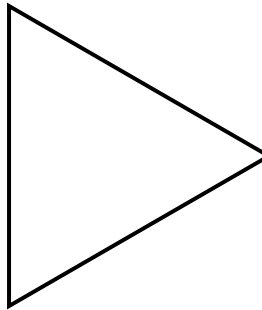
2)



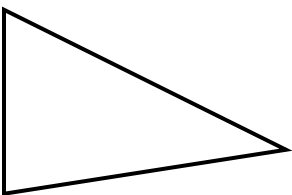
3)




4)



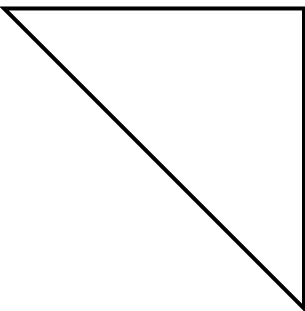
5)



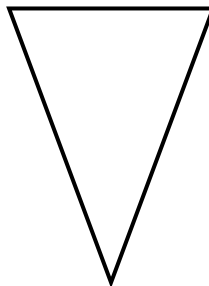
6)



7)



8)



1. _____
2. _____
3. _____
4. _____
5. _____
6. _____
7. _____
8. _____



Determina se ogni triangolo è acuto (A), ottuso (O) o rettangolo (R) e se è equilatero (E), isoscele (I) o scaleno (S).

Acute Triangle:

All angles are less than 90° .

Obtuse Triangle:

One angle is greater than 90° .

Right Triangle:

One angle is 90° .

Equilateral Triangle:

3 equal sides. 3 equal angles.

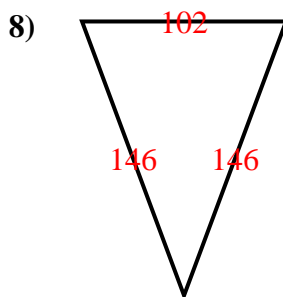
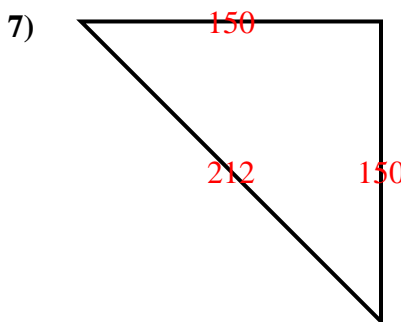
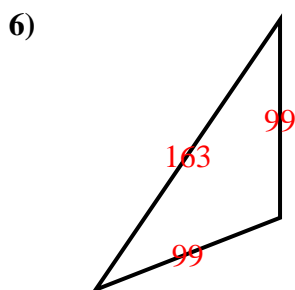
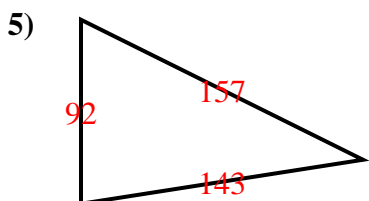
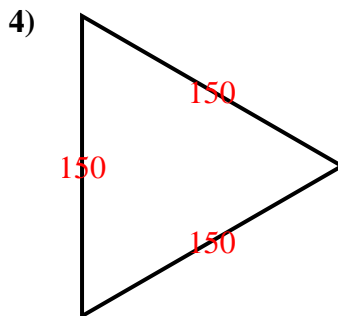
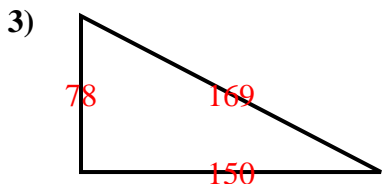
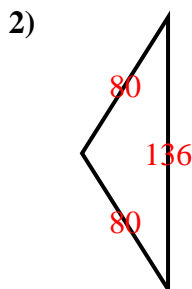
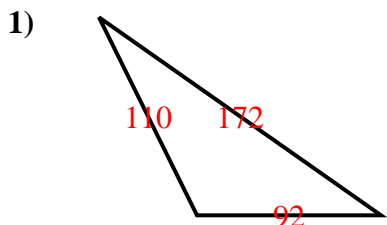
Isosceles Triangle:

2 equal sides. 2 equal angles.

Scalene Triangle:

No equal sides. No equal angles.

Risposte



- 1. OS
- 2. OI
- 3. RS
- 4. AE
- 5. AS
- 6. OI
- 7. RI
- 8. AI