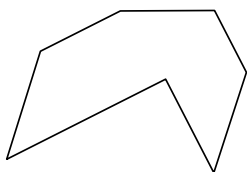


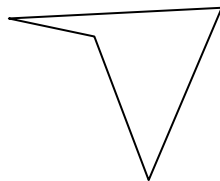


Identifica il tipo di forma rappresentata.


1)



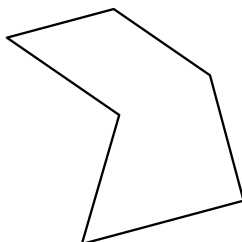
2)



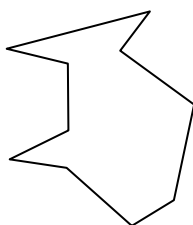
3)



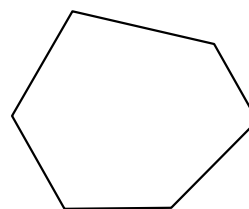
4)



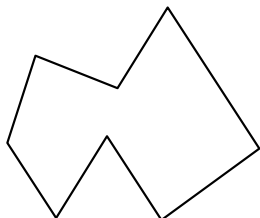
5)



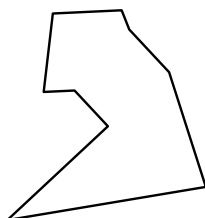
6)



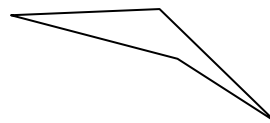
7)



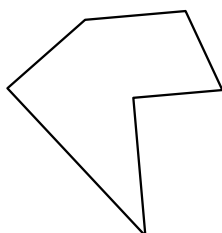
8)




9)




10)



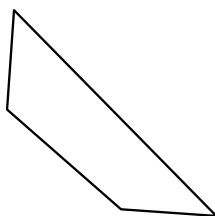
11)



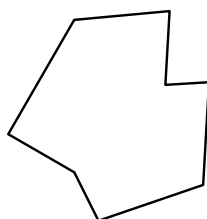
12)



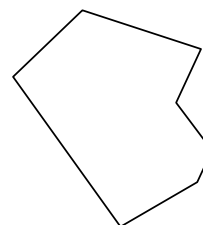
13)




14)



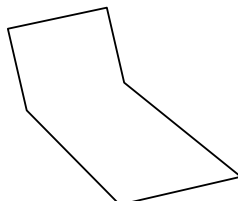
15)



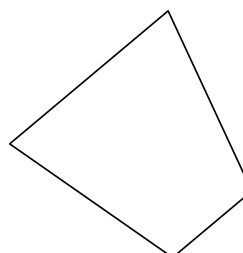
16)



17)



18)



Risposte

1. _____

2. _____

3. _____

4. _____

5. _____

6. _____

7. _____

8. _____

9. _____

10. _____

11. _____

12. _____

13. _____

14. _____

15. _____

16. _____

17. _____

18. _____

19. _____

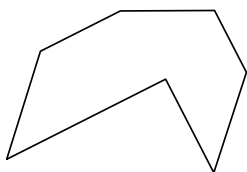
20. _____

21. _____

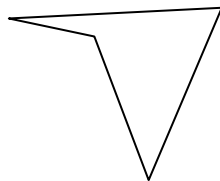


Identifica il tipo di forma rappresentata.


1)



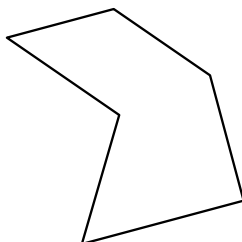
2)



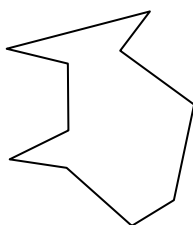
3)



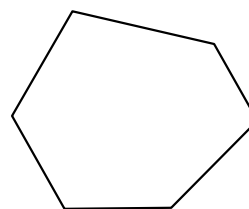
4)



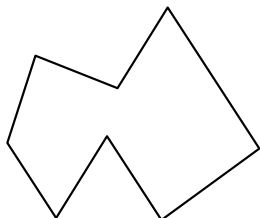
5)



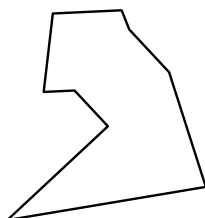
6)



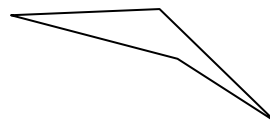
7)



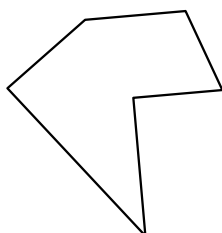
8)



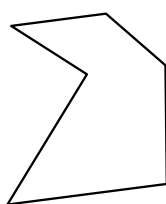
9)



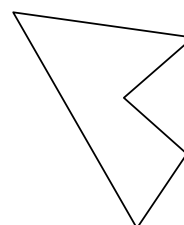
10)



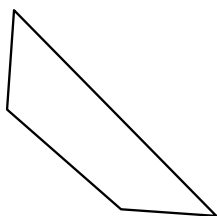
11)



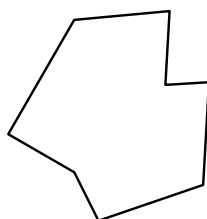
12)



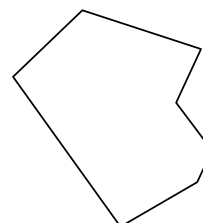
13)




14)



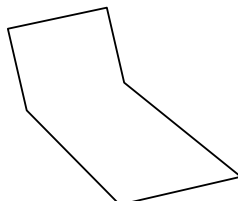
15)



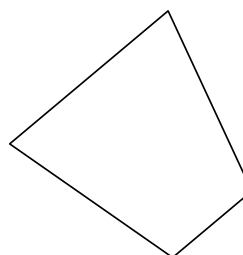
16)



17)



18)



Risposte

1. Ettagono

2. Quadrilatero

3. Ennagono

4. Esagono

5. Decagono

6. Esagono

7. Ottagono

8. Ennagono

9. Quadrilatero

10. Esagono

11. Esagono

12. Pentagono

13. Quadrilatero

14. Ottagono

15. Ettagono

16. Ottagono

17. Esagono

18. Quadrilatero

19. Quadrilatero

20. Ettagono

21. Ettagono