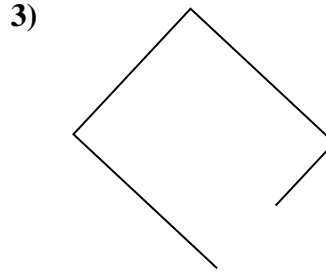
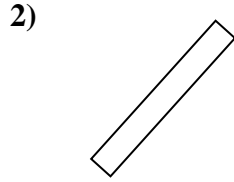
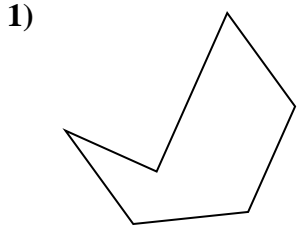


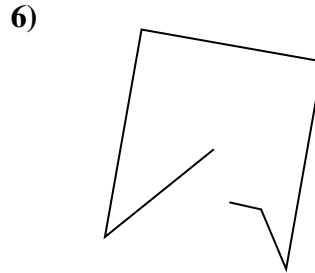
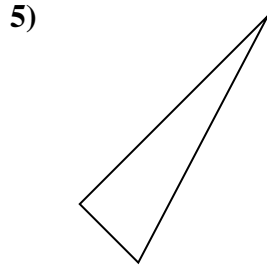
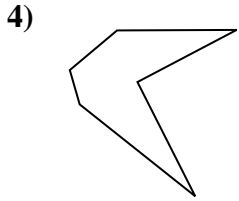


Determina se le figure rappresentate sono 'Triangolo', 'Quadrato', 'Rettangolo', 'Esagono' o 'Altro'.

**Risposte**



1. \_\_\_\_\_



2. \_\_\_\_\_

3. \_\_\_\_\_


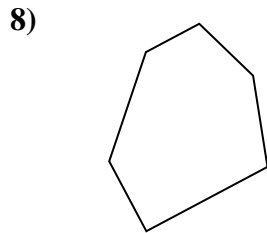
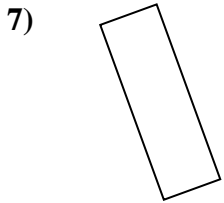
4. \_\_\_\_\_

5. \_\_\_\_\_

6. \_\_\_\_\_

7. \_\_\_\_\_

8. \_\_\_\_\_

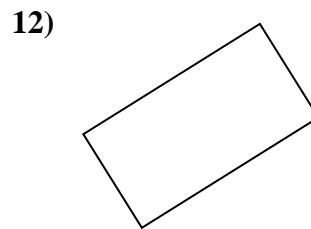
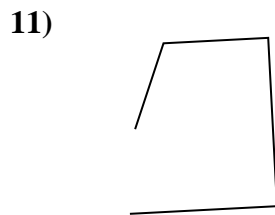
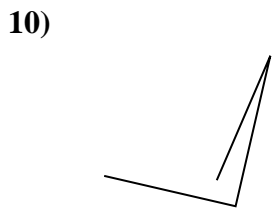


9. \_\_\_\_\_

10. \_\_\_\_\_

11. \_\_\_\_\_

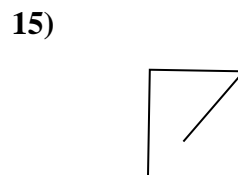
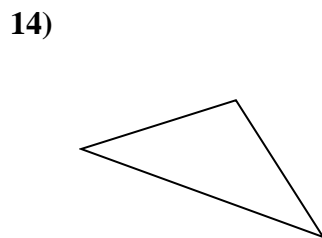
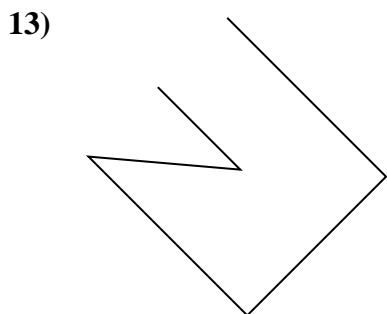
12. \_\_\_\_\_



13. \_\_\_\_\_

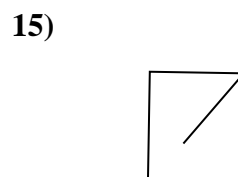
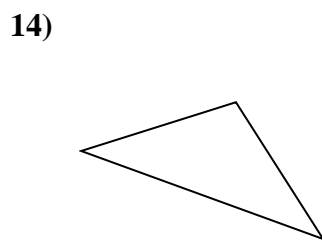
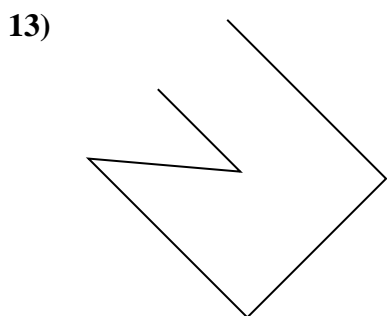
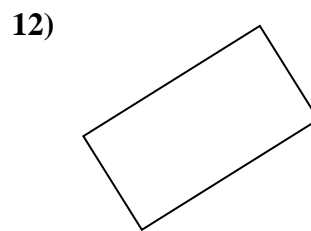
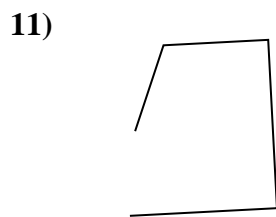
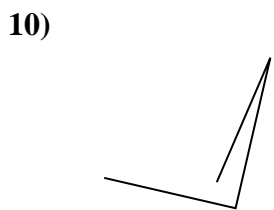

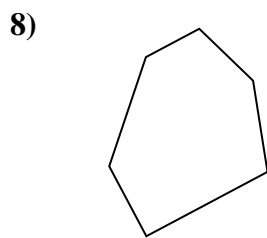
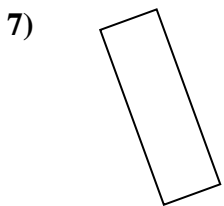
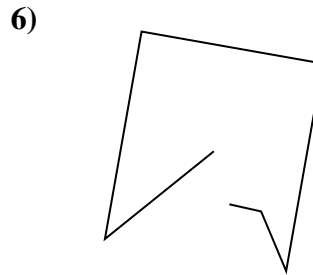
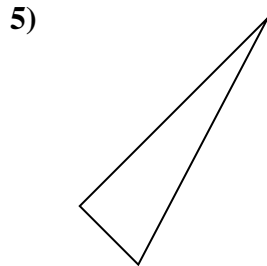
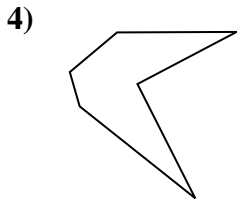
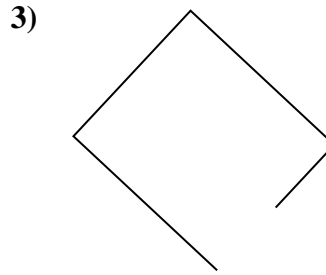
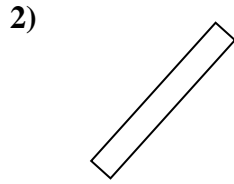
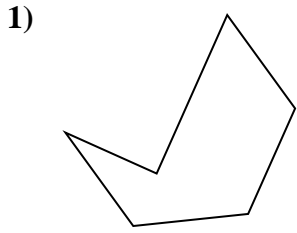
14. \_\_\_\_\_

15. \_\_\_\_\_





Determina se le figure rappresentate sono 'Triangolo', 'Quadrato', 'Rettangolo', 'Esagono' o 'Altro'.



**Risposte**

1. Esagono

2. rectangle

3. Altro

4. Esagono

5. triangle

6. Altro

7. rectangle

8. Esagono

9. triangle

10. Altro

11. Altro

12. rectangle

13. Altro

14. triangle

15. Altro