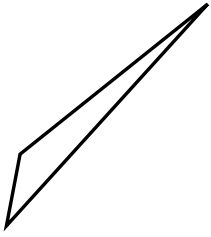




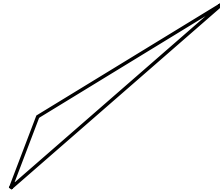
Determina se i triangoli mostrati sono rettangoli oppure no.

**Risposte**

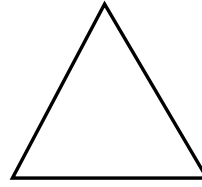
1)



2)



3)



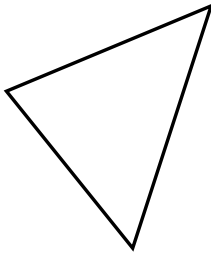
1. \_\_\_\_\_

2. \_\_\_\_\_

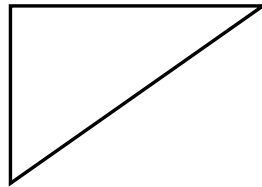
3. \_\_\_\_\_

4. \_\_\_\_\_


4)



5)



6)




5. \_\_\_\_\_

6. \_\_\_\_\_

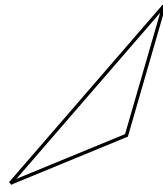
7. \_\_\_\_\_

8. \_\_\_\_\_

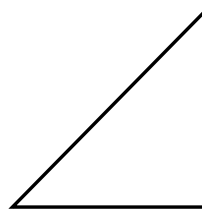
7)



8)



9)



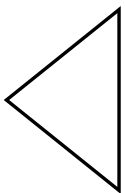
9. \_\_\_\_\_

10. \_\_\_\_\_

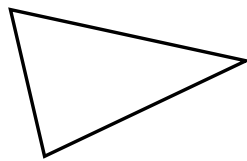
11. \_\_\_\_\_

12. \_\_\_\_\_

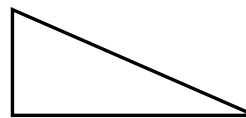
10)



11)



12)

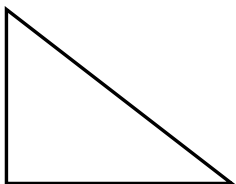


13. \_\_\_\_\_

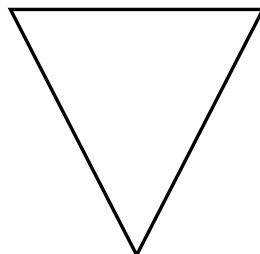
14. \_\_\_\_\_

15. \_\_\_\_\_

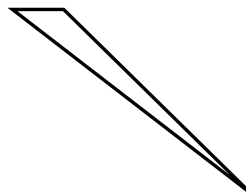
13)



14)



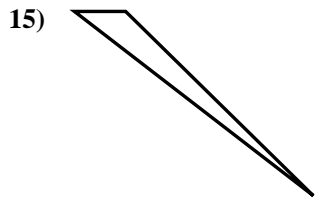
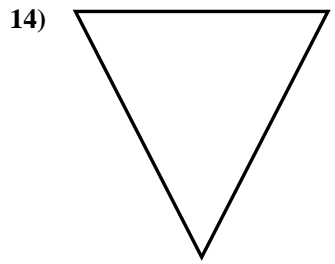
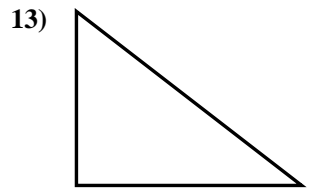
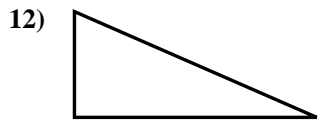
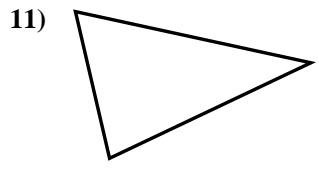
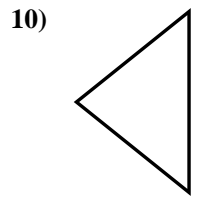
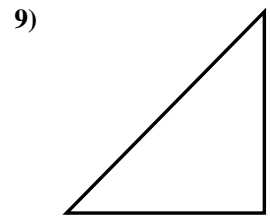
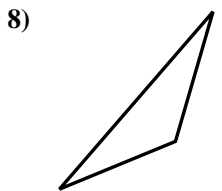
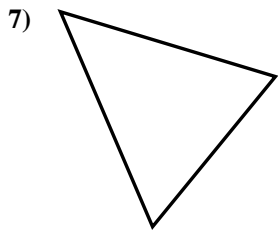
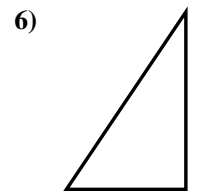
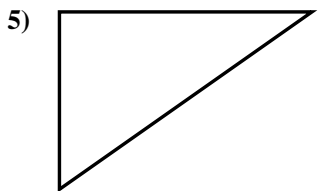
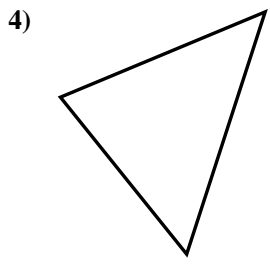
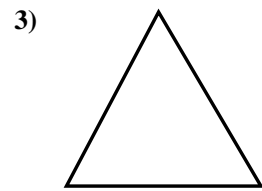
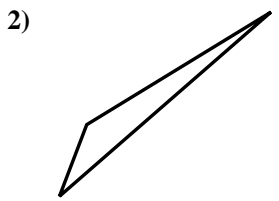
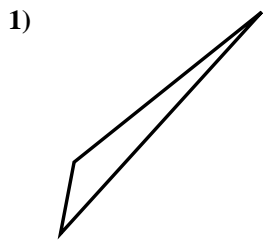
15)





Determina se i triangoli mostrati sono rettangoli oppure no.

**Risposte**



- 1. no
- 2. no
- 3. no
- 4. no
- 5. si
- 6. si
- 7. no
- 8. no
- 9. si
- 10. no
- 11. no
- 12. si
- 13. si
- 14. no
- 15. no