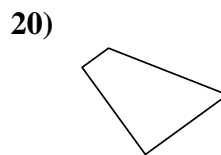
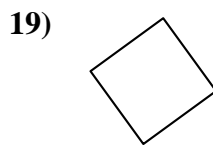
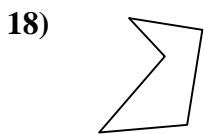
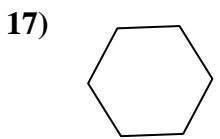
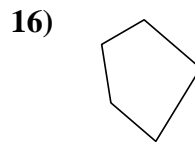
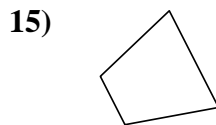

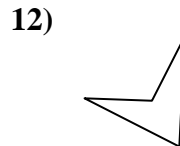
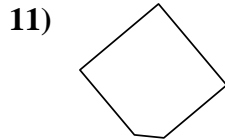
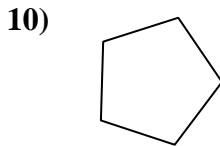
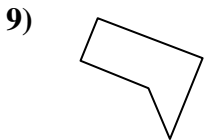
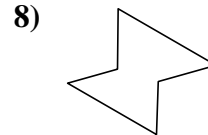
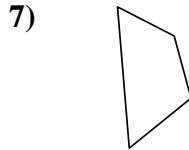
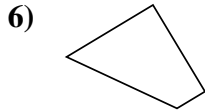
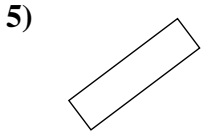
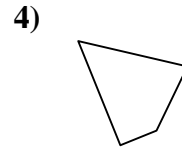
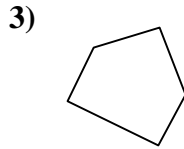
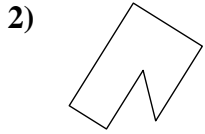
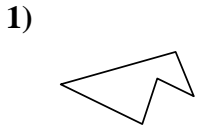




Determina se le forme mostrate sono quadrilateri (si) oppure no (no).

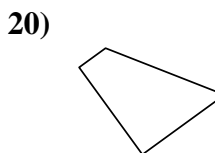
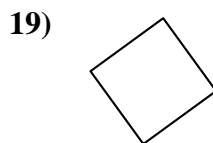
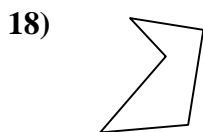
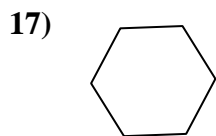
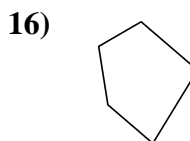
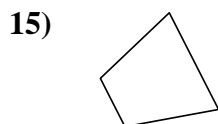
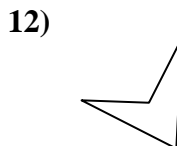
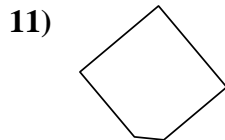
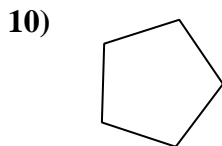
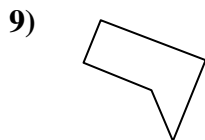
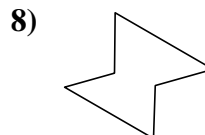
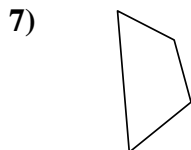
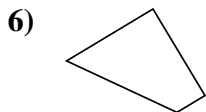
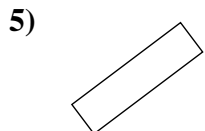
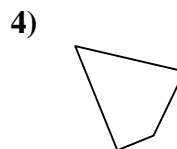
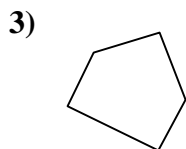
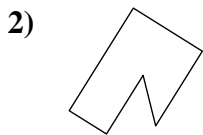
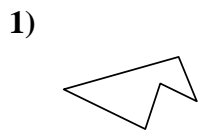
Risposte



- 1. _____
- 2. _____
- 3. _____
- 4. _____
- 5. _____
- 6. _____
- 7. _____
- 8. _____
- 9. _____
- 10. _____
- 11. _____
- 12. _____
- 13. _____
- 14. _____
- 15. _____
- 16. _____
- 17. _____
- 18. _____
- 19. _____
- 20. _____



Determina se le forme mostrate sono quadrilateri (si) oppure no (no).



Risposte

1. no

2. no

3. no

4. si

5. si

6. si

7. si

8. no

9. no

10. no

11. no

12. si

13. si

14. si

15. si

16. no

17. no

18. no

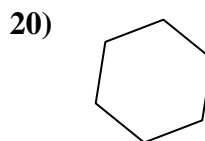
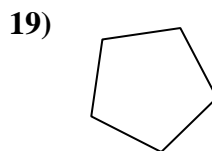
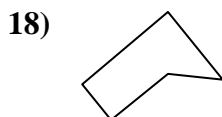
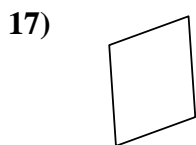
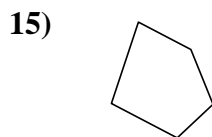
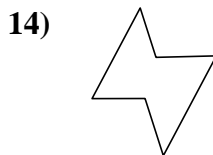
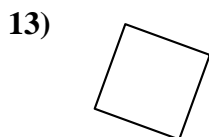
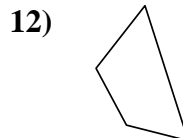
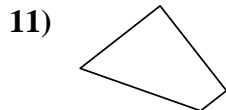
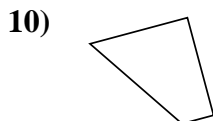
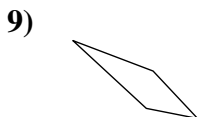
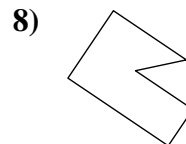
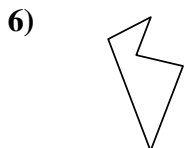
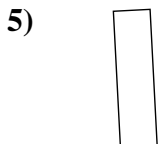
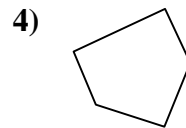
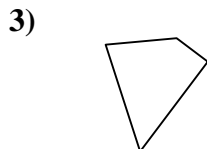
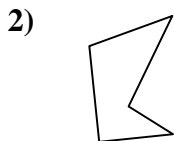
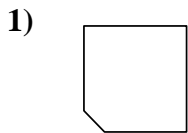
19. si

20. si



Determina se le forme mostrate sono quadrilateri (si) oppure no (no).

Risposte



1. _____

2. _____

3. _____

4. _____

5. _____

6. _____

7. _____

8. _____

9. _____

10. _____

11. _____

12. _____

13. _____

14. _____

15. _____

16. _____

17. _____

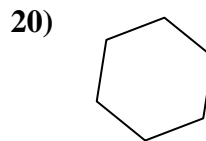
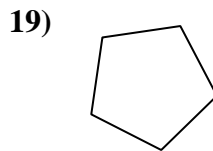
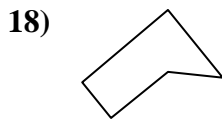
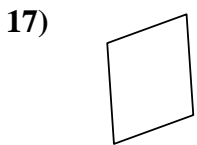
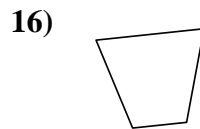
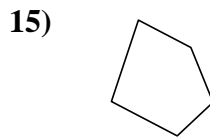
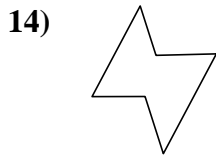
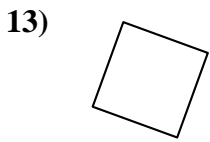
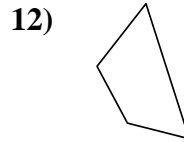
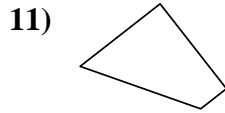
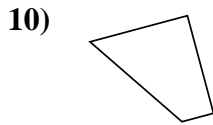

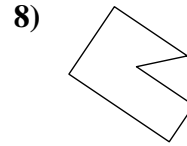
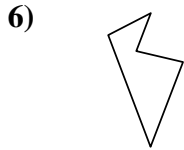
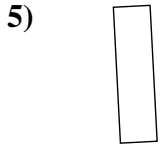
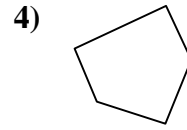
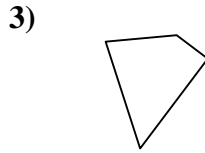
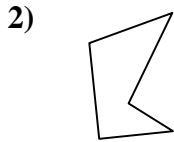
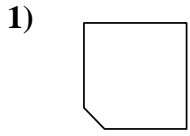
18. _____

19. _____

20. _____



Determina se le forme mostrate sono quadrilateri (si) oppure no (no).



Risposte

1. no

2. no

3. si

4. no

5. si

6. no

7. si

8. no

9. si

10. si

11. si

12. si

13. si

14. no

15. no

16. si

17. si

18. no

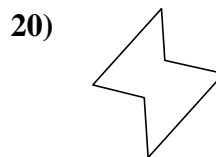
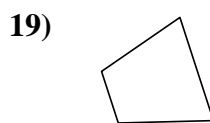
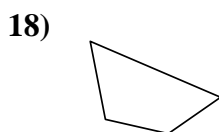
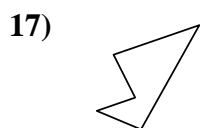
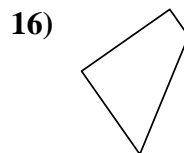
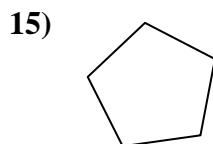
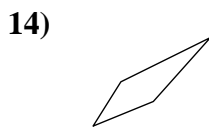
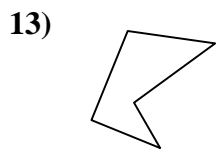
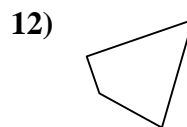
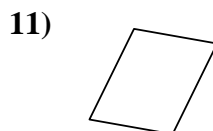
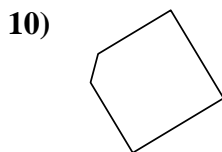
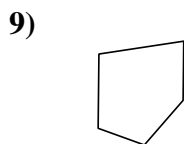
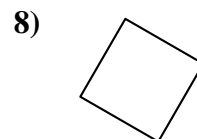
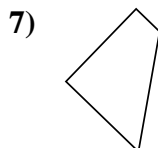
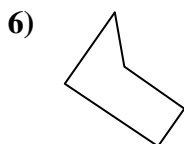
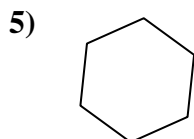

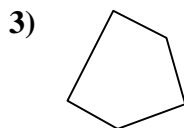
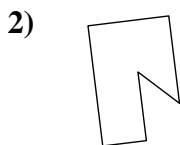
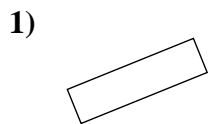
19. no

20. no



Determina se le forme mostrate sono quadrilateri (si) oppure no (no).

Risposte



1. _____

2. _____

3. _____

4. _____

5. _____

6. _____

7. _____

8. _____

9. _____

10. _____

11. _____

12. _____

13. _____

14. _____

15. _____

16. _____

17. _____

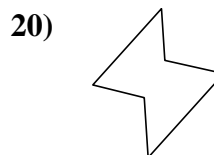
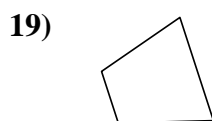
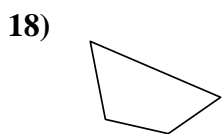
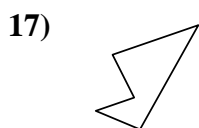
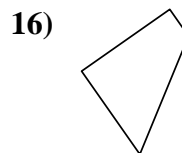
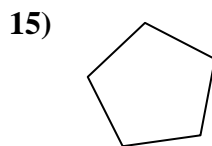
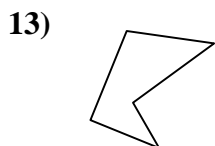
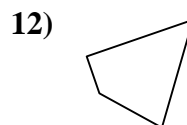
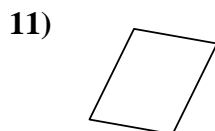
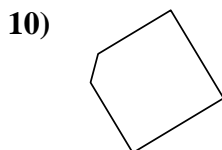
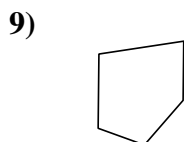
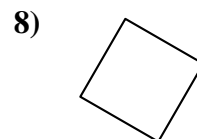
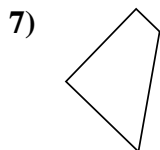
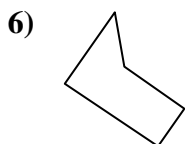
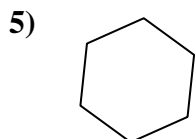
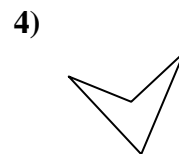
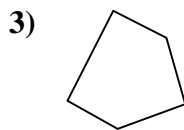

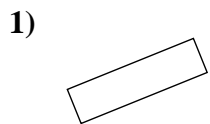
18. _____

19. _____

20. _____



Determina se le forme mostrate sono quadrilateri (si) oppure no (no).



Risposte

1. si

2. no

3. no

4. si

5. no

6. no

7. si

8. si

9. no

10. no

11. si

12. si

13. no

14. si

15. no

16. si

17. no

18. si

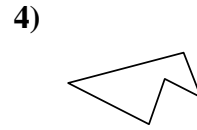
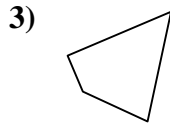
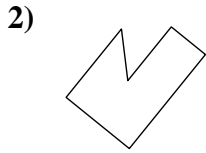
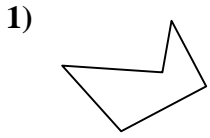
19. si

20. no



Determina se le forme mostrate sono quadrilateri (si) oppure no (no).

Risposte

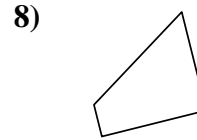
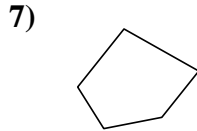
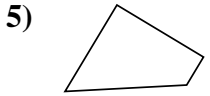


1. _____

2. _____

3. _____

4. _____

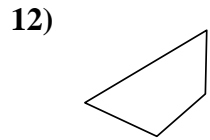
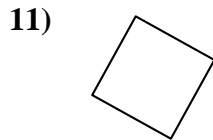
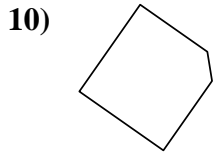
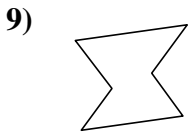


5. _____

6. _____

7. _____

8. _____

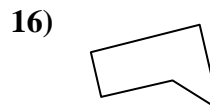
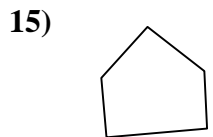
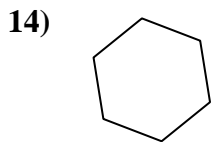
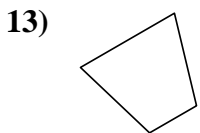


9. _____

10. _____

11. _____

12. _____

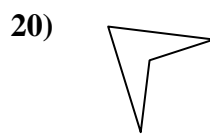
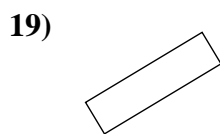
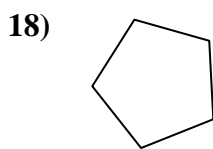
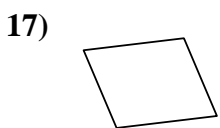


13. _____

14. _____

15. _____

16. _____



17. _____

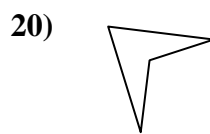
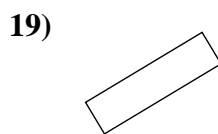
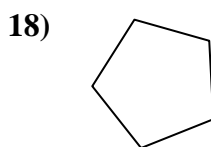
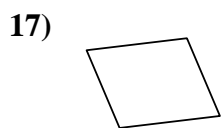
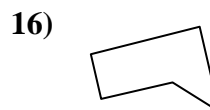
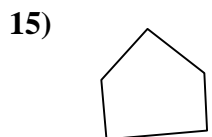
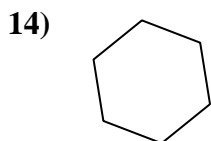
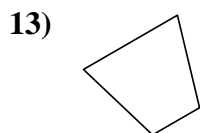
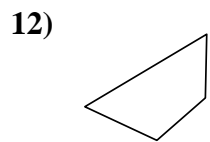
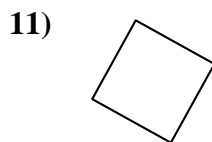
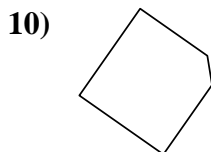
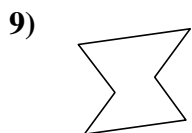
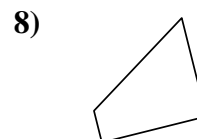
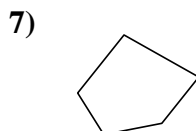
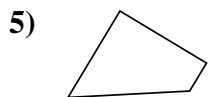
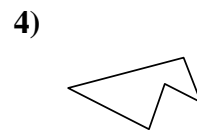
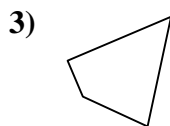
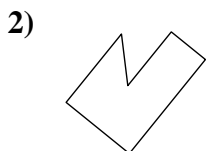
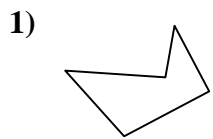
18. _____

19. _____

20. _____



Determina se le forme mostrate sono quadrilateri (si) oppure no (no).



Risposte

1. no

2. no

3. si

4. no

5. si

6. si

7. no

8. si

9. no

10. no

11. si

12. si

13. si

14. no

15. no

16. no

17. si

18. no

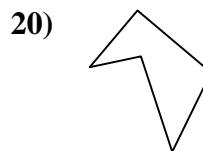
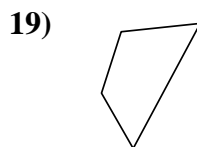
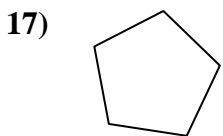
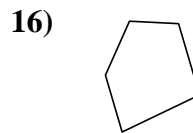
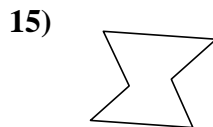
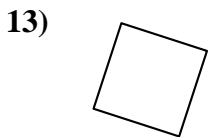
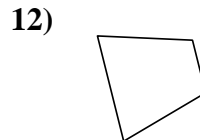
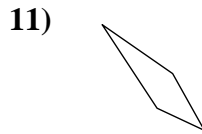
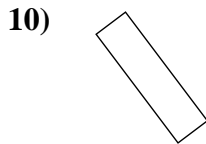
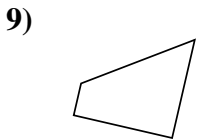
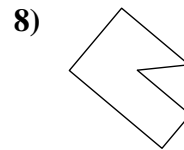
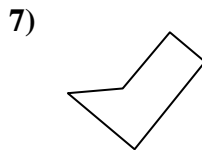
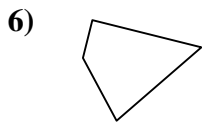
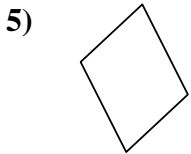
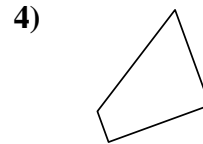
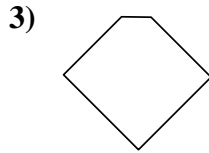
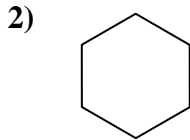
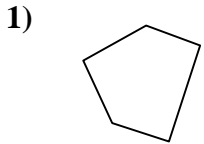
19. si

20. si



Determina se le forme mostrate sono quadrilateri (si) oppure no (no).

Risposte



1. _____

2. _____

3. _____

4. _____

5. _____

6. _____

7. _____

8. _____

9. _____

10. _____

11. _____

12. _____

13. _____

14. _____

15. _____

16. _____

17. _____

18. _____

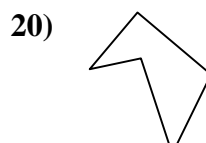
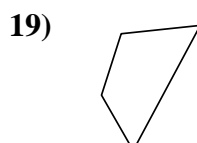
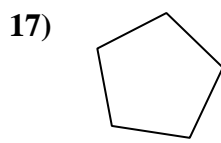
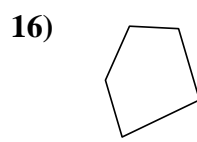
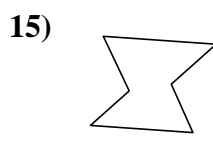
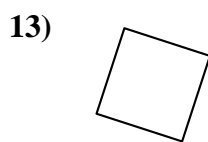
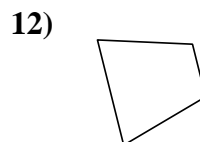
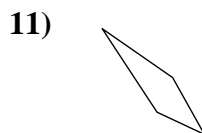
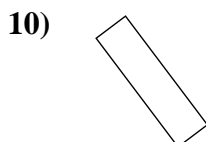
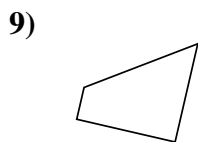
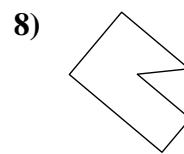
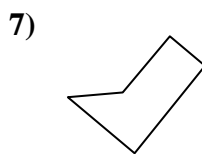
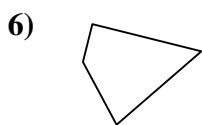
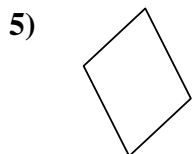
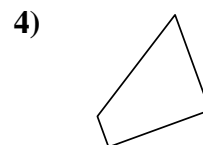
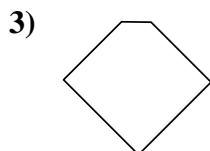
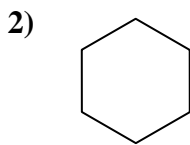
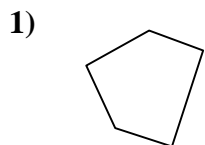
19. _____

20. _____

1-10	95	90	85	80	75	70	65	60	55	50
11-20	45	40	35	30	25	20	15	10	5	0



Determina se le forme mostrate sono quadrilateri (si) oppure no (no).



Risposte

1. **no**

2. **no**

3. **no**

4. **si**

5. **si**

6. **si**

7. **no**

8. **no**

9. **si**

10. **si**

11. **si**

12. **si**

13. **si**

14. **no**

15. **no**

16. **no**

17. **no**

18. **si**

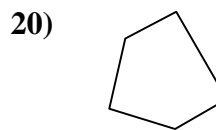
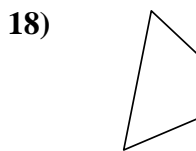
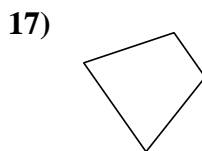
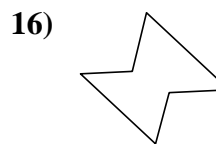
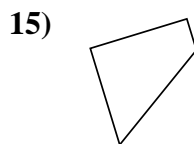
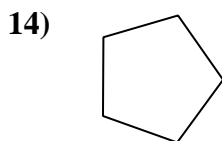

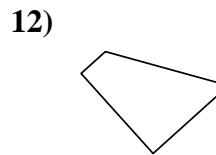
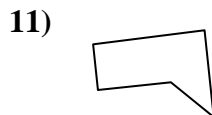
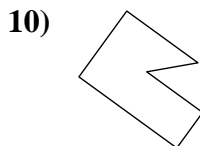
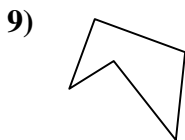
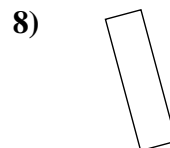
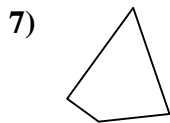
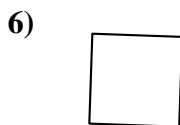
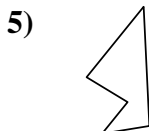
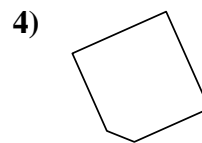
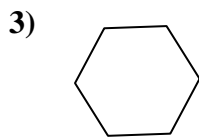
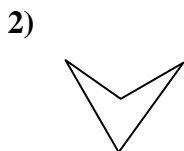
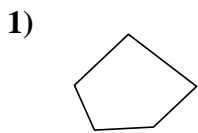
19. **si**

20. **no**



Determina se le forme mostrate sono quadrilateri (si) oppure no (no).

Risposte



1. _____

2. _____

3. _____

4. _____

5. _____

6. _____

7. _____

8. _____

9. _____

10. _____

11. _____

12. _____

13. _____

14. _____

15. _____

16. _____

17. _____

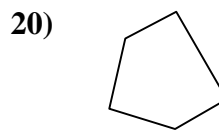
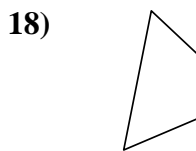
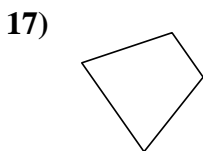
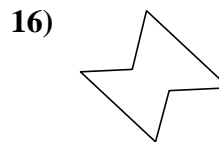
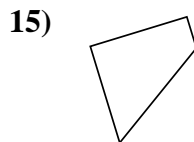
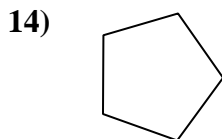
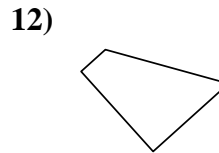
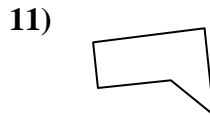
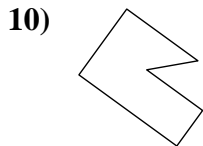
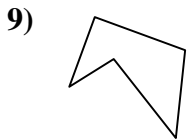
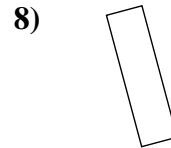
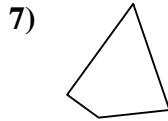
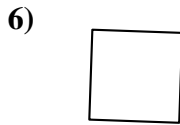
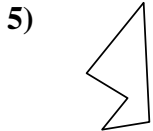
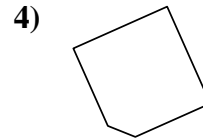
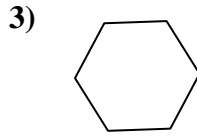
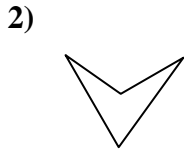
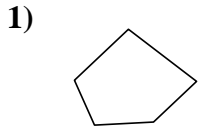
18. _____

19. _____

20. _____



Determina se le forme mostrate sono quadrilateri (si) oppure no (no).



Risposte

1. no

2. si

3. no

4. no

5. no

6. si

7. si

8. si

9. no

10. no

11. no

12. si

13. si

14. no

15. si

16. no

17. si

18. si

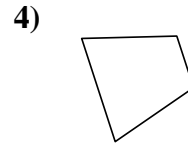
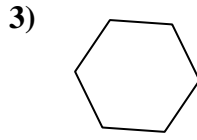
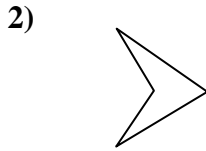
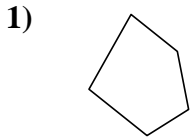
19. si

20. no



Determina se le forme mostrate sono quadrilateri (si) oppure no (no).

Risposte

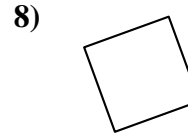
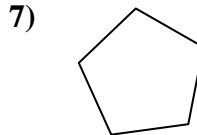
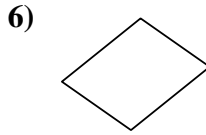
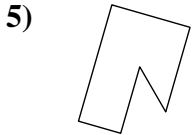


1. _____

2. _____

3. _____

4. _____

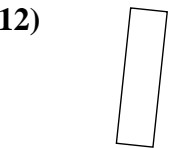
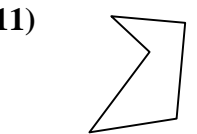
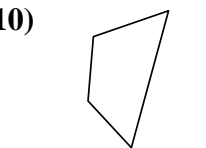
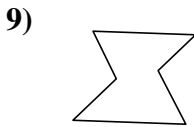


5. _____

6. _____

7. _____

8. _____

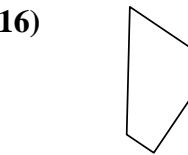
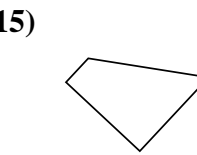
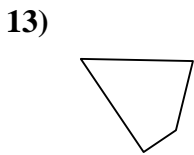


9. _____

10. _____

11. _____

12. _____

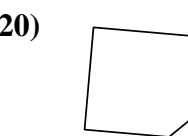
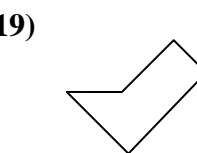
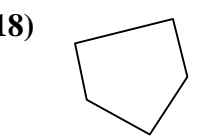
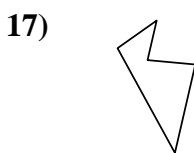


13. _____

14. _____

15. _____

16. _____



17. _____

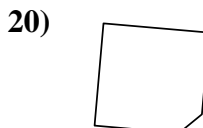
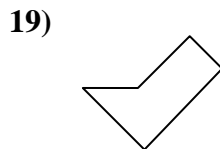
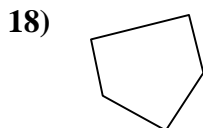
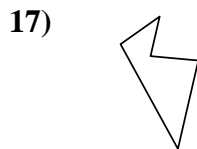
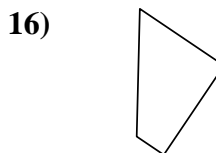
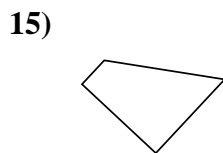
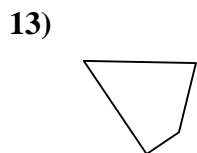
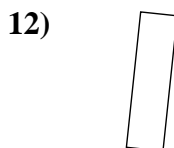
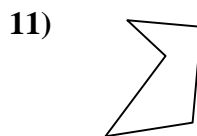
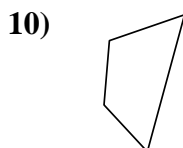
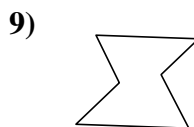
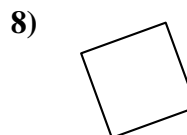
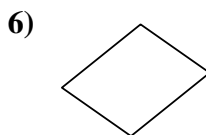
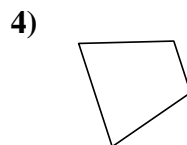
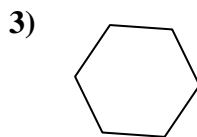
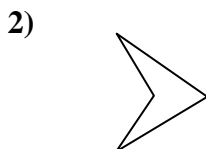
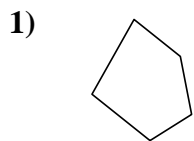
18. _____

19. _____

20. _____



Determina se le forme mostrate sono quadrilateri (si) oppure no (no).



Risposte

1. **no**

2. **si**

3. **no**

4. **si**

5. **no**

6. **si**

7. **no**

8. **si**

9. **no**

10. **si**

11. **no**

12. **si**

13. **si**

14. **si**

15. **si**

16. **si**

17. **no**

18. **no**

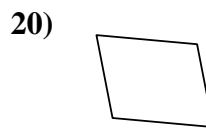
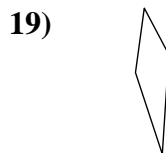
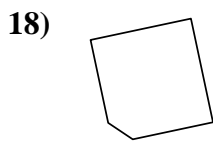
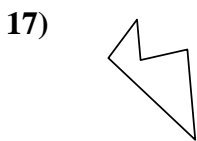
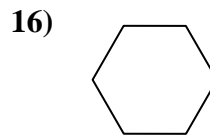
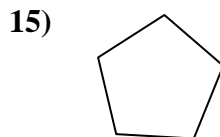
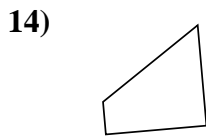
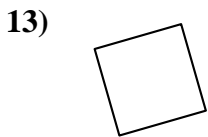
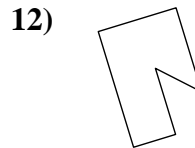
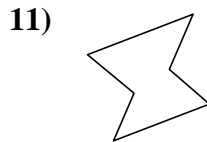
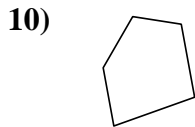
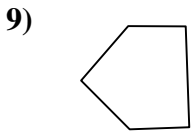
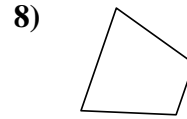
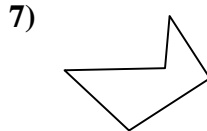
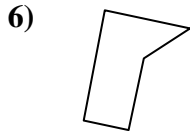

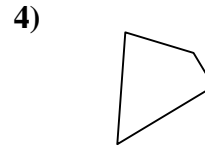
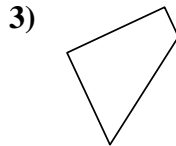
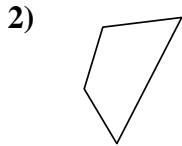

19. **no**

20. **no**



Determina se le forme mostrate sono quadrilateri (si) oppure no (no).

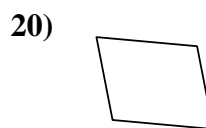
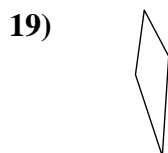
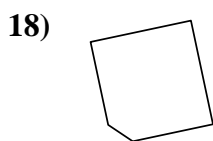
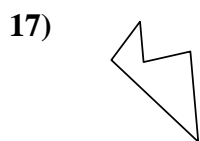
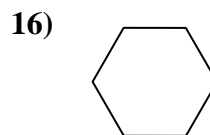
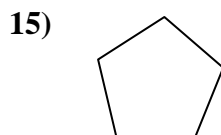
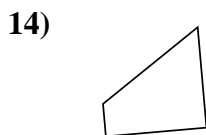
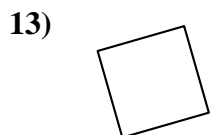
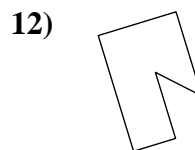
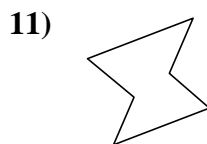
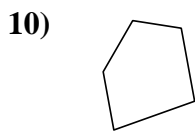
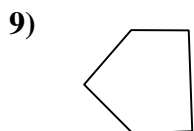
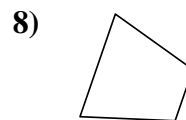
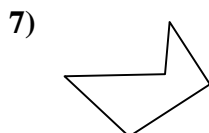
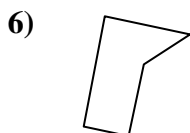

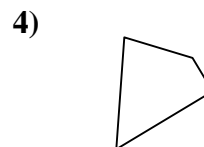
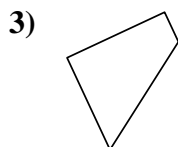
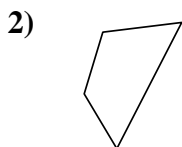
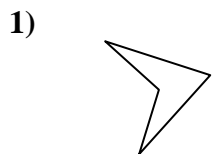
Risposte



1. _____
2. _____
3. _____
4. _____
5. _____
6. _____
7. _____
8. _____
9. _____
10. _____
11. _____
12. _____
13. _____
14. _____
15. _____
16. _____
17. _____
18. _____
19. _____
20. _____



Determina se le forme mostrate sono quadrilateri (si) oppure no (no).



Risposte

1. si

2. si

3. si

4. si

5. si

6. no

7. no

8. si

9. no

10. no

11. no

12. no

13. si

14. si

15. no

16. no

17. no

18. no

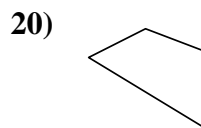
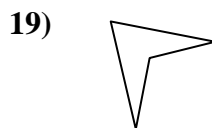
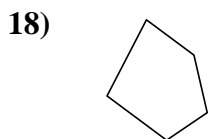
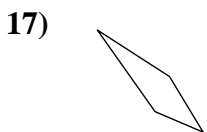
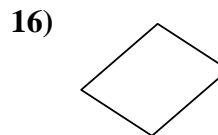
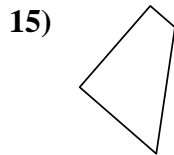
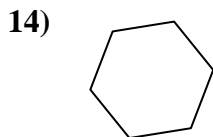
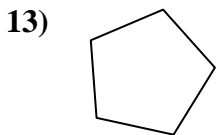
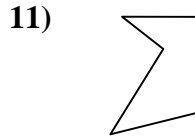
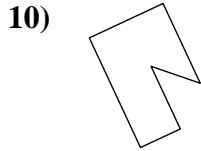
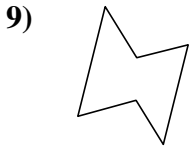
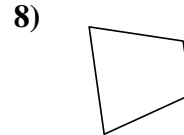
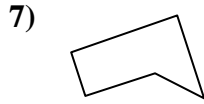
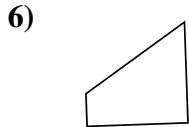
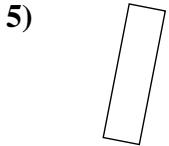
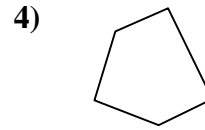
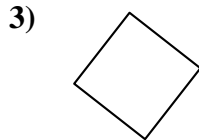
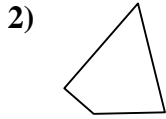
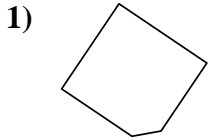
19. si

20. si



Determina se le forme mostrate sono quadrilateri (si) oppure no (no).

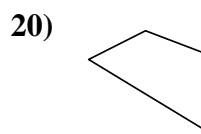
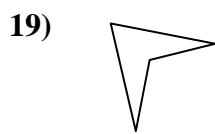
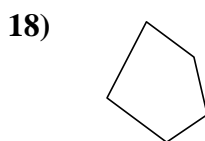
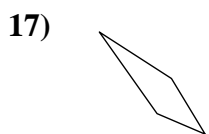
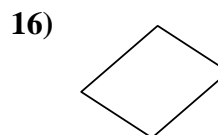
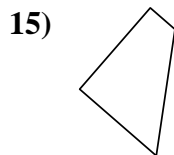
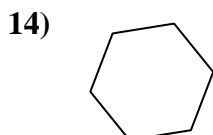
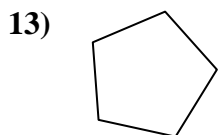
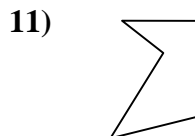
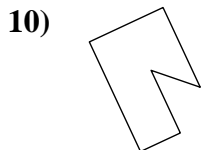
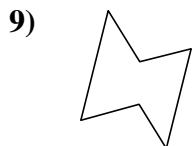
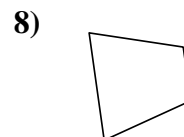
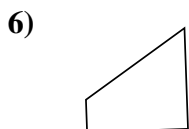
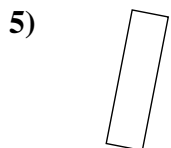
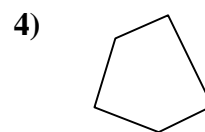
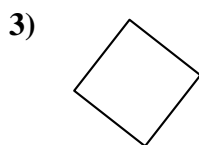
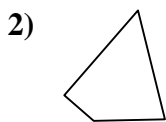
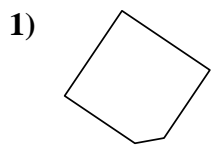
Risposte



- 1. _____
- 2. _____
- 3. _____
- 4. _____
- 5. _____
- 6. _____
- 7. _____
- 8. _____
- 9. _____
- 10. _____
- 11. _____
- 12. _____
- 13. _____
- 14. _____
- 15. _____
- 16. _____
- 17. _____
- 18. _____
- 19. _____
- 20. _____



Determina se le forme mostrate sono quadrilateri (si) oppure no (no).



Risposte

1. no

2. si

3. si

4. no

5. si

6. si

7. no

8. si

9. no

10. no

11. no

12. no

13. no

14. no

15. si

16. si

17. si

18. no

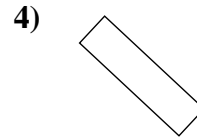
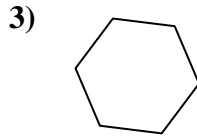
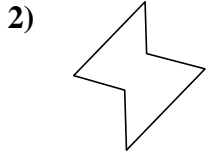
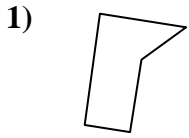
19. si

20. si



Determina se le forme mostrate sono quadrilateri (si) oppure no (no).

Risposte

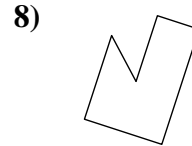
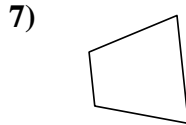
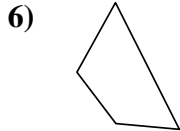
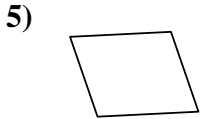


1. _____

2. _____

3. _____

4. _____


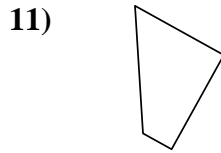
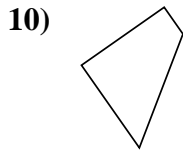


5. _____

6. _____

7. _____

8. _____

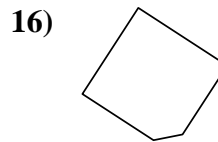
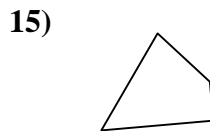
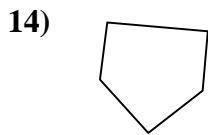
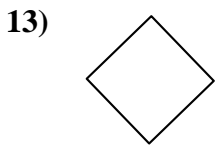


9. _____

10. _____

11. _____

12. _____

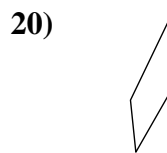
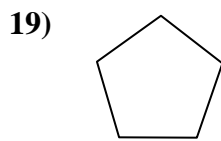
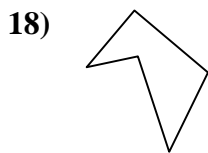
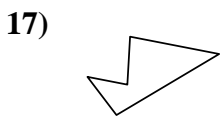


13. _____

14. _____

15. _____

16. _____



17. _____

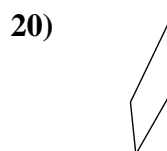
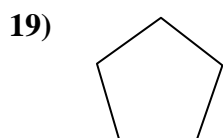
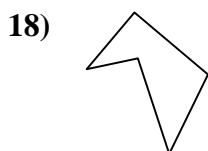
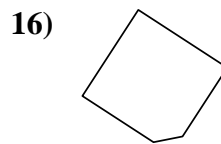
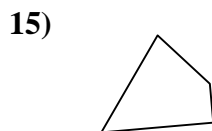
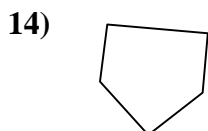
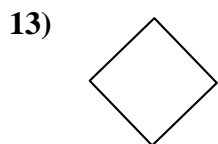
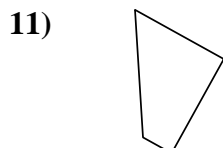
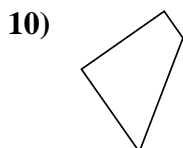
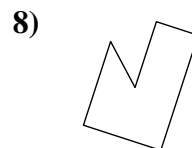
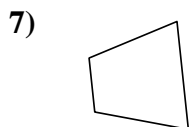
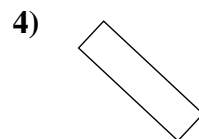
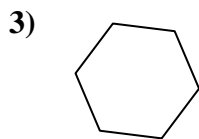
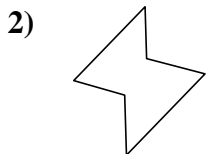
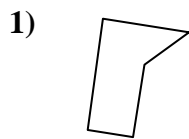
18. _____

19. _____

20. _____



Determina se le forme mostrate sono quadrilateri (si) oppure no (no).



Risposte

1. **no**

2. **no**

3. **no**

4. **si**

5. **si**

6. **si**

7. **si**

8. **no**

9. **si**

10. **si**

11. **si**

12. **no**

13. **si**

14. **no**

15. **si**

16. **no**

17. **no**

18. **no**

19. **no**

20. **si**