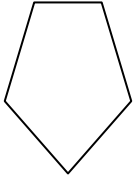




Determina quale lettera MIGLIORE rappresenta le forme utilizzate per creare la figura mostrata.

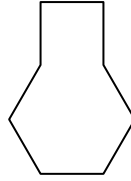
Risposte

1)



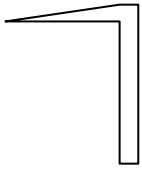
- A. Esagono & triangle
- B. Quadrilatero & triangle
- C. rectangle & Pentagono
- D. rectangle & Ottagono

2)



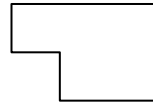
- A. Pentagono & square
- B. square & Ettagono
- C. Esagono & square
- D. square & triangle

3)




- A. Quadrilatero & triangle
- B. square & Quadrilatero
- C. Ettagono & Ottagono
- D. Esagono & Ettagono

4)



- A. rectangle & square
- B. Esagono & square
- C. Quadrilatero & Ottagono
- D. rectangle & triangle

5)



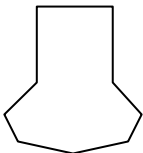
- A. triangle & triangle
- B. rectangle & Esagono
- C. Pentagono & Quadrilatero
- D. rectangle & Quadrilatero

6)



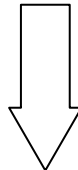
- A. Quadrilatero & Esagono
- B. Quadrilatero & Ettagono
- C. Esagono & Quadrilatero
- D. Quadrilatero & triangle

7)



- A. Ettagono & rectangle
- B. square & rectangle
- C. Ettagono & Quadrilatero
- D. Pentagono & Ottagono

8)



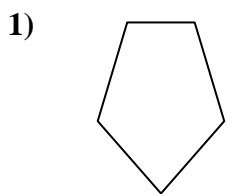
- A. Esagono & Ottagono
- B. Ottagono & square
- C. triangle & Pentagono
- D. rectangle & triangle

- 1. _____
- 2. _____
- 3. _____
- 4. _____
- 5. _____
- 6. _____
- 7. _____
- 8. _____

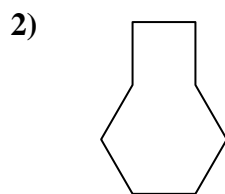


Determina quale lettera MIGLIORE rappresenta le forme utilizzate per creare la figura mostrata.

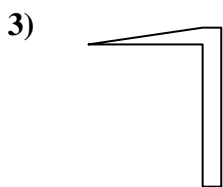
Risposte



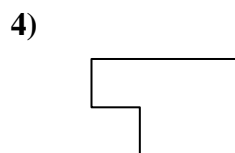
- A. Esagono & triangle
- B. Quadrilatero & triangle
- C. rectangle & Pentagono
- D. rectangle & Ottagono



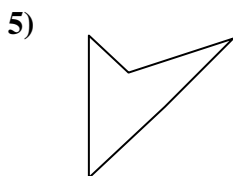
- A. Pentagono & square
- B. square & Ettagono
- C. Esagono & square
- D. square & triangle



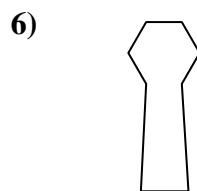
- A. Quadrilatero & triangle
- B. square & Quadrilatero
- C. Ettagono & Ottagono
- D. Esagono & Ettagono



- A. rectangle & square
- B. Esagono & square
- C. Quadrilatero & Ottagono
- D. rectangle & triangle



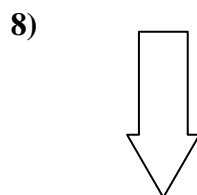
- A. triangle & triangle
- B. rectangle & Esagono
- C. Pentagono & Quadrilatero
- D. rectangle & Quadrilatero



- A. Quadrilatero & Esagono
- B. Quadrilatero & Ettagono
- C. Esagono & Quadrilatero
- D. Quadrilatero & triangle



- A. Ettagono & rectangle
- B. square & rectangle
- C. Ettagono & Quadrilatero
- D. Pentagono & Ottagono



- A. Esagono & Ottagono
- B. Ottagono & square
- C. triangle & Pentagono
- D. rectangle & triangle

- 1. **B**
- 2. **C**
- 3. **A**
- 4. **A**
- 5. **A**
- 6. **C**
- 7. **C**
- 8. **D**