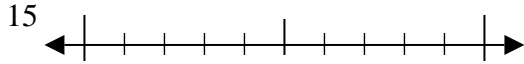


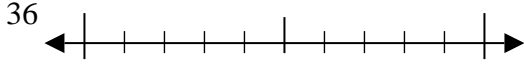


Usa la linea numerata per arrotondare alla decina più vicina.

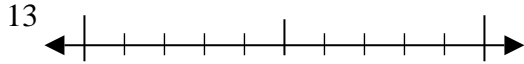
Es)



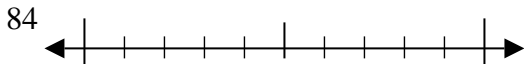
1)



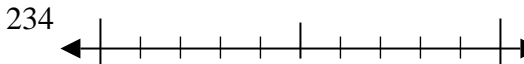
2)



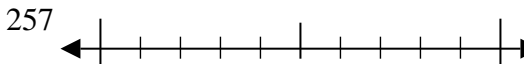
3)



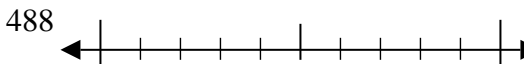
4)



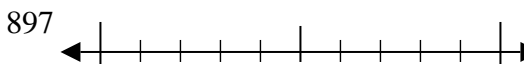
5)



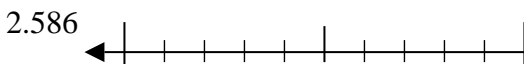
6)



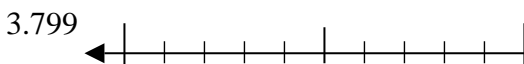
7)



8)



9)



**Risposte**

Es. 20

1. \_\_\_\_\_

2. \_\_\_\_\_

3. \_\_\_\_\_

4. \_\_\_\_\_

5. \_\_\_\_\_

6. \_\_\_\_\_

7. \_\_\_\_\_

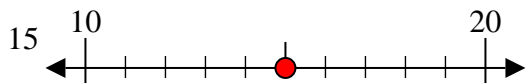
8. \_\_\_\_\_

9. \_\_\_\_\_

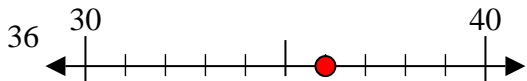


Usa la linea numerata per arrotondare alla decina più vicina.

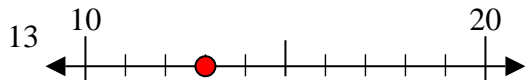
Es)



1)



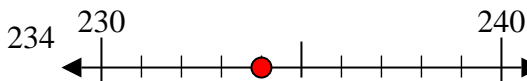
2)



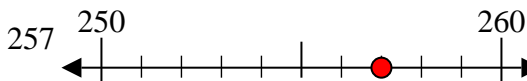
3)



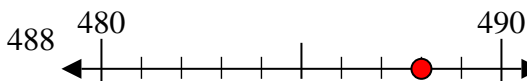
4)



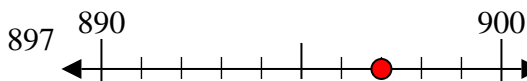
5)



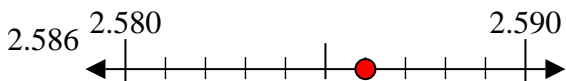
6)



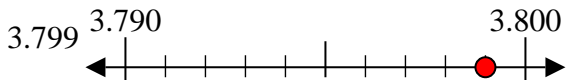
7)



8)



9)

**Risposte**Es. 201. 402. 103. 804. 2305. 2606. 4907. 9008. 25909. 3800