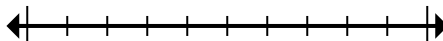




Segna la posizione (approssimativa) sulla linea dei numeri e poi risolvi.

Risposte

1) Arrotonda 60.393.636 per centomila.



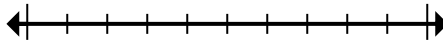
1. _____

2) Arrotonda 94.001 per diecimila.



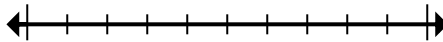
2. _____

3) Arrotonda 665 per cento.



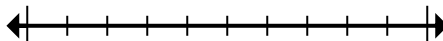
3. _____

4) Arrotonda 257 per cento.



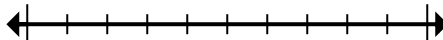
4. _____

5) Arrotonda 888.081 per diecimila.



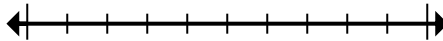
5. _____

6) Arrotonda 2.138 per mille.



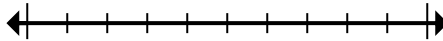
6. _____

7) Arrotonda 3.390 per mille.



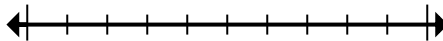
7. _____

8) Arrotonda 8.542.890 per diecimila.



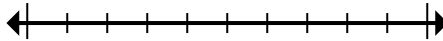
8. _____

9) Arrotonda 515.011 per centomila.



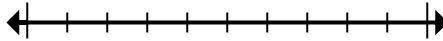
9. _____

10) Arrotonda 962.363 per cento.



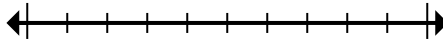
10. _____

11) Arrotonda 656.429 per centomila.



11. _____

12) Arrotonda 87.606 per diecimila.

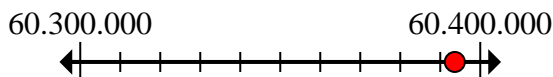


12. _____

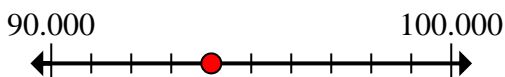


Segna la posizione (approssimativa) sulla linea dei numeri e poi risolvi.

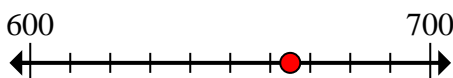
- 1) Arrotonda 60.393.636 per centomila.



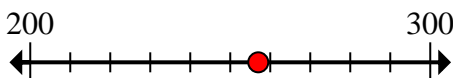
- 2) Arrotonda 94.001 per diecimila.



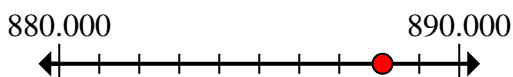
- 3) Arrotonda 665 per cento.



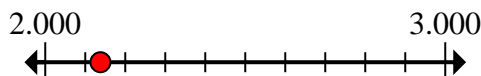
- 4) Arrotonda 257 per cento.



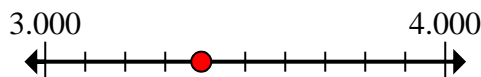
- 5) Arrotonda 888.081 per diecimila.



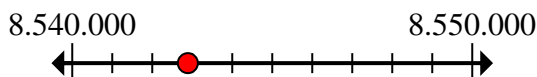
- 6) Arrotonda 2.138 per mille.



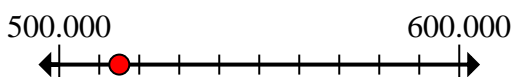
- 7) Arrotonda 3.390 per mille.



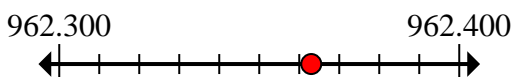
- 8) Arrotonda 8.542.890 per diecimila.



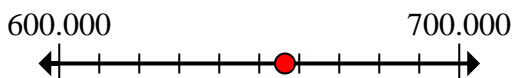
- 9) Arrotonda 515.011 per centomila.



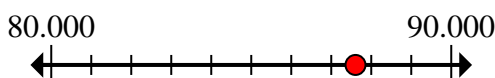
- 10) Arrotonda 962.363 per cento.



- 11) Arrotonda 656.429 per centomila.



- 12) Arrotonda 87.606 per diecimila.

**Risposte**1. **60.400.000**2. **90.000**3. **700**4. **300**5. **890.000**6. **2.000**7. **3.000**8. **8.540.000**9. **500.000**10. **962.400**11. **700.000**12. **90.000**

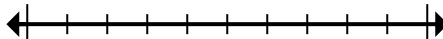


Segna la posizione (approssimativa) sulla linea dei numeri e poi risolvi.

Risposte

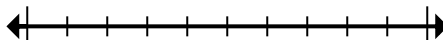
2.000	60.400.000	700	90.000
90.000	700.000	3.000	8.540.000
962.400	300	500.000	890.000

1) Arrotonda 60.393.636 per centomila.



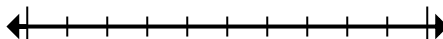
1. _____

2) Arrotonda 94.001 per diecimila.



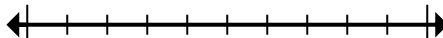
2. _____

3) Arrotonda 665 per cento.



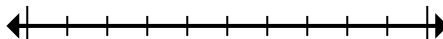
3. _____

4) Arrotonda 257 per cento.



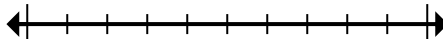
4. _____

5) Arrotonda 888.081 per diecimila.



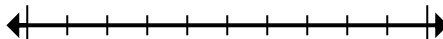
5. _____

6) Arrotonda 2.138 per mille.



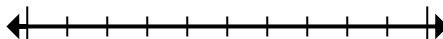
6. _____

7) Arrotonda 3.390 per mille.



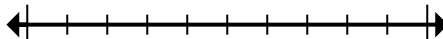
7. _____

8) Arrotonda 8.542.890 per diecimila.



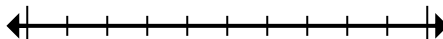
8. _____

9) Arrotonda 515.011 per centomila.



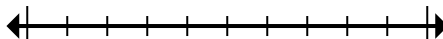
9. _____

10) Arrotonda 962.363 per cento.



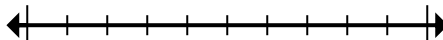
10. _____

11) Arrotonda 656.429 per centomila.



11. _____

12) Arrotonda 87.606 per diecimila.



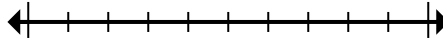
12. _____



Segna la posizione (approssimativa) sulla linea dei numeri e poi risolvi.

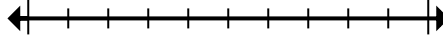
Risposte

1) Arrotonda 41.495.881 per centomila.



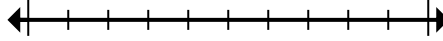
1. _____

2) Arrotonda 42.268 per cento.



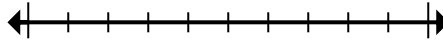
2. _____

3) Arrotonda 62.956 per diecimila.



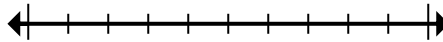
3. _____

4) Arrotonda 793.025 per mille.



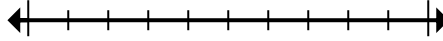
4. _____

5) Arrotonda 6.486 per mille.



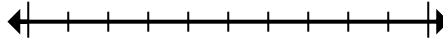
5. _____

6) Arrotonda 946.794 per diecimila.



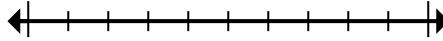
6. _____

7) Arrotonda 56.647 per cento.



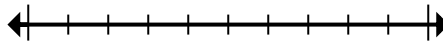
7. _____

8) Arrotonda 493 per cento.



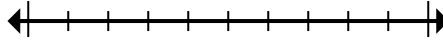
8. _____

9) Arrotonda 937.248 per centomila.



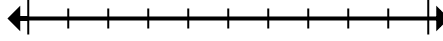
9. _____

10) Arrotonda 8.994 per mille.



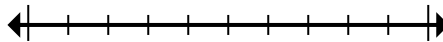
10. _____

11) Arrotonda 81.576.640 per centomila.



11. _____

12) Arrotonda 824.415 per mille.

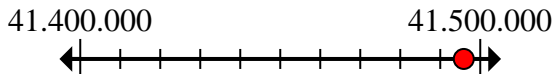


12. _____

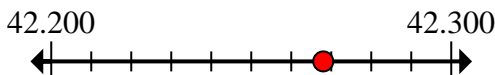


Segna la posizione (approssimativa) sulla linea dei numeri e poi risolvi.

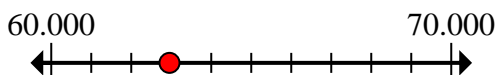
- 1) Arrotonda 41.495.881 per centomila.



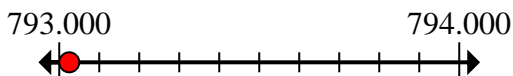
- 2) Arrotonda 42.268 per cento.



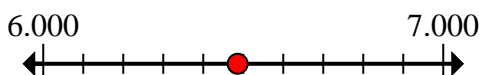
- 3) Arrotonda 62.956 per diecimila.



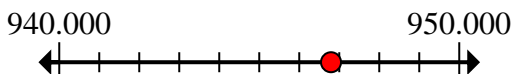
- 4) Arrotonda 793.025 per mille.



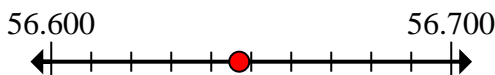
- 5) Arrotonda 6.486 per mille.



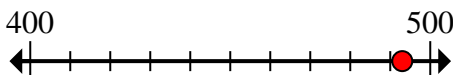
- 6) Arrotonda 946.794 per diecimila.



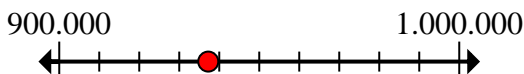
- 7) Arrotonda 56.647 per cento.



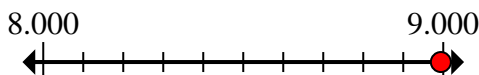
- 8) Arrotonda 493 per cento.



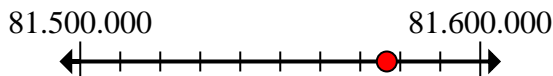
- 9) Arrotonda 937.248 per centomila.



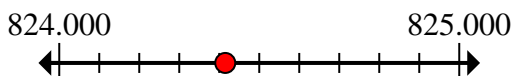
- 10) Arrotonda 8.994 per mille.



- 11) Arrotonda 81.576.640 per centomila.



- 12) Arrotonda 824.415 per mille.

**Risposte**1. 41.500.0002. 42.3003. 60.0004. 793.0005. 6.0006. 950.0007. 56.6008. 5009. 900.00010. 9.00011. 81.600.00012. 824.000

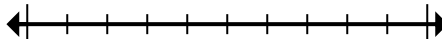


Segna la posizione (approssimativa) sulla linea dei numeri e poi risolvi.

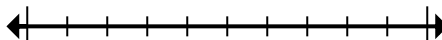
900.000	56.600	81.600.000	9.000
6.000	500	793.000	60.000
824.000	41.500.000	950.000	42.300

Risposte

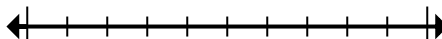
1) Arrotonda 41.495.881 per centomila.



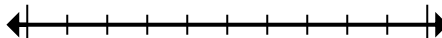
2) Arrotonda 42.268 per cento.



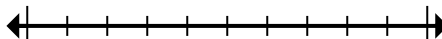
3) Arrotonda 62.956 per diecimila.



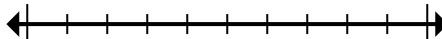
4) Arrotonda 793.025 per mille.



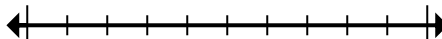
5) Arrotonda 6.486 per mille.



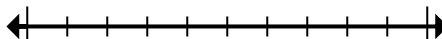
6) Arrotonda 946.794 per diecimila.



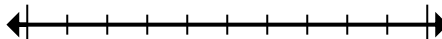
7) Arrotonda 56.647 per cento.



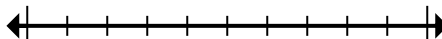
8) Arrotonda 493 per cento.



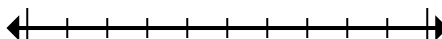
9) Arrotonda 937.248 per centomila.



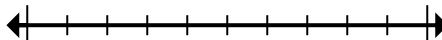
10) Arrotonda 8.994 per mille.



11) Arrotonda 81.576.640 per centomila.



12) Arrotonda 824.415 per mille.



1. _____
2. _____
3. _____
4. _____
5. _____
6. _____
7. _____
8. _____
9. _____
10. _____
11. _____
12. _____

**Segna la posizione (approssimativa) sulla linea dei numeri e poi risolvi.****Risposte**

1) Arrotonda 52.817 per diecimila.



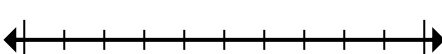
1. _____

2) Arrotonda 820.860 per cento.



2. _____

3) Arrotonda 666.641 per diecimila.



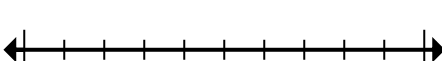
3. _____

4) Arrotonda 9.506 per mille.



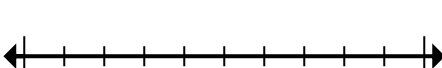
4. _____

5) Arrotonda 453.975 per centomila.



5. _____

6) Arrotonda 534.644 per centomila.



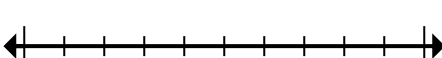
6. _____

7) Arrotonda 40.673.282 per centomila.



7. _____

8) Arrotonda 126.324 per diecimila.



8. _____

9) Arrotonda 950 per cento.



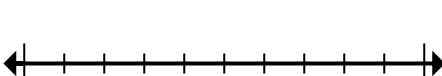
9. _____

10) Arrotonda 728.779 per mille.



10. _____

11) Arrotonda 82.189 per diecimila.



11. _____

12) Arrotonda 681.152 per mille.

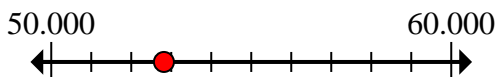


12. _____

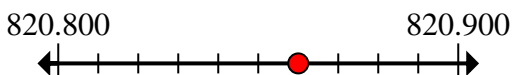


Segna la posizione (approssimativa) sulla linea dei numeri e poi risolvi.

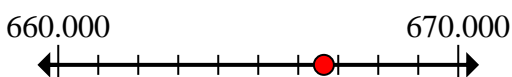
- 1) Arrotonda 52.817 per diecimila.



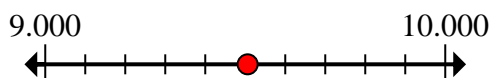
- 2) Arrotonda 820.860 per cento.



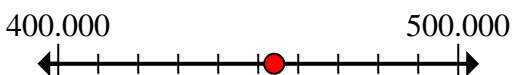
- 3) Arrotonda 666.641 per diecimila.



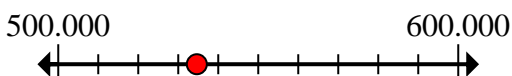
- 4) Arrotonda 9.506 per mille.



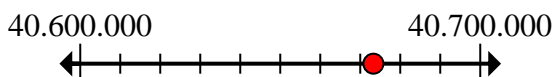
- 5) Arrotonda 453.975 per centomila.



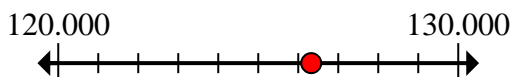
- 6) Arrotonda 534.644 per centomila.



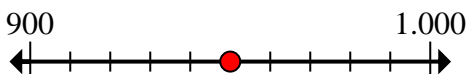
- 7) Arrotonda 40.673.282 per centomila.



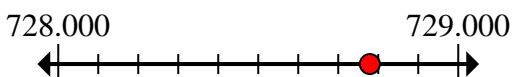
- 8) Arrotonda 126.324 per diecimila.



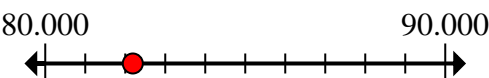
- 9) Arrotonda 950 per cento.



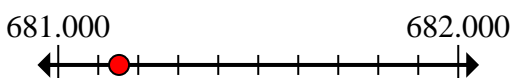
- 10) Arrotonda 728.779 per mille.



- 11) Arrotonda 82.189 per diecimila.



- 12) Arrotonda 681.152 per mille.

**Risposte**

1. 50.000
2. 820.900
3. 670.000
4. 10.000
5. 500.000
6. 500.000
7. 40.700.000
8. 130.000
9. 1.000
10. 729.000
11. 80.000
12. 681.000



Segna la posizione (approssimativa) sulla linea dei numeri e poi risolvi.

Risposte

670.000	80.000	681.000	729.000
500.000	130.000	50.000	10.000
40.700.000	500.000	1.000	820.900

- 1) Arrotonda 52.817 per diecimila.
- 2) Arrotonda 820.860 per cento.
- 3) Arrotonda 666.641 per diecimila.
- 4) Arrotonda 9.506 per mille.
- 5) Arrotonda 453.975 per centomila.
- 6) Arrotonda 534.644 per centomila.
- 7) Arrotonda 40.673.282 per centomila.
- 8) Arrotonda 126.324 per diecimila.
- 9) Arrotonda 950 per cento.
- 10) Arrotonda 728.779 per mille.
- 11) Arrotonda 82.189 per diecimila.
- 12) Arrotonda 681.152 per mille.

1. _____
2. _____
3. _____
4. _____
5. _____
6. _____
7. _____
8. _____
9. _____
10. _____
11. _____
12. _____



Segna la posizione (approssimativa) sulla linea dei numeri e poi risolvi.

Risposte

1) Arrotonda 1.241 per mille.



1. _____

2) Arrotonda 768 per cento.



2. _____

3) Arrotonda 318.652 per cento.



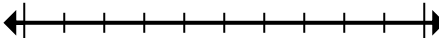
3. _____

4) Arrotonda 5.553.802 per mille.



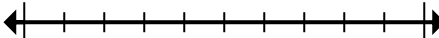
4. _____

5) Arrotonda 447.430 per centomila.



5. _____

6) Arrotonda 619.618 per diecimila.



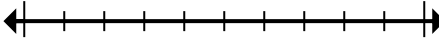
6. _____

7) Arrotonda 59.257 per mille.



7. _____

8) Arrotonda 2.862.338 per diecimila.



8. _____

9) Arrotonda 39.911.169 per centomila.



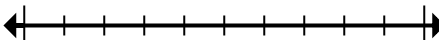
9. _____

10) Arrotonda 404 per cento.



10. _____

11) Arrotonda 76.673 per diecimila.



11. _____

12) Arrotonda 4.894 per mille.

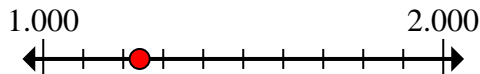


12. _____

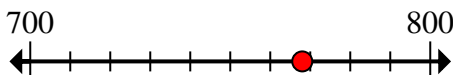


Segna la posizione (approssimativa) sulla linea dei numeri e poi risolvi.

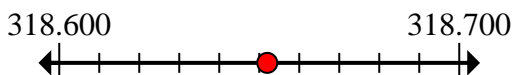
- 1) Arrotonda 1.241 per mille.



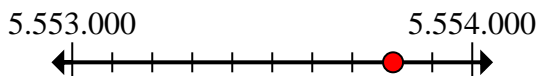
- 2) Arrotonda 768 per cento.



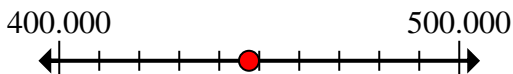
- 3) Arrotonda 318.652 per cento.



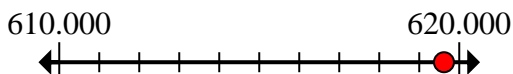
- 4) Arrotonda 5.553.802 per mille.



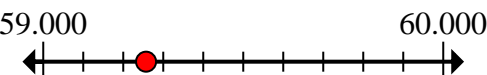
- 5) Arrotonda 447.430 per centomila.



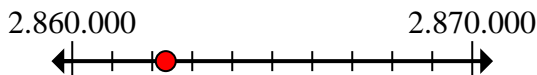
- 6) Arrotonda 619.618 per diecimila.



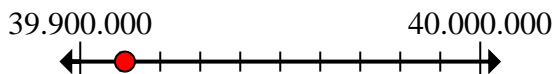
- 7) Arrotonda 59.257 per mille.



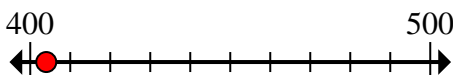
- 8) Arrotonda 2.862.338 per diecimila.



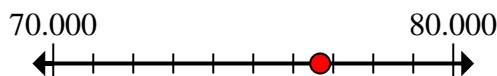
- 9) Arrotonda 39.911.169 per centomila.



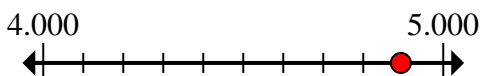
- 10) Arrotonda 404 per cento.



- 11) Arrotonda 76.673 per diecimila.



- 12) Arrotonda 4.894 per mille.

**Risposte**1. 1.0002. 8003. 318.7004. 5.554.0005. 400.0006. 620.0007. 59.0008. 2.860.0009. 39.900.00010. 40011. 80.00012. 5.000

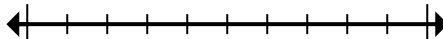


Segna la posizione (approssimativa) sulla linea dei numeri e poi risolvi.

800	2.860.000	620.000	39.900.000
59.000	80.000	400.000	400
5.554.000	1.000	318.700	5.000

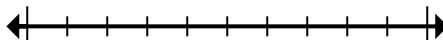
Risposte

1) Arrotonda 1.241 per mille.



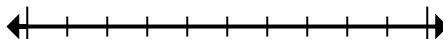
1. _____

2) Arrotonda 768 per cento.



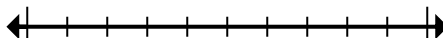
2. _____

3) Arrotonda 318.652 per cento.



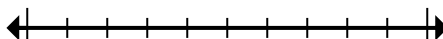
3. _____

4) Arrotonda 5.553.802 per mille.



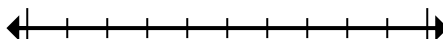
4. _____

5) Arrotonda 447.430 per centomila.



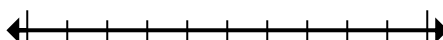
5. _____

6) Arrotonda 619.618 per diecimila.




6. _____

7) Arrotonda 59.257 per mille.




7. _____

8) Arrotonda 2.862.338 per diecimila.



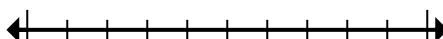
8. _____

9) Arrotonda 39.911.169 per centomila.



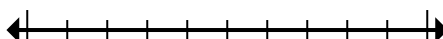
9. _____

10) Arrotonda 404 per cento.




10. _____

11) Arrotonda 76.673 per diecimila.



11. _____

12) Arrotonda 4.894 per mille.



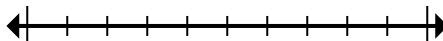
12. _____



Segna la posizione (approssimativa) sulla linea dei numeri e poi risolvi.

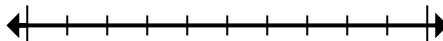
Risposte

1) Arrotonda 45.381.768 per centomila.



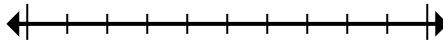
1. _____

2) Arrotonda 79.869 per diecimila.



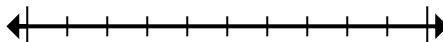
2. _____

3) Arrotonda 101.525 per diecimila.



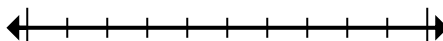
3. _____

4) Arrotonda 37.018 per mille.



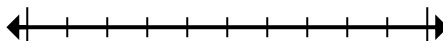
4. _____

5) Arrotonda 4.376 per mille.



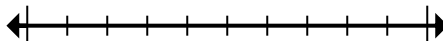
5. _____

6) Arrotonda 360.946 per mille.



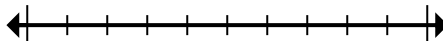
6. _____

7) Arrotonda 9.545.950 per cento.



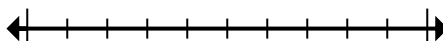
7. _____

8) Arrotonda 49.898.085 per centomila.



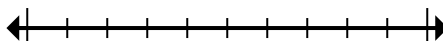
8. _____

9) Arrotonda 1.552 per mille.



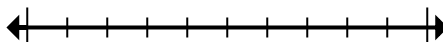
9. _____

10) Arrotonda 57.392 per diecimila.



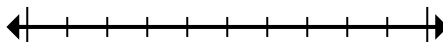
10. _____

11) Arrotonda 544.862 per centomila.



11. _____

12) Arrotonda 3.268.593 per cento.

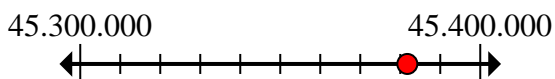


12. _____

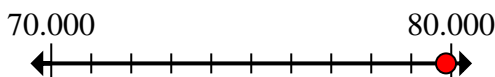


Segna la posizione (approssimativa) sulla linea dei numeri e poi risolvi.

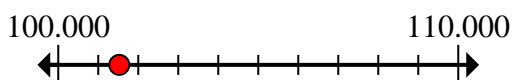
- 1) Arrotonda 45.381.768 per centomila.



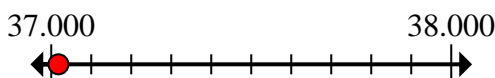
- 2) Arrotonda 79.869 per diecimila.



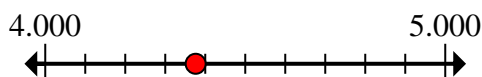
- 3) Arrotonda 101.525 per diecimila.



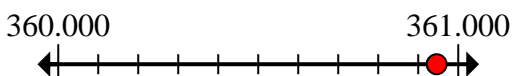
- 4) Arrotonda 37.018 per mille.



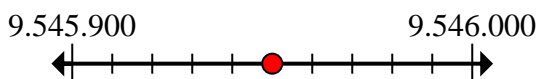
- 5) Arrotonda 4.376 per mille.



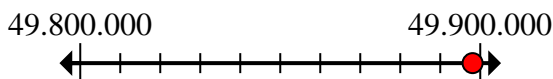
- 6) Arrotonda 360.946 per mille.



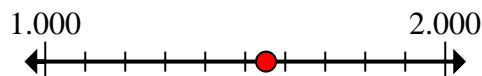
- 7) Arrotonda 9.545.950 per cento.



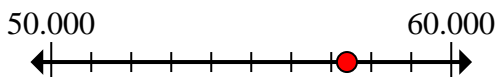
- 8) Arrotonda 49.898.085 per centomila.



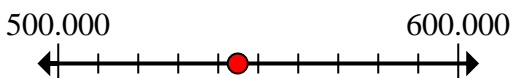
- 9) Arrotonda 1.552 per mille.



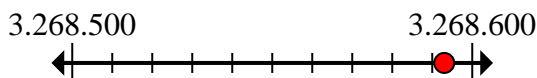
- 10) Arrotonda 57.392 per diecimila.



- 11) Arrotonda 544.862 per centomila.



- 12) Arrotonda 3.268.593 per cento.

**Risposte**

1. 45.400.000
2. 80.000
3. 100.000
4. 37.000
5. 4.000
6. 361.000
7. 9.546.000
8. 49.900.000
9. 2.000
10. 60.000
11. 500.000
12. 3.268.600

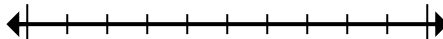


Segna la posizione (approssimativa) sulla linea dei numeri e poi risolvi.

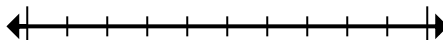
Risposte

60.000	4.000	3.268.600	2.000
49.900.000	9.546.000	361.000	45.400.000
37.000	500.000	100.000	80.000

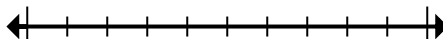
1) Arrotonda 45.381.768 per centomila.



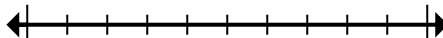
2) Arrotonda 79.869 per diecimila.



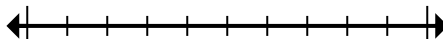
3) Arrotonda 101.525 per diecimila.



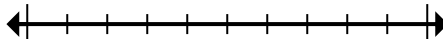
4) Arrotonda 37.018 per mille.



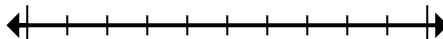
5) Arrotonda 4.376 per mille.



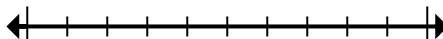
6) Arrotonda 360.946 per mille.



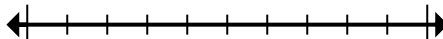
7) Arrotonda 9.545.950 per cento.



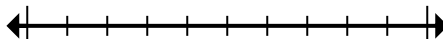
8) Arrotonda 49.898.085 per centomila.



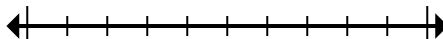
9) Arrotonda 1.552 per mille.



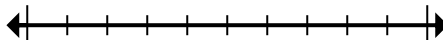
10) Arrotonda 57.392 per diecimila.



11) Arrotonda 544.862 per centomila.



12) Arrotonda 3.268.593 per cento.



1. _____
2. _____
3. _____
4. _____
5. _____
6. _____
7. _____
8. _____
9. _____
10. _____
11. _____
12. _____



Segna la posizione (approssimativa) sulla linea dei numeri e poi risolvi.

Risposte

1) Arrotonda 636 per cento.

1. _____

2) Arrotonda 460.239 per centomila.

2. _____

3) Arrotonda 43.360.678 per centomila.

3. _____

4) Arrotonda 525 per cento.

4. _____

5) Arrotonda 520.968 per centomila.

5. _____

6) Arrotonda 242.983 per diecimila.

6. _____

7) Arrotonda 6.825.849 per cento.

7. _____

8) Arrotonda 4.314 per mille.

8. _____

9) Arrotonda 97.589 per diecimila.

9. _____

10) Arrotonda 6.435 per mille.

10. _____

11) Arrotonda 29.689.529 per centomila.

11. _____

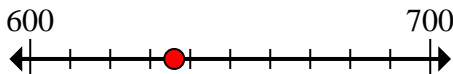
12) Arrotonda 4.801.539 per diecimila.

12. _____

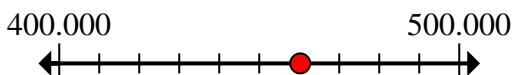


Segna la posizione (approssimativa) sulla linea dei numeri e poi risolvi.

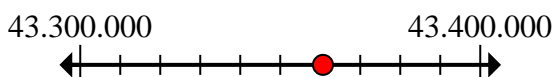
- 1) Arrotonda 636 per cento.



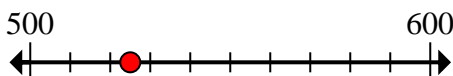
- 2) Arrotonda 460.239 per centomila.



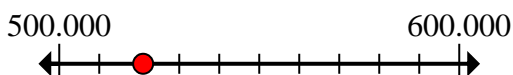
- 3) Arrotonda 43.360.678 per centomila.



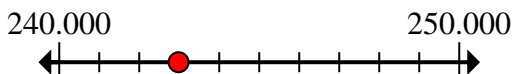
- 4) Arrotonda 525 per cento.



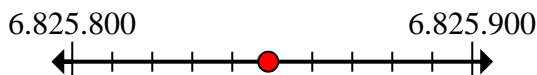
- 5) Arrotonda 520.968 per centomila.



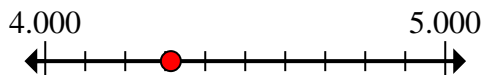
- 6) Arrotonda 242.983 per diecimila.



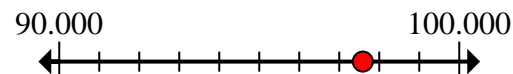
- 7) Arrotonda 6.825.849 per cento.



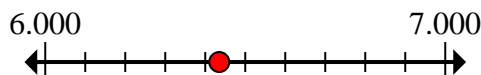
- 8) Arrotonda 4.314 per mille.



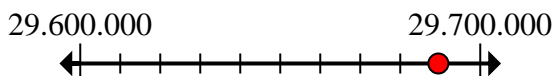
- 9) Arrotonda 97.589 per diecimila.



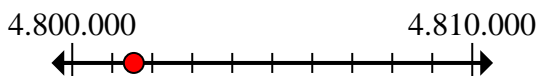
- 10) Arrotonda 6.435 per mille.



- 11) Arrotonda 29.689.529 per centomila.



- 12) Arrotonda 4.801.539 per diecimila.

**Risposte**1. 6002. 500.0003. 43.400.0004. 5005. 500.0006. 240.0007. 6.825.8008. 4.0009. 100.00010. 6.00011. 29.700.00012. 4.800.000

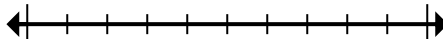


Segna la posizione (approssimativa) sulla linea dei numeri e poi risolvi.

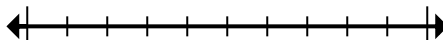
4.800.000	43.400.000	600	500
29.700.000	6.825.800	240.000	500.000
4.000	100.000	500.000	6.000

Risposte

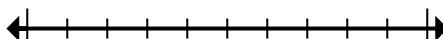
1) Arrotonda 636 per cento.



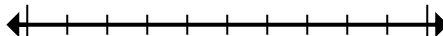
2) Arrotonda 460.239 per centomila.



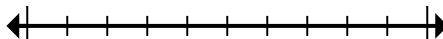
3) Arrotonda 43.360.678 per centomila.



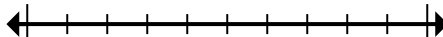
4) Arrotonda 525 per cento.



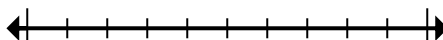
5) Arrotonda 520.968 per centomila.



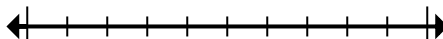
6) Arrotonda 242.983 per diecimila.



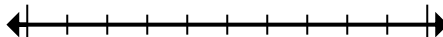
7) Arrotonda 6.825.849 per cento.



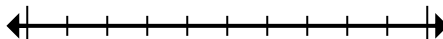
8) Arrotonda 4.314 per mille.



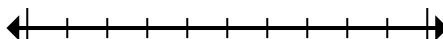
9) Arrotonda 97.589 per diecimila.



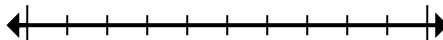
10) Arrotonda 6.435 per mille.



11) Arrotonda 29.689.529 per centomila.



12) Arrotonda 4.801.539 per diecimila.



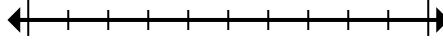
- 1. _____
- 2. _____
- 3. _____
- 4. _____
- 5. _____
- 6. _____
- 7. _____
- 8. _____
- 9. _____
- 10. _____
- 11. _____
- 12. _____



Segna la posizione (approssimativa) sulla linea dei numeri e poi risolvi.

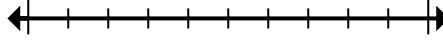
Risposte

1) Arrotonda 808.484 per diecimila.



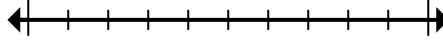
1. _____

2) Arrotonda 832.264 per mille.



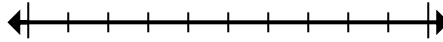
2. _____

3) Arrotonda 10.622.917 per centomila.



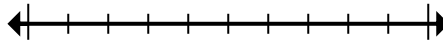
3. _____

4) Arrotonda 7.142.074 per diecimila.



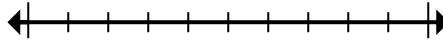
4. _____

5) Arrotonda 72.745 per diecimila.



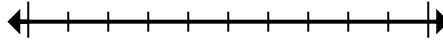
5. _____

6) Arrotonda 314 per cento.



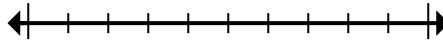
6. _____

7) Arrotonda 2.720 per mille.



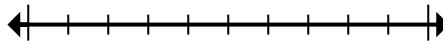
7. _____

8) Arrotonda 80.764 per diecimila.



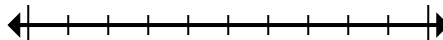
8. _____

9) Arrotonda 633.653 per mille.



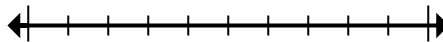
9. _____

10) Arrotonda 151.433 per cento.



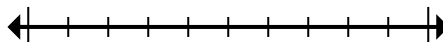
10. _____

11) Arrotonda 2.415 per cento.



11. _____

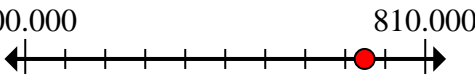
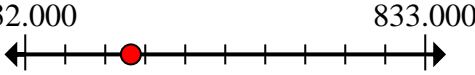
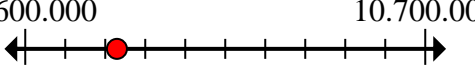
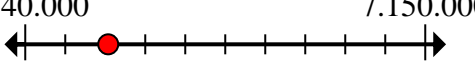
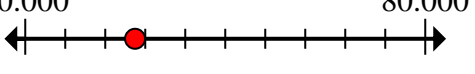
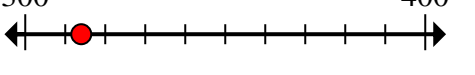
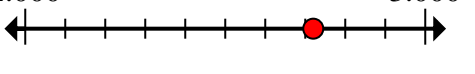
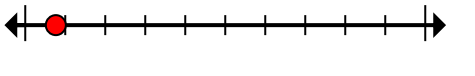
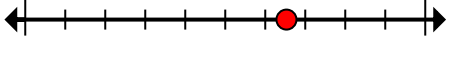
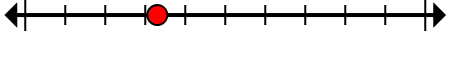
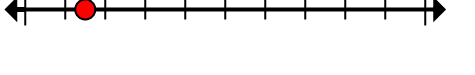
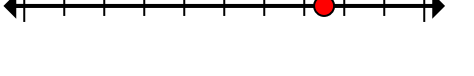
12) Arrotonda 42.974.961 per centomila.



12. _____



Segna la posizione (approssimativa) sulla linea dei numeri e poi risolvi.

- 1) Arrotonda 808.484 per diecimila. 
- 2) Arrotonda 832.264 per mille. 
- 3) Arrotonda 10.622.917 per centomila. 
- 4) Arrotonda 7.142.074 per diecimila. 
- 5) Arrotonda 72.745 per diecimila. 
- 6) Arrotonda 314 per cento. 
- 7) Arrotonda 2.720 per mille. 
- 8) Arrotonda 80.764 per diecimila. 
- 9) Arrotonda 633.653 per mille. 
- 10) Arrotonda 151.433 per cento. 
- 11) Arrotonda 2.415 per cento. 
- 12) Arrotonda 42.974.961 per centomila. 

Risposte

1. **810.000**
2. **832.000**
3. **10.600.000**
4. **7.140.000**
5. **70.000**
6. **300**
7. **3.000**
8. **80.000**
9. **634.000**
10. **151.400**
11. **2.400**
12. **43.000.000**

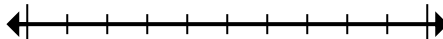


Segna la posizione (approssimativa) sulla linea dei numeri e poi risolvi.

3.000	151.400	832.000	10.600.000
70.000	80.000	7.140.000	300
634.000	810.000	2.400	43.000.000

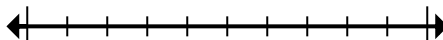
Risposte

1) Arrotonda 808.484 per diecimila.



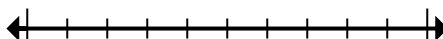
1. _____

2) Arrotonda 832.264 per mille.



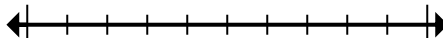
2. _____

3) Arrotonda 10.622.917 per centomila.



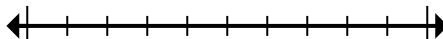
3. _____

4) Arrotonda 7.142.074 per diecimila.



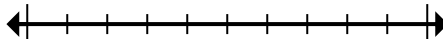
4. _____

5) Arrotonda 72.745 per diecimila.



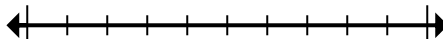
5. _____

6) Arrotonda 314 per cento.



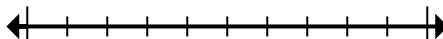
6. _____

7) Arrotonda 2.720 per mille.



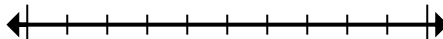
7. _____

8) Arrotonda 80.764 per diecimila.



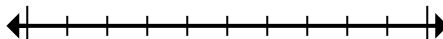
8. _____

9) Arrotonda 633.653 per mille.



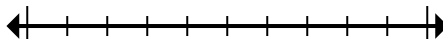
9. _____

10) Arrotonda 151.433 per cento.



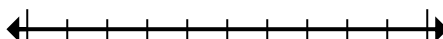
10. _____

11) Arrotonda 2.415 per cento.



11. _____

12) Arrotonda 42.974.961 per centomila.



12. _____



Segna la posizione (approssimativa) sulla linea dei numeri e poi risolvi.

Risposte

1) Arrotonda 1.491 per mille.

1. _____

2) Arrotonda 867.315 per cento.

2. _____

3) Arrotonda 524 per cento.

3. _____

4) Arrotonda 698 per cento.

4. _____

5) Arrotonda 4.646.919 per cento.

5. _____

6) Arrotonda 6.630.803 per mille.

6. _____

7) Arrotonda 4.407.993 per centomila.

7. _____

8) Arrotonda 83.368 per diecimila.

8. _____

9) Arrotonda 5.665.526 per diecimila.

9. _____

10) Arrotonda 1.299 per mille.

10. _____

11) Arrotonda 448.098 per centomila.

11. _____

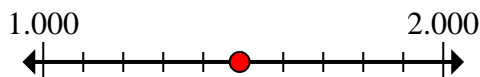
12) Arrotonda 178.876 per diecimila.

12. _____

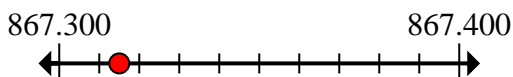


Segna la posizione (approssimativa) sulla linea dei numeri e poi risolvi.

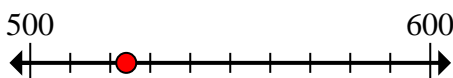
- 1) Arrotonda 1.491 per mille.



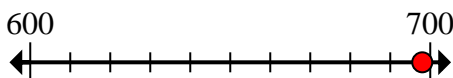
- 2) Arrotonda 867.315 per cento.



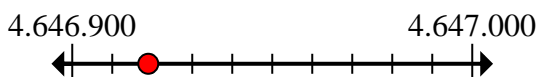
- 3) Arrotonda 524 per cento.



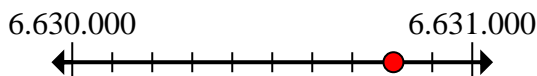
- 4) Arrotonda 698 per cento.



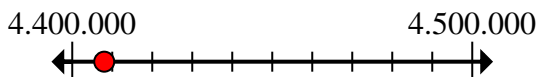
- 5) Arrotonda 4.646.919 per cento.



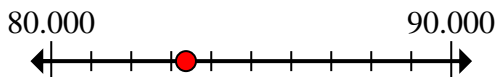
- 6) Arrotonda 6.630.803 per mille.



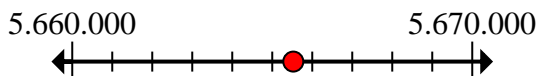
- 7) Arrotonda 4.407.993 per centomila.



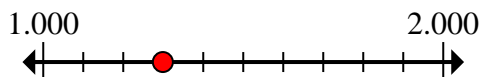
- 8) Arrotonda 83.368 per diecimila.



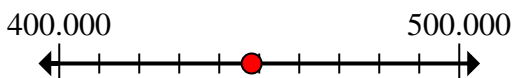
- 9) Arrotonda 5.665.526 per diecimila.



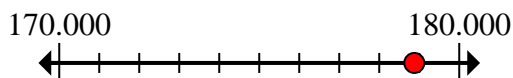
- 10) Arrotonda 1.299 per mille.



- 11) Arrotonda 448.098 per centomila.



- 12) Arrotonda 178.876 per diecimila.

**Risposte**1. 1.0002. 867.3003. 5004. 7005. 4.646.9006. 6.631.0007. 4.400.0008. 80.0009. 5.670.00010. 1.00011. 400.00012. 180.000



Segna la posizione (approssimativa) sulla linea dei numeri e poi risolvi.

867.300	500	4.400.000	80.000
1.000	4.646.900	700	400.000
180.000	1.000	5.670.000	6.631.000

Risposte

- 1) Arrotonda 1.491 per mille.
- 2) Arrotonda 867.315 per cento.
- 3) Arrotonda 524 per cento.
- 4) Arrotonda 698 per cento.
- 5) Arrotonda 4.646.919 per cento.
- 6) Arrotonda 6.630.803 per mille.
- 7) Arrotonda 4.407.993 per centomila.
- 8) Arrotonda 83.368 per diecimila.
- 9) Arrotonda 5.665.526 per diecimila.
- 10) Arrotonda 1.299 per mille.
- 11) Arrotonda 448.098 per centomila.
- 12) Arrotonda 178.876 per diecimila.

1. _____
2. _____
3. _____
4. _____
5. _____
6. _____
7. _____
8. _____
9. _____
10. _____
11. _____
12. _____



Segna la posizione (approssimativa) sulla linea dei numeri e poi risolvi.

Risposte

1) Arrotonda 14.905 per cento.

1. _____

2) Arrotonda 680.180 per centomila.

2. _____

3) Arrotonda 992.162 per centomila.

3. _____

4) Arrotonda 48.422.834 per centomila.

4. _____

5) Arrotonda 729.327 per mille.

5. _____

6) Arrotonda 42.660 per mille.

6. _____

7) Arrotonda 72.083.942 per centomila.

7. _____

8) Arrotonda 361 per cento.

8. _____

9) Arrotonda 79.043 per diecimila.

9. _____

10) Arrotonda 344 per cento.

10. _____

11) Arrotonda 1.179 per mille.

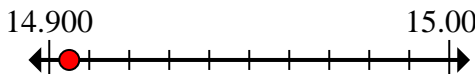
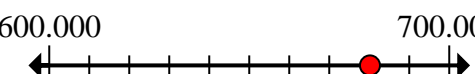










11. _____

12) Arrotonda 359.639 per cento.

12. _____



Segna la posizione (approssimativa) sulla linea dei numeri e poi risolvi.

- 1) Arrotonda 14.905 per cento. 
- 2) Arrotonda 680.180 per centomila. 
- 3) Arrotonda 992.162 per centomila. 
- 4) Arrotonda 48.422.834 per centomila. 
- 5) Arrotonda 729.327 per mille. 
- 6) Arrotonda 42.660 per mille. 
- 7) Arrotonda 72.083.942 per centomila. 
- 8) Arrotonda 361 per cento. 
- 9) Arrotonda 79.043 per diecimila. 
- 10) Arrotonda 344 per cento. 
- 11) Arrotonda 1.179 per mille. 
- 12) Arrotonda 359.639 per cento. 

Risposte

1. 14.900
2. 700.000
3. 1.000.000
4. 48.400.000
5. 729.000
6. 43.000
7. 72.100.000
8. 400
9. 80.000
10. 300
11. 1.000
12. 359.600



Segna la posizione (approssimativa) sulla linea dei numeri e poi risolvi.

1.000	1.000.000	43.000	700.000
729.000	72.100.000	359.600	300
14.900	48.400.000	400	80.000

Risposte

- 1) Arrotonda 14.905 per cento.
- 2) Arrotonda 680.180 per centomila.
- 3) Arrotonda 992.162 per centomila.
- 4) Arrotonda 48.422.834 per centomila.
- 5) Arrotonda 729.327 per mille.
- 6) Arrotonda 42.660 per mille.
- 7) Arrotonda 72.083.942 per centomila.
- 8) Arrotonda 361 per cento.
- 9) Arrotonda 79.043 per diecimila.
- 10) Arrotonda 344 per cento.
- 11) Arrotonda 1.179 per mille.
- 12) Arrotonda 359.639 per cento.

1. _____
2. _____
3. _____
4. _____
5. _____
6. _____
7. _____
8. _____
9. _____
10. _____
11. _____
12. _____



Segna la posizione (approssimativa) sulla linea dei numeri e poi risolvi.

Risposte

1) Arrotonda 828 per cento.

1. _____

2) Arrotonda 9.053 per mille.

2. _____

3) Arrotonda 11.215 per mille.

3. _____

4) Arrotonda 241.077 per diecimila.

4. _____

5) Arrotonda 342.549 per cento.

5. _____

6) Arrotonda 996.949 per diecimila.

6. _____

7) Arrotonda 7.577.963 per mille.

7. _____

8) Arrotonda 17.487 per diecimila.

8. _____

9) Arrotonda 7.921.410 per centomila.

9. _____

10) Arrotonda 153.244 per centomila.

10. _____

11) Arrotonda 308.648 per centomila.

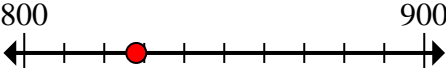
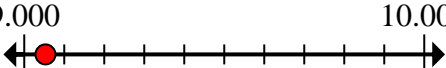
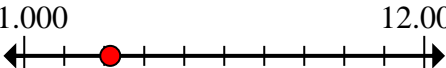
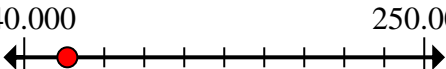

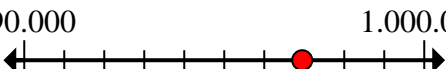
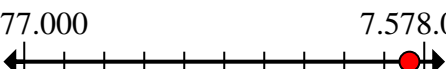
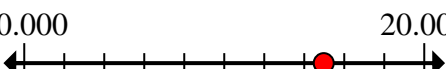

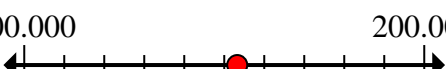


11. _____

12) Arrotonda 673 per cento.

12. _____



Segna la posizione (approssimativa) sulla linea dei numeri e poi risolvi.

- 1) Arrotonda 828 per cento. 
- 2) Arrotonda 9.053 per mille. 
- 3) Arrotonda 11.215 per mille. 
- 4) Arrotonda 241.077 per diecimila. 
- 5) Arrotonda 342.549 per cento. 
- 6) Arrotonda 996.949 per diecimila. 
- 7) Arrotonda 7.577.963 per mille. 
- 8) Arrotonda 17.487 per diecimila. 
- 9) Arrotonda 7.921.410 per centomila. 
- 10) Arrotonda 153.244 per centomila. 
- 11) Arrotonda 308.648 per centomila. 
- 12) Arrotonda 673 per cento. 

Risposte

1. 800
2. 9.000
3. 11.000
4. 240.000
5. 342.500
6. 1.000.000
7. 7.578.000
8. 20.000
9. 7.900.000
10. 200.000
11. 300.000
12. 700

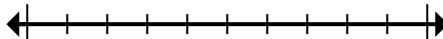


Segna la posizione (approssimativa) sulla linea dei numeri e poi risolvi.

342.500	1.000.000	11.000	9.000
240.000	700	200.000	300.000
20.000	7.900.000	7.578.000	800

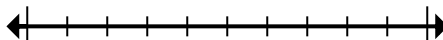
Risposte

1) Arrotonda 828 per cento.



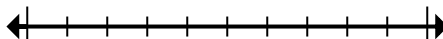
1. _____

2) Arrotonda 9.053 per mille.



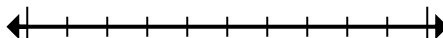
2. _____

3) Arrotonda 11.215 per mille.



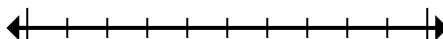
3. _____

4) Arrotonda 241.077 per diecimila.



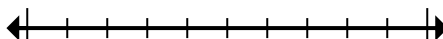
4. _____

5) Arrotonda 342.549 per cento.



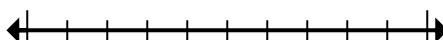
5. _____

6) Arrotonda 996.949 per diecimila.




6. _____

7) Arrotonda 7.577.963 per mille.




7. _____

8) Arrotonda 17.487 per diecimila.




8. _____

9) Arrotonda 7.921.410 per centomila.



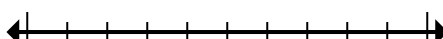
9. _____

10) Arrotonda 153.244 per centomila.




10. _____

11) Arrotonda 308.648 per centomila.



11. _____

12) Arrotonda 673 per cento.



12. _____