



Usa la linea numerata per arrotondare ogni numero al centinaio più vicino.

Es)

4.410



Es. 4.400

1)

853



1. \_\_\_\_\_

2)

783



2. \_\_\_\_\_

3)

9.697



3. \_\_\_\_\_

4)

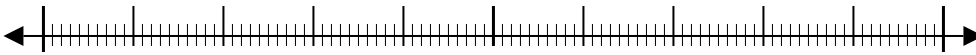
8.980



4. \_\_\_\_\_

5)

569



5. \_\_\_\_\_

6)

9.924



6. \_\_\_\_\_

7)

99.310



7. \_\_\_\_\_

8)

90.005



8. \_\_\_\_\_

9)

17.192



9. \_\_\_\_\_

10)

60.453

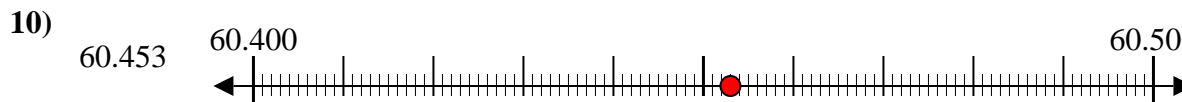
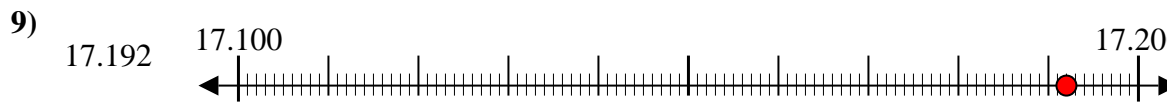
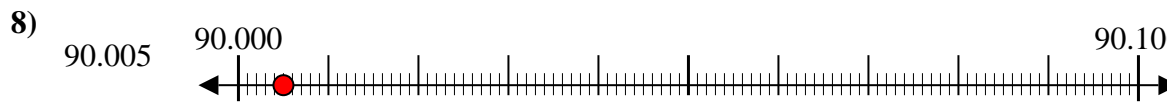
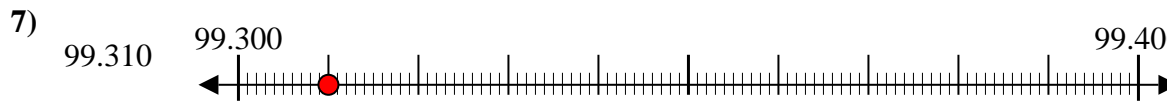
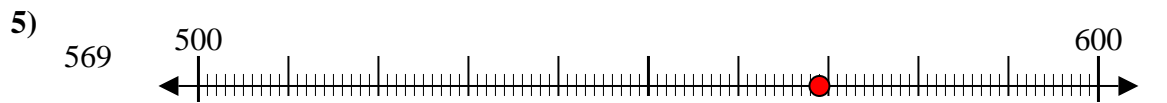
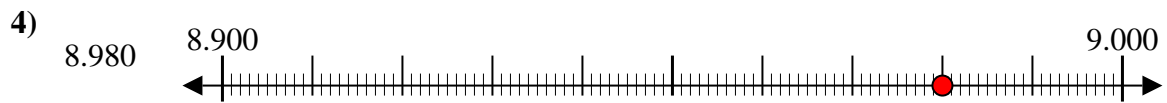
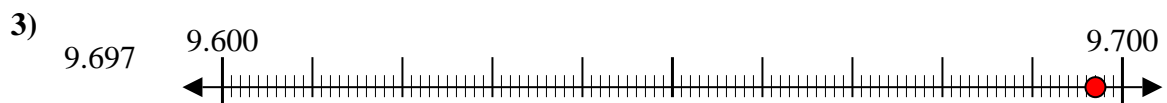
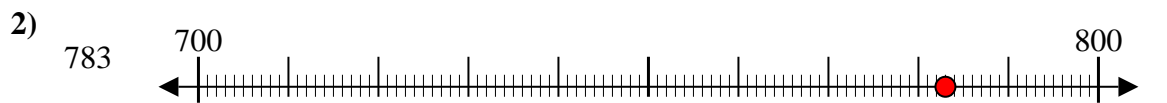
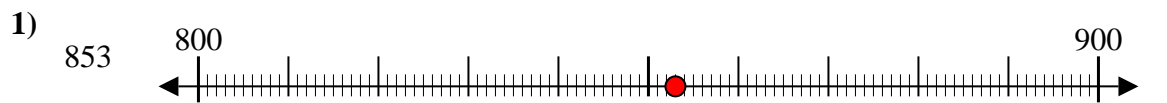


10. \_\_\_\_\_

**Risposte**



Usa la linea numerata per arrotondare ogni numero al centinaio più vicino.



**Risposte**

Es. 4.400

1. 900

2. 800

3. 9.700

4. 9.000

5. 600

6. 9.900

7. 99.300

8. 90.000

9. 17.200

10. 60.500