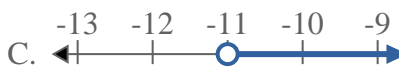
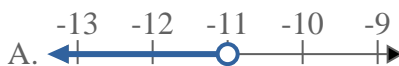
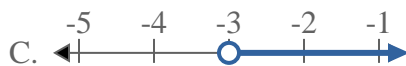
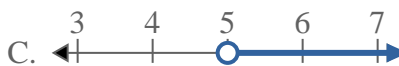
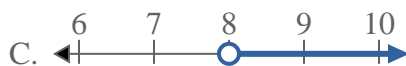
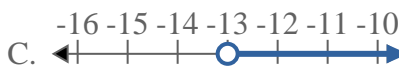


**Risolvi ogni problema.****Risposte**1) Quale opzione rappresenta correttamente $X > -5$ 2) Quale opzione rappresenta correttamente $X \geq 12$ 3) Quale opzione rappresenta correttamente $X \leq 20$ 4) Quale opzione rappresenta correttamente $X \geq -11$ 5) Quale opzione rappresenta correttamente $X > -3$ 6) Quale opzione rappresenta correttamente $X \geq 5$ 7) Quale opzione rappresenta correttamente $X \leq 8$ 8) Quale opzione rappresenta correttamente $X \leq -13$ 

1. _____

2. _____

3. _____

4. _____

5. _____

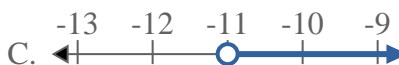
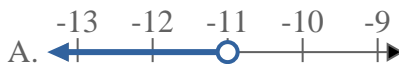
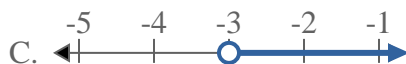
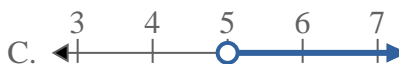
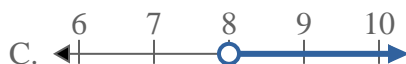
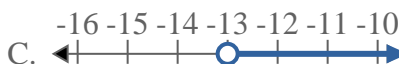
6. _____

7. _____

8. _____



Risolvi ogni problema.

Risposte1) Quale opzione rappresenta correttamente $X > -5$ 2) Quale opzione rappresenta correttamente $X \geq 12$ 3) Quale opzione rappresenta correttamente $X \leq 20$ 4) Quale opzione rappresenta correttamente $X \geq -11$ 5) Quale opzione rappresenta correttamente $X > -3$ 6) Quale opzione rappresenta correttamente $X \geq 5$ 7) Quale opzione rappresenta correttamente $X \leq 8$ 8) Quale opzione rappresenta correttamente $X \leq -13$ 1. **C** 2. **D** 3. **B** 4. **D** 5. **C** 6. **C** 7. **B** 8. **B**