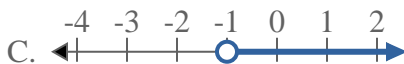
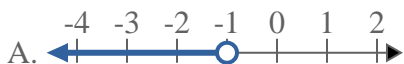
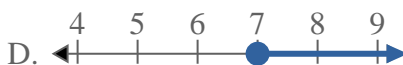
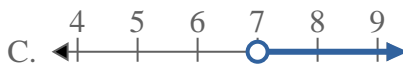
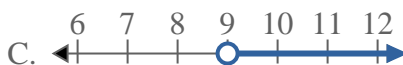
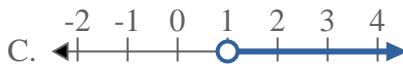
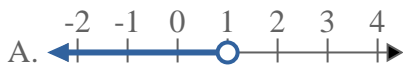
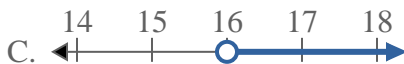
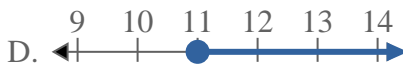
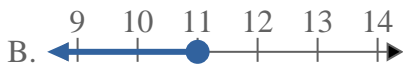
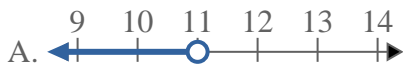


**Risolvi ogni problema.****Risposte**1) Quale opzione rappresenta correttamente $X \geq -1$ 2) Quale opzione rappresenta correttamente $X \leq 7$ 3) Quale opzione rappresenta correttamente $X > 14$ 4) Quale opzione rappresenta correttamente $X > 9$ 5) Quale opzione rappresenta correttamente $X < -14$ 6) Quale opzione rappresenta correttamente $X \geq 1$ 7) Quale opzione rappresenta correttamente $X \leq 16$ 8) Quale opzione rappresenta correttamente $X \leq 11$ 

1. _____

2. _____

3. _____

4. _____

5. _____

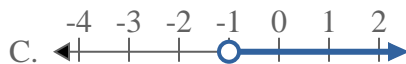
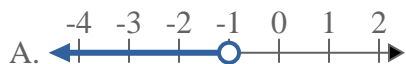
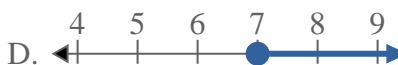
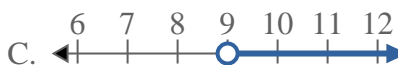
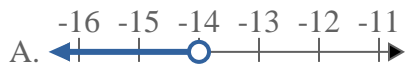
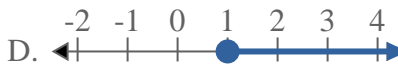
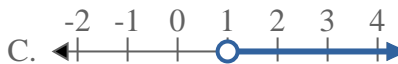

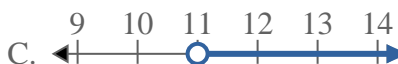
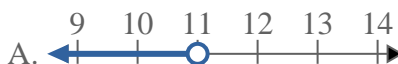
6. _____

7. _____

8. _____



Risolvi ogni problema.

Risposte1) Quale opzione rappresenta correttamente $X \geq -1$ 2) Quale opzione rappresenta correttamente $X \leq 7$ 3) Quale opzione rappresenta correttamente $X > 14$ 4) Quale opzione rappresenta correttamente $X > 9$ 5) Quale opzione rappresenta correttamente $X < -14$ 6) Quale opzione rappresenta correttamente $X \geq 1$ 7) Quale opzione rappresenta correttamente $X \leq 16$ 8) Quale opzione rappresenta correttamente $X \leq 11$ 1. **D** 2. **B** 3. **C** 4. **C** 5. **A** 6. **D** 7. **B** 8. **B**