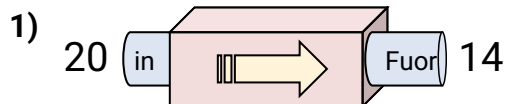
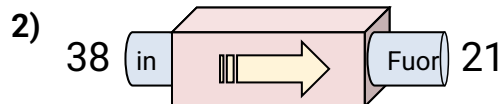
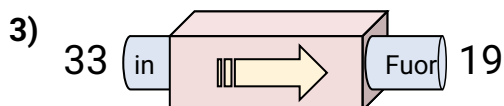


**Determina quale regola viene usata nelle seguenti funzioni.****Risposte**

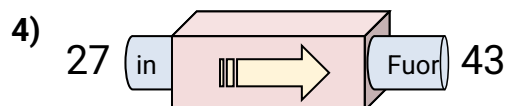
- A. Sottrai 6
- B. Aggiungi 2
- C. Sottrai 8
- D. Aggiungi 3



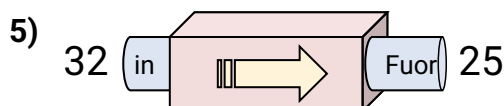
- A. Sottrai 18
- B. Aggiungi 15
- C. Sottrai 21
- D. Sottrai 17



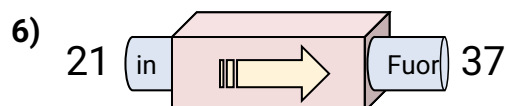
- A. Sottrai 14
- B. Aggiungi 14
- C. Sottrai 17
- D. Sottrai 13



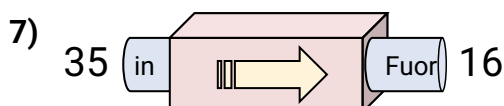
- A. Sottrai 20
- B. Aggiungi 13
- C. Aggiungi 16
- D. Sottrai 13



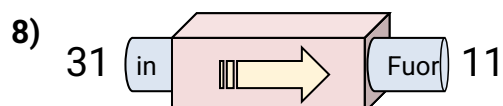
- A. Sottrai 7
- B. Aggiungi 11
- C. Sottrai 8
- D. Sottrai 4



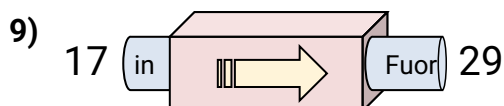
- A. Aggiungi 15
- B. Aggiungi 16
- C. Sottrai 18
- D. Sottrai 15



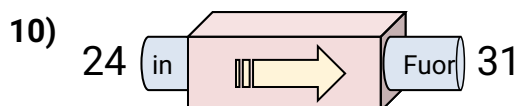
- A. Sottrai 15
- B. Sottrai 19
- C. Aggiungi 23
- D. Aggiungi 19



- A. Sottrai 24
- B. Sottrai 23
- C. Sottrai 20
- D. Aggiungi 19



- A. Aggiungi 12
- B. Aggiungi 14
- C. Aggiungi 8
- D. Sottrai 17

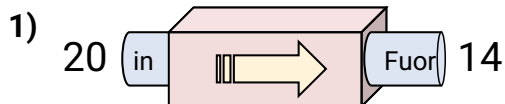


- A. Sottrai 6
- B. Aggiungi 4
- C. Aggiungi 9
- D. Aggiungi 7

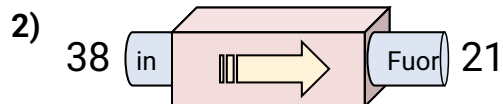
- 1. _____
- 2. _____
- 3. _____
- 4. _____
- 5. _____
- 6. _____
- 7. _____
- 8. _____
- 9. _____
- 10. _____



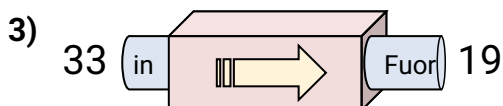
Determina quale regola viene usata nelle seguenti funzioni.

Risposte

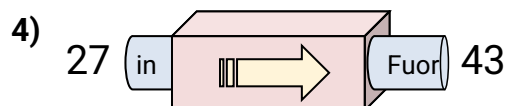
- A. Sottrai 6
- B. Aggiungi 2
- C. Sottrai 8
- D. Aggiungi 3



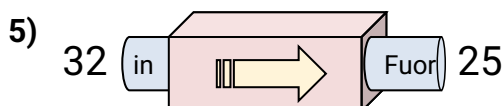
- A. Sottrai 18
- B. Aggiungi 15
- C. Sottrai 21
- D. Sottrai 17



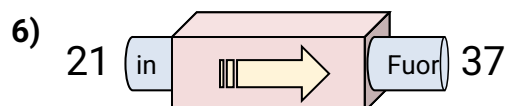
- A. Sottrai 14
- B. Aggiungi 14
- C. Sottrai 17
- D. Sottrai 13



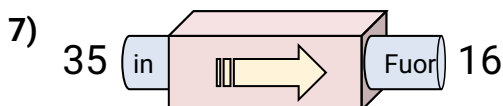
- A. Sottrai 20
- B. Aggiungi 13
- C. Aggiungi 16
- D. Sottrai 13



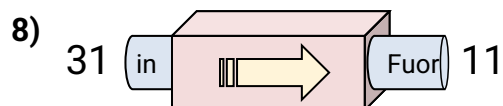
- A. Sottrai 7
- B. Aggiungi 11
- C. Sottrai 8
- D. Sottrai 4



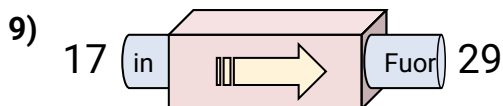
- A. Aggiungi 15
- B. Aggiungi 16
- C. Sottrai 18
- D. Sottrai 15



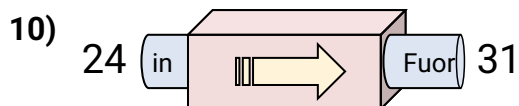
- A. Sottrai 15
- B. Sottrai 19
- C. Aggiungi 23
- D. Aggiungi 19



- A. Sottrai 24
- B. Sottrai 23
- C. Sottrai 20
- D. Aggiungi 19



- A. Aggiungi 12
- B. Aggiungi 14
- C. Aggiungi 8
- D. Sottrai 17



- A. Sottrai 6
- B. Aggiungi 4
- C. Aggiungi 9
- D. Aggiungi 7

- 1. **A**
- 2. **D**
- 3. **A**
- 4. **C**
- 5. **A**
- 6. **B**
- 7. **B**
- 8. **C**
- 9. **A**
- 10. **D**