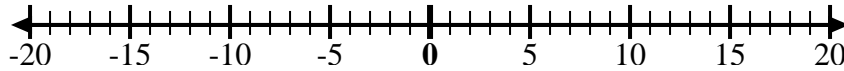
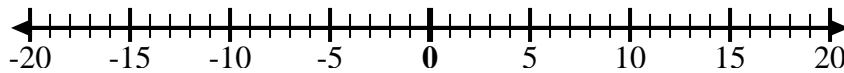
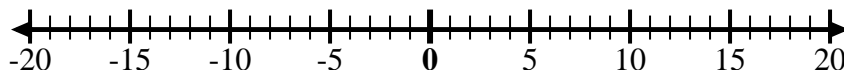
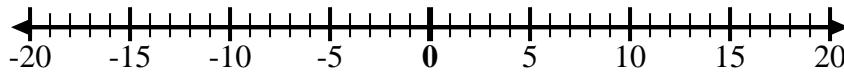
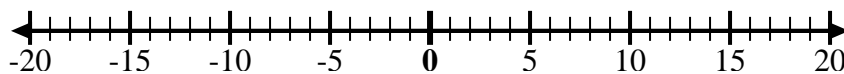
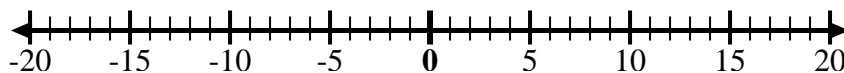
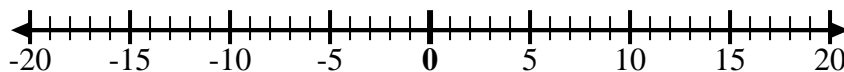
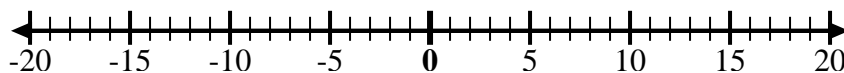
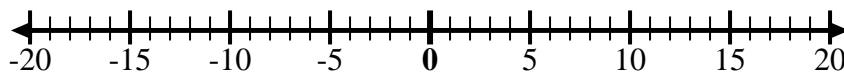




Usa le linee dei numeri per mostrare ogni espressione e risolvere.

Es) Inizia da 9 e
aggiungi -41) Inizia da 5 e
aggiungi -112) Inizia da 2 e
aggiungi -83) Inizia da -5 e
aggiungi -44) Inizia da 0 e
aggiungi 85) Inizia da 5 e
aggiungi -86) Inizia da -7 e
aggiungi 157) Inizia da -9 e
aggiungi 88) Inizia da -2 e
aggiungi -69) Inizia da -5 e
aggiungi 510) Inizia da -1 e
aggiungi -811) Inizia da -1 e
aggiungi 712) Inizia da -10 e
aggiungi 14**Risposte**Es. $9 + -4 = 5$

1. _____

2. _____

3. _____

4. _____

5. _____

6. _____

7. _____

8. _____

9. _____

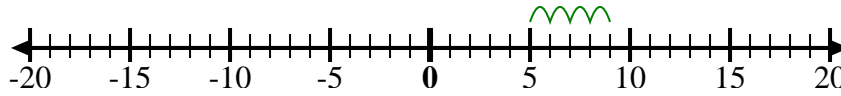
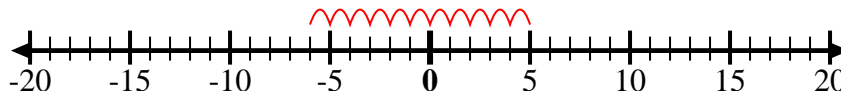
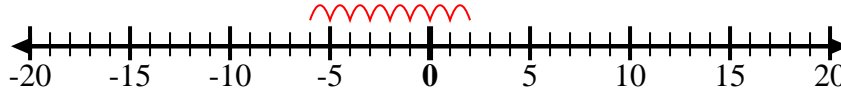
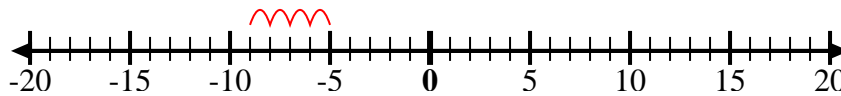
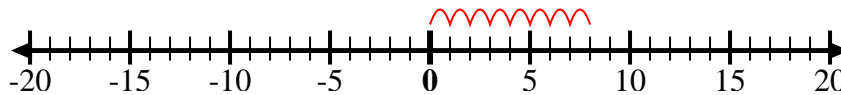
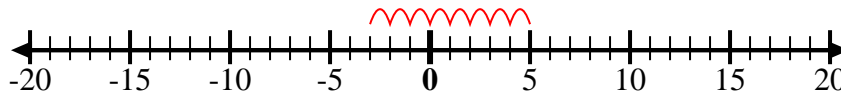
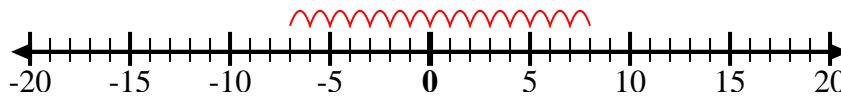
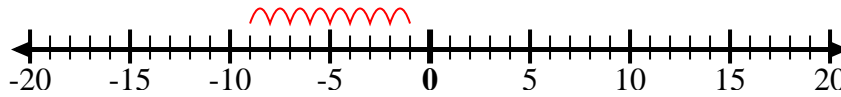
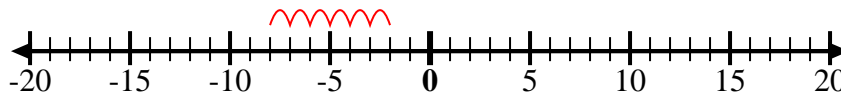
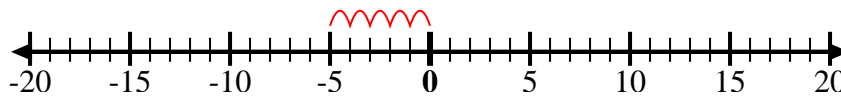
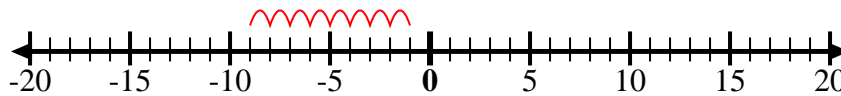
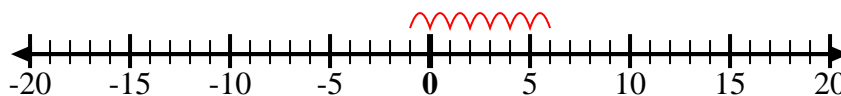
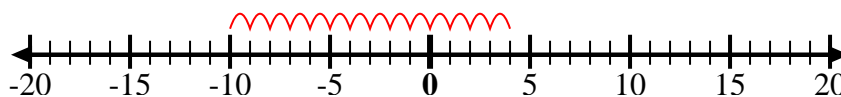
10. _____

11. _____

12. _____



Usa le linee dei numeri per mostrare ogni espressione e risolvere.

Es) Inizia da 9 e
aggiungi -41) Inizia da 5 e
aggiungi -112) Inizia da 2 e
aggiungi -83) Inizia da -5 e
aggiungi -44) Inizia da 0 e
aggiungi 85) Inizia da 5 e
aggiungi -86) Inizia da -7 e
aggiungi 157) Inizia da -9 e
aggiungi 88) Inizia da -2 e
aggiungi -69) Inizia da -5 e
aggiungi 510) Inizia da -1 e
aggiungi -811) Inizia da -1 e
aggiungi 712) Inizia da -10 e
aggiungi 14**Risposte**

Es. $9 + -4 = 5$

1. $5 + -11 = -6$

2. $2 + -8 = -6$

3. $-5 + -4 = -9$

4. $0 + 8 = 8$

5. $5 + -8 = -3$

6. $-7 + 15 = 8$

7. $-9 + 8 = -1$

8. $-2 + -6 = -8$

9. $-5 + 5 = 0$

10. $-1 + -8 = -9$

11. $-1 + 7 = 6$

12. $-10 + 14 = 4$