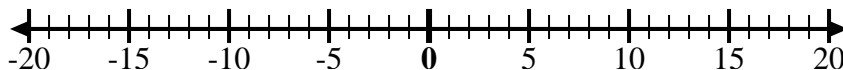
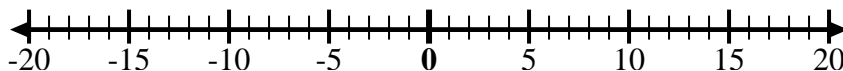
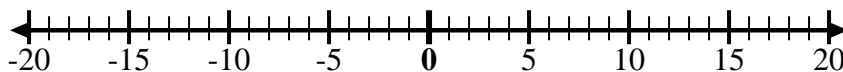
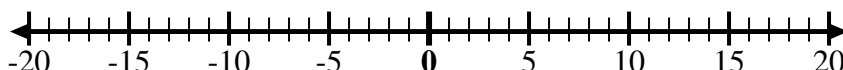
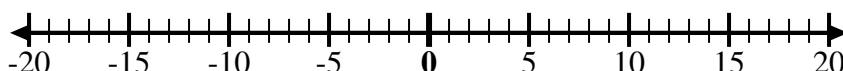
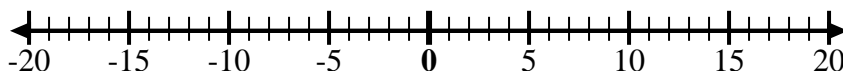
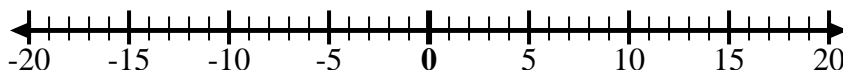
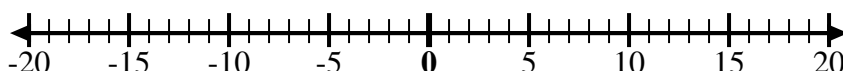
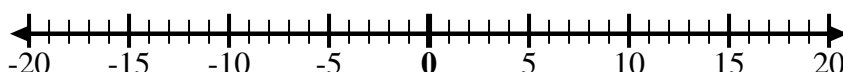




Usa le linee dei numeri per mostrare ogni espressione e risolvere.

Es) Inizia da 4 e  
aggiungi -81) Inizia da -9 e  
aggiungi 52) Inizia da -6 e  
aggiungi -43) Inizia da -5 e  
aggiungi 44) Inizia da -7 e  
aggiungi -25) Inizia da 9 e  
aggiungi -126) Inizia da 7 e  
aggiungi -37) Inizia da 1 e  
aggiungi -118) Inizia da -2 e  
aggiungi -39) Inizia da -3 e  
aggiungi -310) Inizia da -5 e  
aggiungi 211) Inizia da -10 e  
aggiungi 612) Inizia da -4 e  
aggiungi 8**Risposte**

Es.  $4 + -8 = -4$

1. \_\_\_\_\_

2. \_\_\_\_\_

3. \_\_\_\_\_

4. \_\_\_\_\_

5. \_\_\_\_\_

6. \_\_\_\_\_

7. \_\_\_\_\_

8. \_\_\_\_\_

9. \_\_\_\_\_

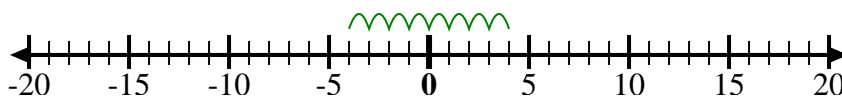
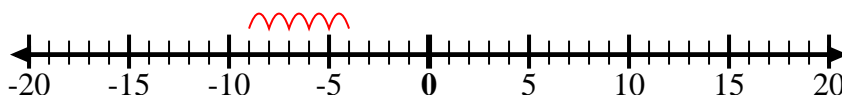
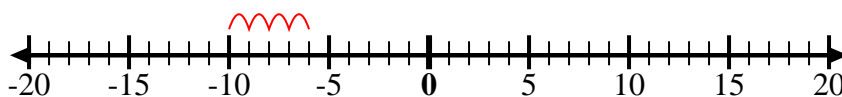
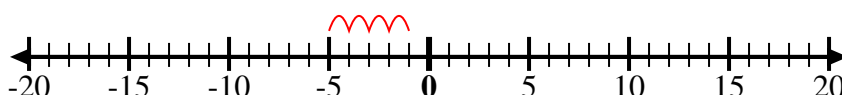
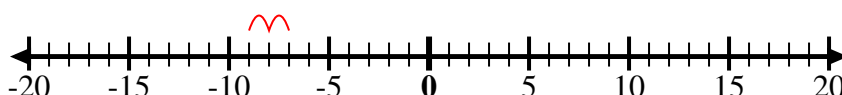
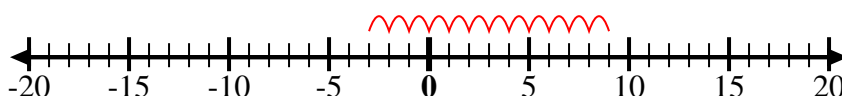
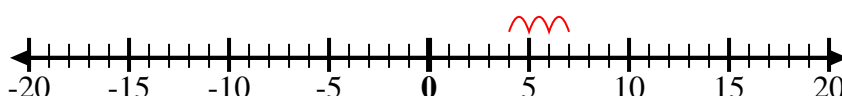
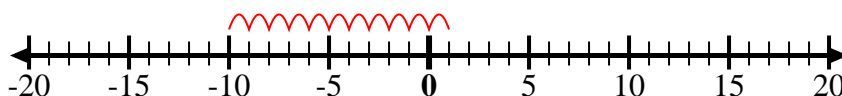
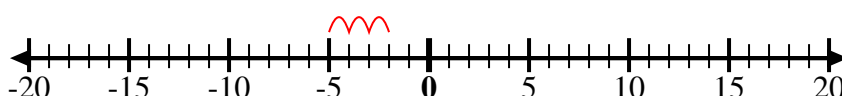
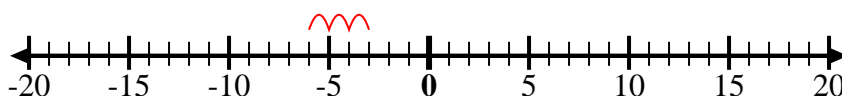
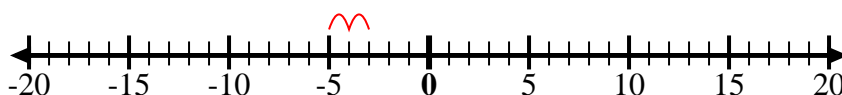
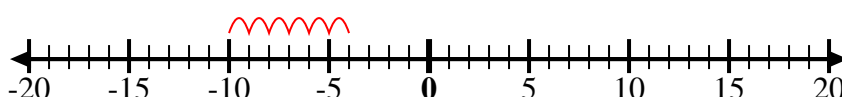
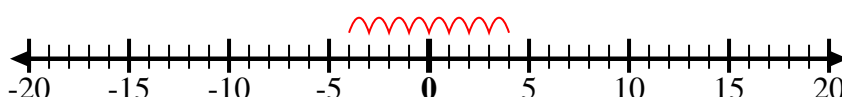
10. \_\_\_\_\_

11. \_\_\_\_\_

12. \_\_\_\_\_



Usa le linee dei numeri per mostrare ogni espressione e risolvere.

Es) Inizia da 4 e  
aggiungi -81) Inizia da -9 e  
aggiungi 52) Inizia da -6 e  
aggiungi -43) Inizia da -5 e  
aggiungi 44) Inizia da -7 e  
aggiungi -25) Inizia da 9 e  
aggiungi -126) Inizia da 7 e  
aggiungi -37) Inizia da 1 e  
aggiungi -118) Inizia da -2 e  
aggiungi -39) Inizia da -3 e  
aggiungi -310) Inizia da -5 e  
aggiungi 211) Inizia da -10 e  
aggiungi 612) Inizia da -4 e  
aggiungi 8**Risposte**

Es.  $4 + -8 = -4$

1.  $-9 + 5 = -4$

2.  $-6 + -4 = -10$

3.  $-5 + 4 = -1$

4.  $-7 + -2 = -9$

5.  $9 + -12 = -3$

6.  $7 + -3 = 4$

7.  $1 + -11 = -10$

8.  $-2 + -3 = -5$

9.  $-3 + -3 = -6$

10.  $-5 + 2 = -3$

11.  $-10 + 6 = -4$

12.  $-4 + 8 = 4$