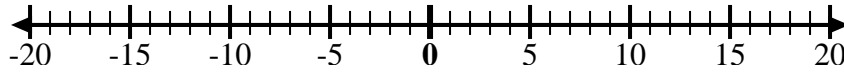
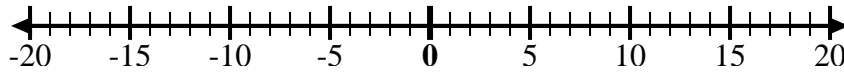
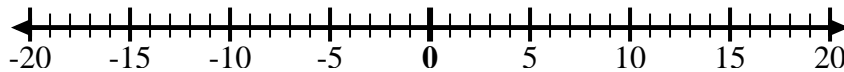
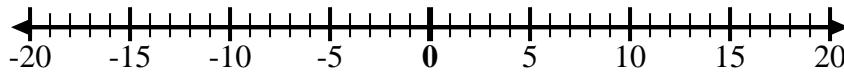
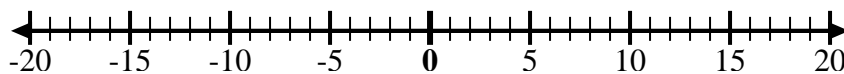
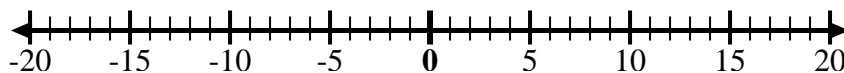
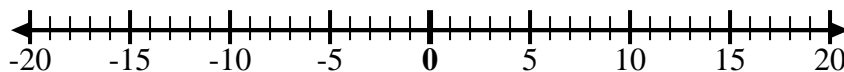
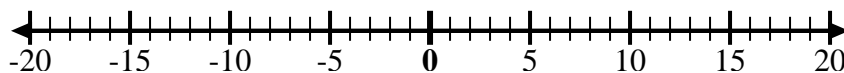
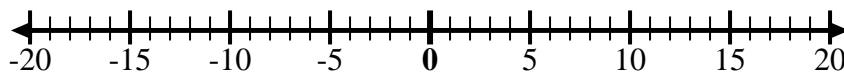
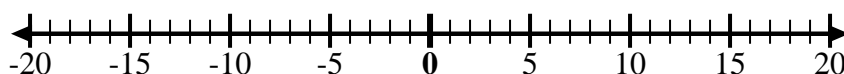




Usa le linee dei numeri per mostrare ogni espressione e risolvere.

Es) Inizia da -4 e  
aggiungi -61) Inizia da 7 e  
aggiungi -72) Inizia da -4 e  
aggiungi 93) Inizia da 4 e  
aggiungi -144) Inizia da -2 e  
aggiungi -75) Inizia da -3 e  
aggiungi 76) Inizia da 1 e  
aggiungi -117) Inizia da -6 e  
aggiungi -38) Inizia da 10 e  
aggiungi -19) Inizia da 0 e  
aggiungi -510) Inizia da 0 e  
aggiungi -1011) Inizia da 6 e  
aggiungi -1112) Inizia da -5 e  
aggiungi 10**Risposte**Es.  $-4 + -6 = -10$ 

1. \_\_\_\_\_

2. \_\_\_\_\_

3. \_\_\_\_\_

4. \_\_\_\_\_

5. \_\_\_\_\_

6. \_\_\_\_\_

7. \_\_\_\_\_

8. \_\_\_\_\_

9. \_\_\_\_\_

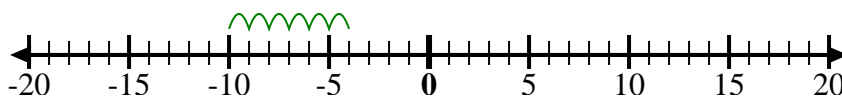
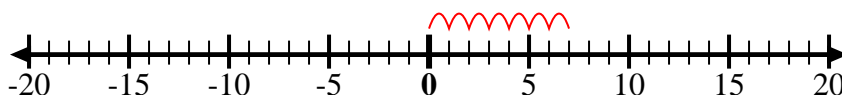
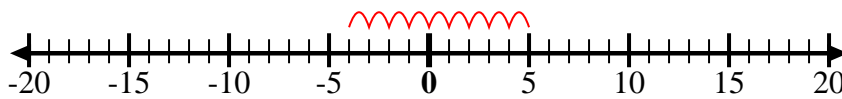
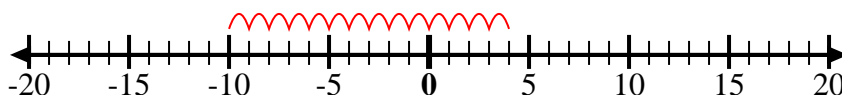
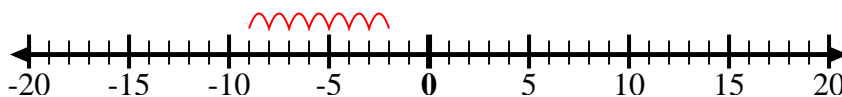
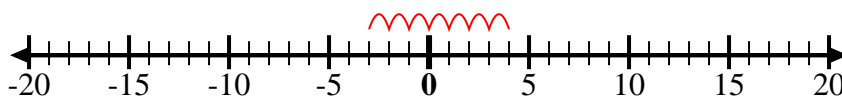
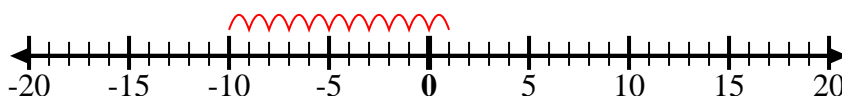
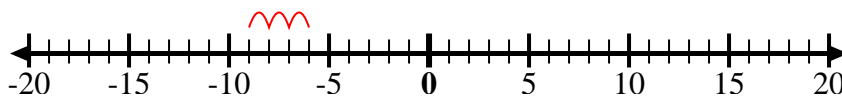
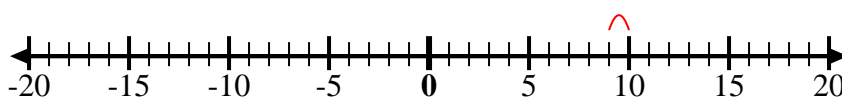
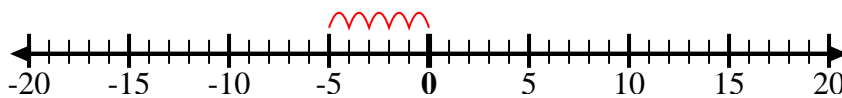
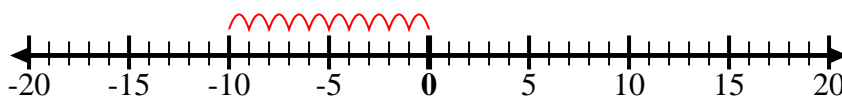
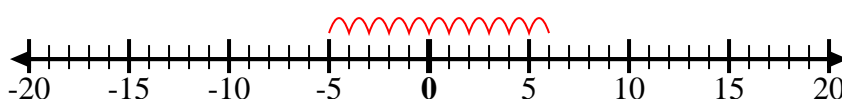
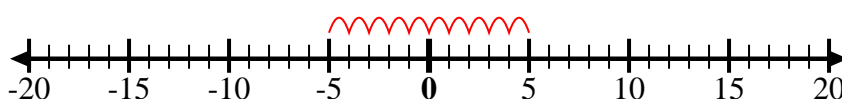
10. \_\_\_\_\_

11. \_\_\_\_\_

12. \_\_\_\_\_



Usa le linee dei numeri per mostrare ogni espressione e risolvere.

Es) Inizia da -4 e  
aggiungi -61) Inizia da 7 e  
aggiungi -72) Inizia da -4 e  
aggiungi 93) Inizia da 4 e  
aggiungi -144) Inizia da -2 e  
aggiungi -75) Inizia da -3 e  
aggiungi 76) Inizia da 1 e  
aggiungi -117) Inizia da -6 e  
aggiungi -38) Inizia da 10 e  
aggiungi -19) Inizia da 0 e  
aggiungi -510) Inizia da 0 e  
aggiungi -1011) Inizia da 6 e  
aggiungi -1112) Inizia da -5 e  
aggiungi 10**Risposte**

Es.  $-4 + -6 = -10$

1.  $7 + -7 = 0$

2.  $-4 + 9 = 5$

3.  $4 + -14 = -10$

4.  $-2 + -7 = -9$

5.  $-3 + 7 = 4$

6.  $1 + -11 = -10$

7.  $-6 + -3 = -9$

8.  $10 + -1 = 9$

9.  $0 + -5 = -5$

10.  $0 + -10 = -10$

11.  $6 + -11 = -5$

12.  $-5 + 10 = 5$