




Risolvi ogni problema.


Risposte

1) Quale lettera mostra meglio -28?



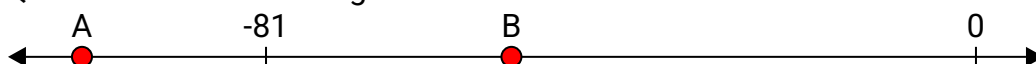
1. _____

2) Quale lettera mostra meglio -111?



2. _____

3) Quale lettera mostra meglio -53?




3. _____

4) Quale lettera mostra meglio -14?




4. _____

5) Quale lettera mostra meglio -117?



5. _____

6) Quale lettera mostra meglio -30?




6. _____

7) Quale lettera mostra meglio -27?




7. _____

8) Quale lettera mostra meglio -19?



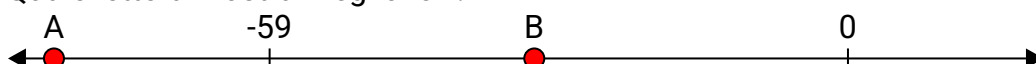
8. _____

9) Quale lettera mostra meglio -15?



9. _____

10) Quale lettera mostra meglio -32?




10. _____




Risolvi ogni problema.

Risposte

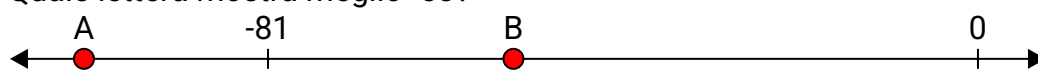
1) Quale lettera mostra meglio -28?

1. **B**


2) Quale lettera mostra meglio -111?

2. **A**


3) Quale lettera mostra meglio -53?

3. **B**


4) Quale lettera mostra meglio -14?

4. **B**


5) Quale lettera mostra meglio -117?

5. **A**


6) Quale lettera mostra meglio -30?

6. **B**


7) Quale lettera mostra meglio -27?

7. **B**

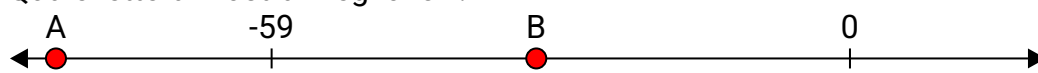
8) Quale lettera mostra meglio -19?

8. **B**

9) Quale lettera mostra meglio -15?

9. **B**

10) Quale lettera mostra meglio -32?

10. **B**