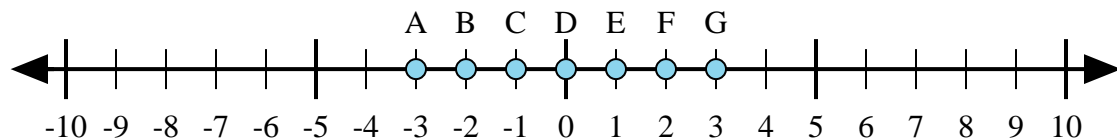




Determina quale lettera nella linea dei numeri rappresenta meglio la risposta a ciascun problema.



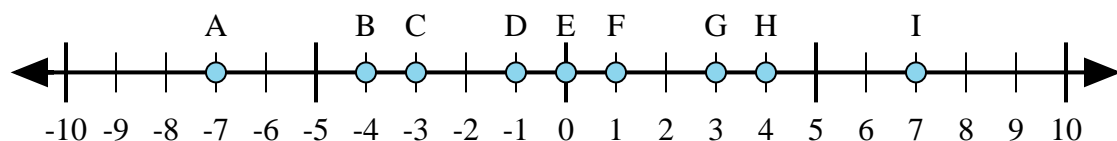
1) $(-2) + 1 =$

2) $(-1) + 2 =$

3) $1 + (-2) =$

4) $(-1) + (-2) =$

5) $1 + 2 =$



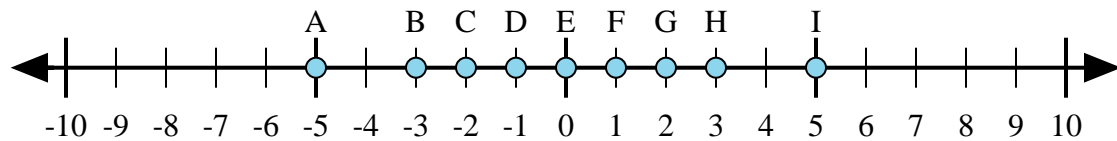
6) $(-4) + 3 =$

7) $4 + (-3) =$

8) $(-3) + 4 =$

9) $3 + (-4) =$

10) $(-4) + (-3) =$



11) $2 + (-3) =$

12) $2 + 3 =$

13) $(-3) + 2 =$

14) $3 + (-2) =$

15) $(-2) + (-3) =$

Risposte

1. _____

2. _____

3. _____

4. _____

5. _____

6. _____

7. _____

8. _____

9. _____

10. _____

11. _____

12. _____

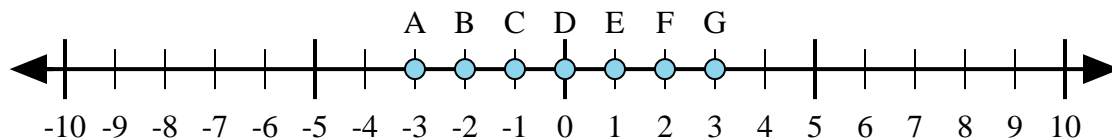
13. _____

14. _____

15. _____



Determina quale lettera nella linea dei numeri rappresenta meglio la risposta a ciascun problema.



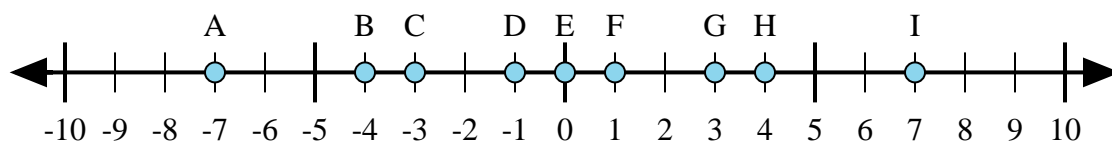
1) $(-2) + 1 =$

2) $(-1) + 2 =$

3) $1 + (-2) =$

4) $(-1) + (-2) =$

5) $1 + 2 =$



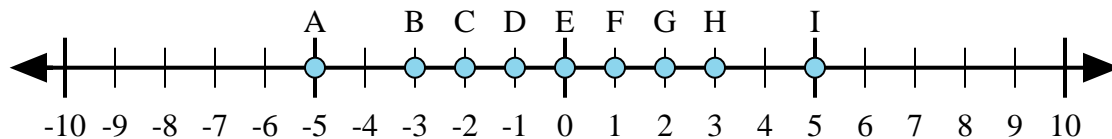
6) $(-4) + 3 =$

7) $4 + (-3) =$

8) $(-3) + 4 =$

9) $3 + (-4) =$

10) $(-4) + (-3) =$



11) $2 + (-3) =$

12) $2 + 3 =$

13) $(-3) + 2 =$

14) $3 + (-2) =$

15) $(-2) + (-3) =$

Risposte1. **C** 2. **E** 3. **C** 4. **A** 5. **G** 6. **D** 7. **F** 8. **F** 9. **D** 10. **A** 11. **D** 12. **I** 13. **D** 14. **F** 15. **A**