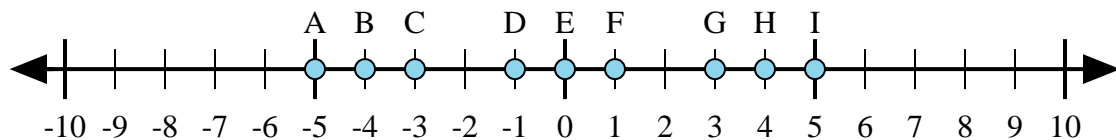




Determina quale lettera nella linea dei numeri rappresenta meglio la risposta a ciascun problema.



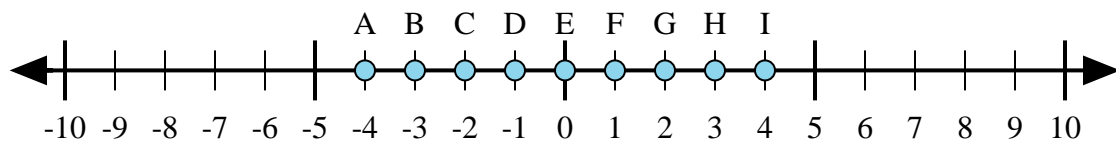
1) $4 + (-1) =$

2) $4 + 1 =$

3) $1 + (-4) =$

4) $(-4) + (-1) =$

5) $(-4) + 1 =$



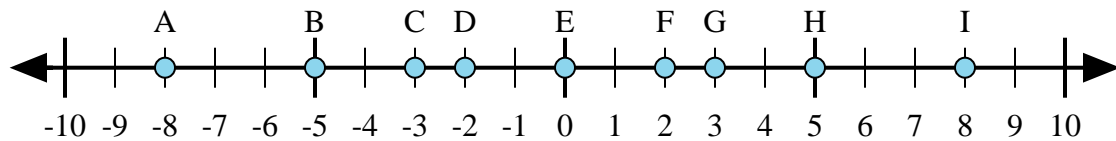
6) $(-3) + (-1) =$

7) $(-3) + 1 =$

8) $3 + 1 =$

9) $1 + (-3) =$

10) $(-1) + 3 =$



11) $3 + (-5) =$

12) $(-5) + 3 =$

13) $5 + 3 =$

14) $(-3) + 5 =$

15) $(-5) + (-3) =$

Risposte

1. _____

2. _____

3. _____

4. _____

5. _____

6. _____

7. _____

8. _____

9. _____

10. _____

11. _____

12. _____

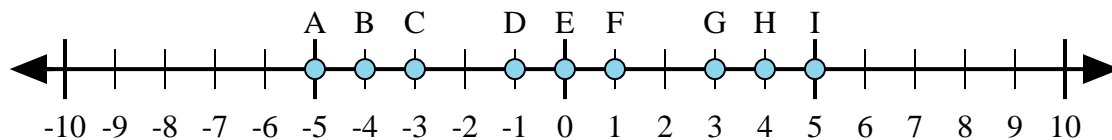
13. _____

14. _____

15. _____



Determina quale lettera nella linea dei numeri rappresenta meglio la risposta a ciascun problema.



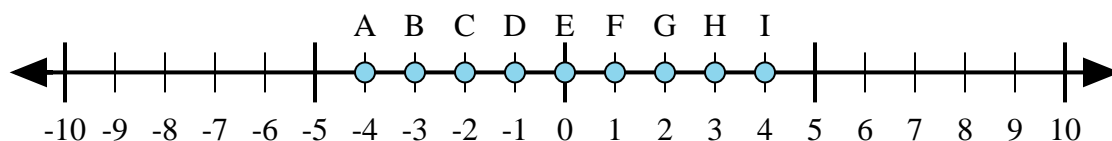
1) $4 + (-1) =$

2) $4 + 1 =$

3) $1 + (-4) =$

4) $(-4) + (-1) =$

5) $(-4) + 1 =$



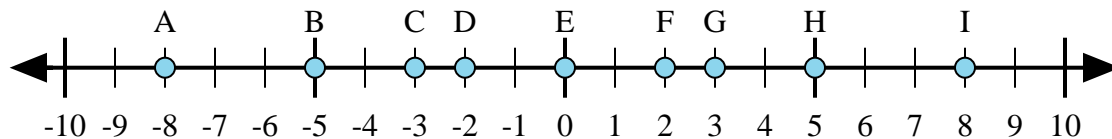
6) $(-3) + (-1) =$

7) $(-3) + 1 =$

8) $3 + 1 =$

9) $1 + (-3) =$

10) $(-1) + 3 =$



11) $3 + (-5) =$

12) $(-5) + 3 =$

13) $5 + 3 =$

14) $(-3) + 5 =$

15) $(-5) + (-3) =$

Risposte1. **G** 2. **I** 3. **C** 4. **A** 5. **C** 6. **A** 7. **C** 8. **I** 9. **C** 10. **G** 11. **D** 12. **D** 13. **I** 14. **F** 15. **A**