



Risolvi ogni operazione. Usa la linea numerata se necessario.

Risposte

1) $(-12) - (-8) =$ _____



1. _____

2) $(-7) + (-5) =$ _____



2. _____

3) $13 + (-4) =$ _____



3. _____

4) $(-6) + 7 =$ _____



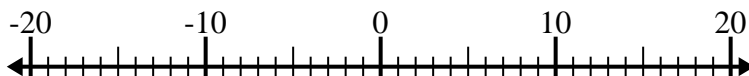
4. _____

5) $9 + (-10) =$ _____



5. _____

6) $(-2) + 4 =$ _____



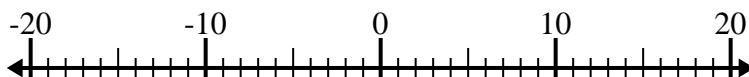
6. _____

7) $(-6) - (-15) =$ _____



7. _____

8) $(-11) - 3 =$ _____



8. _____

9) $(-5) - 2 =$ _____



9. _____

10) $11 - (-4) =$ _____

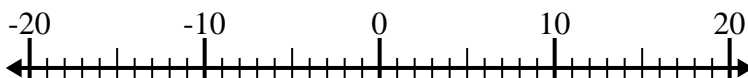


10. _____

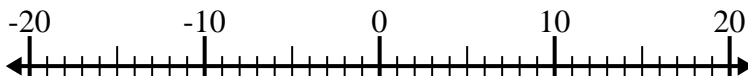


Risolvi ogni operazione. Usa la linea numerata se necessario.

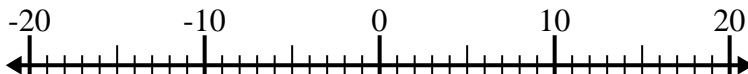
1) $(-12) - (-8) = \underline{-4}$



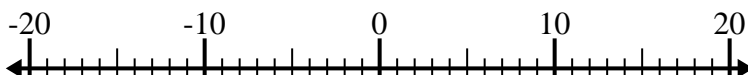
2) $(-7) + (-5) = \underline{-12}$



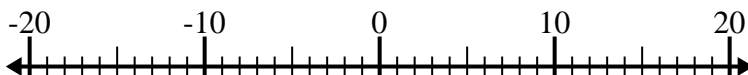
3) $13 + (-4) = \underline{9}$



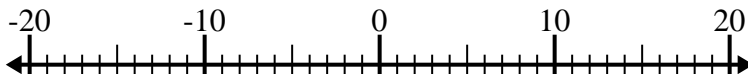
4) $(-6) + 7 = \underline{1}$



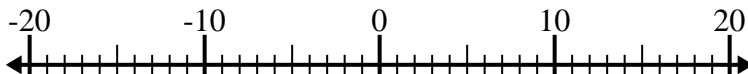
5) $9 + (-10) = \underline{-1}$



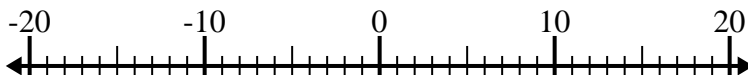
6) $(-2) + 4 = \underline{2}$



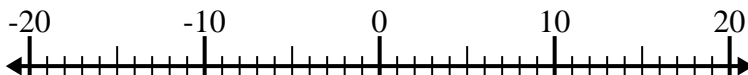
7) $(-6) - (-15) = \underline{9}$



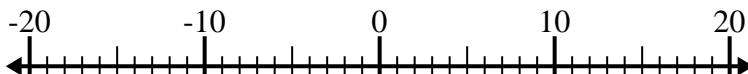
8) $(-11) - 3 = \underline{-14}$



9) $(-5) - 2 = \underline{-7}$



10) $11 - (-4) = \underline{15}$

**Risposte**1. **-4**2. **-12**3. **9**4. **1**5. **-1**6. **2**7. **9**8. **-14**9. **-7**10. **15**