




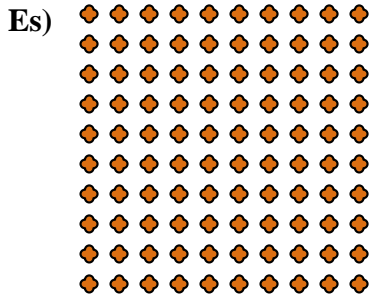




Scrivi ogni blocco sotto forma di moltiplicazione e calcola il risultato.



Risposte

Es. 10 × 10 = 100

1. 10 × 7 = 70

2. 4 × 7 = 28

3. 10 × 6 = 60

4. 8 × 2 = 16

5. 3 × 6 = 18

6. 6 × 2 = 12

7. 5 × 2 = 10

8. 5 × 7 = 35

9. 5 × 5 = 25

10. 9 × 9 = 81

11. 3 × 8 = 24