



Determina come scriveresti ogni gruppo sotto forma di moltiplicazione.

**Risposte**

Es)

Es.  $7 \times 7 = 49$

1)

1. \_\_\_\_\_

2)

2. \_\_\_\_\_

3)

3. \_\_\_\_\_

4)

4. \_\_\_\_\_

5)

5. \_\_\_\_\_

6)

6. \_\_\_\_\_

7)


7. \_\_\_\_\_

8)

8. \_\_\_\_\_

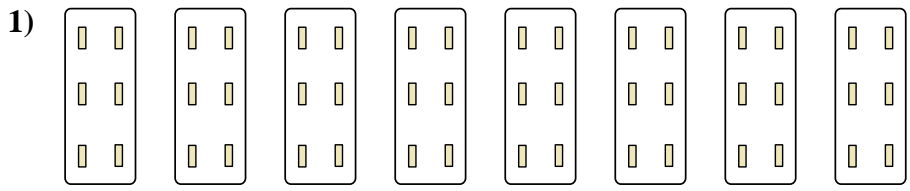


Determina come scriveresti ogni gruppo sotto forma di moltiplicazione.

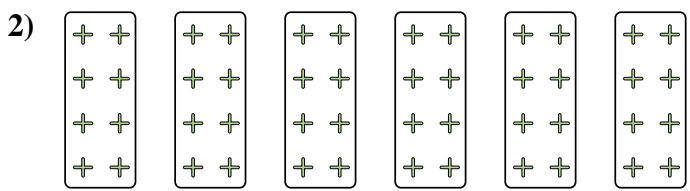


**Risposte**

Es.  $7 \times 7 = 49$




1.  $8 \times 6 = 48$



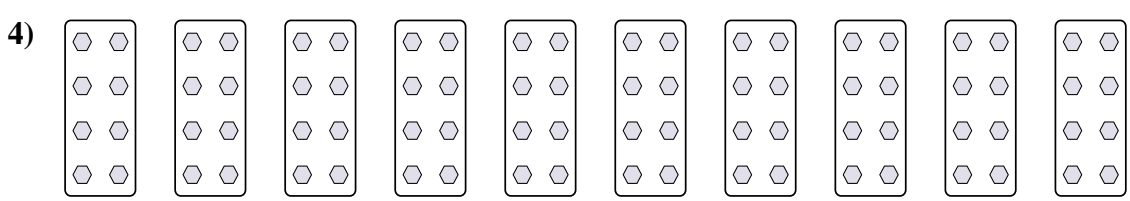
2.  $6 \times 8 = 48$

3.  $5 \times 2 = 10$



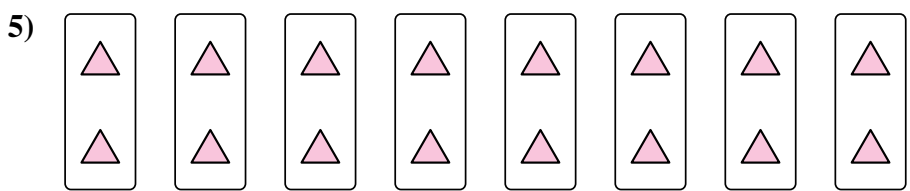
4.  $10 \times 8 = 80$

5.  $8 \times 2 = 16$



6.  $9 \times 10 = 90$

7.  $3 \times 8 = 24$



8.  $8 \times 9 = 72$

