


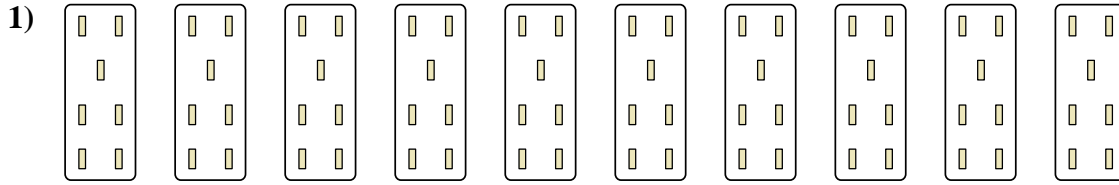


Determina come scriveresti ogni gruppo sotto forma di moltiplicazione.

Risposte



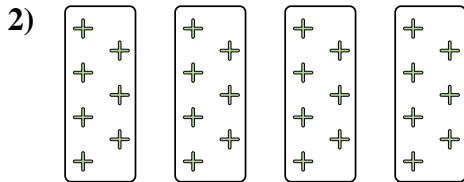
Es. $10 \times 10 = 100$



1. _____


2. _____

3. _____



4. _____



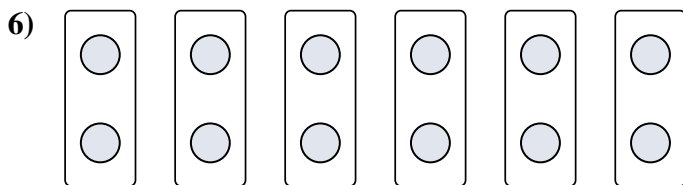
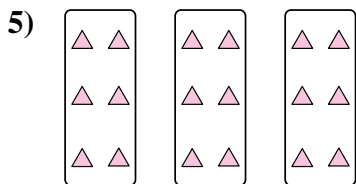
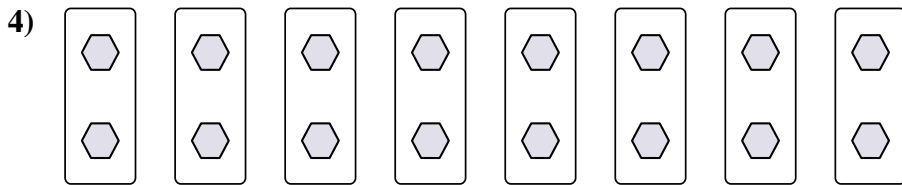
5. _____



6. _____

7. _____

8. _____





Determina come scriveresti ogni gruppo sotto forma di moltiplicazione.

Es)

1)

2)

3)

4)

5)

6)

7)

8)

Risposte

Es. $10 \times 10 = 100$

1. $10 \times 7 = 70$

2. $4 \times 7 = 28$

3. $10 \times 6 = 60$

4. $8 \times 2 = 16$

5. $3 \times 6 = 18$

6. $6 \times 2 = 12$

7. $5 \times 2 = 10$

8. $5 \times 7 = 35$