





Usa le griglie fornite per risolvere ogni operazione.


1) $20 \times 24 =$




2) $20 \times 27 =$




3) $25 \times 20 =$




4) $23 \times 20 =$



5) $20 \times 26 =$



6) $20 \times 23 =$

**Risposte**

1. _____

2. _____

3. _____

4. _____

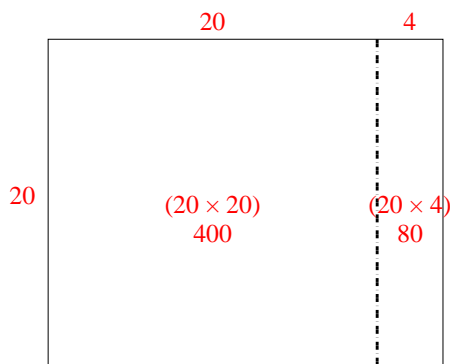
5. _____

6. _____

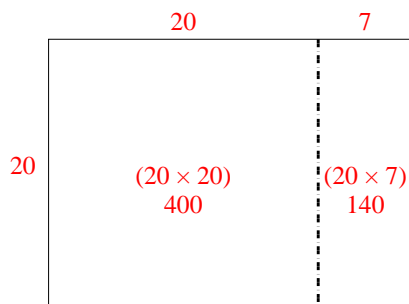


Usa le griglie fornite per risolvere ogni operazione.

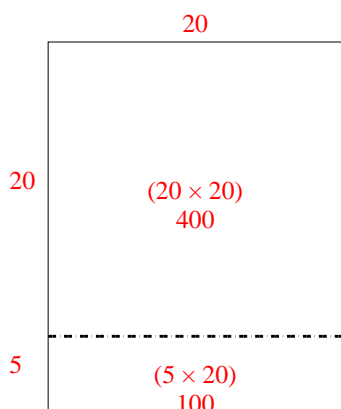
1) $20 \times 24 =$



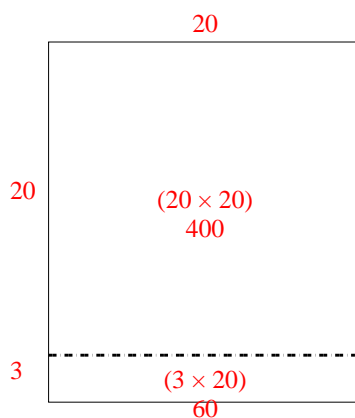
2) $20 \times 27 =$



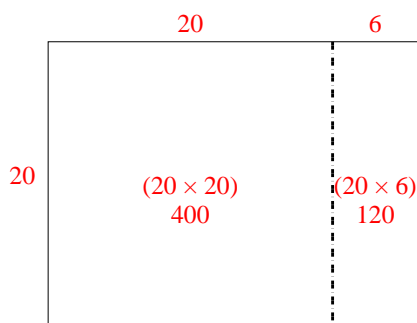
3) $25 \times 20 =$



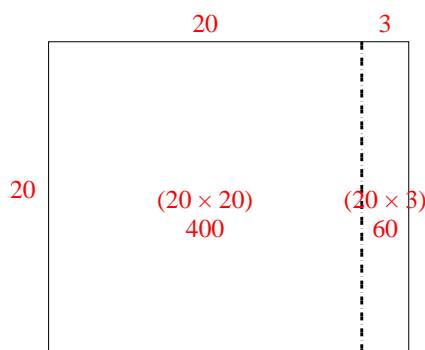
4) $23 \times 20 =$



5) $20 \times 26 =$



6) $20 \times 23 =$



Risposte

1. **480**

2. **540**

3. **500**

4. **460**

5. **520**

6. **460**