





Usa le griglie fornite per risolvere ogni operazione.


1)  $23 \times 20 =$




2)  $20 \times 28 =$




3)  $20 \times 21 =$




4)  $26 \times 20 =$



5)  $20 \times 22 =$



6)  $25 \times 20 =$



**Risposte**

1. \_\_\_\_\_

2. \_\_\_\_\_

3. \_\_\_\_\_

4. \_\_\_\_\_

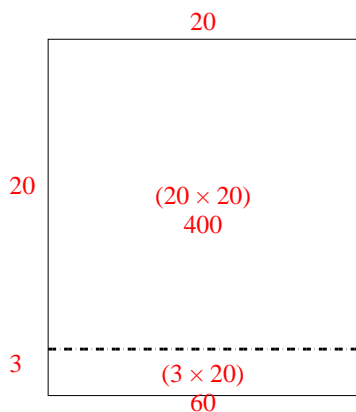
5. \_\_\_\_\_

6. \_\_\_\_\_

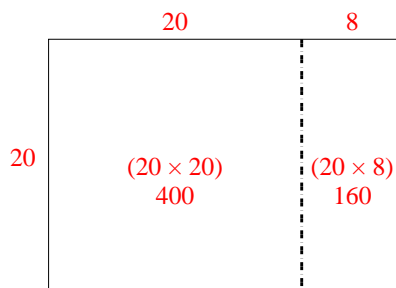


Usa le griglie fornite per risolvere ogni operazione.

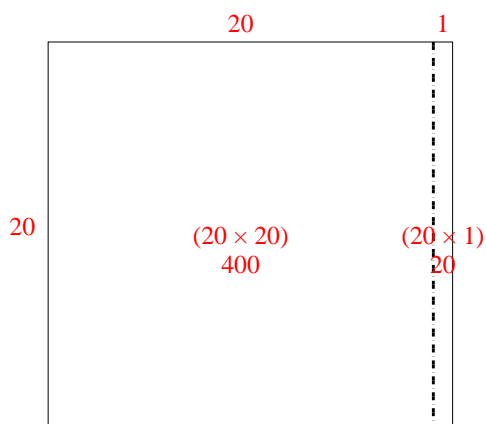
1)  $23 \times 20 =$



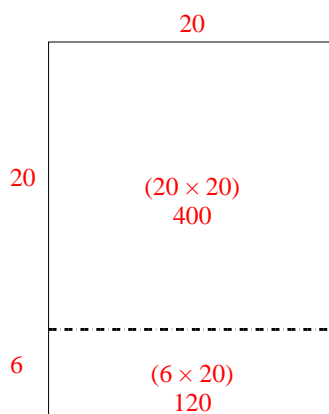
2)  $20 \times 28 =$



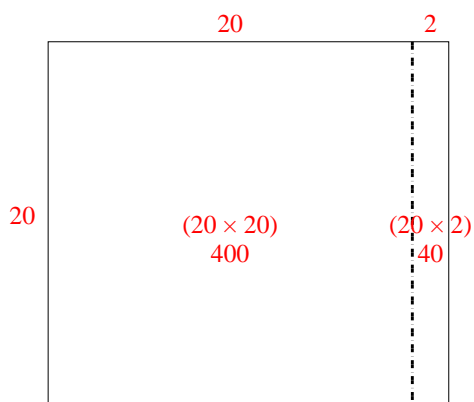
3)  $20 \times 21 =$



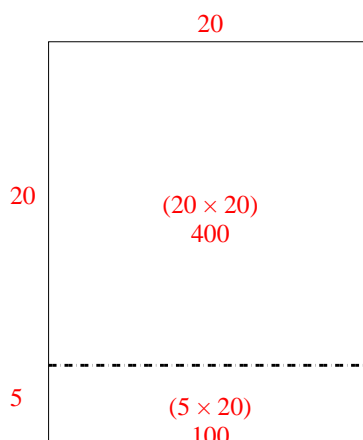
4)  $26 \times 20 =$



5)  $20 \times 22 =$



6)  $25 \times 20 =$



**Risposte**

1. 460

2. 560

3. 420

4. 520

5. 440

6. 500