



Usa le griglie fornite per risolvere ogni operazione.

1)  $43 \times 30 =$

2)  $32 \times 30 =$

3)  $20 \times 23 =$

4)  $25 \times 20 =$

5)  $20 \times 24 =$

6)  $22 \times 20 =$

**Risposte**

1. \_\_\_\_\_

2. \_\_\_\_\_

3. \_\_\_\_\_

4. \_\_\_\_\_

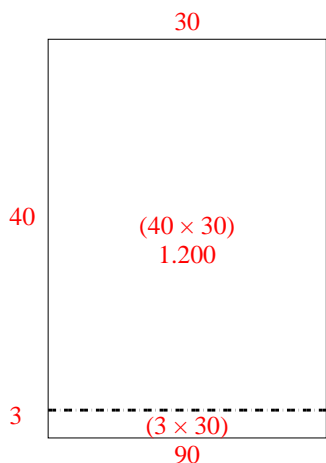
5. \_\_\_\_\_

6. \_\_\_\_\_

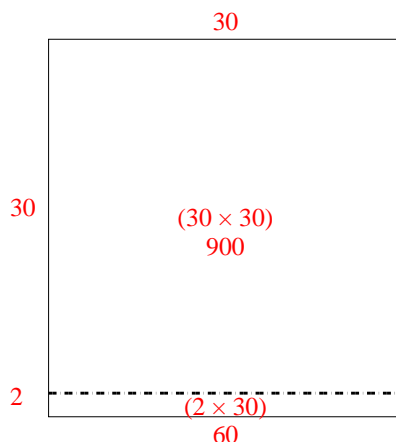


Usa le griglie fornite per risolvere ogni operazione.

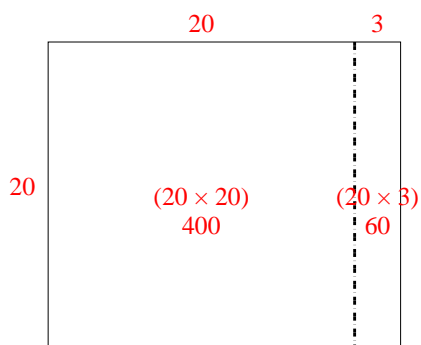
1)  $43 \times 30 =$



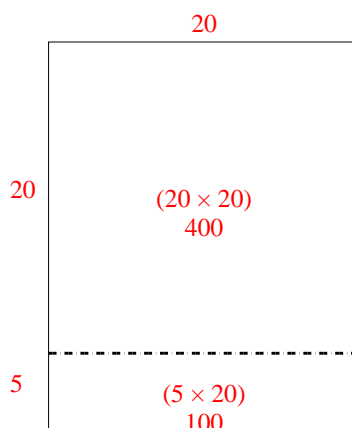
2)  $32 \times 30 =$



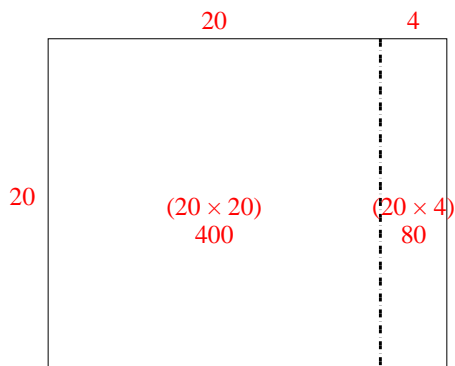
3)  $20 \times 23 =$



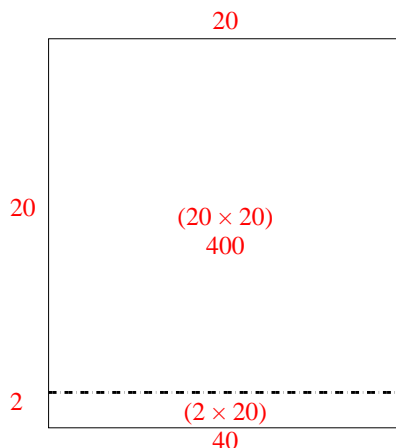
4)  $25 \times 20 =$



5)  $20 \times 24 =$



6)  $22 \times 20 =$



**Risposte**

1. **1.290**

2. **960**

3. **460**

4. **500**

5. **480**

6. **440**