





Usa le griglie fornite per risolvere ogni operazione.


1)  $33 \times 30 =$




2)  $20 \times 23 =$




3)  $20 \times 21 =$




4)  $20 \times 27 =$



5)  $20 \times 26 =$



6)  $29 \times 20 =$



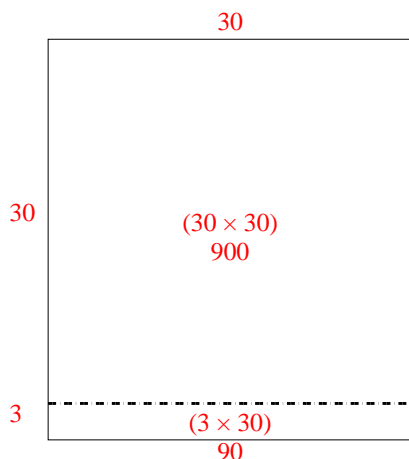
**Risposte**

- 1. \_\_\_\_\_
- 2. \_\_\_\_\_
- 3. \_\_\_\_\_
- 4. \_\_\_\_\_
- 5. \_\_\_\_\_
- 6. \_\_\_\_\_

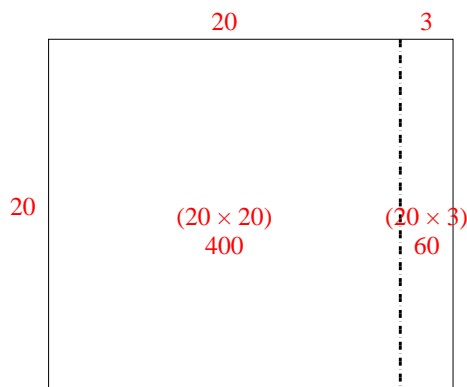


Usa le griglie fornite per risolvere ogni operazione.

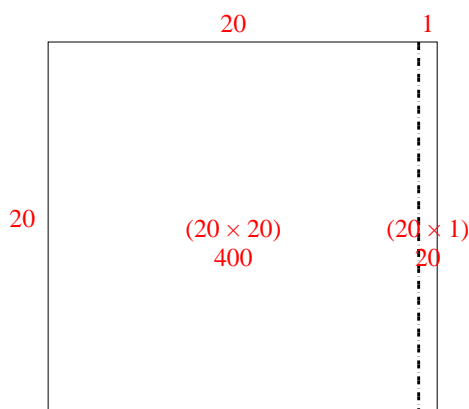
1)  $33 \times 30 =$



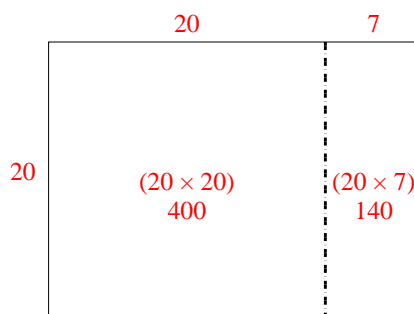
2)  $20 \times 23 =$



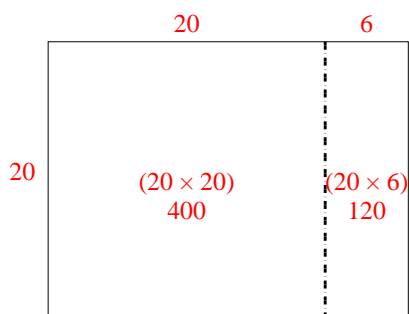
3)  $20 \times 21 =$



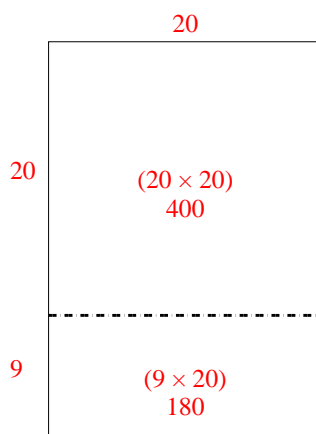
4)  $20 \times 27 =$



5)  $20 \times 26 =$



6)  $29 \times 20 =$



**Risposte**

1. 990

2. 460

3. 420

4. 540

5. 520

6. 580